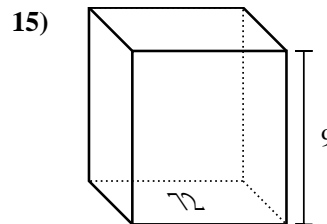
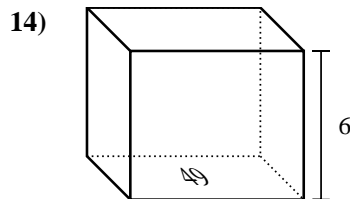
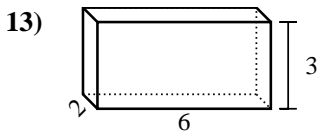
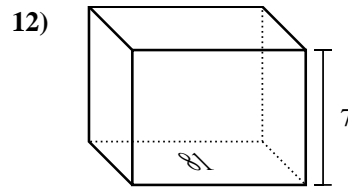
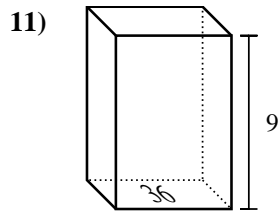
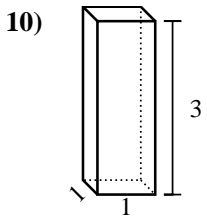
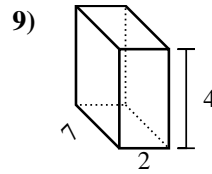
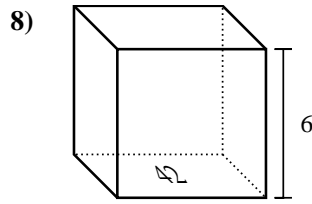
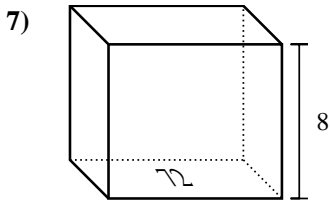
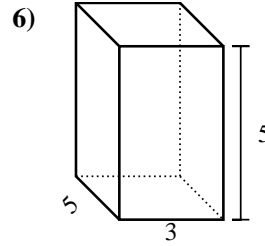
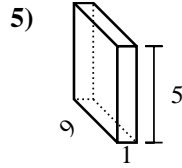
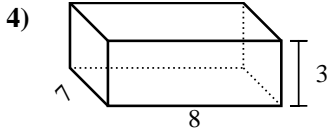
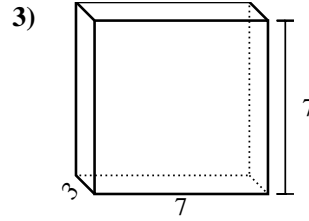
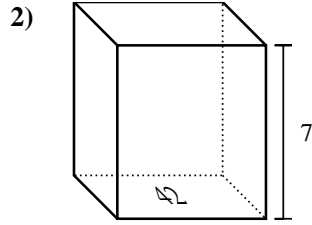
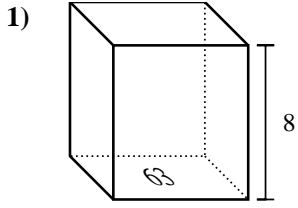




Find the volume of each rectangular prism. Units are in cm (not to scale). Remember  $V = BH$  and  $V = L \times W \times H$

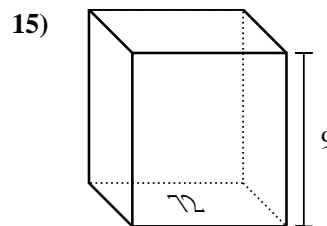
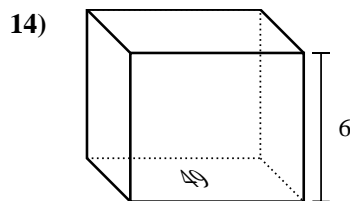
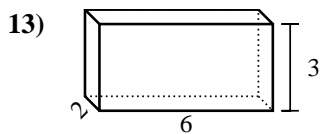
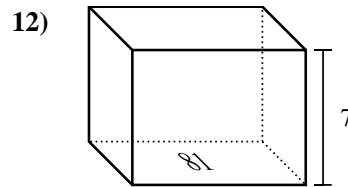
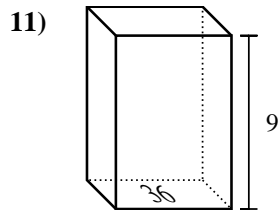
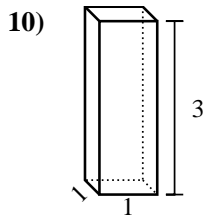
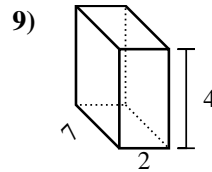
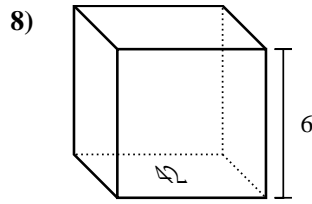
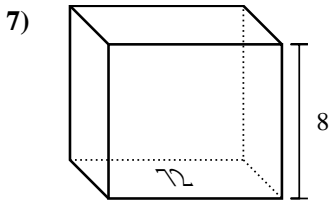
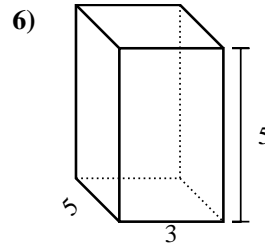
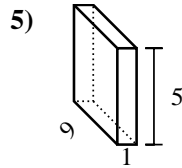
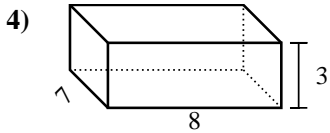
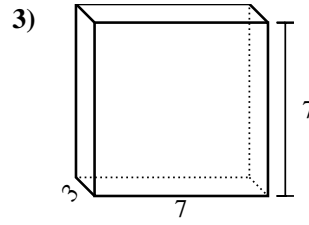
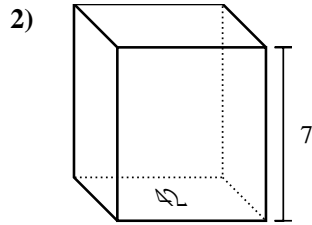
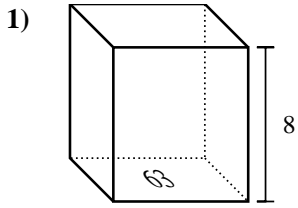
Answers



1. \_\_\_\_\_
2. \_\_\_\_\_
3. \_\_\_\_\_
4. \_\_\_\_\_
5. \_\_\_\_\_
6. \_\_\_\_\_
7. \_\_\_\_\_
8. \_\_\_\_\_
9. \_\_\_\_\_
10. \_\_\_\_\_
11. \_\_\_\_\_
12. \_\_\_\_\_
13. \_\_\_\_\_
14. \_\_\_\_\_
15. \_\_\_\_\_



Find the volume of each rectangular prism. Units are in cm (not to scale). Remember  $V = BH$  and  $V = L \times W \times H$



**Answers**

1. **504 cm<sup>3</sup>**

2. **294 cm<sup>3</sup>**

3. **147 cm<sup>3</sup>**

4. **168 cm<sup>3</sup>**

5. **45 cm<sup>3</sup>**

6. **75 cm<sup>3</sup>**

7. **576 cm<sup>3</sup>**

8. **252 cm<sup>3</sup>**

9. **56 cm<sup>3</sup>**

10. **3 cm<sup>3</sup>**

11. **324 cm<sup>3</sup>**

12. **567 cm<sup>3</sup>**

13. **36 cm<sup>3</sup>**

14. **294 cm<sup>3</sup>**

15. **648 cm<sup>3</sup>**