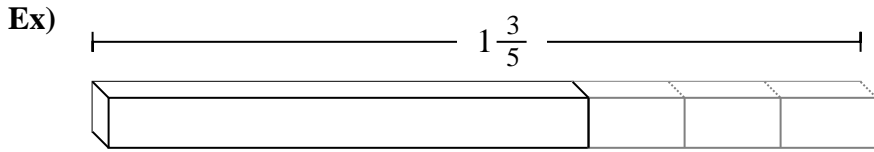


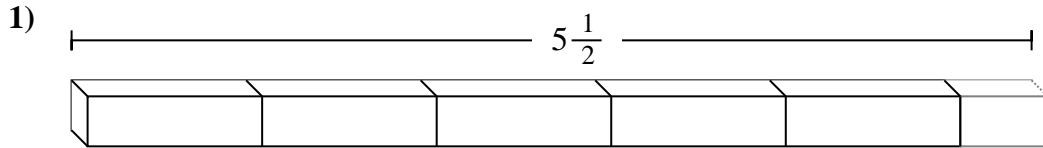


Determine the number of smaller fractional pieces that can be made from the larger piece.

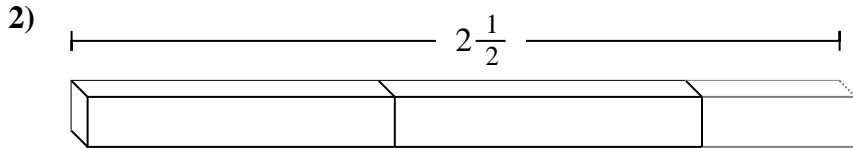
Answers



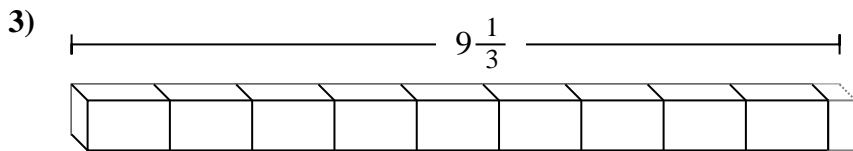
Ex. 8



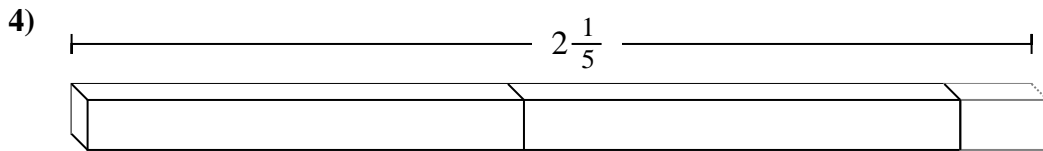
1. \_\_\_\_\_



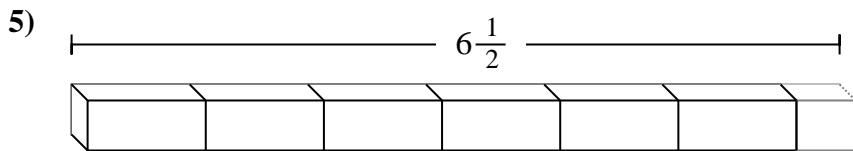
2. \_\_\_\_\_



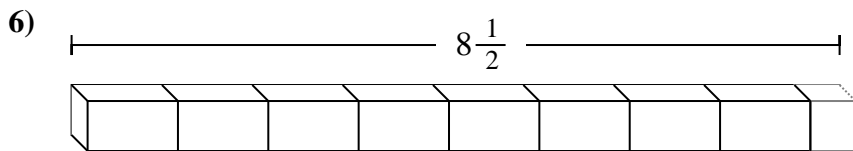
3. \_\_\_\_\_



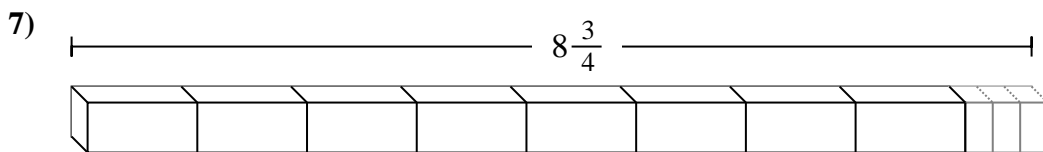
4. \_\_\_\_\_



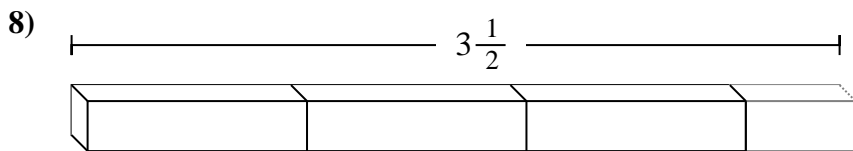
5. \_\_\_\_\_



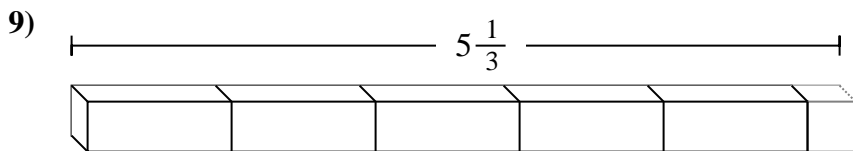
6. \_\_\_\_\_



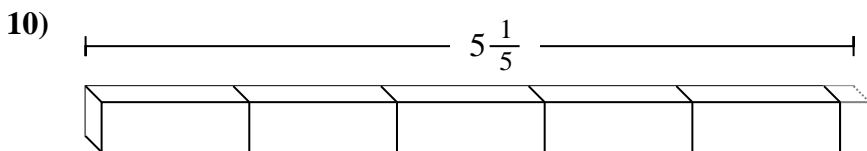
7. \_\_\_\_\_



8. \_\_\_\_\_



9. \_\_\_\_\_



10. \_\_\_\_\_



Determine the number of smaller fractional pieces that can be made from the larger piece.

Answers

Ex)  $1\frac{3}{5}$

1)  $5\frac{1}{2}$

2)  $2\frac{1}{2}$

3)  $9\frac{1}{3}$

4)  $2\frac{1}{5}$

5)  $6\frac{1}{2}$

6)  $8\frac{1}{2}$

7)  $8\frac{3}{4}$

8)  $3\frac{1}{2}$

9)  $5\frac{1}{3}$

10)  $5\frac{1}{5}$

- Ex. 8
1. 11
2. 5
3. 28
4. 11
5. 13
6. 17
7. 35
8. 7
9. 16
10. 26