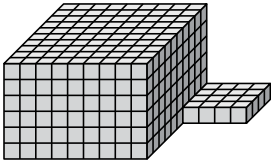




Find the total volume of each figure. Measurement is in cm (not to scale).

Answers

1)



1. _____

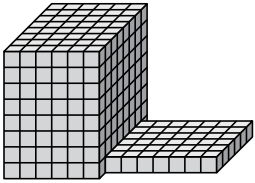
2. _____

3. _____

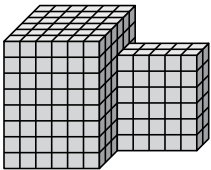
4. _____

5. _____

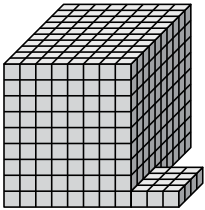
2)



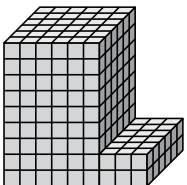
3)



4)



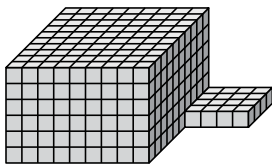
5)





Find the total volume of each figure. Measurement is in cm (not to scale).

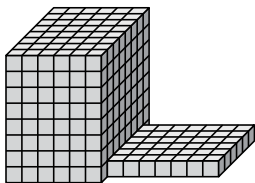
1)



$$9 \times 10 \times 6 = 540$$

$$4 \times 4 \times 1 = 16$$

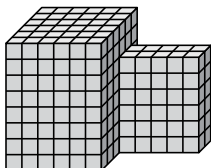
2)



$$6 \times 8 \times 8 = 384$$

$$7 \times 6 \times 1 = 42$$

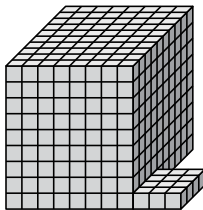
3)



$$6 \times 6 \times 8 = 288$$

$$5 \times 2 \times 6 = 60$$

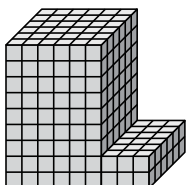
4)



$$8 \times 10 \times 9 = 720$$

$$3 \times 4 \times 1 = 12$$

5)



$$6 \times 6 \times 9 = 324$$

$$3 \times 6 \times 2 = 36$$

Answers

1. 556 cm³

2. 426 cm³

3. 348 cm³

4. 732 cm³

5. 360 cm³