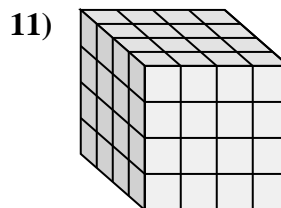
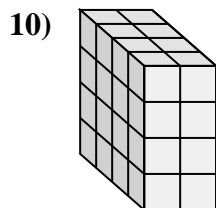
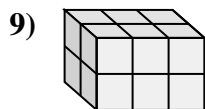
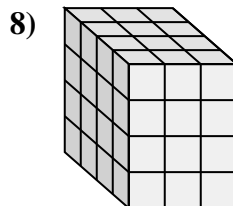
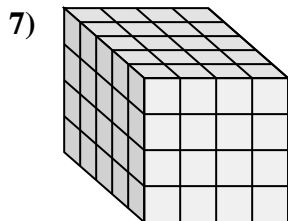
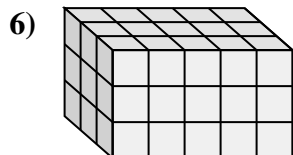
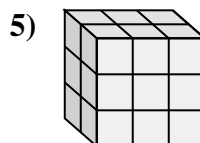
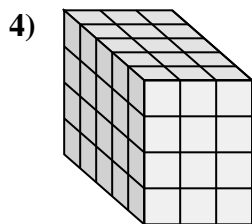
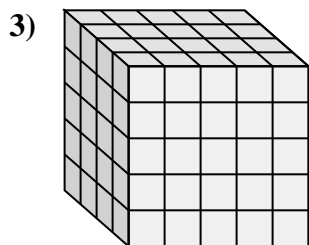
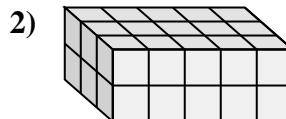
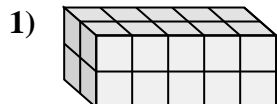
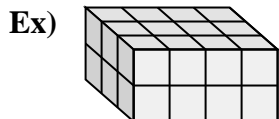




Match each problem with the equation that could represent it. Answer with the missing term and letter.



A. $4 \times 3 \times 4 = \underline{\quad}$

B. $\underline{\quad} \times 5 \times 5 = 100$

C. $\underline{\quad} \times 3 \times 2 = 12$

D. $\underline{\quad} \times 4 \times 4 = 80$

E. $5 \times \underline{\quad} \times 4 = 60$

F. $\underline{\quad} \times 5 \times 2 = 20$

G. $4 \times 4 \times \underline{\quad} = 64$

H. $3 \times \underline{\quad} \times 2 = 30$

I. $\underline{\quad} \times 2 \times 4 = 32$

J. $3 \times 4 \times 2 = \underline{\quad}$

K. $3 \times 5 \times \underline{\quad} = 45$

L. $2 \times 3 \times \underline{\quad} = 18$

Answers

Ex. J, 24

1. F, 2

2. H, 5

3. B, 4

4. E, 3

5. L, 3

6. K, 3

7. D, 5

8. A, 48

9. C, 2

10. I, 4

11. G, 4