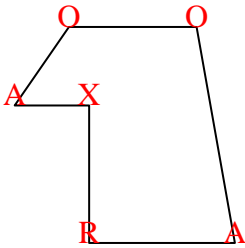




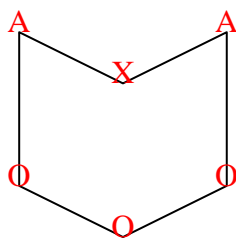


Count the number of Acute, Obtuse, Right and Reflex angles in each shape.

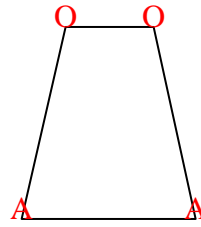
Ex)



1)



2)



Answers

Ex. 2 2 1 1

1. 2 3 0 1

2. 2 2 0 0

3. 0 0 4 0

4. 1 3 4 3

5. 2 2 1 2

6. 1 1 2 0

7. 0 0 6 0

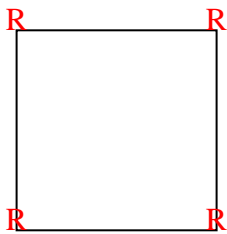
8. 2 1 1 1

9. 0 0 8 4

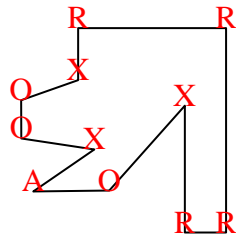
10. 2 4 4 0

11. 2 1 4 4

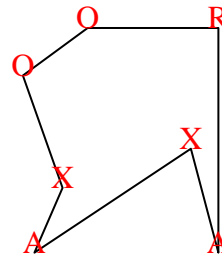
3)



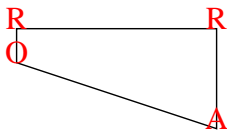
4)



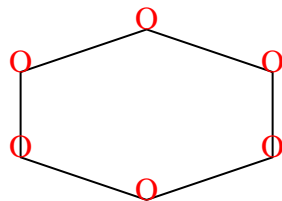
5)



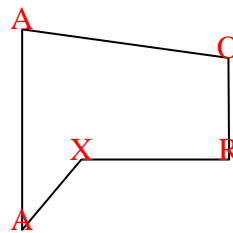
6)



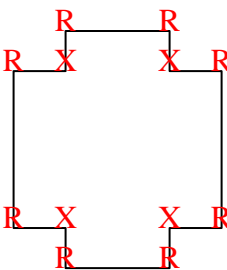
7)



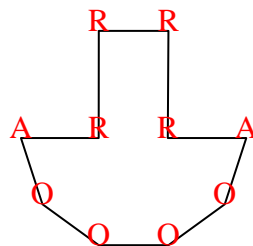
8)



9)



10)



11)

