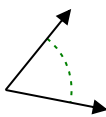




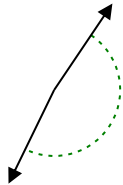
Determine if the angle shown is acute, obtuse, right or straight.

Answers

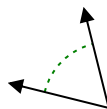
Ex)



1)



2)

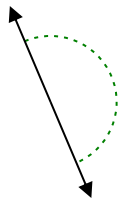


Ex. **acute**

1. _____

2. _____

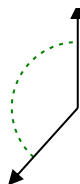
3)



4)



5)



3. _____

4. _____

5. _____

6)



7)



8)

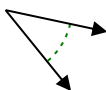


6. _____

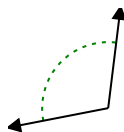
7. _____

8. _____

9)



10)



11)



9. _____

10. _____

11. _____

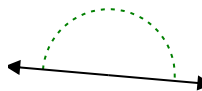
12)



13)



14)

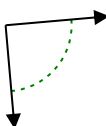


12. _____

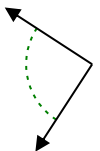
13. _____

14. _____

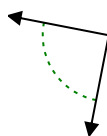
15)



16)



17)



15. _____

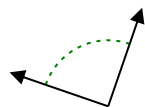
16. _____

17. _____

18)



19)



20)



18. _____

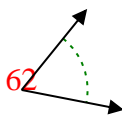
19. _____

20. _____

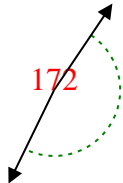


Determine if the angle shown is acute, obtuse, right or straight.

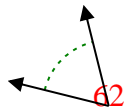
Ex)



1)



2)

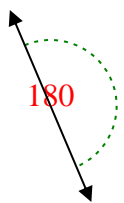


Ex. **acute**

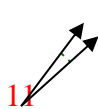
1. **obtuse**

2. **acute**

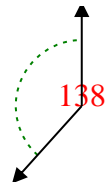
3)



4)



5)

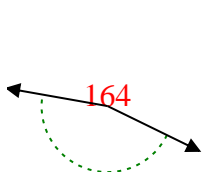


3. **straight**

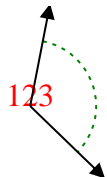
4. **acute**

5. **obtuse**

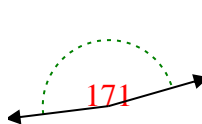
6)



7)



8)

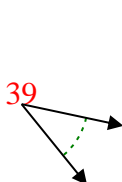


6. **obtuse**

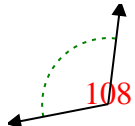
7. **obtuse**

8. **obtuse**

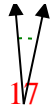
9)



10)



11)



9. **acute**

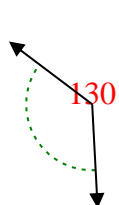
10. **obtuse**

11. **acute**

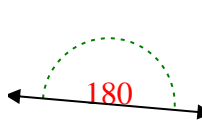
12)



13)



14)

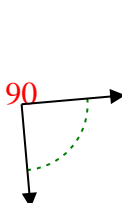


12. **acute**

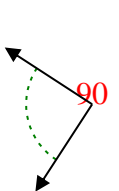
13. **obtuse**

14. **straight**

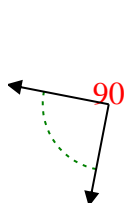
15)



16)



17)

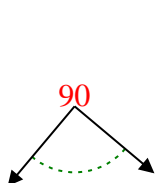


15. **right**

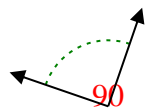
16. **right**

17. **right**

18)



19)



20)



18. **right**

19. **right**

20. **acute**