


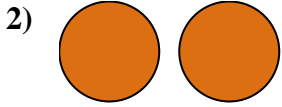


Write the shaded amount as a fraction.

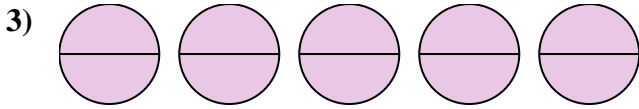
Answers



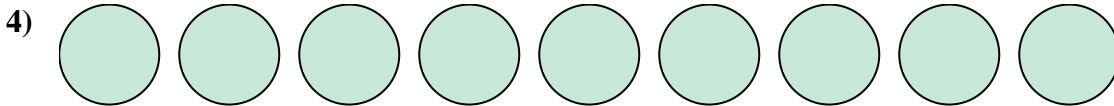
1. _____



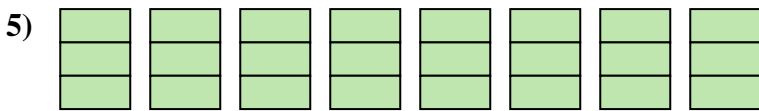
2. _____



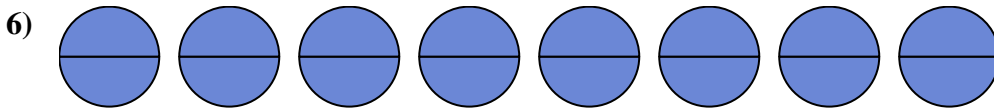
3. _____



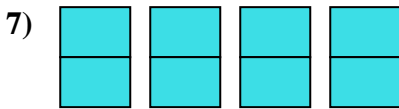
4. _____



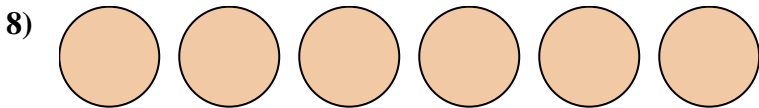
5. _____



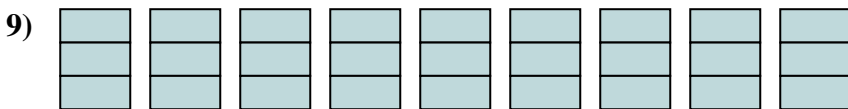
6. _____



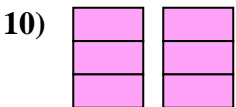
7. _____




8. _____



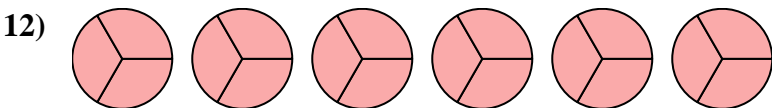
9. _____



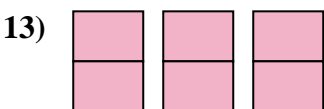
10. _____



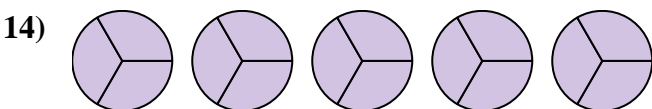
11. _____



12. _____



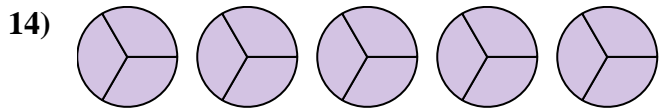
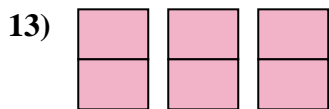
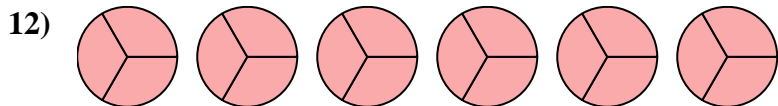
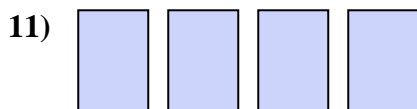
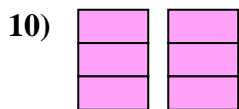
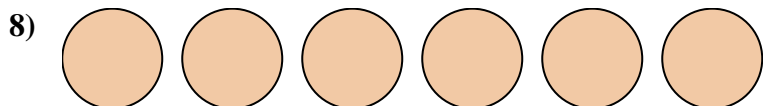
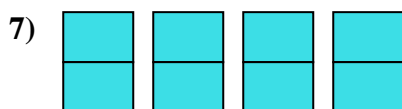
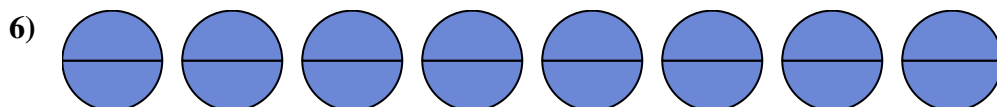
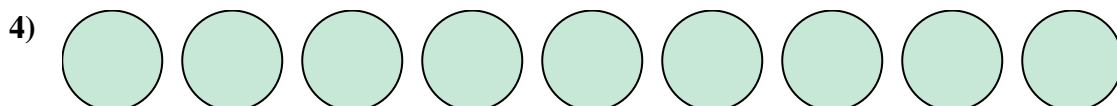
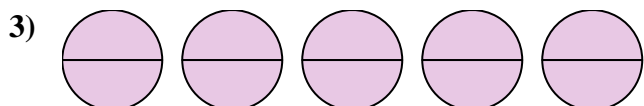
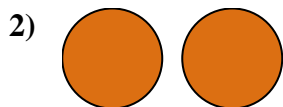
13. _____



14. _____



Write the shaded amount as a fraction.



Answers

1. $\frac{12}{2}$

2. $\frac{2}{1}$

3. $\frac{10}{2}$

4. $\frac{9}{1}$

5. $\frac{24}{3}$

6. $\frac{16}{2}$

7. $\frac{8}{2}$

8. $\frac{6}{1}$

9. $\frac{27}{3}$

10. $\frac{6}{3}$

11. $\frac{4}{1}$

12. $\frac{18}{3}$

13. $\frac{6}{2}$

14. $\frac{15}{3}$