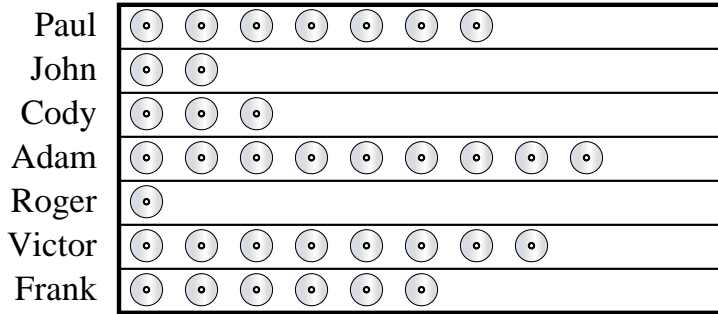




Answers

Adam and his friends were comparing the number of movies they owned. They organized the information in the pictograph below.

**DVDs owned**




⊙ = 5 DVDs

- 1) Who owned the largest number of DVDs?
- 2) Who owned the fewest DVDs?
- 3) Who owned exactly 45 DVDs?
- 4) Who had more DVDs, Paul or John?
- 5) How many DVDs did Cody own?

1. \_\_\_\_\_
2. \_\_\_\_\_
3. \_\_\_\_\_
4. \_\_\_\_\_
5. \_\_\_\_\_
6. \_\_\_\_\_
7. \_\_\_\_\_
8. \_\_\_\_\_
9. \_\_\_\_\_
10. \_\_\_\_\_

Jerry was recording how many slam dunks his favorite teams scored. He organized the information in the pictograph below.

**Slam Dunks**



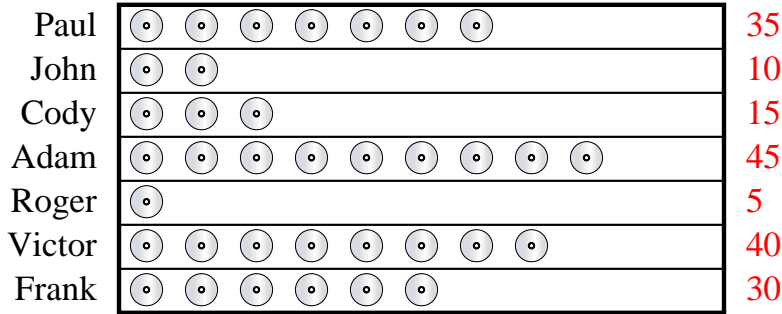
🏀 = 8 slam dunks

- 6) Which team had more slam dunks, Bulls or Rockets?
- 7) Which team had the fewest number of slam dunks?
- 8) Which team had the largest number of slam dunks?
- 9) Which team scored exactly 56 slam dunks?
- 10) How many slam dunks did the Hawks make?



Adam and his friends were comparing the number of movies they owned. They organized the information in the pictograph below.

**DVDs owned**




= 5 DVDs

- Who owned the largest number of DVDs?
- Who owned the fewest DVDs?
- Who owned exactly 45 DVDs?
- Who had more DVDs, Paul or John?
- How many DVDs did Cody own?

Jerry was recording how many slam dunks his favorite teams scored. He organized the information in the pictograph below.

**Slam Dunks**



= 8 slam dunks

- Which team had more slam dunks, Bulls or Rockets?
- Which team had the fewest number of slam dunks?
- Which team had the largest number of slam dunks?
- Which team scored exactly 56 slam dunks?
- How many slam dunks did the Hawks make?

Answers

- Adam
- Roger
- Adam
- Paul
- 15
- Bulls
- Rockets
- Grizzlies
- Pistons
- 32