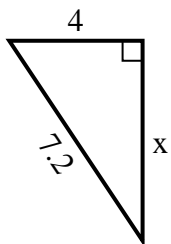


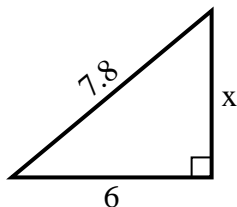


Find the value of X.

1) perimeter = 17.2 u



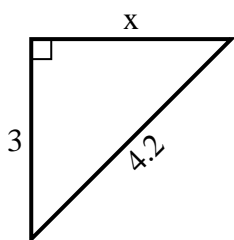
2) perimeter = 18.8 u



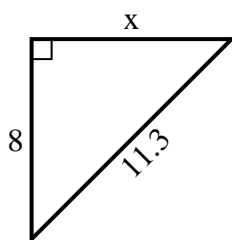
3) perimeter = 14.3 u



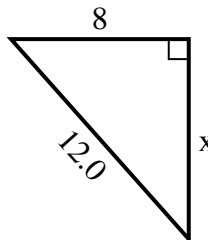
4) perimeter = 10.2 u



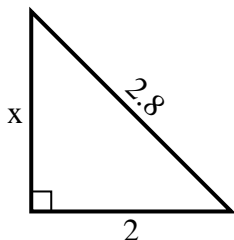
5) perimeter = 27.3 u



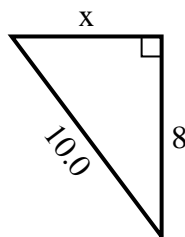
6) perimeter = 29 u



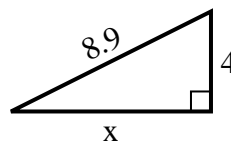
7) perimeter = 6.8 u



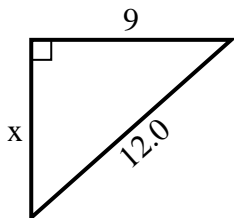
8) perimeter = 24 u



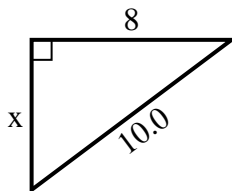
9) perimeter = 20.9 u



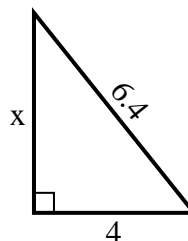
10) perimeter = 29 u



11) perimeter = 24 u



12) perimeter = 15.4 u



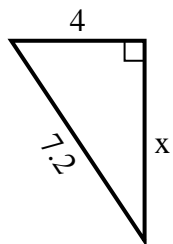
**Answers**

1. \_\_\_\_\_
2. \_\_\_\_\_
3. \_\_\_\_\_
4. \_\_\_\_\_
5. \_\_\_\_\_
6. \_\_\_\_\_
7. \_\_\_\_\_
8. \_\_\_\_\_
9. \_\_\_\_\_
10. \_\_\_\_\_
11. \_\_\_\_\_
12. \_\_\_\_\_

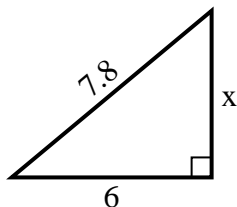


Find the value of X.

1) perimeter = 17.2 u



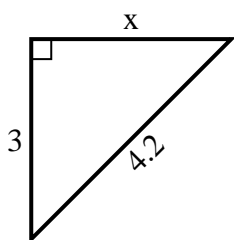
2) perimeter = 18.8 u



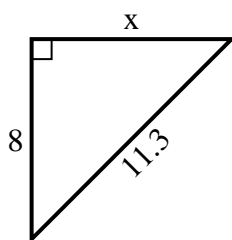
3) perimeter = 14.3 u



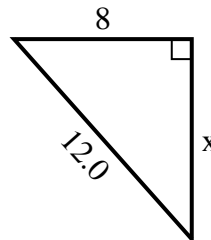
4) perimeter = 10.2 u



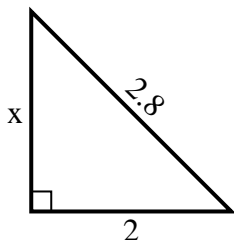
5) perimeter = 27.3 u



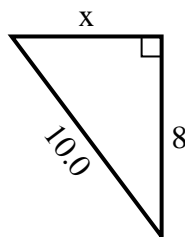
6) perimeter = 29 u



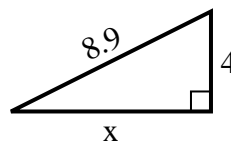
7) perimeter = 6.8 u



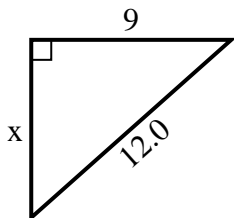
8) perimeter = 24 u



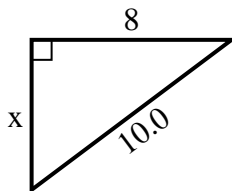
9) perimeter = 20.9 u



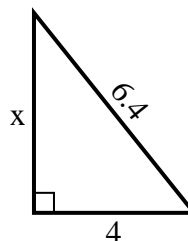
10) perimeter = 29 u



11) perimeter = 24 u



12) perimeter = 15.4 u



Answers

1. 6

2. 5

3. 2

4. 3

5. 8

6. 9

7. 2

8. 6

9. 8

10. 8

11. 6

12. 5