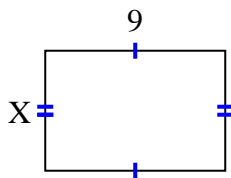


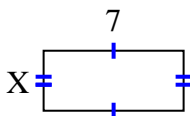


Find the value of X for each figure. Each figure is in centimeters (cm). Not to scale.

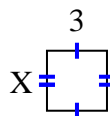
1) area = 54 cm^2



2) area = 21 cm^2



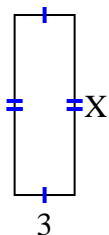
3) area = 9 cm^2



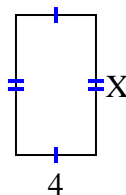
4) area = 4 cm^2



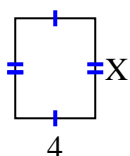
5) area = 27 cm^2



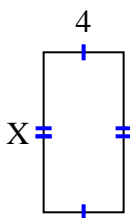
6) area = 28 cm^2



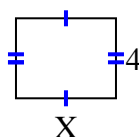
7) area = 20 cm^2



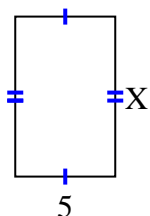
8) area = 32 cm^2



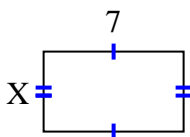
9) area = 20 cm^2



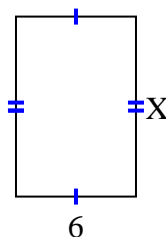
10) area = 40 cm^2



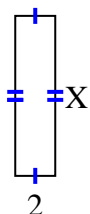
11) area = 28 cm^2



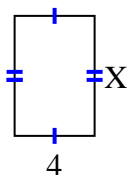
12) area = 54 cm^2



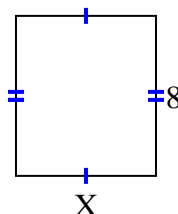
13) area = 16 cm^2



14) area = 24 cm^2



15) area = 56 cm^2



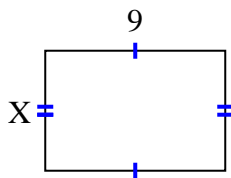
Answers

1. _____
2. _____
3. _____
4. _____
5. _____
6. _____
7. _____
8. _____
9. _____
10. _____
11. _____
12. _____
13. _____
14. _____
15. _____

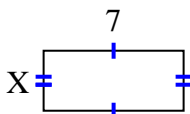


Find the value of X for each figure. Each figure is in centimeters (cm). Not to scale.

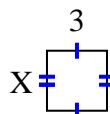
1) area = 54 cm^2



2) area = 21 cm^2



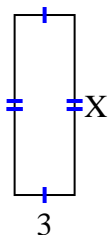
3) area = 9 cm^2



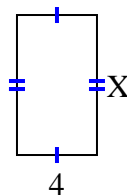
4) area = 4 cm^2



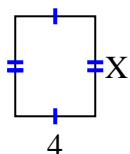
5) area = 27 cm^2



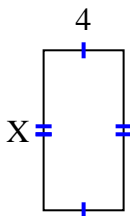
6) area = 28 cm^2



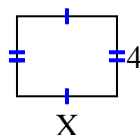
7) area = 20 cm^2



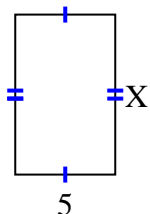
8) area = 32 cm^2



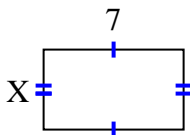
9) area = 20 cm^2



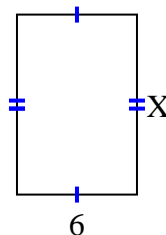
10) area = 40 cm^2



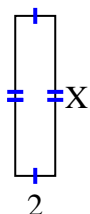
11) area = 28 cm^2



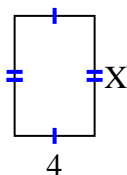
12) area = 54 cm^2



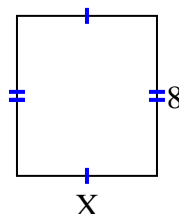
13) area = 16 cm^2



14) area = 24 cm^2



15) area = 56 cm^2



Answers

1. 6

2. 3

3. 3

4. 2

5. 9

6. 7

7. 5

8. 8

9. 5

10. 8

11. 4

12. 9

13. 8

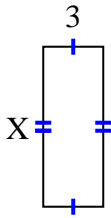
14. 6

15. 7

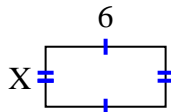


Find the value of X for each figure. Each figure is in centimeters (cm). Not to scale.

1) area = 24 cm^2



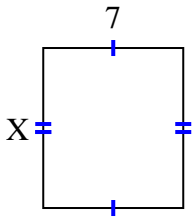
2) area = 18 cm^2



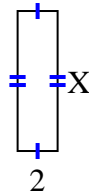
3) area = 4 cm^2



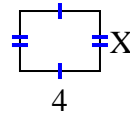
4) area = 56 cm^2



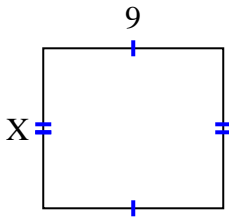
5) area = 14 cm^2



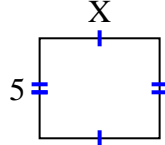
6) area = 12 cm^2



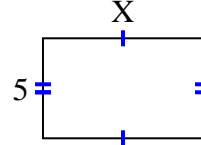
7) area = 72 cm^2



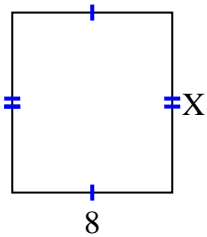
8) area = 30 cm^2



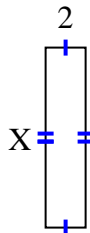
9) area = 40 cm^2



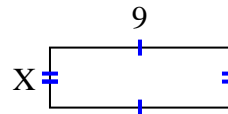
10) area = 72 cm^2



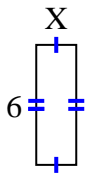
11) area = 18 cm^2



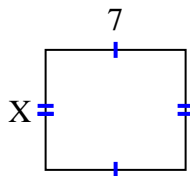
12) area = 27 cm^2



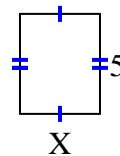
13) area = 12 cm^2



14) area = 42 cm^2



15) area = 20 cm^2



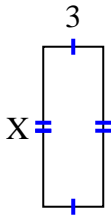
Answers

1. _____
2. _____
3. _____
4. _____
5. _____
6. _____
7. _____
8. _____
9. _____
10. _____
11. _____
12. _____
13. _____
14. _____
15. _____

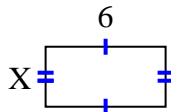


Find the value of X for each figure. Each figure is in centimeters (cm). Not to scale.

1) area = 24 cm^2



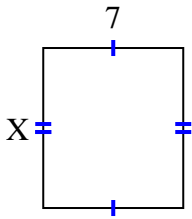
2) area = 18 cm^2



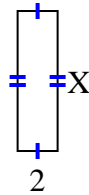
3) area = 4 cm^2



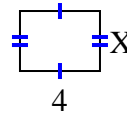
4) area = 56 cm^2



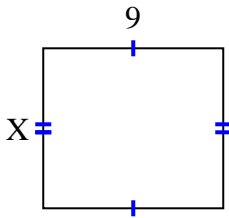
5) area = 14 cm^2



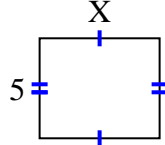
6) area = 12 cm^2



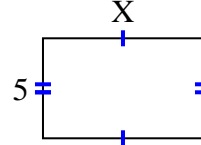
7) area = 72 cm^2



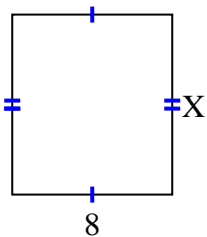
8) area = 30 cm^2



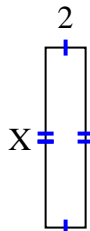
9) area = 40 cm^2



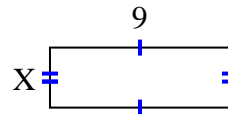
10) area = 72 cm^2



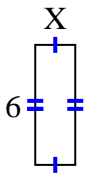
11) area = 18 cm^2



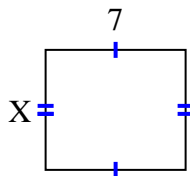
12) area = 27 cm^2



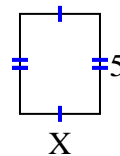
13) area = 12 cm^2



14) area = 42 cm^2



15) area = 20 cm^2



Answers

1. 8

2. 3

3. 2

4. 8

5. 7

6. 3

7. 8

8. 6

9. 8

10. 9

11. 9

12. 3

13. 2

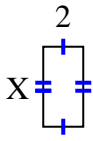
14. 6

15. 4

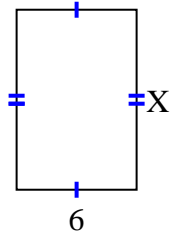


Find the value of X for each figure. Each figure is in centimeters (cm). Not to scale.

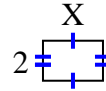
1) area = 8 cm^2



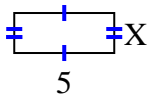
2) area = 54 cm^2



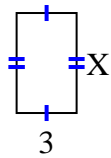
3) area = 6 cm^2



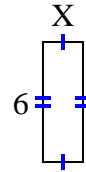
4) area = 10 cm^2



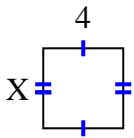
5) area = 15 cm^2



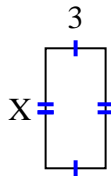
6) area = 12 cm^2



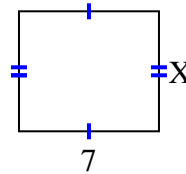
7) area = 16 cm^2



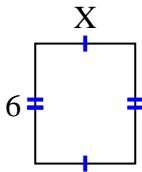
8) area = 18 cm^2



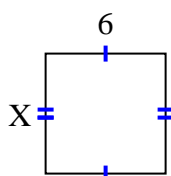
9) area = 42 cm^2



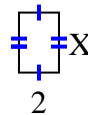
10) area = 30 cm^2



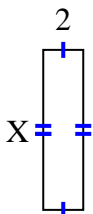
11) area = 36 cm^2



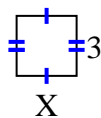
12) area = 6 cm^2



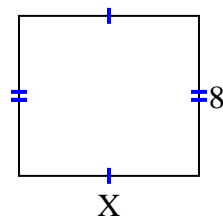
13) area = 16 cm^2



14) area = 9 cm^2



15) area = 72 cm^2



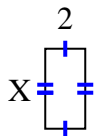
Answers

1. _____
2. _____
3. _____
4. _____
5. _____
6. _____
7. _____
8. _____
9. _____
10. _____
11. _____
12. _____
13. _____
14. _____
15. _____

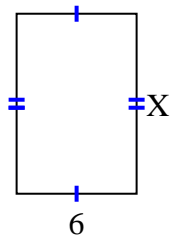


Find the value of X for each figure. Each figure is in centimeters (cm). Not to scale.

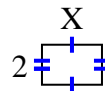
1) area = 8 cm^2



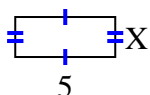
2) area = 54 cm^2



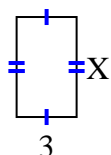
3) area = 6 cm^2



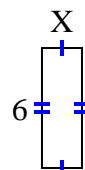
4) area = 10 cm^2



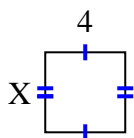
5) area = 15 cm^2



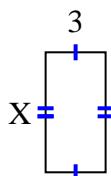
6) area = 12 cm^2



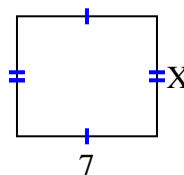
7) area = 16 cm^2



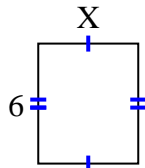
8) area = 18 cm^2



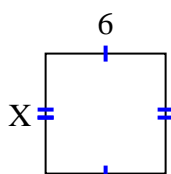
9) area = 42 cm^2



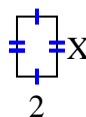
10) area = 30 cm^2



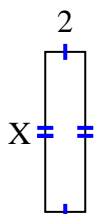
11) area = 36 cm^2



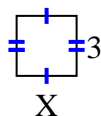
12) area = 6 cm^2



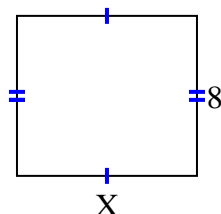
13) area = 16 cm^2



14) area = 9 cm^2



15) area = 72 cm^2



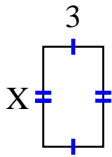
Answers

1. 4
2. 9
3. 3
4. 2
5. 5
6. 2
7. 4
8. 6
9. 6
10. 5
11. 6
12. 3
13. 8
14. 3
15. 9

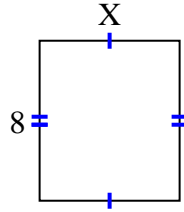


Find the value of X for each figure. Each figure is in centimeters (cm). Not to scale.

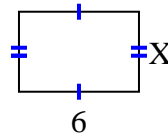
1) area = 15 cm^2



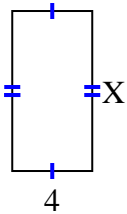
2) area = 56 cm^2



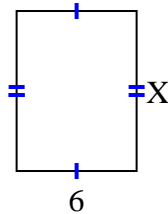
3) area = 24 cm^2



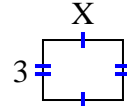
4) area = 32 cm^2



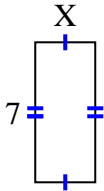
5) area = 48 cm^2



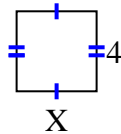
6) area = 12 cm^2



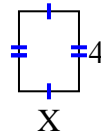
7) area = 21 cm^2



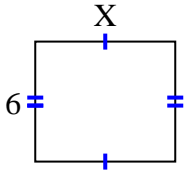
8) area = 16 cm^2



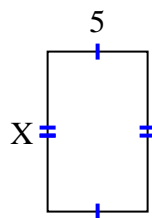
9) area = 12 cm^2



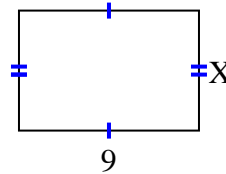
10) area = 42 cm^2



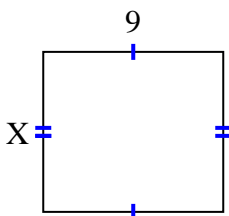
11) area = 40 cm^2



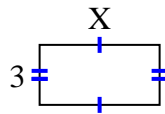
12) area = 54 cm^2



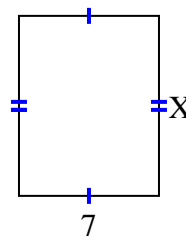
13) area = 72 cm^2



14) area = 18 cm^2



15) area = 63 cm^2



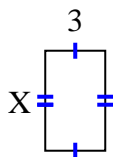
Answers

1. _____
2. _____
3. _____
4. _____
5. _____
6. _____
7. _____
8. _____
9. _____
10. _____
11. _____
12. _____
13. _____
14. _____
15. _____

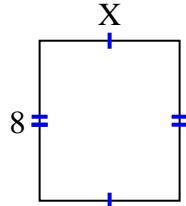


Find the value of X for each figure. Each figure is in centimeters (cm). Not to scale.

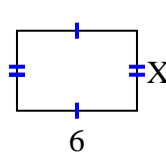
1) area = 15 cm^2



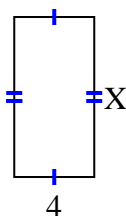
2) area = 56 cm^2



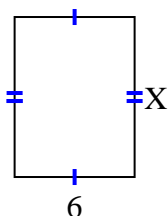
3) area = 24 cm^2



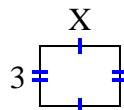
4) area = 32 cm^2



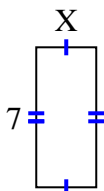
5) area = 48 cm^2



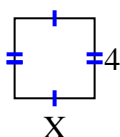
6) area = 12 cm^2



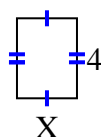
7) area = 21 cm^2



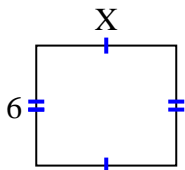
8) area = 16 cm^2



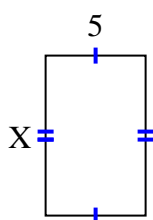
9) area = 12 cm^2



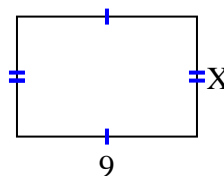
10) area = 42 cm^2



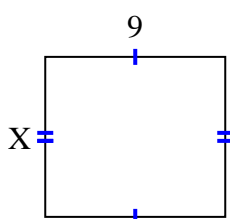
11) area = 40 cm^2



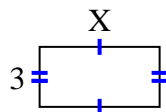
12) area = 54 cm^2



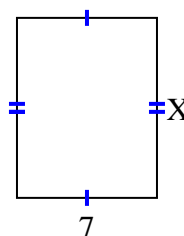
13) area = 72 cm^2



14) area = 18 cm^2



15) area = 63 cm^2



Answers

1. 5

2. 7

3. 4

4. 8

5. 8

6. 4

7. 3

8. 4

9. 3

10. 7

11. 8

12. 6

13. 8

14. 6

15. 9

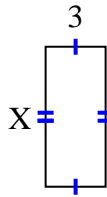


Find the value of X for each figure. Each figure is in centimeters (cm). Not to scale.

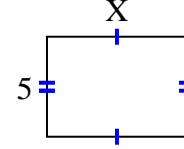
1) area = 4 cm^2



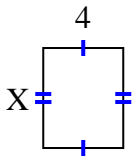
2) area = 21 cm^2



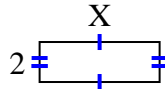
3) area = 35 cm^2



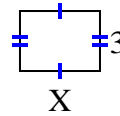
4) area = 20 cm^2



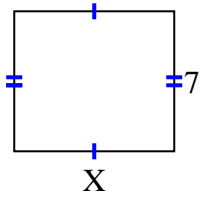
5) area = 12 cm^2



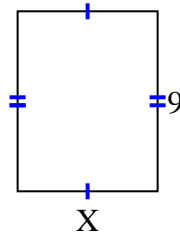
6) area = 12 cm^2



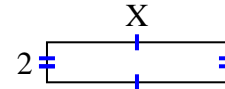
7) area = 56 cm^2



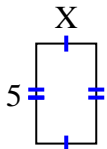
8) area = 63 cm^2



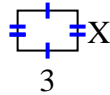
9) area = 18 cm^2



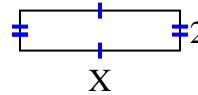
10) area = 15 cm^2



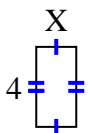
11) area = 6 cm^2



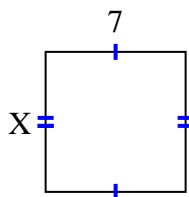
12) area = 16 cm^2



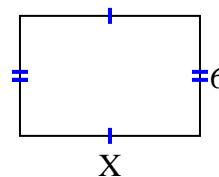
13) area = 8 cm^2



14) area = 49 cm^2



15) area = 54 cm^2



Answers

1. _____
2. _____
3. _____
4. _____
5. _____
6. _____
7. _____
8. _____
9. _____
10. _____
11. _____
12. _____
13. _____
14. _____
15. _____

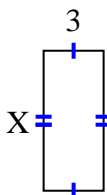


Find the value of X for each figure. Each figure is in centimeters (cm). Not to scale.

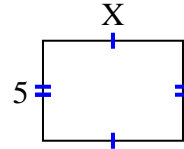
1) area = 4 cm^2



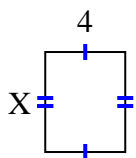
2) area = 21 cm^2



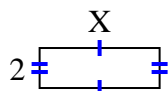
3) area = 35 cm^2



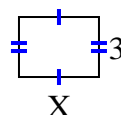
4) area = 20 cm^2



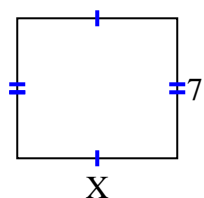
5) area = 12 cm^2



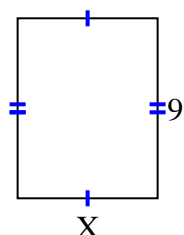
6) area = 12 cm^2



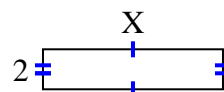
7) area = 56 cm^2



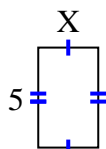
8) area = 63 cm^2



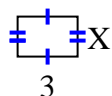
9) area = 18 cm^2



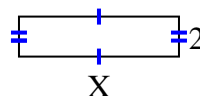
10) area = 15 cm^2



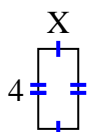
11) area = 6 cm^2



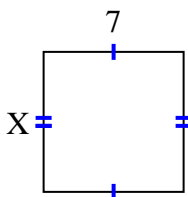
12) area = 16 cm^2



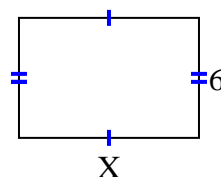
13) area = 8 cm^2



14) area = 49 cm^2



15) area = 54 cm^2



Answers

1. 2

2. 7

3. 7

4. 5

5. 6

6. 4

7. 8

8. 7

9. 9

10. 3

11. 2

12. 8

13. 2

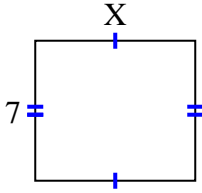
14. 7

15. 9

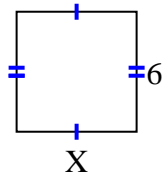


Find the value of X for each figure. Each figure is in centimeters (cm). Not to scale.

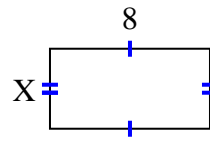
1) area = 56 cm^2



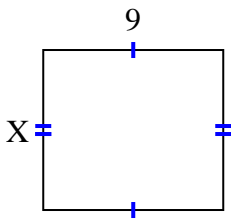
2) area = 36 cm^2



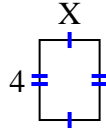
3) area = 32 cm^2



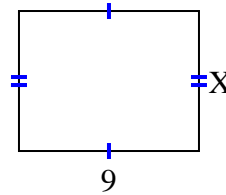
4) area = 72 cm^2



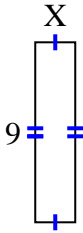
5) area = 12 cm^2



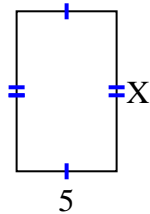
6) area = 63 cm^2



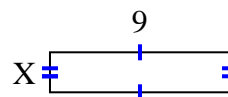
7) area = 18 cm^2



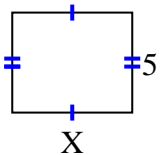
8) area = 40 cm^2



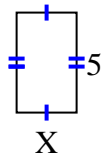
9) area = 18 cm^2



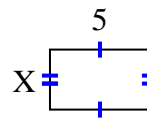
10) area = 30 cm^2



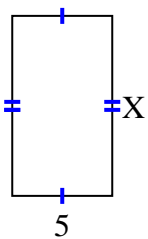
11) area = 15 cm^2



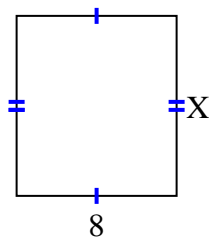
12) area = 15 cm^2



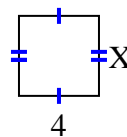
13) area = 45 cm^2



14) area = 72 cm^2



15) area = 16 cm^2



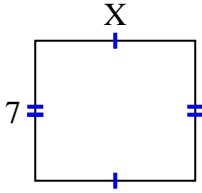
Answers

1. _____
2. _____
3. _____
4. _____
5. _____
6. _____
7. _____
8. _____
9. _____
10. _____
11. _____
12. _____
13. _____
14. _____
15. _____

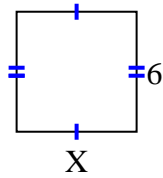


Find the value of X for each figure. Each figure is in centimeters (cm). Not to scale.

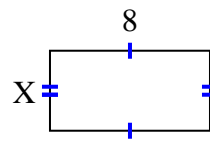
1) area = 56 cm^2



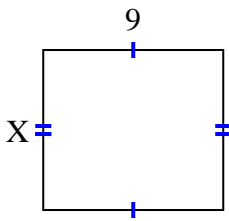
2) area = 36 cm^2



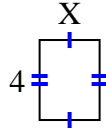
3) area = 32 cm^2



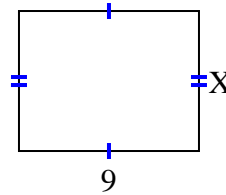
4) area = 72 cm^2



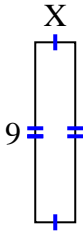
5) area = 12 cm^2



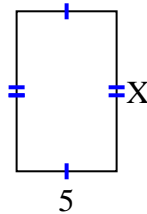
6) area = 63 cm^2



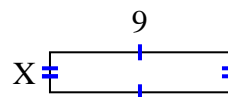
7) area = 18 cm^2



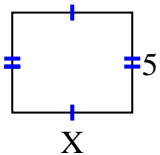
8) area = 40 cm^2



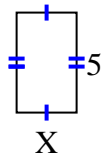
9) area = 18 cm^2



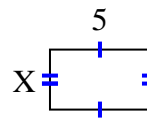
10) area = 30 cm^2



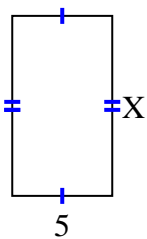
11) area = 15 cm^2



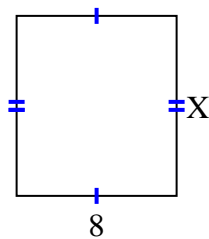
12) area = 15 cm^2



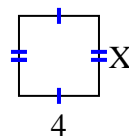
13) area = 45 cm^2



14) area = 72 cm^2



15) area = 16 cm^2



Answers

1. 8

2. 6

3. 4

4. 8

5. 3

6. 7

7. 2

8. 8

9. 2

10. 6

11. 3

12. 3

13. 9

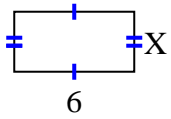
14. 9

15. 4

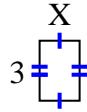


Find the value of X for each figure. Each figure is in centimeters (cm). Not to scale.

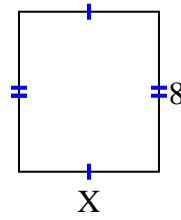
1) area = 18 cm^2



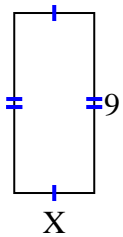
2) area = 6 cm^2



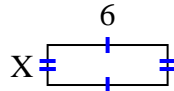
3) area = 56 cm^2



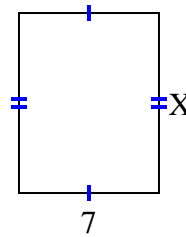
4) area = 36 cm^2



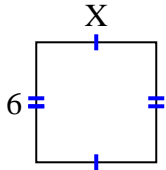
5) area = 12 cm^2



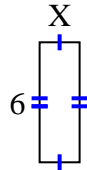
6) area = 63 cm^2



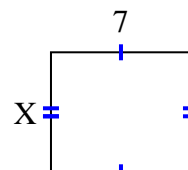
7) area = 36 cm^2



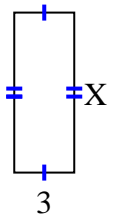
8) area = 12 cm^2



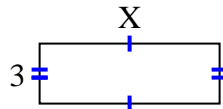
9) area = 42 cm^2



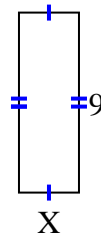
10) area = 24 cm^2



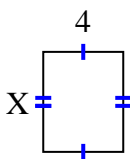
11) area = 27 cm^2



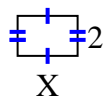
12) area = 27 cm^2



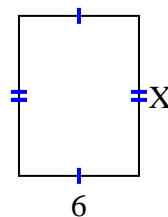
13) area = 20 cm^2



14) area = 6 cm^2



15) area = 48 cm^2



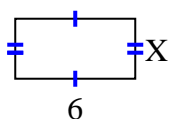
Answers

1. _____
2. _____
3. _____
4. _____
5. _____
6. _____
7. _____
8. _____
9. _____
10. _____
11. _____
12. _____
13. _____
14. _____
15. _____

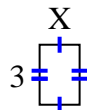


Find the value of X for each figure. Each figure is in centimeters (cm). Not to scale.

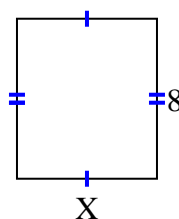
1) area = 18 cm^2



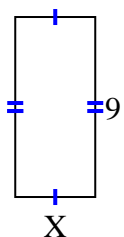
2) area = 6 cm^2



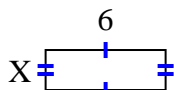
3) area = 56 cm^2



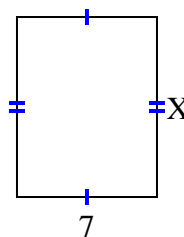
4) area = 36 cm^2



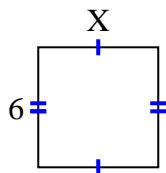
5) area = 12 cm^2



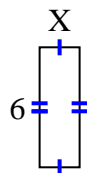
6) area = 63 cm^2



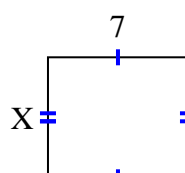
7) area = 36 cm^2



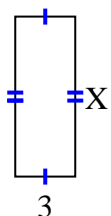
8) area = 12 cm^2



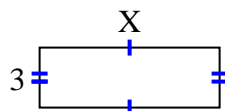
9) area = 42 cm^2



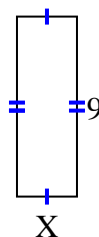
10) area = 24 cm^2



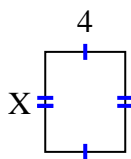
11) area = 27 cm^2



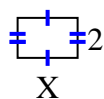
12) area = 27 cm^2



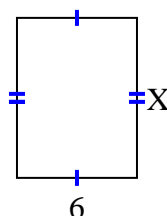
13) area = 20 cm^2



14) area = 6 cm^2



15) area = 48 cm^2



Answers

1. 3

2. 2

3. 7

4. 4

5. 2

6. 9

7. 6

8. 2

9. 6

10. 8

11. 9

12. 3

13. 5

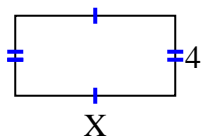
14. 3

15. 8

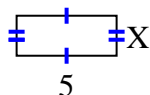


Find the value of X for each figure. Each figure is in centimeters (cm). Not to scale.

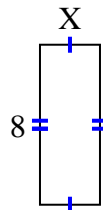
1) area = 32 cm^2



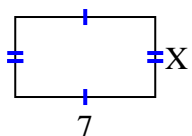
2) area = 10 cm^2



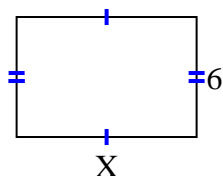
3) area = 24 cm^2



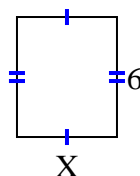
4) area = 28 cm^2



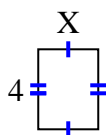
5) area = 54 cm^2



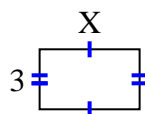
6) area = 30 cm^2



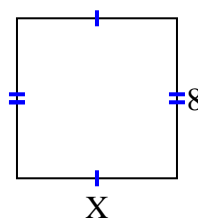
7) area = 12 cm^2



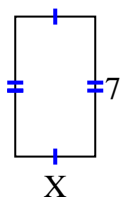
8) area = 15 cm^2



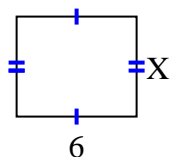
9) area = 64 cm^2



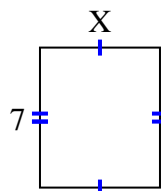
10) area = 28 cm^2



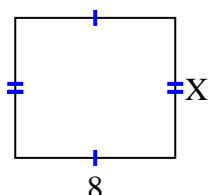
11) area = 30 cm^2



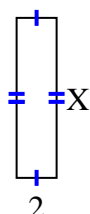
12) area = 42 cm^2



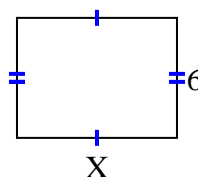
13) area = 56 cm^2



14) area = 16 cm^2



15) area = 48 cm^2



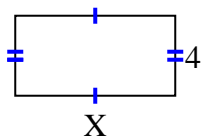
Answers

1. _____
2. _____
3. _____
4. _____
5. _____
6. _____
7. _____
8. _____
9. _____
10. _____
11. _____
12. _____
13. _____
14. _____
15. _____

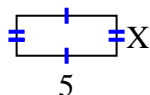


Find the value of X for each figure. Each figure is in centimeters (cm). Not to scale.

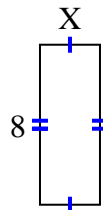
1) area = 32 cm^2



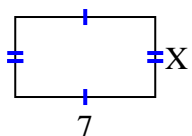
2) area = 10 cm^2



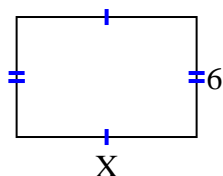
3) area = 24 cm^2



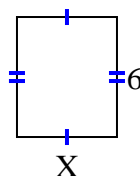
4) area = 28 cm^2



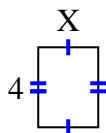
5) area = 54 cm^2



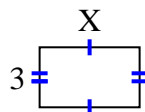
6) area = 30 cm^2



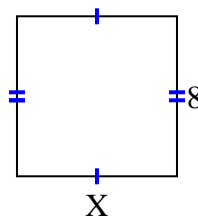
7) area = 12 cm^2



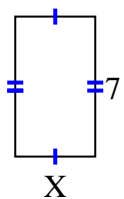
8) area = 15 cm^2



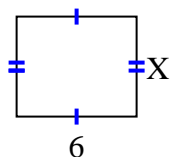
9) area = 64 cm^2



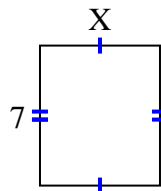
10) area = 28 cm^2



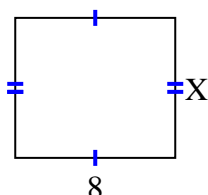
11) area = 30 cm^2



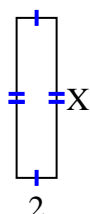
12) area = 42 cm^2



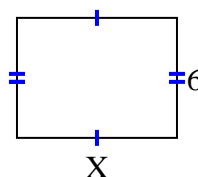
13) area = 56 cm^2



14) area = 16 cm^2



15) area = 48 cm^2



Answers

1. 8

2. 2

3. 3

4. 4

5. 9

6. 5

7. 3

8. 5

9. 8

10. 4

11. 5

12. 6

13. 7

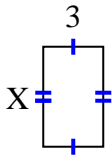
14. 8

15. 8

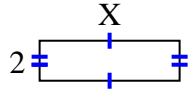


Find the value of X for each figure. Each figure is in centimeters (cm). Not to scale.

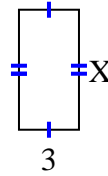
1) area = 15 cm^2



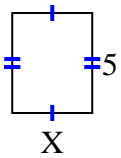
2) area = 14 cm^2



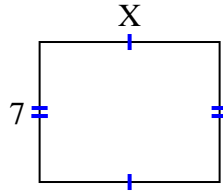
3) area = 18 cm^2



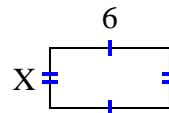
4) area = 20 cm^2



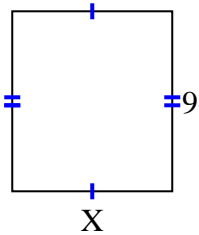
5) area = 63 cm^2



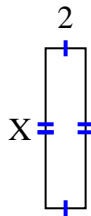
6) area = 18 cm^2



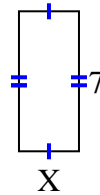
7) area = 72 cm^2



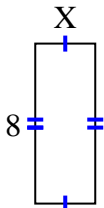
8) area = 16 cm^2



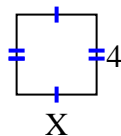
9) area = 21 cm^2



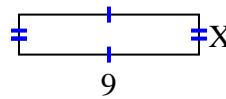
10) area = 24 cm^2



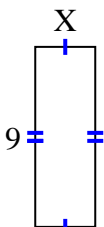
11) area = 16 cm^2



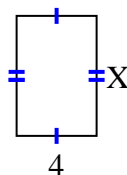
12) area = 18 cm^2



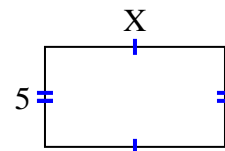
13) area = 27 cm^2



14) area = 24 cm^2



15) area = 45 cm^2



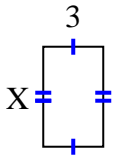
Answers

1. _____
2. _____
3. _____
4. _____
5. _____
6. _____
7. _____
8. _____
9. _____
10. _____
11. _____
12. _____
13. _____
14. _____
15. _____

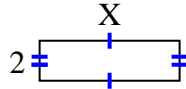


Find the value of X for each figure. Each figure is in centimeters (cm). Not to scale.

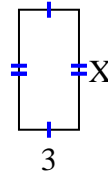
1) area = 15 cm^2



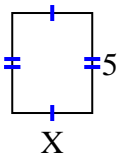
2) area = 14 cm^2



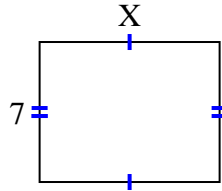
3) area = 18 cm^2



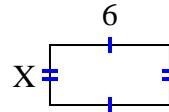
4) area = 20 cm^2



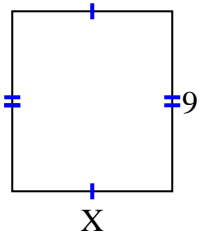
5) area = 63 cm^2



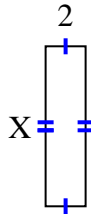
6) area = 18 cm^2



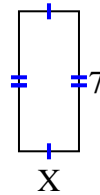
7) area = 72 cm^2



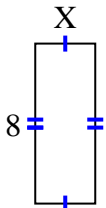
8) area = 16 cm^2



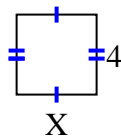
9) area = 21 cm^2



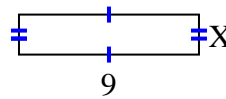
10) area = 24 cm^2



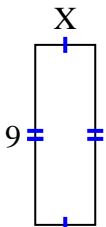
11) area = 16 cm^2



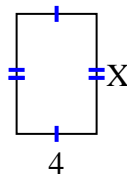
12) area = 18 cm^2



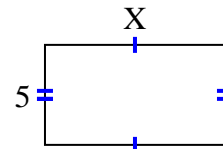
13) area = 27 cm^2



14) area = 24 cm^2



15) area = 45 cm^2



Answers

1. 5

2. 7

3. 6

4. 4

5. 9

6. 3

7. 8

8. 8

9. 3

10. 3

11. 4

12. 2

13. 3

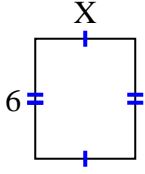
14. 6

15. 9

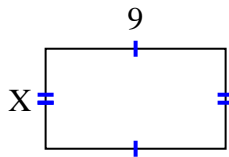


Find the value of X for each figure. Each figure is in centimeters (cm). Not to scale.

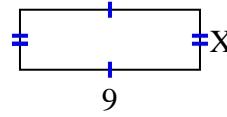
1) area = 30 cm^2



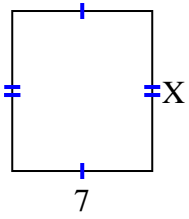
2) area = 45 cm^2



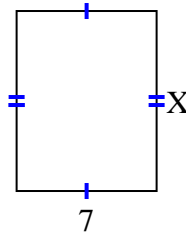
3) area = 27 cm^2



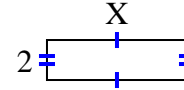
4) area = 56 cm^2



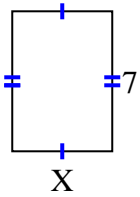
5) area = 63 cm^2



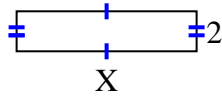
6) area = 14 cm^2



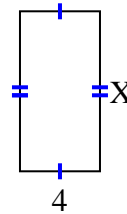
7) area = 35 cm^2



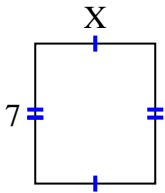
8) area = 18 cm^2



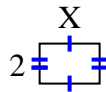
9) area = 32 cm^2



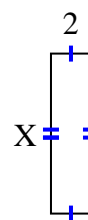
10) area = 42 cm^2



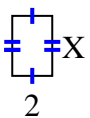
11) area = 6 cm^2



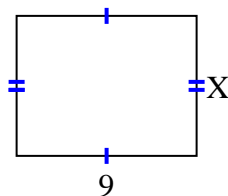
12) area = 16 cm^2



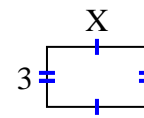
13) area = 6 cm^2



14) area = 63 cm^2



15) area = 15 cm^2



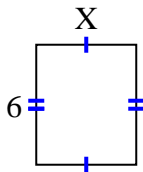
Answers

1. _____
2. _____
3. _____
4. _____
5. _____
6. _____
7. _____
8. _____
9. _____
10. _____
11. _____
12. _____
13. _____
14. _____
15. _____

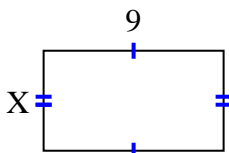


Find the value of X for each figure. Each figure is in centimeters (cm). Not to scale.

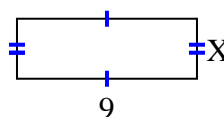
1) area = 30 cm^2



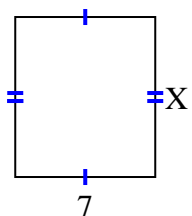
2) area = 45 cm^2



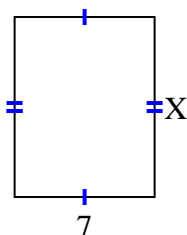
3) area = 27 cm^2



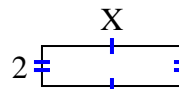
4) area = 56 cm^2



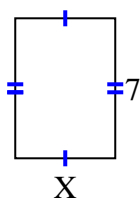
5) area = 63 cm^2



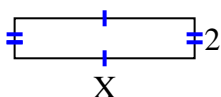
6) area = 14 cm^2



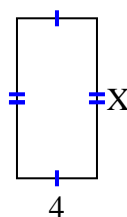
7) area = 35 cm^2



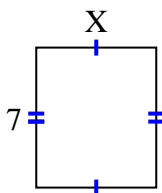
8) area = 18 cm^2



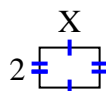
9) area = 32 cm^2



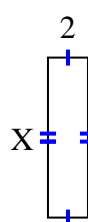
10) area = 42 cm^2



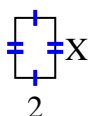
11) area = 6 cm^2



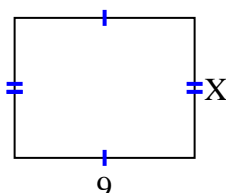
12) area = 16 cm^2



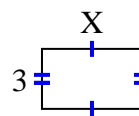
13) area = 6 cm^2



14) area = 63 cm^2



15) area = 15 cm^2



Answers

1. 5

2. 5

3. 3

4. 8

5. 9

6. 7

7. 5

8. 9

9. 8

10. 6

11. 3

12. 8

13. 3

14. 7

15. 5