



Determine which letter best represents the weight.

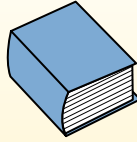
Gram (g)

A gram is about the weight of a paperclip.



Kilogram (kg)

A kilogram is about the weight of a thick book.



Remember:

Kilo means 1,000. So a kilogram is 1,000 grams.
1 Kilogram is also about the same weight as 2 pounds.

Answers

1)



Broom

- A. 500 grams
- B. 200 kilograms
- C. 10 grams
- D. 10 kilograms


2)



Weight Set

- A. 100 kilograms
- B. 1 kilogram
- C. 100 grams
- D. 200 grams


3)



Elephant

- A. 90 grams
- B. 30 kilograms
- C. 5000 grams
- D. 5000 kilograms

4)



Screw Driver

- A. 1 gram
- B. 10 grams
- C. 13 kilograms
- D. 45 grams

5)



Dog

- A. 300 kilograms
- B. 20 grams
- C. 25 kilograms
- D. 1 gram

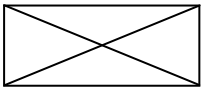
6)



Toothbrush

- A. 15 kilograms
- B. 30 grams
- C. 500 kilograms
- D. 1 gram

7)



Envelope

- A. 30 grams
- B. 200 kilograms
- C. 675 grams
- D. 1 gram

8)



Bicycle

- A. 100 grams
- B. 15 grams
- C. 100 kilograms
- D. 15 kilograms

9)



Pen

- A. 5000 grams
- B. 5 kilograms
- C. 5 grams
- D. 500 grams

- 1. _____
- 2. _____
- 3. _____
- 4. _____
- 5. _____
- 6. _____
- 7. _____
- 8. _____
- 9. _____



Determine which letter best represents the weight.

Gram (g)

A gram is about the weight of a paperclip.



Kilogram (kg)

A kilogram is about the weight of a thick book.



Remember:

Kilo means 1,000. So a kilogram is 1,000 grams.

1 Kilogram is also about the same weight as 2 pounds.

Answers

1)



Broom

- A. 500 grams
- B. 200 kilograms
- C. 10 grams
- D. 10 kilograms


2)



Weight Set

- A. 100 kilograms
- B. 1 kilogram
- C. 100 grams
- D. 200 grams

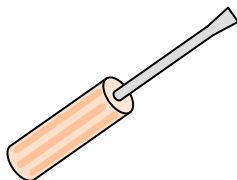
3)



Elephant

- A. 90 grams
- B. 30 kilograms
- C. 5000 grams
- D. 5000 kilograms

4)



Screw Driver

- A. 1 gram
- B. 10 grams
- C. 13 kilograms
- D. 45 grams

5)



Dog

- A. 300 kilograms
- B. 20 grams
- C. 25 kilograms
- D. 1 gram

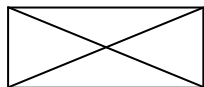
6)



Toothbrush

- A. 15 kilograms
- B. 30 grams
- C. 500 kilograms
- D. 1 gram

7)



Envelope

- A. 30 grams
- B. 200 kilograms
- C. 675 grams
- D. 1 gram

8)



Bicycle

- A. 100 grams
- B. 15 grams
- C. 100 kilograms
- D. 15 kilograms

9)



Pen

- A. 5000 grams
- B. 5 kilograms
- C. 5 grams
- D. 500 grams

- 1. **A**
- 2. **A**
- 3. **D**
- 4. **D**
- 5. **C**
- 6. **B**
- 7. **D**
- 8. **D**
- 9. **C**