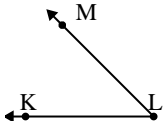




Solve each problem.

Answers

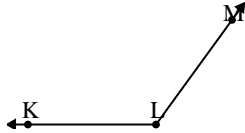
1)



Which choice best represents  $\angle KLM$ ?

- A.  $121^\circ$
- B.  $178^\circ$
- C.  $45^\circ$
- D.  $66^\circ$

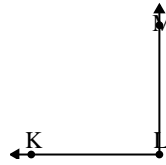
2)



Which choice best represents  $\angle KLM$ ?

- A.  $28^\circ$
- B.  $105^\circ$
- C.  $126^\circ$
- D.  $161^\circ$

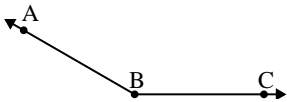
3)



Which choice best represents  $\angle KLM$ ?

- A.  $65^\circ$
- B.  $111^\circ$
- C.  $90^\circ$
- D.  $145^\circ$

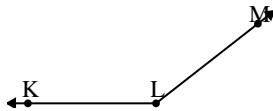
4)



Which choice best represents  $\angle ABC$ ?

- A.  $150^\circ$
- B.  $18^\circ$
- C.  $73^\circ$
- D.  $122^\circ$


5)



Which choice best represents  $\angle KLM$ ?

- A.  $180^\circ$
- B.  $142^\circ$
- C.  $3^\circ$
- D.  $90^\circ$

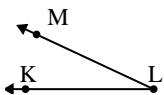
6)



Which choice best represents  $\angle ABC$ ?

- A.  $43^\circ$
- B.  $82^\circ$
- C.  $15^\circ$
- D.  $162^\circ$

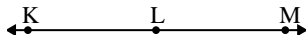
7)



Which choice best represents  $\angle KLM$ ?

- A.  $25^\circ$
- B.  $72^\circ$
- C.  $4^\circ$
- D.  $154^\circ$

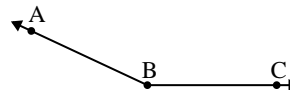
8)



Which choice best represents  $\angle KLM$ ?

- A.  $55^\circ$
- B.  $158^\circ$
- C.  $112^\circ$
- D.  $180^\circ$

9)



Which choice best represents  $\angle ABC$ ?

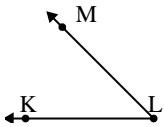
- A.  $155^\circ$
- B.  $131^\circ$
- C.  $17^\circ$
- D.  $108^\circ$

1. \_\_\_\_\_
2. \_\_\_\_\_
3. \_\_\_\_\_
4. \_\_\_\_\_
5. \_\_\_\_\_
6. \_\_\_\_\_
7. \_\_\_\_\_
8. \_\_\_\_\_
9. \_\_\_\_\_



Solve each problem.

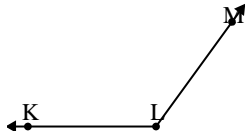
1)



Which choice best represents  $\angle KLM$ ?

- A.  $121^\circ$
- B.  $178^\circ$
- C.  $45^\circ$
- D.  $66^\circ$

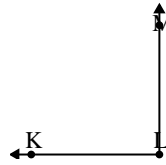
2)



Which choice best represents  $\angle KLM$ ?

- A.  $28^\circ$
- B.  $105^\circ$
- C.  $126^\circ$
- D.  $161^\circ$

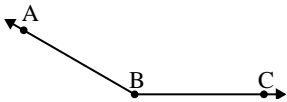
3)



Which choice best represents  $\angle KLM$ ?

- A.  $65^\circ$
- B.  $111^\circ$
- C.  $90^\circ$
- D.  $145^\circ$

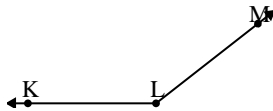
4)



Which choice best represents  $\angle ABC$ ?

- A.  $150^\circ$
- B.  $18^\circ$
- C.  $73^\circ$
- D.  $122^\circ$


5)



Which choice best represents  $\angle KLM$ ?

- A.  $180^\circ$
- B.  $142^\circ$
- C.  $3^\circ$
- D.  $90^\circ$

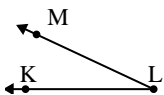
6)



Which choice best represents  $\angle ABC$ ?

- A.  $43^\circ$
- B.  $82^\circ$
- C.  $15^\circ$
- D.  $162^\circ$

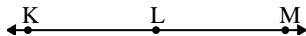
7)



Which choice best represents  $\angle KLM$ ?

- A.  $25^\circ$
- B.  $72^\circ$
- C.  $4^\circ$
- D.  $154^\circ$

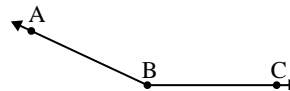
8)



Which choice best represents  $\angle KLM$ ?

- A.  $55^\circ$
- B.  $158^\circ$
- C.  $112^\circ$
- D.  $180^\circ$

9)



Which choice best represents  $\angle ABC$ ?

- A.  $155^\circ$
- B.  $131^\circ$
- C.  $17^\circ$
- D.  $108^\circ$

Answers

- 1.     **C**
- 2.     **C**
- 3.     **C**
- 4.     **A**
- 5.     **B**
- 6.     **C**
- 7.     **A**
- 8.     **D**
- 9.     **A**