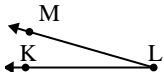




Solve each problem.

Answers

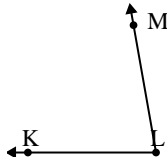
1)



Which choice best represents  $\angle KLM$ ?

- A.  $16^\circ$
- B.  $83^\circ$
- C.  $104^\circ$
- D.  $131^\circ$

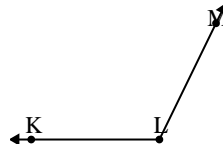
2)



Which choice best represents  $\angle KLM$ ?

- A.  $80^\circ$
- B.  $15^\circ$
- C.  $134^\circ$
- D.  $102^\circ$

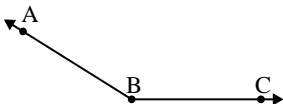
3)



Which choice best represents  $\angle KLM$ ?

- A.  $93^\circ$
- B.  $38^\circ$
- C.  $116^\circ$
- D.  $11^\circ$

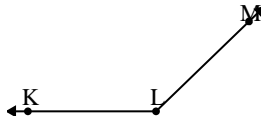
4)



Which choice best represents  $\angle ABC$ ?

- A.  $121^\circ$
- B.  $100^\circ$
- C.  $54^\circ$
- D.  $148^\circ$

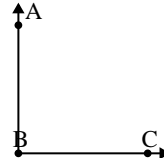
5)



Which choice best represents  $\angle KLM$ ?

- A.  $161^\circ$
- B.  $12^\circ$
- C.  $136^\circ$
- D.  $95^\circ$

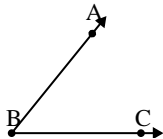
6)



Which choice best represents  $\angle ABC$ ?

- A.  $33^\circ$
- B.  $60^\circ$
- C.  $132^\circ$
- D.  $90^\circ$

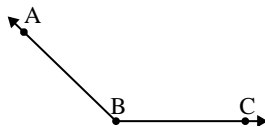
7)



Which choice best represents  $\angle ABC$ ?

- A.  $98^\circ$
- B.  $10^\circ$
- C.  $51^\circ$
- D.  $136^\circ$

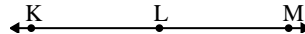
8)



Which choice best represents  $\angle ABC$ ?

- A.  $75^\circ$
- B.  $136^\circ$
- C.  $13^\circ$
- D.  $49^\circ$

9)



Which choice best represents  $\angle KLM$ ?

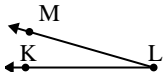
- A.  $7^\circ$
- B.  $157^\circ$
- C.  $104^\circ$
- D.  $180^\circ$

1. \_\_\_\_\_
2. \_\_\_\_\_
3. \_\_\_\_\_
4. \_\_\_\_\_
5. \_\_\_\_\_
6. \_\_\_\_\_
7. \_\_\_\_\_
8. \_\_\_\_\_
9. \_\_\_\_\_



Solve each problem.

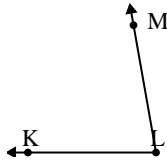
1)



Which choice best represents  $\angle KLM$ ?

- A.  $16^\circ$
- B.  $83^\circ$
- C.  $104^\circ$
- D.  $131^\circ$

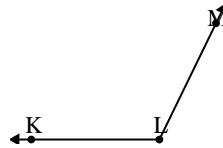
2)



Which choice best represents  $\angle KLM$ ?

- A.  $80^\circ$
- B.  $15^\circ$
- C.  $134^\circ$
- D.  $102^\circ$

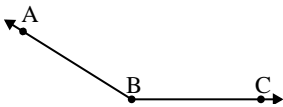
3)



Which choice best represents  $\angle KLM$ ?

- A.  $93^\circ$
- B.  $38^\circ$
- C.  $116^\circ$
- D.  $11^\circ$

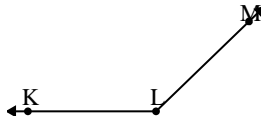
4)



Which choice best represents  $\angle ABC$ ?

- A.  $121^\circ$
- B.  $100^\circ$
- C.  $54^\circ$
- D.  $148^\circ$

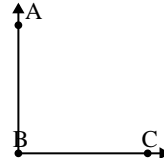
5)



Which choice best represents  $\angle KLM$ ?

- A.  $161^\circ$
- B.  $12^\circ$
- C.  $136^\circ$
- D.  $95^\circ$

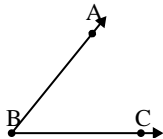
6)



Which choice best represents  $\angle ABC$ ?

- A.  $33^\circ$
- B.  $60^\circ$
- C.  $132^\circ$
- D.  $90^\circ$

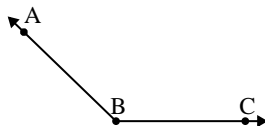
7)



Which choice best represents  $\angle ABC$ ?

- A.  $98^\circ$
- B.  $10^\circ$
- C.  $51^\circ$
- D.  $136^\circ$

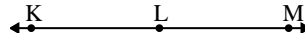
8)



Which choice best represents  $\angle ABC$ ?

- A.  $75^\circ$
- B.  $136^\circ$
- C.  $13^\circ$
- D.  $49^\circ$

9)



Which choice best represents  $\angle KLM$ ?

- A.  $7^\circ$
- B.  $157^\circ$
- C.  $104^\circ$
- D.  $180^\circ$

Answers

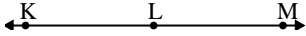
- 1.     **A**
- 2.     **A**
- 3.     **C**
- 4.     **D**
- 5.     **C**
- 6.     **D**
- 7.     **C**
- 8.     **B**
- 9.     **D**



Solve each problem.

Answers

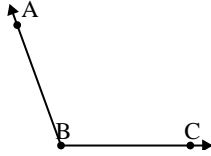
1)



Which choice best represents  $\angle KLM$ ?

- A.  $180^\circ$
- B.  $115^\circ$
- C.  $1^\circ$
- D.  $24^\circ$

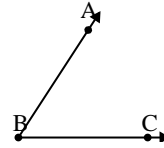
2)



Which choice best represents  $\angle ABC$ ?

- A.  $7^\circ$
- B.  $164^\circ$
- C.  $110^\circ$
- D.  $60^\circ$

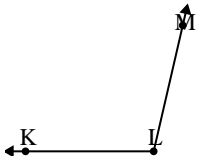
3)



Which choice best represents  $\angle ABC$ ?

- A.  $162^\circ$
- B.  $99^\circ$
- C.  $57^\circ$
- D.  $3^\circ$

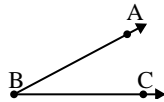
4)



Which choice best represents  $\angle KLM$ ?

- A.  $103^\circ$
- B.  $42^\circ$
- C.  $82^\circ$
- D.  $13^\circ$

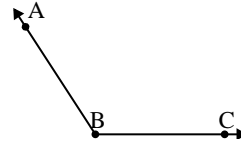
5)



Which choice best represents  $\angle ABC$ ?

- A.  $102^\circ$
- B.  $147^\circ$
- C.  $28^\circ$
- D.  $80^\circ$

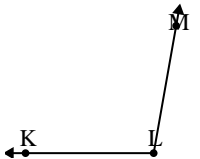
6)



Which choice best represents  $\angle ABC$ ?

- A.  $123^\circ$
- B.  $91^\circ$
- C.  $151^\circ$
- D.  $19^\circ$

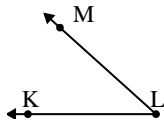
7)



Which choice best represents  $\angle KLM$ ?

- A.  $75^\circ$
- B.  $134^\circ$
- C.  $100^\circ$
- D.  $15^\circ$

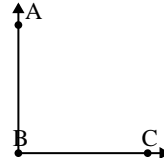
8)



Which choice best represents  $\angle KLM$ ?

- A.  $21^\circ$
- B.  $42^\circ$
- C.  $149^\circ$
- D.  $68^\circ$

9)



Which choice best represents  $\angle ABC$ ?

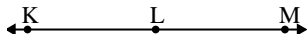
- A.  $29^\circ$
- B.  $90^\circ$
- C.  $163^\circ$
- D.  $133^\circ$

- 1. \_\_\_\_\_
- 2. \_\_\_\_\_
- 3. \_\_\_\_\_
- 4. \_\_\_\_\_
- 5. \_\_\_\_\_
- 6. \_\_\_\_\_
- 7. \_\_\_\_\_
- 8. \_\_\_\_\_
- 9. \_\_\_\_\_



Solve each problem.

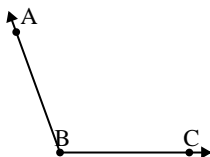
1)



Which choice best represents  $\angle KLM$ ?

- A.  $180^\circ$
- B.  $115^\circ$
- C.  $1^\circ$
- D.  $24^\circ$

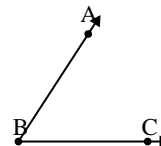
2)



Which choice best represents  $\angle ABC$ ?

- A.  $7^\circ$
- B.  $164^\circ$
- C.  $110^\circ$
- D.  $60^\circ$

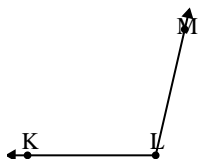
3)



Which choice best represents  $\angle ABC$ ?

- A.  $162^\circ$
- B.  $99^\circ$
- C.  $57^\circ$
- D.  $3^\circ$

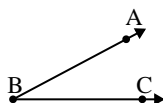
4)



Which choice best represents  $\angle KLM$ ?

- A.  $103^\circ$
- B.  $42^\circ$
- C.  $82^\circ$
- D.  $13^\circ$

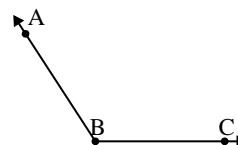
5)



Which choice best represents  $\angle ABC$ ?

- A.  $102^\circ$
- B.  $147^\circ$
- C.  $28^\circ$
- D.  $80^\circ$

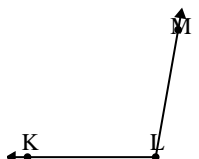
6)



Which choice best represents  $\angle ABC$ ?

- A.  $123^\circ$
- B.  $91^\circ$
- C.  $151^\circ$
- D.  $19^\circ$

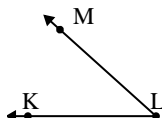
7)



Which choice best represents  $\angle KLM$ ?

- A.  $75^\circ$
- B.  $134^\circ$
- C.  $100^\circ$
- D.  $15^\circ$

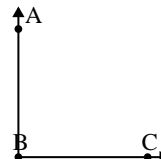
8)



Which choice best represents  $\angle KLM$ ?

- A.  $21^\circ$
- B.  $42^\circ$
- C.  $149^\circ$
- D.  $68^\circ$

9)



Which choice best represents  $\angle ABC$ ?

- A.  $29^\circ$
- B.  $90^\circ$
- C.  $163^\circ$
- D.  $133^\circ$

Answers

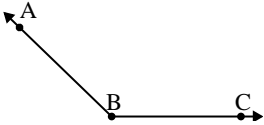
- 1.     **A**
- 2.     **C**
- 3.     **C**
- 4.     **A**
- 5.     **C**
- 6.     **A**
- 7.     **C**
- 8.     **B**
- 9.     **B**



Solve each problem.

Answers

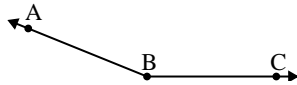
1)



Which choice best represents  $\angle ABC$ ?

- A.  $32^\circ$
- B.  $112^\circ$
- C.  $174^\circ$
- D.  $136^\circ$

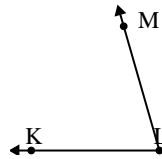
2)



Which choice best represents  $\angle ABC$ ?

- A.  $49^\circ$
- B.  $131^\circ$
- C.  $4^\circ$
- D.  $158^\circ$

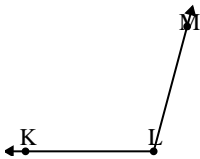
3)



Which choice best represents  $\angle KLM$ ?

- A.  $74^\circ$
- B.  $43^\circ$
- C.  $103^\circ$
- D.  $3^\circ$

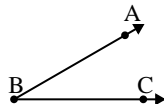
4)



Which choice best represents  $\angle KLM$ ?

- A.  $105^\circ$
- B.  $138^\circ$
- C.  $67^\circ$
- D.  $42^\circ$

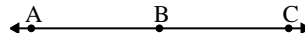
5)



Which choice best represents  $\angle ABC$ ?

- A.  $78^\circ$
- B.  $145^\circ$
- C.  $30^\circ$
- D.  $1^\circ$

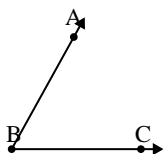
6)



Which choice best represents  $\angle ABC$ ?

- A.  $143^\circ$
- B.  $86^\circ$
- C.  $14^\circ$
- D.  $180^\circ$

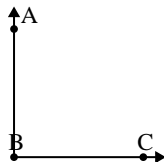
7)



Which choice best represents  $\angle ABC$ ?

- A.  $159^\circ$
- B.  $12^\circ$
- C.  $97^\circ$
- D.  $61^\circ$

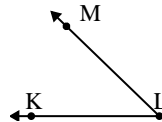
8)



Which choice best represents  $\angle ABC$ ?

- A.  $143^\circ$
- B.  $90^\circ$
- C.  $165^\circ$
- D.  $2^\circ$

9)



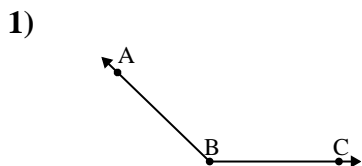
Which choice best represents  $\angle KLM$ ?

- A.  $114^\circ$
- B.  $23^\circ$
- C.  $44^\circ$
- D.  $74^\circ$

1. \_\_\_\_\_
2. \_\_\_\_\_
3. \_\_\_\_\_
4. \_\_\_\_\_
5. \_\_\_\_\_
6. \_\_\_\_\_
7. \_\_\_\_\_
8. \_\_\_\_\_
9. \_\_\_\_\_

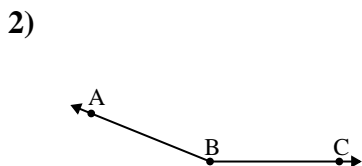


Solve each problem.



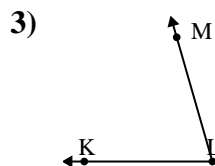
Which choice best represents  $\angle ABC$ ?

- A.  $32^\circ$
- B.  $112^\circ$
- C.  $174^\circ$
- D.  $136^\circ$



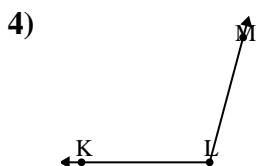
Which choice best represents  $\angle ABC$ ?

- A.  $49^\circ$
- B.  $131^\circ$
- C.  $4^\circ$
- D.  $158^\circ$



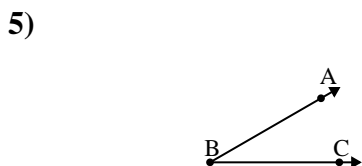
Which choice best represents  $\angle KLM$ ?

- A.  $74^\circ$
- B.  $43^\circ$
- C.  $103^\circ$
- D.  $3^\circ$



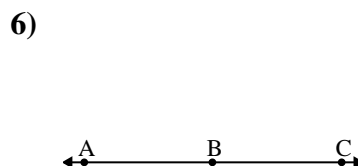
Which choice best represents  $\angle KLM$ ?

- A.  $105^\circ$
- B.  $138^\circ$
- C.  $67^\circ$
- D.  $42^\circ$



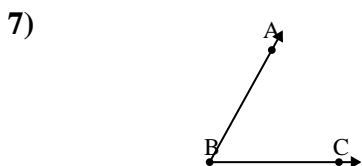
Which choice best represents  $\angle ABC$ ?

- A.  $78^\circ$
- B.  $145^\circ$
- C.  $30^\circ$
- D.  $1^\circ$



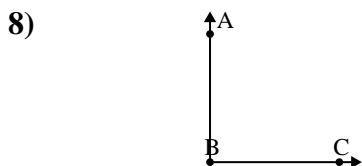
Which choice best represents  $\angle ABC$ ?

- A.  $143^\circ$
- B.  $86^\circ$
- C.  $14^\circ$
- D.  $180^\circ$



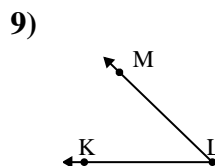
Which choice best represents  $\angle ABC$ ?

- A.  $159^\circ$
- B.  $12^\circ$
- C.  $97^\circ$
- D.  $61^\circ$



Which choice best represents  $\angle ABC$ ?

- A.  $143^\circ$
- B.  $90^\circ$
- C.  $165^\circ$
- D.  $2^\circ$



Which choice best represents  $\angle KLM$ ?

- A.  $114^\circ$
- B.  $23^\circ$
- C.  $44^\circ$
- D.  $74^\circ$

Answers

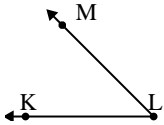
- 1. **D**
- 2. **D**
- 3. **A**
- 4. **A**
- 5. **C**
- 6. **D**
- 7. **D**
- 8. **B**
- 9. **C**



Solve each problem.

Answers

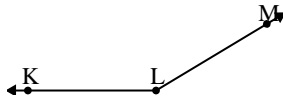
1)



Which choice best represents  $\angle KLM$ ?

- A.  $16^\circ$
- B.  $138^\circ$
- C.  $78^\circ$
- D.  $45^\circ$

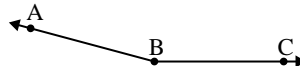
2)



Which choice best represents  $\angle KLM$ ?

- A.  $149^\circ$
- B.  $127^\circ$
- C.  $95^\circ$
- D.  $1^\circ$

3)

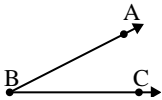


Which choice best represents  $\angle ABC$ ?

- A.  $8^\circ$
- B.  $38^\circ$
- C.  $165^\circ$
- D.  $124^\circ$

1. \_\_\_\_\_
2. \_\_\_\_\_
3. \_\_\_\_\_
4. \_\_\_\_\_
5. \_\_\_\_\_
6. \_\_\_\_\_
7. \_\_\_\_\_
8. \_\_\_\_\_
9. \_\_\_\_\_

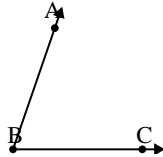
4)



Which choice best represents  $\angle ABC$ ?

- A.  $80^\circ$
- B.  $50^\circ$
- C.  $27^\circ$
- D.  $136^\circ$

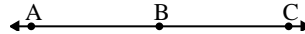
5)



Which choice best represents  $\angle ABC$ ?

- A.  $71^\circ$
- B.  $95^\circ$
- C.  $9^\circ$
- D.  $33^\circ$

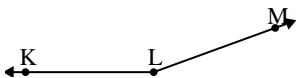
6)



Which choice best represents  $\angle ABC$ ?

- A.  $88^\circ$
- B.  $180^\circ$
- C.  $133^\circ$
- D.  $18^\circ$

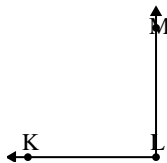
7)



Which choice best represents  $\angle KLM$ ?

- A.  $131^\circ$
- B.  $28^\circ$
- C.  $72^\circ$
- D.  $160^\circ$

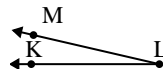
8)



Which choice best represents  $\angle KLM$ ?

- A.  $162^\circ$
- B.  $141^\circ$
- C.  $56^\circ$
- D.  $90^\circ$

9)



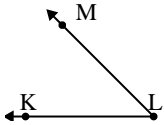
Which choice best represents  $\angle KLM$ ?

- A.  $44^\circ$
- B.  $170^\circ$
- C.  $147^\circ$
- D.  $13^\circ$



Solve each problem.

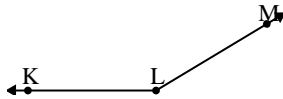
1)



Which choice best represents  $\angle KLM$ ?

- A.  $16^\circ$
- B.  $138^\circ$
- C.  $78^\circ$
- D.  $45^\circ$

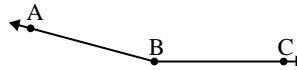
2)



Which choice best represents  $\angle KLM$ ?

- A.  $149^\circ$
- B.  $127^\circ$
- C.  $95^\circ$
- D.  $1^\circ$

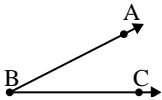
3)



Which choice best represents  $\angle ABC$ ?

- A.  $8^\circ$
- B.  $38^\circ$
- C.  $165^\circ$
- D.  $124^\circ$

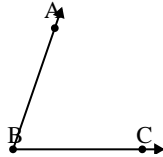
4)



Which choice best represents  $\angle ABC$ ?

- A.  $80^\circ$
- B.  $50^\circ$
- C.  $27^\circ$
- D.  $136^\circ$

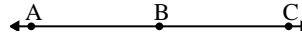
5)



Which choice best represents  $\angle ABC$ ?

- A.  $71^\circ$
- B.  $95^\circ$
- C.  $9^\circ$
- D.  $33^\circ$

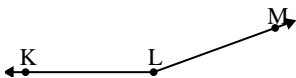
6)



Which choice best represents  $\angle ABC$ ?

- A.  $88^\circ$
- B.  $180^\circ$
- C.  $133^\circ$
- D.  $18^\circ$

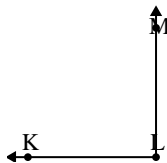
7)



Which choice best represents  $\angle KLM$ ?

- A.  $131^\circ$
- B.  $28^\circ$
- C.  $72^\circ$
- D.  $160^\circ$

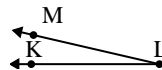
8)



Which choice best represents  $\angle KLM$ ?

- A.  $162^\circ$
- B.  $141^\circ$
- C.  $56^\circ$
- D.  $90^\circ$

9)



Which choice best represents  $\angle KLM$ ?

- A.  $44^\circ$
- B.  $170^\circ$
- C.  $147^\circ$
- D.  $13^\circ$

Answers

- 1. **D**
- 2. **A**
- 3. **C**
- 4. **C**
- 5. **A**
- 6. **B**
- 7. **D**
- 8. **D**
- 9. **D**

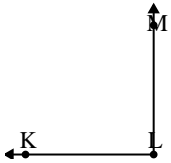




Solve each problem.

Answers

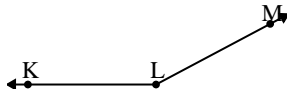
1)



Which choice best represents  $\angle KLM$ ?

- A.  $13^\circ$
- B.  $147^\circ$
- C.  $90^\circ$
- D.  $42^\circ$

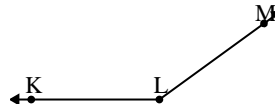
2)



Which choice best represents  $\angle KLM$ ?

- A.  $129^\circ$
- B.  $11^\circ$
- C.  $178^\circ$
- D.  $152^\circ$

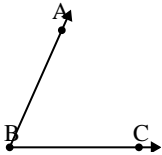
3)



Which choice best represents  $\angle KLM$ ?

- A.  $49^\circ$
- B.  $91^\circ$
- C.  $1^\circ$
- D.  $144^\circ$

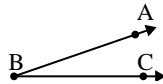
4)



Which choice best represents  $\angle ABC$ ?

- A.  $30^\circ$
- B.  $66^\circ$
- C.  $97^\circ$
- D.  $127^\circ$

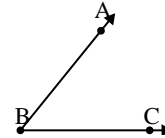
5)



Which choice best represents  $\angle ABC$ ?

- A.  $79^\circ$
- B.  $117^\circ$
- C.  $19^\circ$
- D.  $53^\circ$

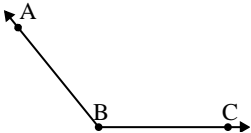
6)



Which choice best represents  $\angle ABC$ ?

- A.  $9^\circ$
- B.  $160^\circ$
- C.  $51^\circ$
- D.  $133^\circ$

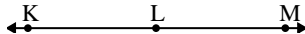
7)



Which choice best represents  $\angle ABC$ ?

- A.  $178^\circ$
- B.  $154^\circ$
- C.  $129^\circ$
- D.  $5^\circ$

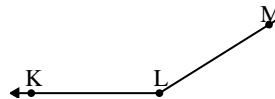
8)



Which choice best represents  $\angle KLM$ ?

- A.  $6^\circ$
- B.  $180^\circ$
- C.  $59^\circ$
- D.  $123^\circ$

9)



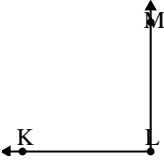
Which choice best represents  $\angle KLM$ ?

- A.  $124^\circ$
- B.  $64^\circ$
- C.  $148^\circ$
- D.  $28^\circ$

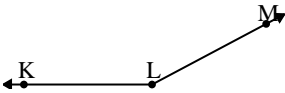
1. \_\_\_\_\_
2. \_\_\_\_\_
3. \_\_\_\_\_
4. \_\_\_\_\_
5. \_\_\_\_\_
6. \_\_\_\_\_
7. \_\_\_\_\_
8. \_\_\_\_\_
9. \_\_\_\_\_



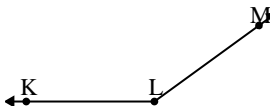
Solve each problem.

1)  Which choice best represents  $\angle KLM$ ?

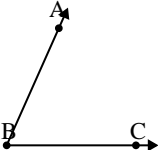
A.  $13^\circ$   
 B.  $147^\circ$   
 C.  $90^\circ$   
 D.  $42^\circ$

2)  Which choice best represents  $\angle KLM$ ?

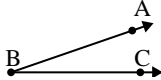
A.  $129^\circ$   
 B.  $11^\circ$   
 C.  $178^\circ$   
 D.  $152^\circ$

3)  Which choice best represents  $\angle KLM$ ?

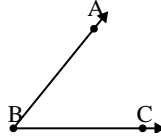
A.  $49^\circ$   
 B.  $91^\circ$   
 C.  $1^\circ$   
 D.  $144^\circ$

4)  Which choice best represents  $\angle ABC$ ?

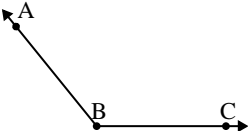
A.  $30^\circ$   
 B.  $66^\circ$   
 C.  $97^\circ$   
 D.  $127^\circ$

5)  Which choice best represents  $\angle ABC$ ?

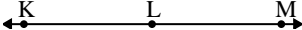
A.  $79^\circ$   
 B.  $117^\circ$   
 C.  $19^\circ$   
 D.  $53^\circ$

6)  Which choice best represents  $\angle ABC$ ?

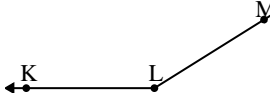
A.  $9^\circ$   
 B.  $160^\circ$   
 C.  $51^\circ$   
 D.  $133^\circ$

7)  Which choice best represents  $\angle ABC$ ?

A.  $178^\circ$   
 B.  $154^\circ$   
 C.  $129^\circ$   
 D.  $5^\circ$

8)  Which choice best represents  $\angle KLM$ ?

A.  $6^\circ$   
 B.  $180^\circ$   
 C.  $59^\circ$   
 D.  $123^\circ$

9)  Which choice best represents  $\angle KLM$ ?

A.  $124^\circ$   
 B.  $64^\circ$   
 C.  $148^\circ$   
 D.  $28^\circ$

Answers

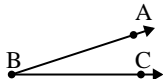
1.     **C**
2.     **D**
3.     **D**
4.     **B**
5.     **C**
6.     **C**
7.     **C**
8.     **B**
9.     **C**



Solve each problem.

Answers

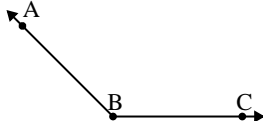
1)



Which choice best represents  $\angle ABC$ ?

- A.  $91^\circ$
- B.  $18^\circ$
- C.  $173^\circ$
- D.  $133^\circ$

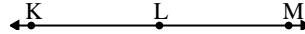
2)



Which choice best represents  $\angle ABC$ ?

- A.  $157^\circ$
- B.  $37^\circ$
- C.  $135^\circ$
- D.  $7^\circ$

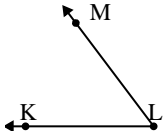
3)



Which choice best represents  $\angle KLM$ ?

- A.  $57^\circ$
- B.  $180^\circ$
- C.  $12^\circ$
- D.  $158^\circ$

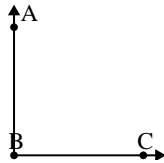
4)



Which choice best represents  $\angle KLM$ ?

- A.  $147^\circ$
- B.  $13^\circ$
- C.  $53^\circ$
- D.  $170^\circ$

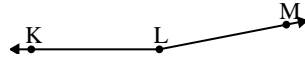
5)



Which choice best represents  $\angle ABC$ ?

- A.  $90^\circ$
- B.  $114^\circ$
- C.  $50^\circ$
- D.  $4^\circ$

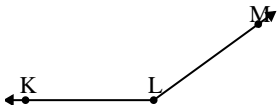
6)



Which choice best represents  $\angle KLM$ ?

- A.  $107^\circ$
- B.  $169^\circ$
- C.  $11^\circ$
- D.  $39^\circ$

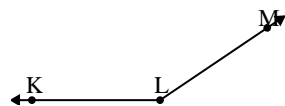
7)



Which choice best represents  $\angle KLM$ ?

- A.  $144^\circ$
- B.  $38^\circ$
- C.  $104^\circ$
- D.  $2^\circ$

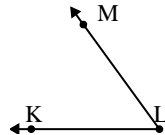
8)



Which choice best represents  $\angle KLM$ ?

- A.  $86^\circ$
- B.  $40^\circ$
- C.  $146^\circ$
- D.  $173^\circ$

9)



Which choice best represents  $\angle KLM$ ?

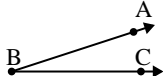
- A.  $54^\circ$
- B.  $89^\circ$
- C.  $28^\circ$
- D.  $151^\circ$

1. \_\_\_\_\_
2. \_\_\_\_\_
3. \_\_\_\_\_
4. \_\_\_\_\_
5. \_\_\_\_\_
6. \_\_\_\_\_
7. \_\_\_\_\_
8. \_\_\_\_\_
9. \_\_\_\_\_



Solve each problem.

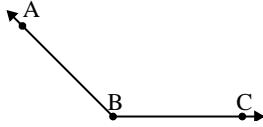
1)



Which choice best represents  $\angle ABC$ ?

- A.  $91^\circ$
- B.  $18^\circ$
- C.  $173^\circ$
- D.  $133^\circ$

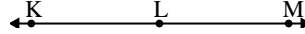
2)



Which choice best represents  $\angle ABC$ ?

- A.  $157^\circ$
- B.  $37^\circ$
- C.  $135^\circ$
- D.  $7^\circ$

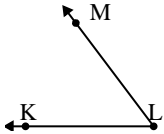
3)



Which choice best represents  $\angle KLM$ ?

- A.  $57^\circ$
- B.  $180^\circ$
- C.  $12^\circ$
- D.  $158^\circ$

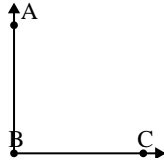
4)



Which choice best represents  $\angle KLM$ ?

- A.  $147^\circ$
- B.  $13^\circ$
- C.  $53^\circ$
- D.  $170^\circ$

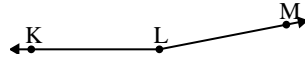
5)



Which choice best represents  $\angle ABC$ ?

- A.  $90^\circ$
- B.  $114^\circ$
- C.  $50^\circ$
- D.  $4^\circ$

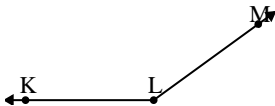
6)



Which choice best represents  $\angle KLM$ ?

- A.  $107^\circ$
- B.  $169^\circ$
- C.  $11^\circ$
- D.  $39^\circ$

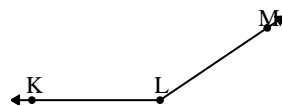
7)



Which choice best represents  $\angle KLM$ ?

- A.  $144^\circ$
- B.  $38^\circ$
- C.  $104^\circ$
- D.  $2^\circ$

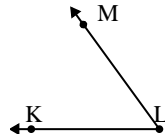
8)



Which choice best represents  $\angle KLM$ ?

- A.  $86^\circ$
- B.  $40^\circ$
- C.  $146^\circ$
- D.  $173^\circ$

9)



Which choice best represents  $\angle KLM$ ?

- A.  $54^\circ$
- B.  $89^\circ$
- C.  $28^\circ$
- D.  $151^\circ$

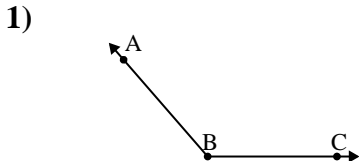
Answers

- 1. **B**
- 2. **C**
- 3. **B**
- 4. **C**
- 5. **A**
- 6. **B**
- 7. **A**
- 8. **C**
- 9. **A**



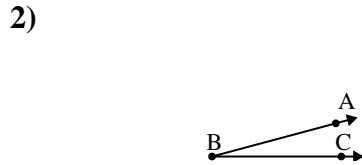
Solve each problem.

**Answers**



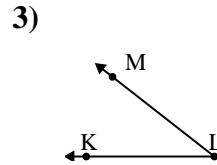
Which choice best represents  $\angle ABC$ ?

- A.  $107^\circ$
- B.  $131^\circ$
- C.  $26^\circ$
- D.  $57^\circ$



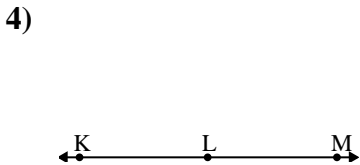
Which choice best represents  $\angle ABC$ ?

- A.  $154^\circ$
- B.  $15^\circ$
- C.  $49^\circ$
- D.  $76^\circ$



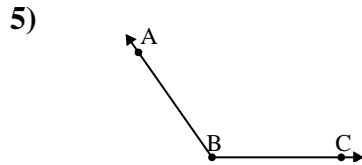
Which choice best represents  $\angle KLM$ ?

- A.  $38^\circ$
- B.  $81^\circ$
- C.  $175^\circ$
- D.  $107^\circ$



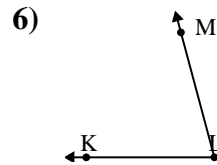
Which choice best represents  $\angle KLM$ ?

- A.  $156^\circ$
- B.  $71^\circ$
- C.  $180^\circ$
- D.  $25^\circ$



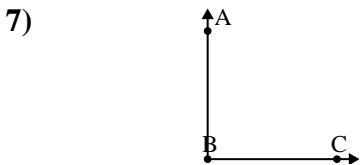
Which choice best represents  $\angle ABC$ ?

- A.  $58^\circ$
- B.  $33^\circ$
- C.  $4^\circ$
- D.  $125^\circ$



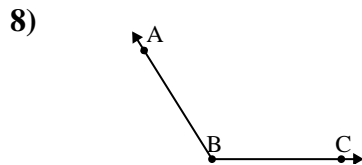
Which choice best represents  $\angle KLM$ ?

- A.  $29^\circ$
- B.  $172^\circ$
- C.  $7^\circ$
- D.  $75^\circ$



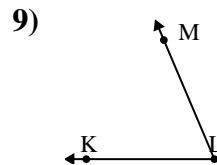
Which choice best represents  $\angle ABC$ ?

- A.  $69^\circ$
- B.  $127^\circ$
- C.  $3^\circ$
- D.  $90^\circ$



Which choice best represents  $\angle ABC$ ?

- A.  $122^\circ$
- B.  $84^\circ$
- C.  $37^\circ$
- D.  $158^\circ$



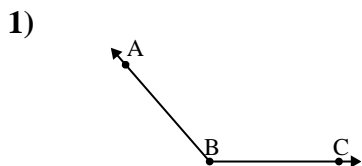
Which choice best represents  $\angle KLM$ ?

- A.  $122^\circ$
- B.  $165^\circ$
- C.  $67^\circ$
- D.  $143^\circ$

- 1. \_\_\_\_\_
- 2. \_\_\_\_\_
- 3. \_\_\_\_\_
- 4. \_\_\_\_\_
- 5. \_\_\_\_\_
- 6. \_\_\_\_\_
- 7. \_\_\_\_\_
- 8. \_\_\_\_\_
- 9. \_\_\_\_\_

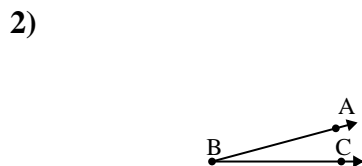


Solve each problem.



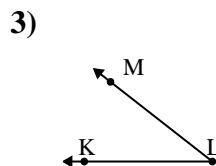
Which choice best represents  $\angle ABC$ ?

- A.  $107^\circ$
- B.  $131^\circ$
- C.  $26^\circ$
- D.  $57^\circ$



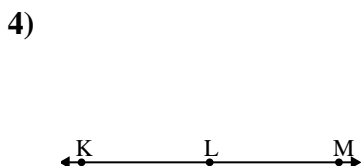
Which choice best represents  $\angle ABC$ ?

- A.  $154^\circ$
- B.  $15^\circ$
- C.  $49^\circ$
- D.  $76^\circ$



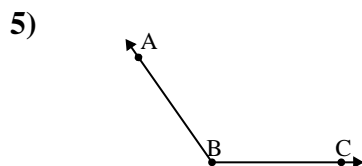
Which choice best represents  $\angle KLM$ ?

- A.  $38^\circ$
- B.  $81^\circ$
- C.  $175^\circ$
- D.  $107^\circ$



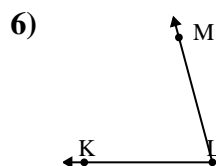
Which choice best represents  $\angle KLM$ ?

- A.  $156^\circ$
- B.  $71^\circ$
- C.  $180^\circ$
- D.  $25^\circ$



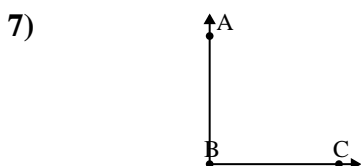
Which choice best represents  $\angle ABC$ ?

- A.  $58^\circ$
- B.  $33^\circ$
- C.  $4^\circ$
- D.  $125^\circ$



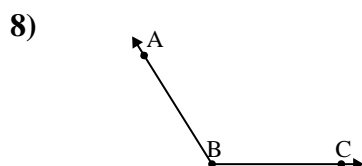
Which choice best represents  $\angle KLM$ ?

- A.  $29^\circ$
- B.  $172^\circ$
- C.  $7^\circ$
- D.  $75^\circ$



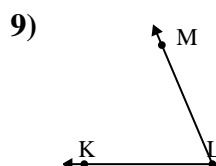
Which choice best represents  $\angle ABC$ ?

- A.  $69^\circ$
- B.  $127^\circ$
- C.  $3^\circ$
- D.  $90^\circ$



Which choice best represents  $\angle ABC$ ?

- A.  $122^\circ$
- B.  $84^\circ$
- C.  $37^\circ$
- D.  $158^\circ$



Which choice best represents  $\angle KLM$ ?

- A.  $122^\circ$
- B.  $165^\circ$
- C.  $67^\circ$
- D.  $143^\circ$

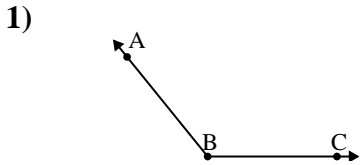
Answers

- 1. **B**
- 2. **B**
- 3. **A**
- 4. **C**
- 5. **D**
- 6. **D**
- 7. **D**
- 8. **A**
- 9. **C**



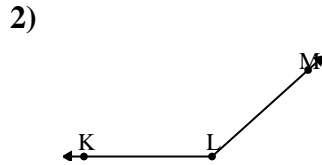
Solve each problem.

Answers



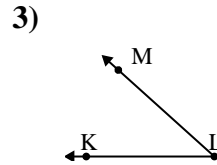
Which choice best represents  $\angle ABC$ ?

- A.  $129^\circ$
- B.  $48^\circ$
- C.  $153^\circ$
- D.  $175^\circ$



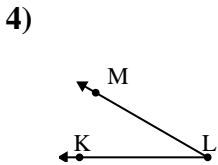
Which choice best represents  $\angle KLM$ ?

- A.  $176^\circ$
- B.  $66^\circ$
- C.  $40^\circ$
- D.  $138^\circ$



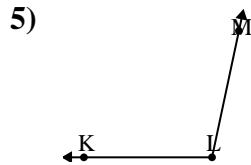
Which choice best represents  $\angle KLM$ ?

- A.  $148^\circ$
- B.  $126^\circ$
- C.  $42^\circ$
- D.  $94^\circ$



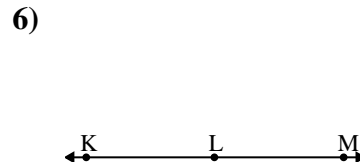
Which choice best represents  $\angle KLM$ ?

- A.  $30^\circ$
- B.  $7^\circ$
- C.  $156^\circ$
- D.  $66^\circ$



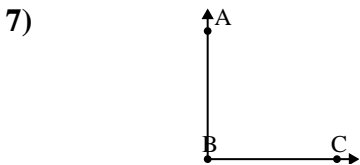
Which choice best represents  $\angle KLM$ ?

- A.  $129^\circ$
- B.  $102^\circ$
- C.  $13^\circ$
- D.  $56^\circ$



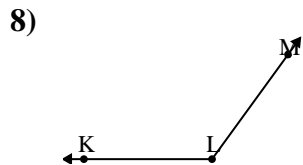
Which choice best represents  $\angle KLM$ ?

- A.  $28^\circ$
- B.  $146^\circ$
- C.  $2^\circ$
- D.  $180^\circ$



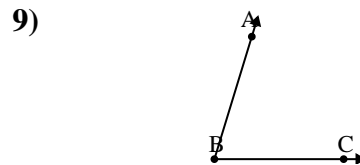
Which choice best represents  $\angle ABC$ ?

- A.  $35^\circ$
- B.  $90^\circ$
- C.  $172^\circ$
- D.  $62^\circ$



Which choice best represents  $\angle KLM$ ?

- A.  $67^\circ$
- B.  $153^\circ$
- C.  $18^\circ$
- D.  $126^\circ$



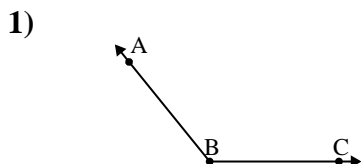
Which choice best represents  $\angle ABC$ ?

- A.  $123^\circ$
- B.  $42^\circ$
- C.  $157^\circ$
- D.  $73^\circ$

1. \_\_\_\_\_
2. \_\_\_\_\_
3. \_\_\_\_\_
4. \_\_\_\_\_
5. \_\_\_\_\_
6. \_\_\_\_\_
7. \_\_\_\_\_
8. \_\_\_\_\_
9. \_\_\_\_\_

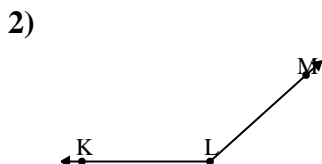


Solve each problem.



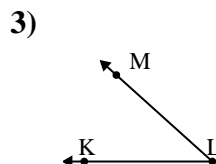
Which choice best represents  $\angle ABC$ ?

- A.  $129^\circ$
- B.  $48^\circ$
- C.  $153^\circ$
- D.  $175^\circ$



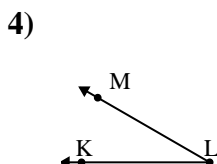
Which choice best represents  $\angle KLM$ ?

- A.  $176^\circ$
- B.  $66^\circ$
- C.  $40^\circ$
- D.  $138^\circ$



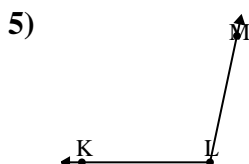
Which choice best represents  $\angle KLM$ ?

- A.  $148^\circ$
- B.  $126^\circ$
- C.  $42^\circ$
- D.  $94^\circ$



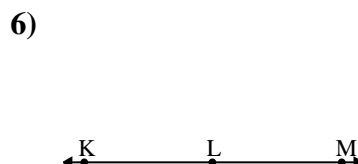
Which choice best represents  $\angle KLM$ ?

- A.  $30^\circ$
- B.  $7^\circ$
- C.  $156^\circ$
- D.  $66^\circ$



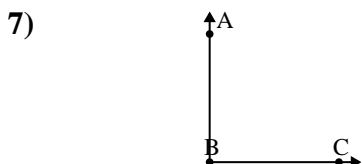
Which choice best represents  $\angle KLM$ ?

- A.  $129^\circ$
- B.  $102^\circ$
- C.  $13^\circ$
- D.  $56^\circ$



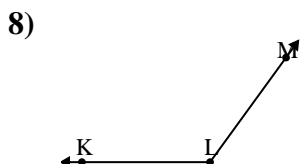
Which choice best represents  $\angle KLM$ ?

- A.  $28^\circ$
- B.  $146^\circ$
- C.  $2^\circ$
- D.  $180^\circ$



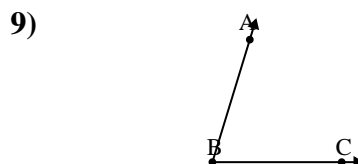
Which choice best represents  $\angle ABC$ ?

- A.  $35^\circ$
- B.  $90^\circ$
- C.  $172^\circ$
- D.  $62^\circ$



Which choice best represents  $\angle KLM$ ?

- A.  $67^\circ$
- B.  $153^\circ$
- C.  $18^\circ$
- D.  $126^\circ$



Which choice best represents  $\angle ABC$ ?

- A.  $123^\circ$
- B.  $42^\circ$
- C.  $157^\circ$
- D.  $73^\circ$

Answers

- 1. **A**
- 2. **D**
- 3. **C**
- 4. **A**
- 5. **B**
- 6. **D**
- 7. **B**
- 8. **D**
- 9. **D**

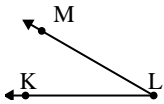




Solve each problem.

Answers

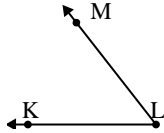
1)



Which choice best represents  $\angle KLM$ ?

- A.  $176^\circ$
- B.  $143^\circ$
- C.  $101^\circ$
- D.  $30^\circ$

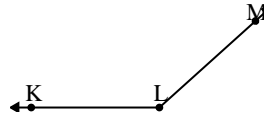
2)



Which choice best represents  $\angle KLM$ ?

- A.  $118^\circ$
- B.  $52^\circ$
- C.  $86^\circ$
- D.  $9^\circ$

3)

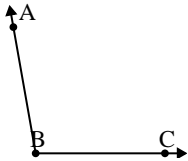


Which choice best represents  $\angle KLM$ ?

- A.  $5^\circ$
- B.  $116^\circ$
- C.  $138^\circ$
- D.  $79^\circ$

1. \_\_\_\_\_
2. \_\_\_\_\_
3. \_\_\_\_\_
4. \_\_\_\_\_
5. \_\_\_\_\_
6. \_\_\_\_\_
7. \_\_\_\_\_
8. \_\_\_\_\_
9. \_\_\_\_\_

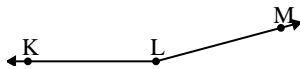
4)



Which choice best represents  $\angle ABC$ ?

- A.  $19^\circ$
- B.  $150^\circ$
- C.  $124^\circ$
- D.  $100^\circ$

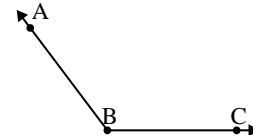
5)



Which choice best represents  $\angle KLM$ ?

- A.  $114^\circ$
- B.  $165^\circ$
- C.  $0^\circ$
- D.  $66^\circ$

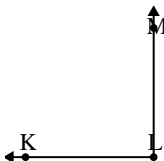
6)



Which choice best represents  $\angle ABC$ ?

- A.  $16^\circ$
- B.  $127^\circ$
- C.  $92^\circ$
- D.  $151^\circ$

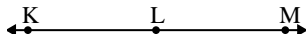
7)



Which choice best represents  $\angle KLM$ ?

- A.  $31^\circ$
- B.  $122^\circ$
- C.  $90^\circ$
- D.  $6^\circ$

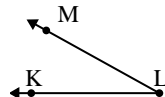
8)



Which choice best represents  $\angle KLM$ ?

- A.  $180^\circ$
- B.  $105^\circ$
- C.  $58^\circ$
- D.  $130^\circ$

9)



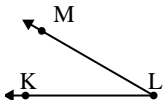
Which choice best represents  $\angle KLM$ ?

- A.  $116^\circ$
- B.  $178^\circ$
- C.  $140^\circ$
- D.  $29^\circ$



Solve each problem.

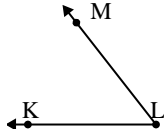
1)



Which choice best represents  $\angle KLM$ ?

- A.  $176^\circ$
- B.  $143^\circ$
- C.  $101^\circ$
- D.  $30^\circ$

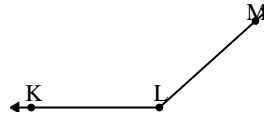
2)



Which choice best represents  $\angle KLM$ ?

- A.  $118^\circ$
- B.  $52^\circ$
- C.  $86^\circ$
- D.  $9^\circ$

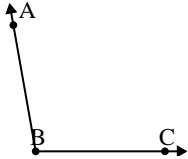
3)



Which choice best represents  $\angle KLM$ ?

- A.  $5^\circ$
- B.  $116^\circ$
- C.  $138^\circ$
- D.  $79^\circ$

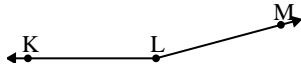
4)



Which choice best represents  $\angle ABC$ ?

- A.  $19^\circ$
- B.  $150^\circ$
- C.  $124^\circ$
- D.  $100^\circ$

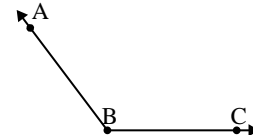
5)



Which choice best represents  $\angle KLM$ ?

- A.  $114^\circ$
- B.  $165^\circ$
- C.  $0^\circ$
- D.  $66^\circ$

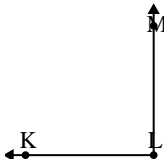
6)



Which choice best represents  $\angle ABC$ ?

- A.  $16^\circ$
- B.  $127^\circ$
- C.  $92^\circ$
- D.  $151^\circ$

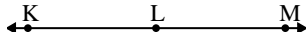
7)



Which choice best represents  $\angle KLM$ ?

- A.  $31^\circ$
- B.  $122^\circ$
- C.  $90^\circ$
- D.  $6^\circ$

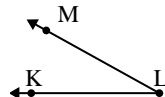
8)



Which choice best represents  $\angle KLM$ ?

- A.  $180^\circ$
- B.  $105^\circ$
- C.  $58^\circ$
- D.  $130^\circ$

9)



Which choice best represents  $\angle KLM$ ?

- A.  $116^\circ$
- B.  $178^\circ$
- C.  $140^\circ$
- D.  $29^\circ$

Answers

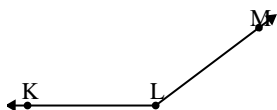
- 1. **D**
- 2. **B**
- 3. **C**
- 4. **D**
- 5. **B**
- 6. **B**
- 7. **C**
- 8. **A**
- 9. **D**



Solve each problem.

Answers

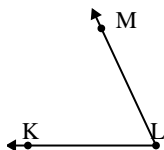
1)



Which choice best represents  $\angle KLM$ ?

- A.  $0^\circ$
- B.  $35^\circ$
- C.  $115^\circ$
- D.  $143^\circ$

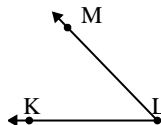
2)



Which choice best represents  $\angle KLM$ ?

- A.  $134^\circ$
- B.  $65^\circ$
- C.  $18^\circ$
- D.  $44^\circ$

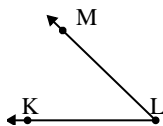
3)



Which choice best represents  $\angle KLM$ ?

- A.  $153^\circ$
- B.  $7^\circ$
- C.  $46^\circ$
- D.  $78^\circ$

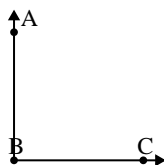
4)



Which choice best represents  $\angle KLM$ ?

- A.  $84^\circ$
- B.  $174^\circ$
- C.  $44^\circ$
- D.  $136^\circ$

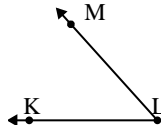
5)



Which choice best represents  $\angle ABC$ ?

- A.  $167^\circ$
- B.  $146^\circ$
- C.  $90^\circ$
- D.  $23^\circ$

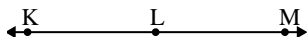
6)



Which choice best represents  $\angle KLM$ ?

- A.  $99^\circ$
- B.  $125^\circ$
- C.  $48^\circ$
- D.  $69^\circ$

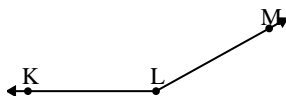
7)



Which choice best represents  $\angle KLM$ ?

- A.  $122^\circ$
- B.  $180^\circ$
- C.  $65^\circ$
- D.  $153^\circ$

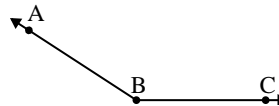
8)



Which choice best represents  $\angle KLM$ ?

- A.  $151^\circ$
- B.  $92^\circ$
- C.  $115^\circ$
- D.  $27^\circ$

9)



Which choice best represents  $\angle ABC$ ?

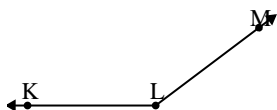
- A.  $124^\circ$
- B.  $89^\circ$
- C.  $147^\circ$
- D.  $31^\circ$

1. \_\_\_\_\_
2. \_\_\_\_\_
3. \_\_\_\_\_
4. \_\_\_\_\_
5. \_\_\_\_\_
6. \_\_\_\_\_
7. \_\_\_\_\_
8. \_\_\_\_\_
9. \_\_\_\_\_



Solve each problem.

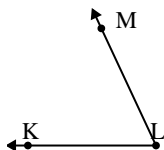
1)



Which choice best represents  $\angle KLM$ ?

- A.  $0^\circ$
- B.  $35^\circ$
- C.  $115^\circ$
- D.  $143^\circ$

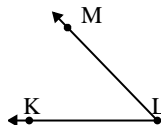
2)



Which choice best represents  $\angle KLM$ ?

- A.  $134^\circ$
- B.  $65^\circ$
- C.  $18^\circ$
- D.  $44^\circ$

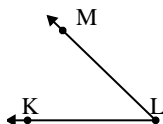
3)



Which choice best represents  $\angle KLM$ ?

- A.  $153^\circ$
- B.  $7^\circ$
- C.  $46^\circ$
- D.  $78^\circ$

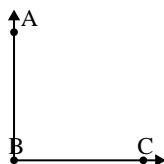
4)



Which choice best represents  $\angle KLM$ ?

- A.  $84^\circ$
- B.  $174^\circ$
- C.  $44^\circ$
- D.  $136^\circ$

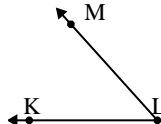
5)



Which choice best represents  $\angle ABC$ ?

- A.  $167^\circ$
- B.  $146^\circ$
- C.  $90^\circ$
- D.  $23^\circ$

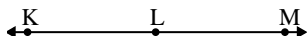
6)



Which choice best represents  $\angle KLM$ ?

- A.  $99^\circ$
- B.  $125^\circ$
- C.  $48^\circ$
- D.  $69^\circ$

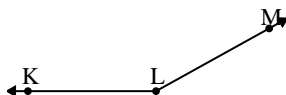
7)



Which choice best represents  $\angle KLM$ ?

- A.  $122^\circ$
- B.  $180^\circ$
- C.  $65^\circ$
- D.  $153^\circ$

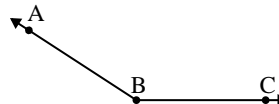
8)



Which choice best represents  $\angle KLM$ ?

- A.  $151^\circ$
- B.  $92^\circ$
- C.  $115^\circ$
- D.  $27^\circ$

9)



Which choice best represents  $\angle ABC$ ?

- A.  $124^\circ$
- B.  $89^\circ$
- C.  $147^\circ$
- D.  $31^\circ$

Answers

- 1. **D**
- 2. **B**
- 3. **C**
- 4. **C**
- 5. **C**
- 6. **C**
- 7. **B**
- 8. **A**
- 9. **C**