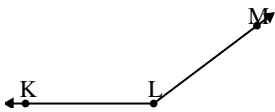




Solve each problem.

Answers

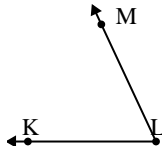
1)



Which choice best represents  $\angle KLM$ ?

- A.  $0^\circ$
- B.  $35^\circ$
- C.  $115^\circ$
- D.  $143^\circ$

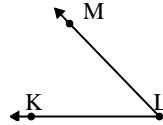
2)



Which choice best represents  $\angle KLM$ ?

- A.  $134^\circ$
- B.  $65^\circ$
- C.  $18^\circ$
- D.  $44^\circ$

3)



Which choice best represents  $\angle KLM$ ?

- A.  $153^\circ$
- B.  $7^\circ$
- C.  $46^\circ$
- D.  $78^\circ$

1. \_\_\_\_\_

2. \_\_\_\_\_

3. \_\_\_\_\_

4. \_\_\_\_\_

5. \_\_\_\_\_

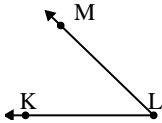
6. \_\_\_\_\_

7. \_\_\_\_\_

8. \_\_\_\_\_

9. \_\_\_\_\_

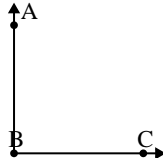
4)



Which choice best represents  $\angle KLM$ ?

- A.  $84^\circ$
- B.  $174^\circ$
- C.  $44^\circ$
- D.  $136^\circ$

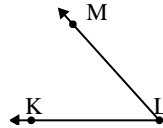
5)



Which choice best represents  $\angle ABC$ ?

- A.  $167^\circ$
- B.  $146^\circ$
- C.  $90^\circ$
- D.  $23^\circ$

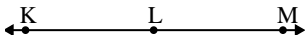
6)



Which choice best represents  $\angle KLM$ ?

- A.  $99^\circ$
- B.  $125^\circ$
- C.  $48^\circ$
- D.  $69^\circ$

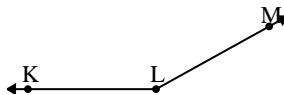
7)



Which choice best represents  $\angle KLM$ ?

- A.  $122^\circ$
- B.  $180^\circ$
- C.  $65^\circ$
- D.  $153^\circ$

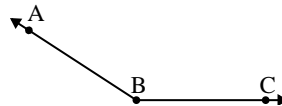
8)



Which choice best represents  $\angle KLM$ ?

- A.  $151^\circ$
- B.  $92^\circ$
- C.  $115^\circ$
- D.  $27^\circ$

9)



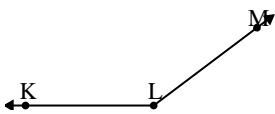
Which choice best represents  $\angle ABC$ ?

- A.  $124^\circ$
- B.  $89^\circ$
- C.  $147^\circ$
- D.  $31^\circ$



Solve each problem.

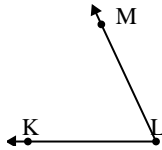
1)



Which choice best represents  $\angle KLM$ ?

- A.  $0^\circ$
- B.  $35^\circ$
- C.  $115^\circ$
- D.  $143^\circ$

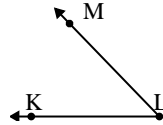
2)



Which choice best represents  $\angle KLM$ ?

- A.  $134^\circ$
- B.  $65^\circ$
- C.  $18^\circ$
- D.  $44^\circ$

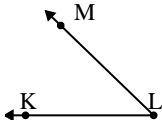
3)



Which choice best represents  $\angle KLM$ ?

- A.  $153^\circ$
- B.  $7^\circ$
- C.  $46^\circ$
- D.  $78^\circ$

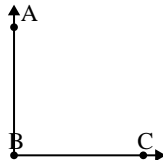
4)



Which choice best represents  $\angle KLM$ ?

- A.  $84^\circ$
- B.  $174^\circ$
- C.  $44^\circ$
- D.  $136^\circ$

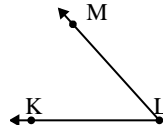
5)



Which choice best represents  $\angle ABC$ ?

- A.  $167^\circ$
- B.  $146^\circ$
- C.  $90^\circ$
- D.  $23^\circ$

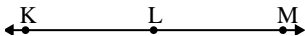
6)



Which choice best represents  $\angle KLM$ ?

- A.  $99^\circ$
- B.  $125^\circ$
- C.  $48^\circ$
- D.  $69^\circ$

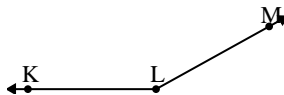
7)



Which choice best represents  $\angle KLM$ ?

- A.  $122^\circ$
- B.  $180^\circ$
- C.  $65^\circ$
- D.  $153^\circ$

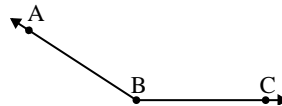
8)



Which choice best represents  $\angle KLM$ ?

- A.  $151^\circ$
- B.  $92^\circ$
- C.  $115^\circ$
- D.  $27^\circ$

9)



Which choice best represents  $\angle ABC$ ?

- A.  $124^\circ$
- B.  $89^\circ$
- C.  $147^\circ$
- D.  $31^\circ$

**Answers**

- 1. **D**
- 2. **B**
- 3. **C**
- 4. **C**
- 5. **C**
- 6. **C**
- 7. **B**
- 8. **A**
- 9. **C**