



Fill in the blanks to find the amounts.

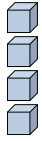
Answers

Ex)

1)

2)

Ex. 4



0

4

tens

ones

tens

ones

tens

ones

1. _____

2. _____

3. _____

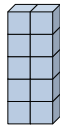
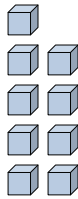
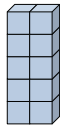
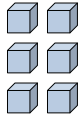
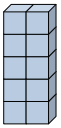
4. _____

3)

4)

5)

5. _____



tens

ones

tens

ones

tens

ones

6. _____

7. _____

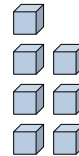
8. _____

6)

7)

8)

9. _____



tens

ones

tens

ones

tens

ones

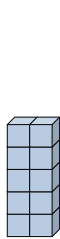
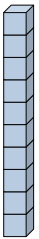
10. _____

11. _____

9)

10)

11)



tens

ones

tens

ones

tens

ones

