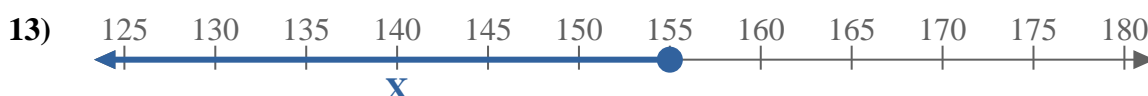
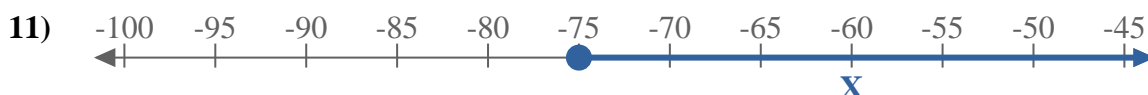
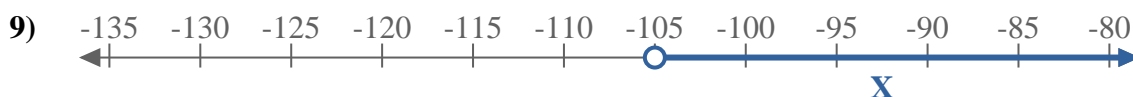
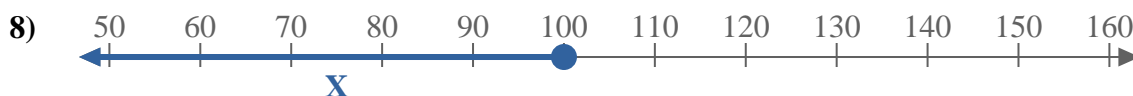
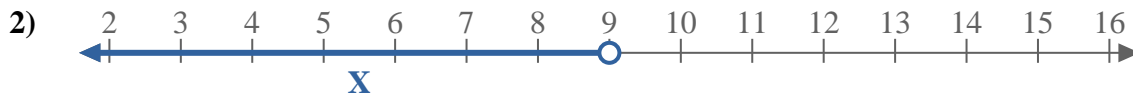
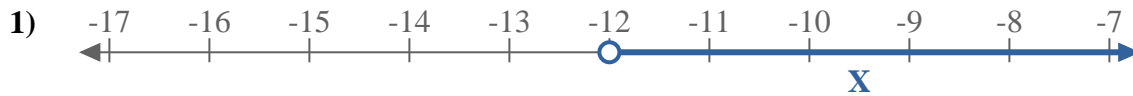




Write an inequality to express the number line.



Answers

Ex.  $x \leq 130$

1. \_\_\_\_\_

2. \_\_\_\_\_

3. \_\_\_\_\_

4. \_\_\_\_\_

5. \_\_\_\_\_

6. \_\_\_\_\_

7. \_\_\_\_\_

8. \_\_\_\_\_

9. \_\_\_\_\_

10. \_\_\_\_\_

11. \_\_\_\_\_

12. \_\_\_\_\_

13. \_\_\_\_\_

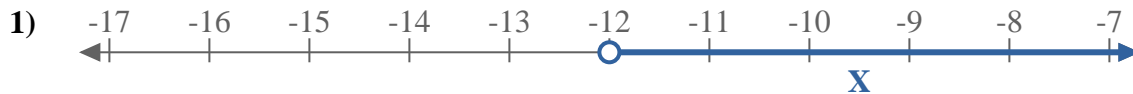


Write an inequality to express the number line.

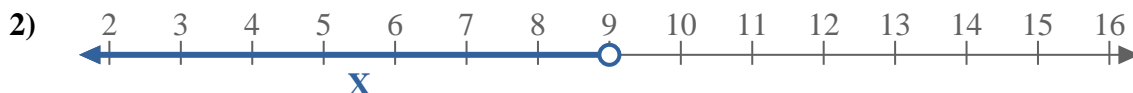


Answers

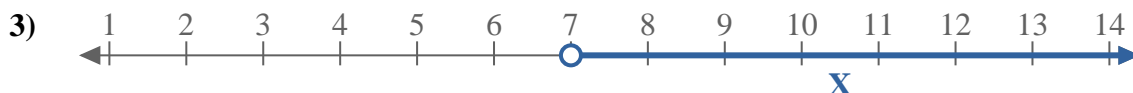
Ex.  $X \leq 130$



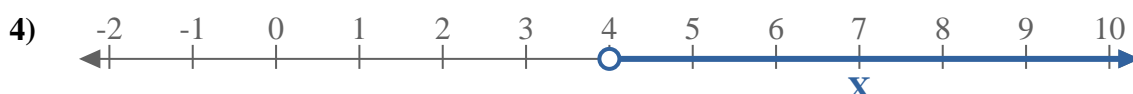
1.  $X > -12$



2.  $X < 9$



3.  $X > 7$



4.  $X > 4$



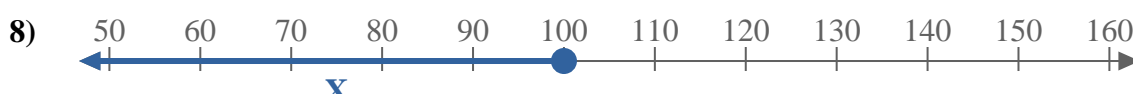
5.  $X < 2$



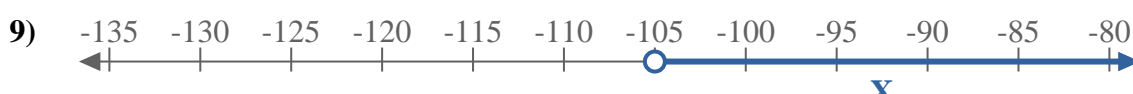
6.  $X < -1$



7.  $X > 8$



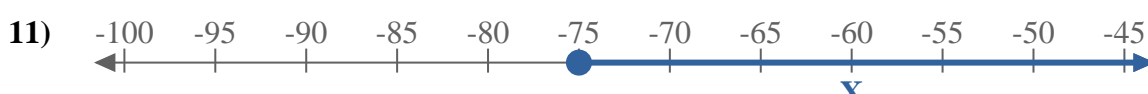
8.  $X \leq 100$



9.  $X > -105$



10.  $X \leq 9$



11.  $X \geq -75$



12.  $X \leq 8$



13.  $X \leq 155$