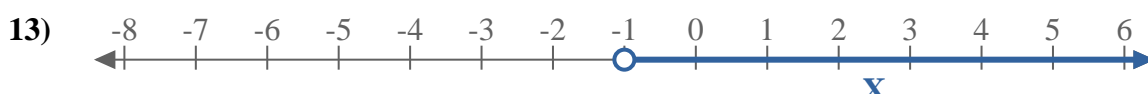
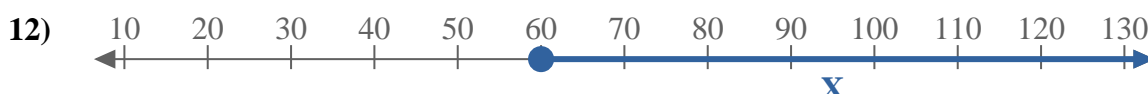
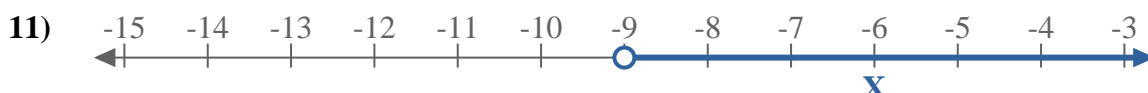
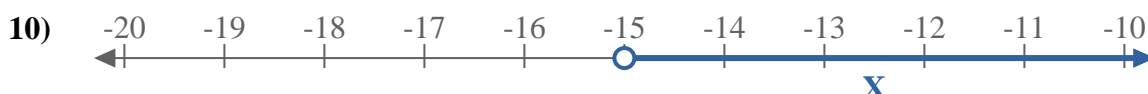
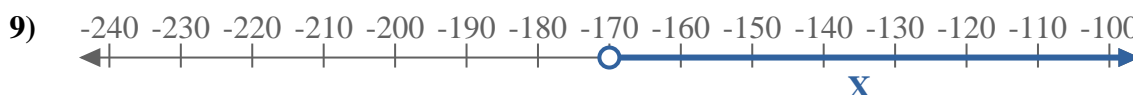
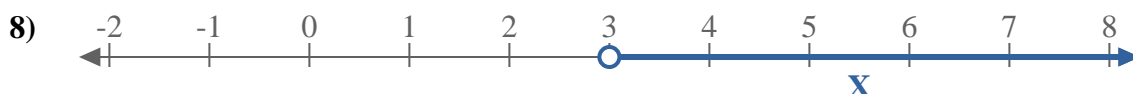
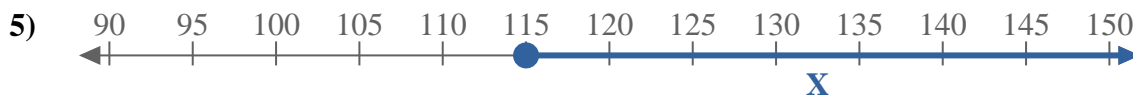




Write an inequality to express the number line.



Answers

Ex. $x \geq -3$

1. _____

2. _____

3. _____

4. _____

5. _____

6. _____

7. _____

8. _____

9. _____

10. _____

11. _____

12. _____

13. _____



Write an inequality to express the number line.



Answers

Ex. $X \geq -3$



1. $X < 14$



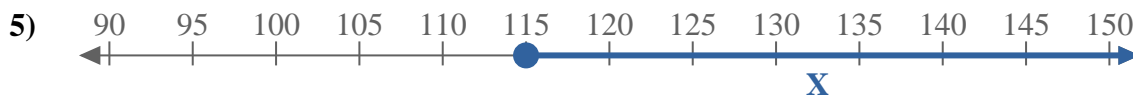
2. $X \leq 5$



3. $X \leq -19$



4. $X < -120$



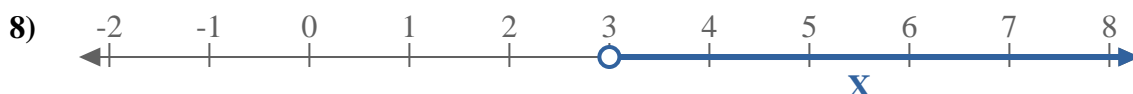
5. $X \geq 115$



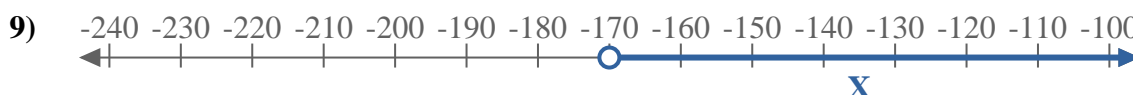
6. $X \leq 5$



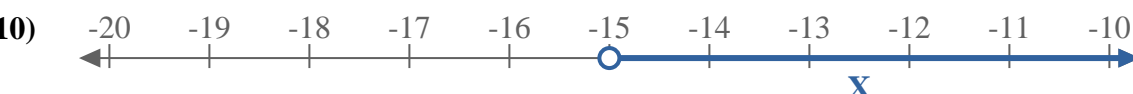
7. $X \geq -70$



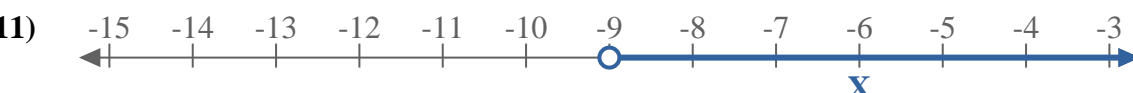
8. $X > 3$



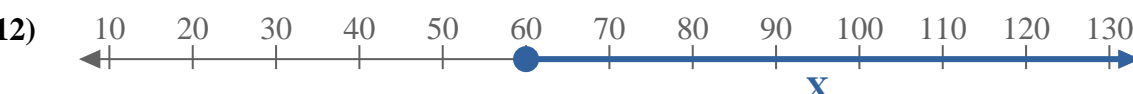
9. $X > -170$



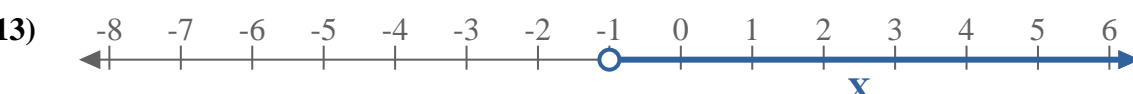
10. $X > -15$



11. $X > -9$



12. $X \geq 60$



13. $X > -1$