






Compare the number of shapes.




Are there more or more ?




Are there more or more ?



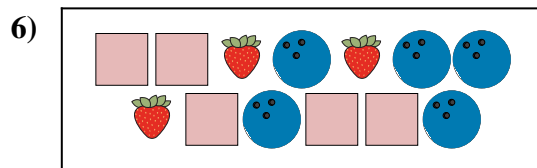
Are there less or less ?



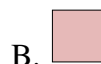
Are there more or more ?



Are there less or less ?



Are there more or more ?



Answers

1. _____

2. _____

3. _____

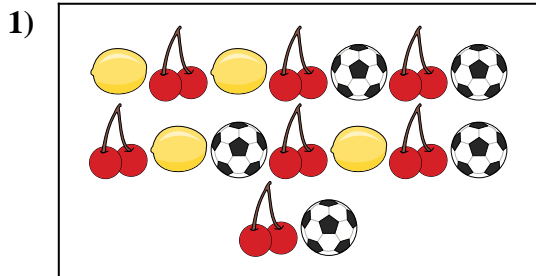
4. _____

5. _____

6. _____




Compare the number of shapes.



Are there more  or more  ?

A. 

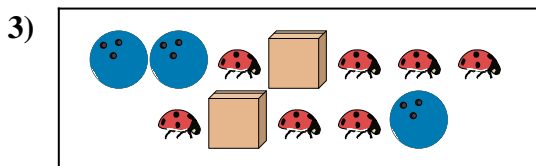
B. 



Are there more  or more  ?

A. 


B. 



Are there less  or less  ?

A. 


B. 



Are there more  or more  ?

A. 

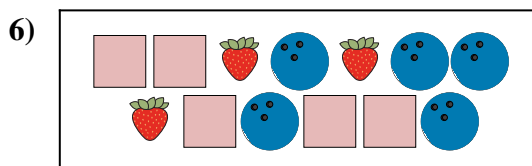
B. 



Are there less  or less  ?

A. 

B. 



Are there more  or more  ?

A. 

B. 

Answers

1. **A**

2. **B**

3. **B**

4. **B**

5. **A**

6. **B**