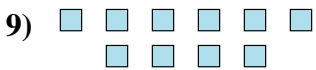
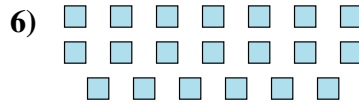
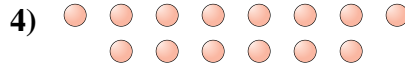
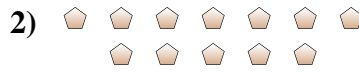





Determine if the number of shapes is even or odd.

Answers



1. _____
2. _____
3. _____
4. _____
5. _____
6. _____
7. _____
8. _____
9. _____
10. _____



Determine if the number of shapes is even or odd.



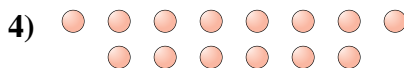
11



12



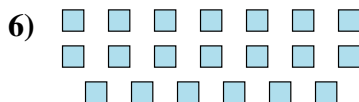
8



14



8



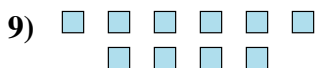
20



11



5



10



6

Answers

1. odd

2. even

3. even

4. even

5. even

6. even

7. odd

8. odd

9. even

10. even