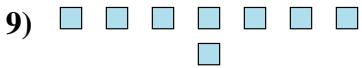
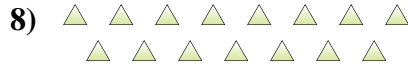
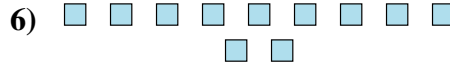
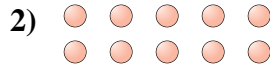





Determine if the number of shapes is even or odd.




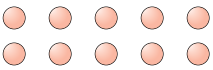
Answers


1. _____
2. _____
3. _____
4. _____
5. _____
6. _____
7. _____
8. _____
9. _____
10. _____



Determine if the number of shapes is even or odd.

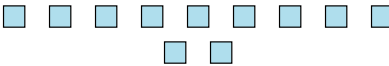
1) 
18

2) 
10

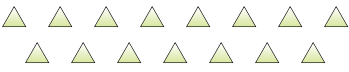
3) 
6

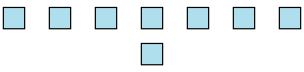
4) 
13


5) 
6

6) 
11

7) 
12

8) 
15

9) 
8

10) 
16

Answers

1. even

2. even

3. even

4. odd

5. even

6. odd

7. even

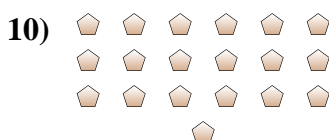
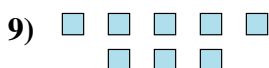
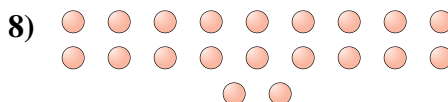
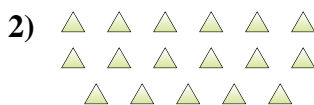
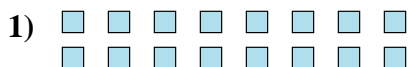
8. odd

9. even

10. even



Determine if the number of shapes is even or odd.



Answers

1. _____

2. _____

3. _____

4. _____

5. _____

6. _____

7. _____

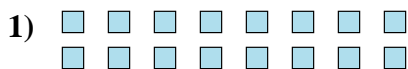
8. _____

9. _____

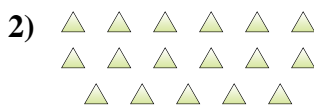
10. _____



Determine if the number of shapes is even or odd.



16



17



5



6



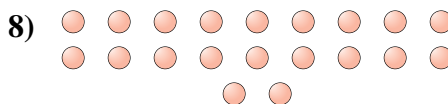
13



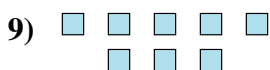
15



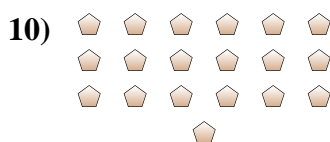
8



20



8



19

Answers

1. even

2. odd

3. odd

4. even

5. odd

6. odd

7. even


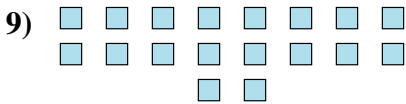
8. even

9. even

10. odd



Determine if the number of shapes is even or odd.



Answers

- 1. _____
- 2. _____
- 3. _____
- 4. _____
- 5. _____
- 6. _____
- 7. _____
- 8. _____
- 9. _____
- 10. _____



Determine if the number of shapes is even or odd.



5



12



6



8



5



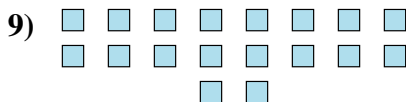
5




5



9



18



17

Answers

1. odd

2. even

3. even

4. even

5. odd

6. odd

7. odd

8. odd

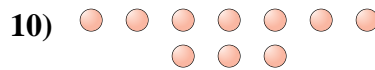
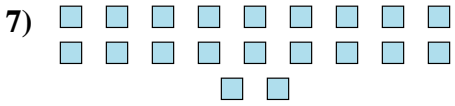
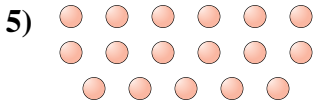
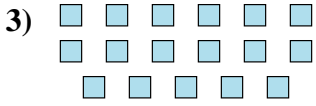
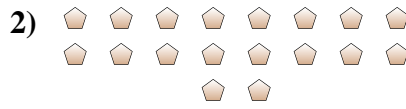
9. even

10. odd



Determine if the number of shapes is even or odd.

Answers



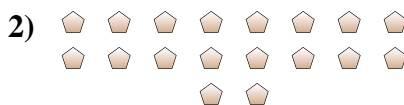
- 1. _____
- 2. _____
- 3. _____
- 4. _____
- 5. _____
- 6. _____
- 7. _____
- 8. _____
- 9. _____
- 10. _____



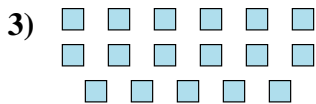
Determine if the number of shapes is even or odd.



19



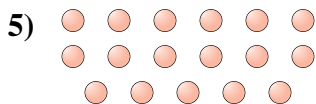
18



17



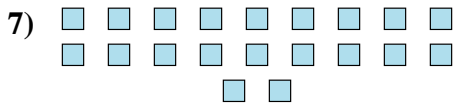
15



17



13



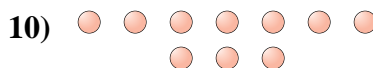
20



7



6



10

Answers

1. odd

2. even

3. odd

4. odd

5. odd

6. odd

7. even

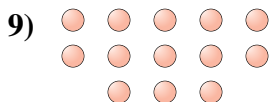

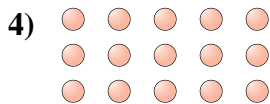
8. odd

9. even

10. even



Determine if the number of shapes is even or odd.



Answers

1. _____

2. _____

3. _____

4. _____

5. _____

6. _____

7. _____

8. _____

9. _____

10. _____



Determine if the number of shapes is even or odd.



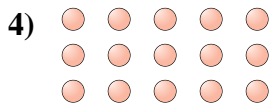
6




14



10



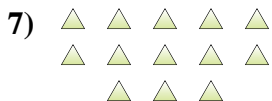
15



17



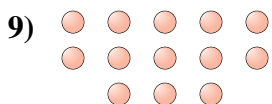
7



13



10



13



8

Answers

1. even

2. even

3. even

4. odd

5. odd

6. odd

7. odd

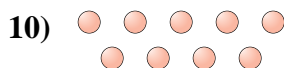
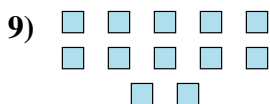
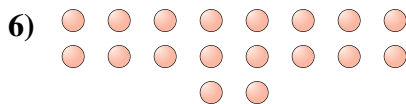
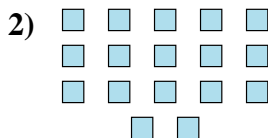
8. even

9. odd

10. even



Determine if the number of shapes is even or odd.



Answers

1. _____

2. _____

3. _____

4. _____

5. _____

6. _____

7. _____

8. _____

9. _____

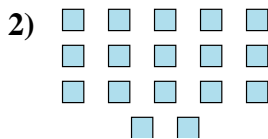
10. _____



Determine if the number of shapes is even or odd.



10



17



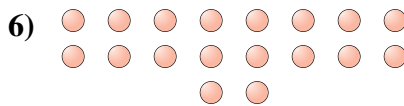
11




19



14



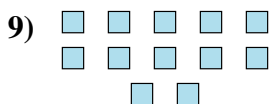
18



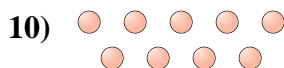
18



8



12



9

Answers

1. even

2. odd

3. odd

4. odd

5. even

6. even

7. even

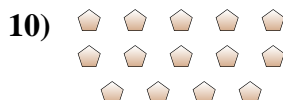
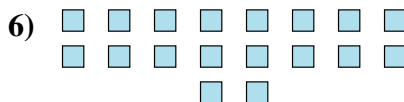

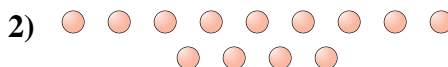
8. even

9. even

10. odd



Determine if the number of shapes is even or odd.



Answers

1. _____

2. _____

3. _____

4. _____

5. _____

6. _____

7. _____

8. _____

9. _____

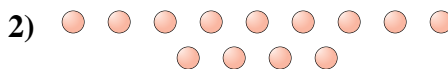
10. _____




Determine if the number of shapes is even or odd.



9



13



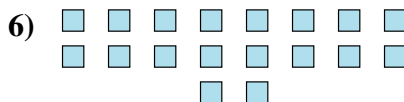
19



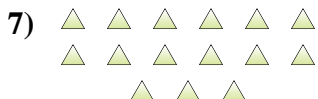
15



17



18



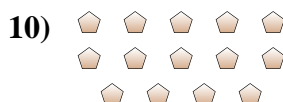
15



5



10



14

Answers

1. odd

2. odd

3. odd

4. odd

5. odd

6. even

7. odd

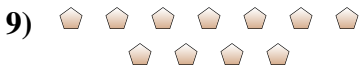
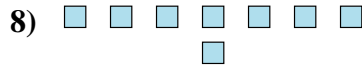
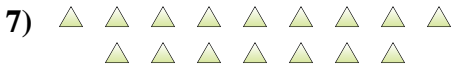
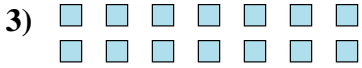
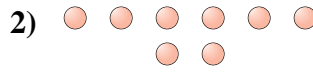
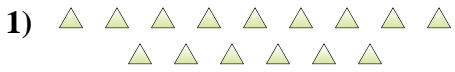
8. odd

9. even

10. even



Determine if the number of shapes is even or odd.



Answers

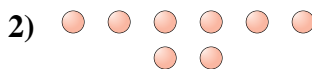
1. _____
2. _____
3. _____
4. _____
5. _____
6. _____
7. _____
8. _____
9. _____
10. _____



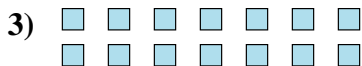
Determine if the number of shapes is even or odd.



15



8



14



10



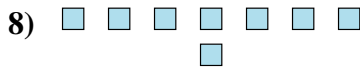
12



8



16



8



11



7

Answers

1. odd

2. even

3. even

4. even

5. even

6. even

7. even

8. even

9. odd

10. odd



Determine if the number of shapes is even or odd.

Answers



1. _____

2. _____

3. _____

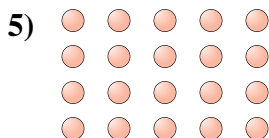


4. _____

5. _____

6. _____

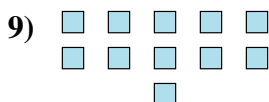
7. _____



8. _____

9. _____

10. _____





Determine if the number of shapes is even or odd.



7



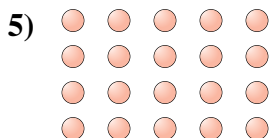
18



6



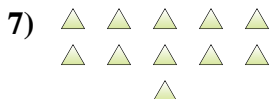
7



20



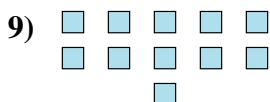
9



11



5



11



6

Answers

1. odd

2. even

3. even

4. odd

5. even

6. odd

7. odd

8. odd


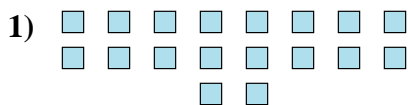
9. odd

10. even



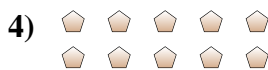
Determine if the number of shapes is even or odd.

Answers



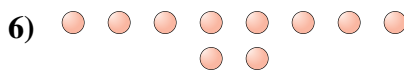
1. _____

2. _____



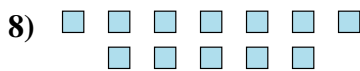
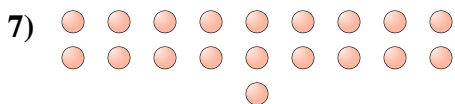
3. _____

4. _____



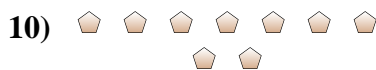
5. _____

6. _____



7. _____

8. _____

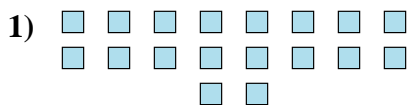


9. _____


10. _____



Determine if the number of shapes is even or odd.



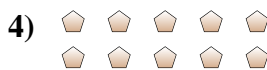
18



20



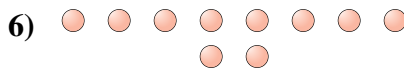
14



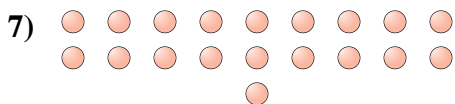
10



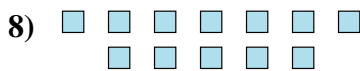
12



10



19



12



7



9

Answers

1. even

2. even

3. even

4. even

5. even

6. even

7. odd

8. even

9. odd

10. odd