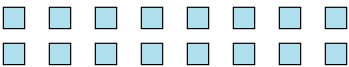
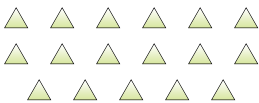




Determine if the number of shapes is even or odd.

1) 

2) 

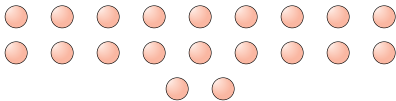
3) 


4) 

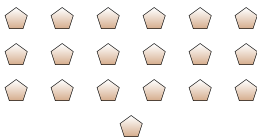
5) 

6) 

7) 

8) 

9) 

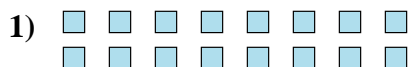
10) 

Answers

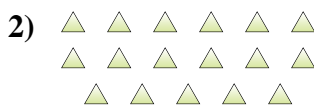
- 1. _____
- 2. _____
- 3. _____
- 4. _____
- 5. _____
- 6. _____
- 7. _____
- 8. _____
- 9. _____
- 10. _____



Determine if the number of shapes is even or odd.



16



17



5



6



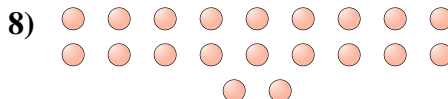
13



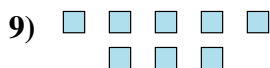
15



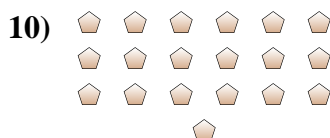
8



20



8



19

Answers1. even2. odd3. odd4. even5. odd6. odd7. even8. even9. even10. odd