
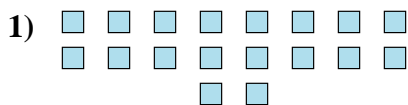




Determine if the number of shapes is even or odd.

Answers



1. _____

2. _____

3. _____

4. _____

5. _____

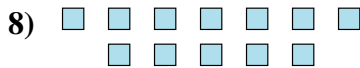
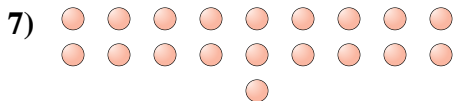
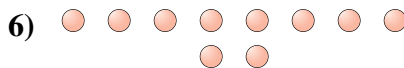
6. _____

7. _____

8. _____

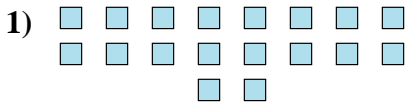
9. _____

10. _____






Determine if the number of shapes is even or odd.



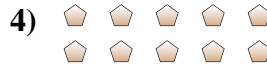
18



20



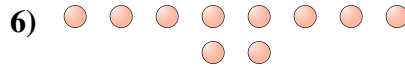
14



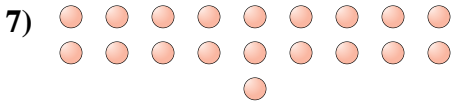
10



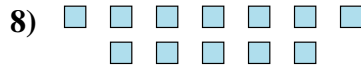
12



10



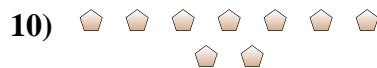
19



12



7



9

Answers

1. even

2. even

3. even

4. even

5. even

6. even

7. odd

8. even

9. odd

10. odd