



Use $<$, $>$, or $=$ to compare the numbers.

Answers

- 1) 89 ___ 27
- 2) 62 ___ 44
- 3) 44 ___ 68
- 4) 20 ___ 76
- 5) 31 ___ 79
- 6) 12 ___ 37
- 7) 71 ___ 17
- 8) 45 ___ 54
- 9) 13 ___ 31
- 10) 84 ___ 48
- 11) 23 ___ 32
- 12) 73 ___ 37
- 13) 67 ___ 76
- 14) 34 ___ 43
- 15) 35 ___ 34
- 16) 44 ___ 42
- 17) 11 ___ 14
- 18) 73 ___ 72
- 19) 28 ___ 29
- 20) 54 ___ 55

- 1. _____
- 2. _____
- 3. _____
- 4. _____
- 5. _____
- 6. _____
- 7. _____
- 8. _____
- 9. _____
- 10. _____
- 11. _____
- 12. _____
- 13. _____
- 14. _____
- 15. _____
- 16. _____
- 17. _____
- 18. _____
- 19. _____
- 20. _____

Use $<$, $>$, or $=$ to compare the numbers.

1) $89 > 27$

2) $62 > 44$

3) $44 < 68$

4) $20 < 76$

5) $31 < 79$

6) $12 < 37$

7) $71 > 17$

8) $45 < 54$

9) $13 < 31$

10) $84 > 48$

11) $23 < 32$

12) $73 > 37$

13) $67 < 76$

14) $34 < 43$

15) $35 > 34$

16) $44 > 42$

17) $11 < 14$

18) $73 > 72$

19) $28 < 29$

20) $54 < 55$

Answers

1. $>$

2. $>$

3. $<$

4. $<$

5. $<$

6. $<$

7. $>$

8. $<$

9. $<$

10. $>$

11. $<$

12. $>$

13. $<$

14. $<$

15. $>$

16. $>$

17. $<$

18. $>$

19. $<$

20. $<$





Comparing Two Digit Numbers

Name: _____



Use < , > , or = to compare the numbers.

Answers



1) 89 27



2) 62 44



3) 44 68

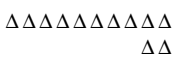
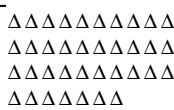
4) 20 76



5) 31 79



6) 12 37



7) 71 17



8) 45 54

9) 13 31

10) 84 48

1. _____
2. _____
3. _____
4. _____
5. _____
6. _____
7. _____
8. _____
9. _____
10. _____