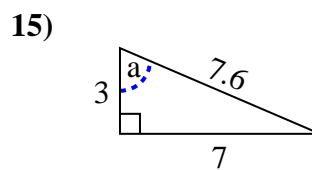
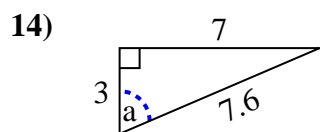
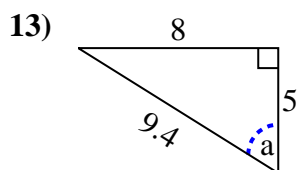
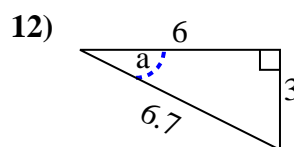
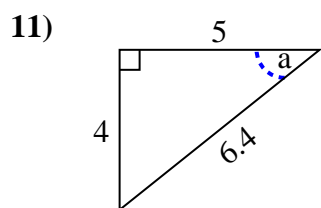
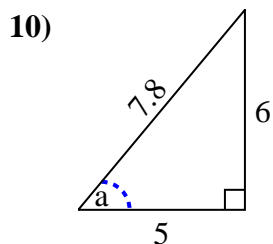
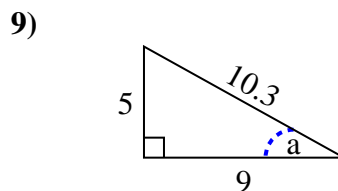
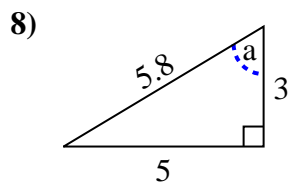
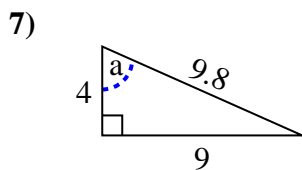
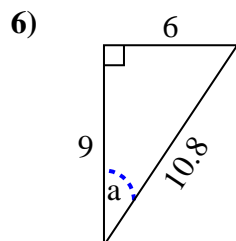
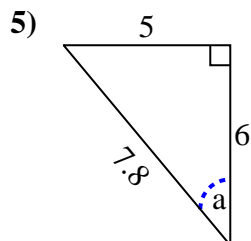
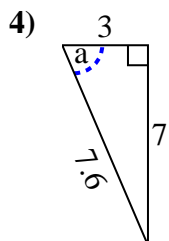
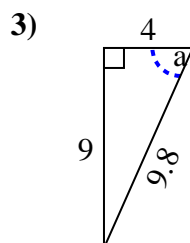
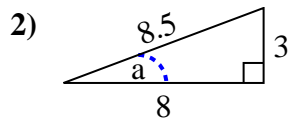
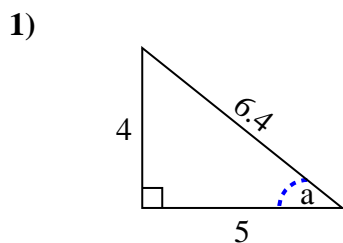


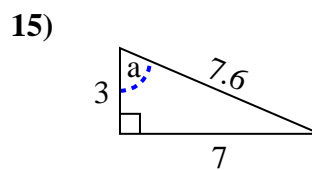
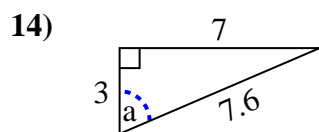
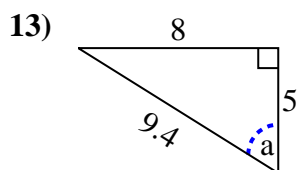
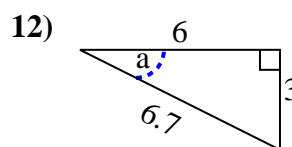
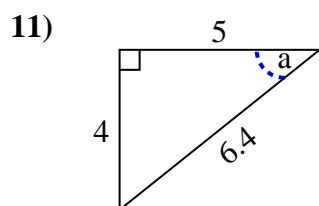
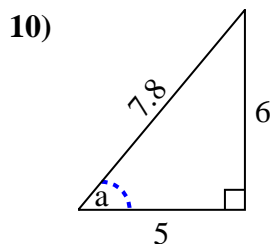
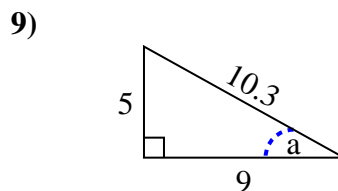
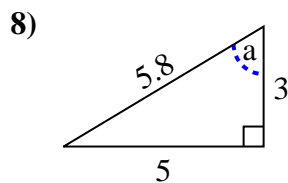
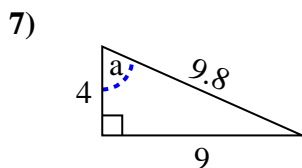
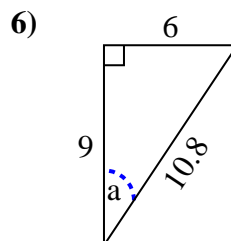
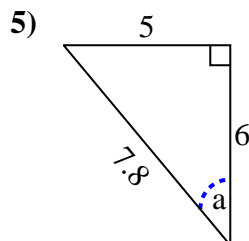
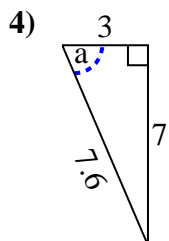
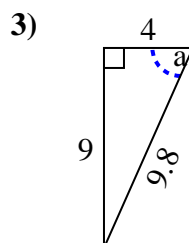
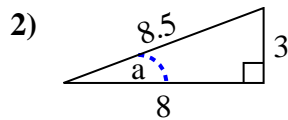
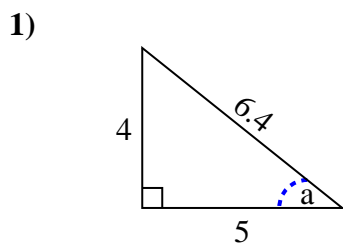


Identify the Opposite, Adjacent and Hypotenuse of Angle a.

Answers



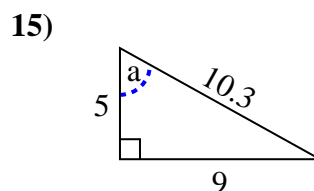
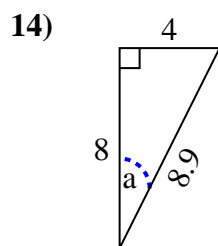
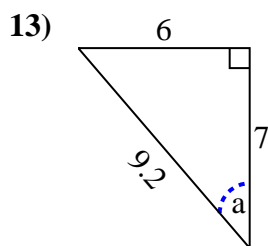
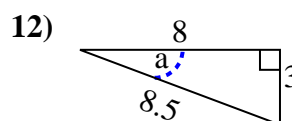
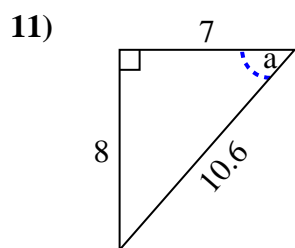
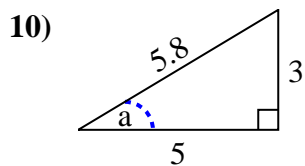
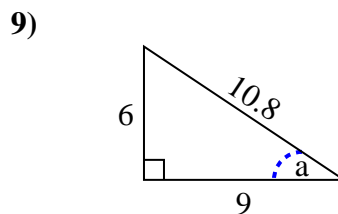
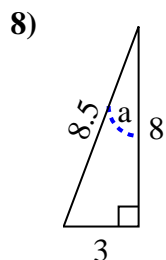
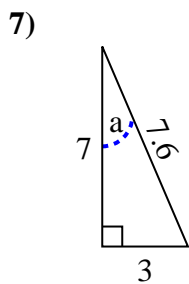
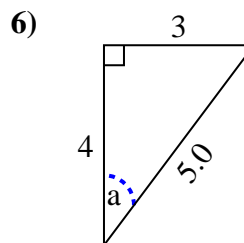
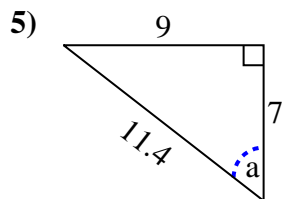
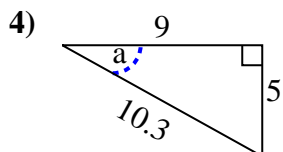
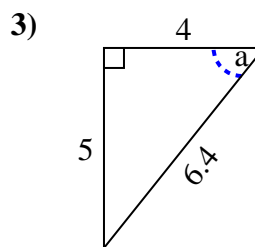
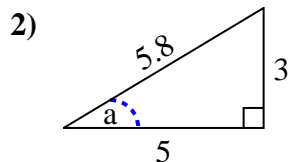
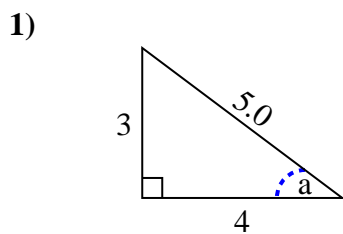
1. \_\_\_\_\_
2. \_\_\_\_\_
3. \_\_\_\_\_
4. \_\_\_\_\_
5. \_\_\_\_\_
6. \_\_\_\_\_
7. \_\_\_\_\_
8. \_\_\_\_\_
9. \_\_\_\_\_
10. \_\_\_\_\_
11. \_\_\_\_\_
12. \_\_\_\_\_
13. \_\_\_\_\_
14. \_\_\_\_\_
15. \_\_\_\_\_

Identify the Opposite, Adjacent and Hypotenuse of Angle  $a$ .**Answers**1. 4, 5, 6.42. 3, 8, 8.53. 9, 4, 9.84. 7, 3, 7.65. 5, 6, 7.86. 6, 9, 10.87. 9, 4, 9.88. 5, 3, 5.89. 5, 9, 10.310. 6, 5, 7.811. 4, 5, 6.412. 3, 6, 6.713. 8, 5, 9.414. 7, 3, 7.615. 7, 3, 7.6

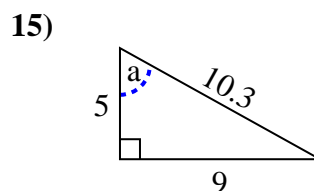
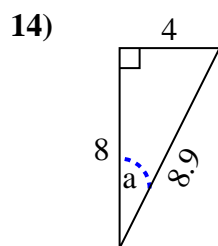
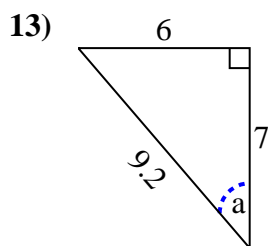
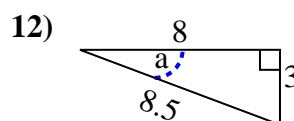
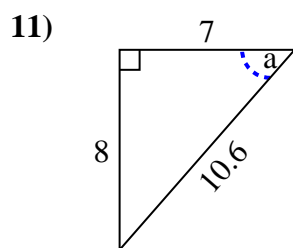
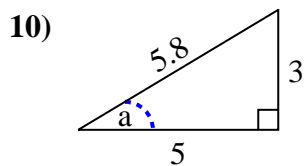
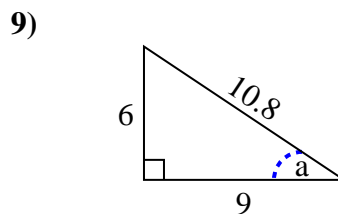
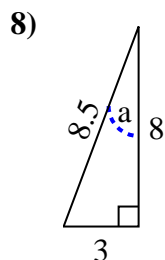
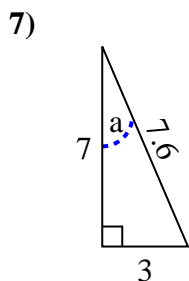
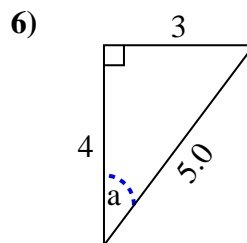
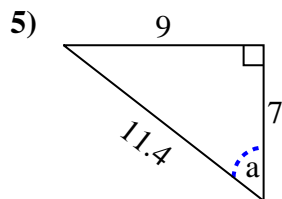
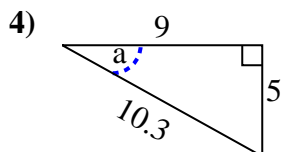
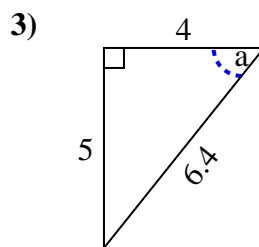
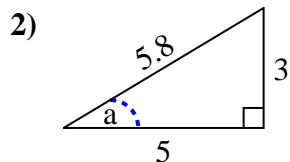
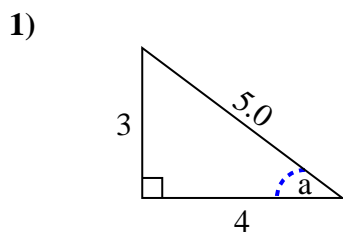


Identify the Opposite, Adjacent and Hypotenuse of Angle a.

Answers



1. \_\_\_\_\_
2. \_\_\_\_\_
3. \_\_\_\_\_
4. \_\_\_\_\_
5. \_\_\_\_\_
6. \_\_\_\_\_
7. \_\_\_\_\_
8. \_\_\_\_\_
9. \_\_\_\_\_
10. \_\_\_\_\_
11. \_\_\_\_\_
12. \_\_\_\_\_
13. \_\_\_\_\_
14. \_\_\_\_\_
15. \_\_\_\_\_

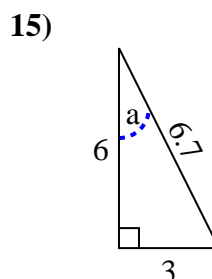
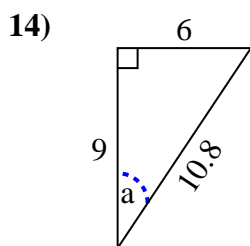
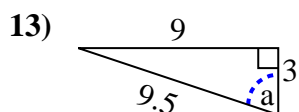
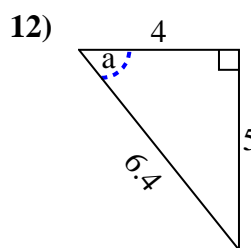
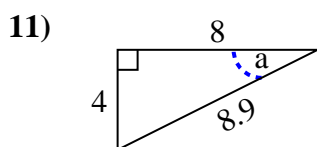
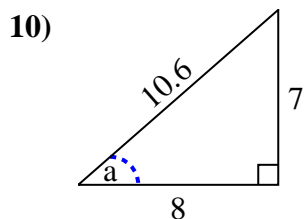
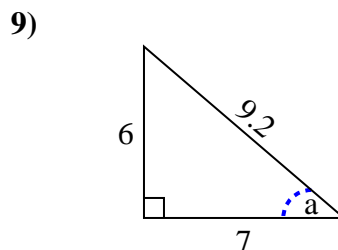
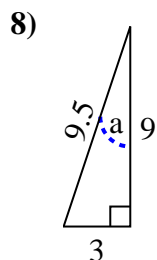
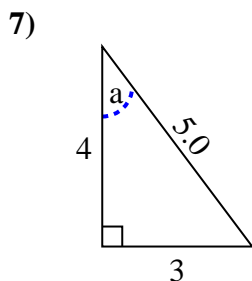
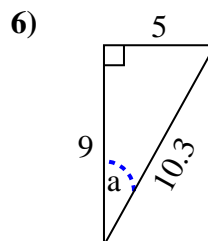
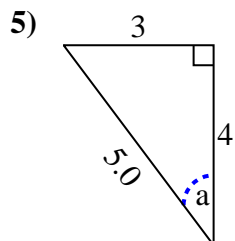
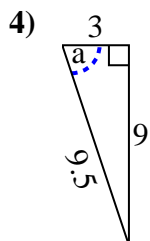
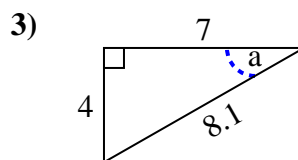
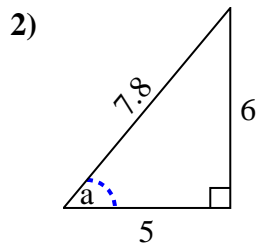
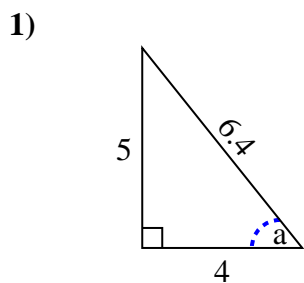
Identify the Opposite, Adjacent and Hypotenuse of Angle  $a$ .Answers

1. 3, 4, 5.0
2. 3, 5, 5.8
3. 5, 4, 6.4
4. 5, 9, 10.3
5. 9, 7, 11.4
6. 3, 4, 5.0
7. 3, 7, 7.6
8. 3, 8, 8.5
9. 6, 9, 10.8
10. 3, 5, 5.8
11. 8, 7, 10.6
12. 3, 8, 8.5
13. 6, 7, 9.2
14. 4, 8, 8.9
15. 9, 5, 10.3

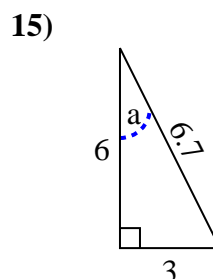
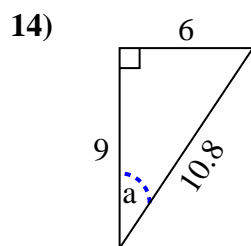
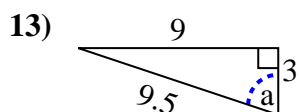
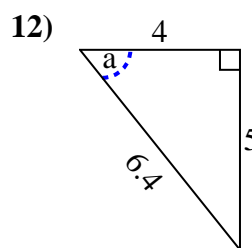
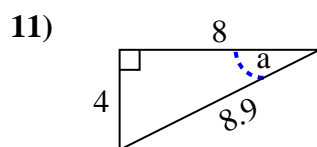
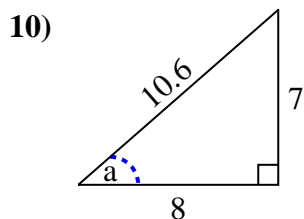
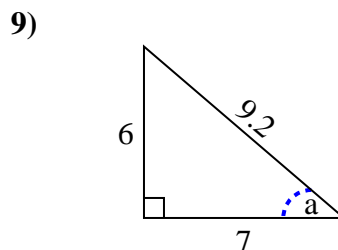
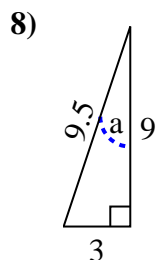
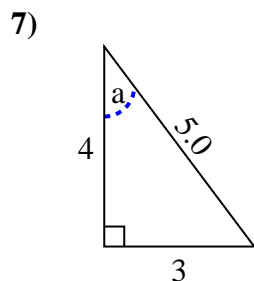
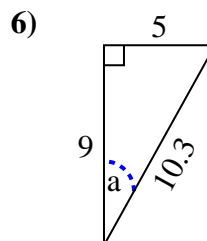
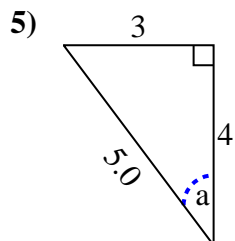
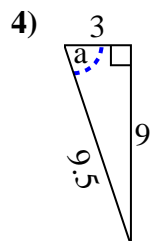
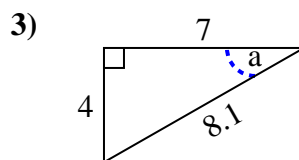
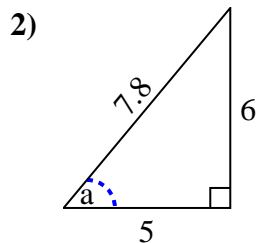
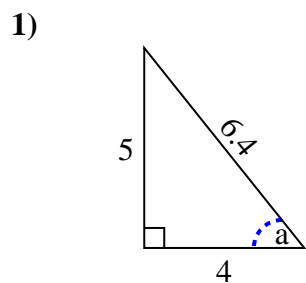


Identify the Opposite, Adjacent and Hypotenuse of Angle a.

Answers



1. \_\_\_\_\_
2. \_\_\_\_\_
3. \_\_\_\_\_
4. \_\_\_\_\_
5. \_\_\_\_\_
6. \_\_\_\_\_
7. \_\_\_\_\_
8. \_\_\_\_\_
9. \_\_\_\_\_
10. \_\_\_\_\_
11. \_\_\_\_\_
12. \_\_\_\_\_
13. \_\_\_\_\_
14. \_\_\_\_\_
15. \_\_\_\_\_

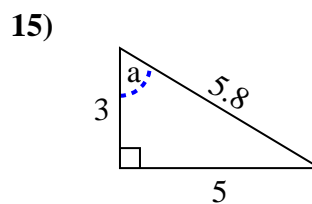
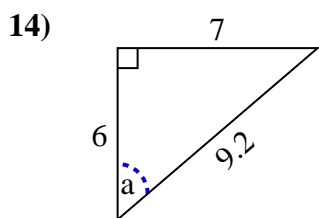
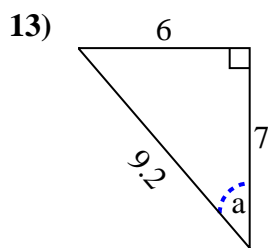
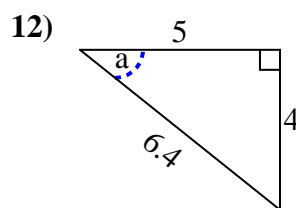
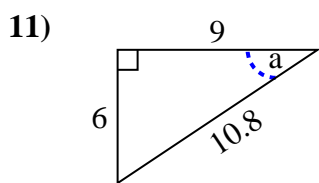
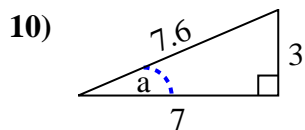
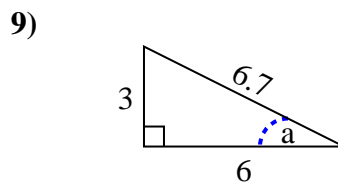
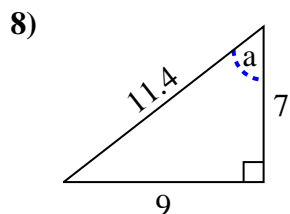
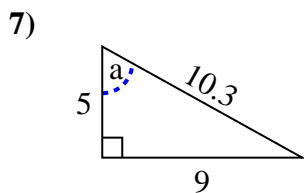
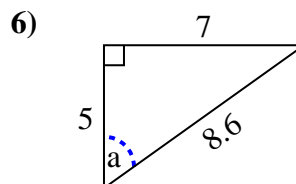
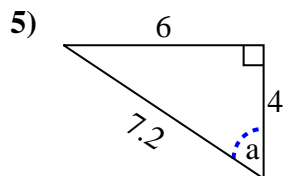
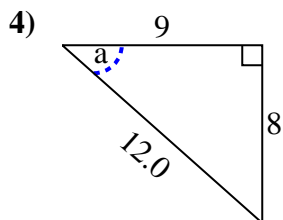
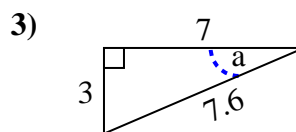
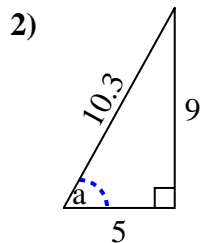
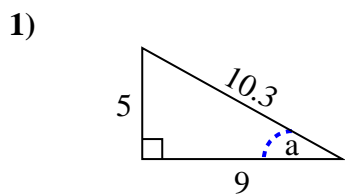
Identify the Opposite, Adjacent and Hypotenuse of Angle  $a$ .**Answers**

1. 5, 4, 6.4
2. 6, 5, 7.8
3. 4, 7, 8.1
4. 9, 3, 9.5
5. 3, 4, 5.0
6. 5, 9, 10.3
7. 3, 4, 5.0
8. 3, 9, 9.5
9. 6, 7, 9.2
10. 7, 8, 10.6
11. 4, 8, 8.9
12. 5, 4, 6.4
13. 9, 3, 9.5
14. 6, 9, 10.8
15. 3, 6, 6.7

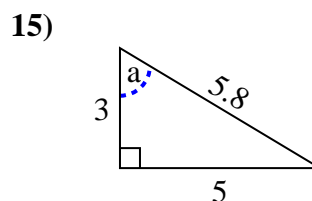
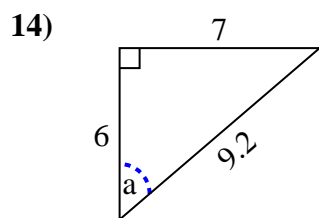
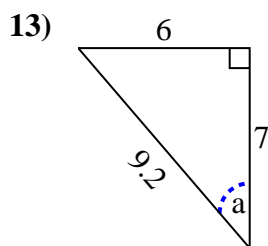
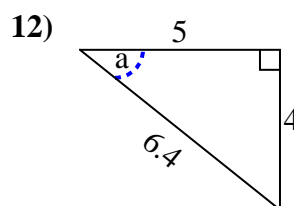
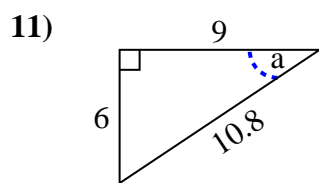
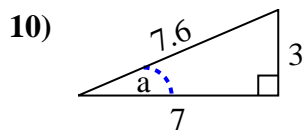
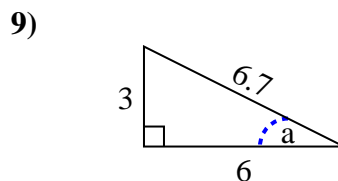
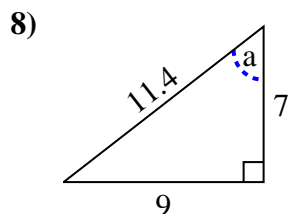
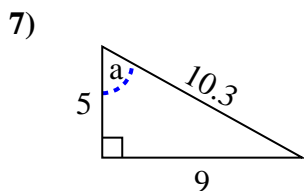
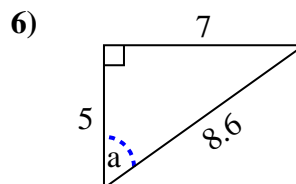
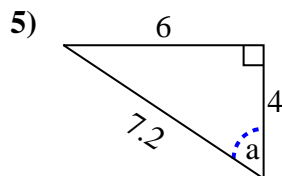
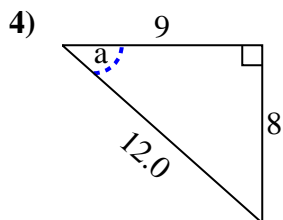
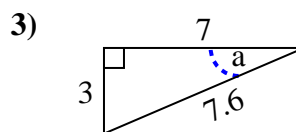
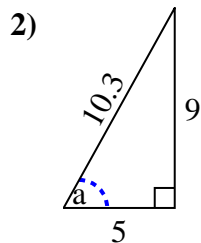
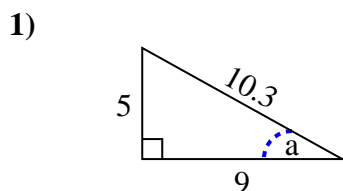


Identify the Opposite, Adjacent and Hypotenuse of Angle a.

Answers



1. \_\_\_\_\_
2. \_\_\_\_\_
3. \_\_\_\_\_
4. \_\_\_\_\_
5. \_\_\_\_\_
6. \_\_\_\_\_
7. \_\_\_\_\_
8. \_\_\_\_\_
9. \_\_\_\_\_
10. \_\_\_\_\_
11. \_\_\_\_\_
12. \_\_\_\_\_
13. \_\_\_\_\_
14. \_\_\_\_\_
15. \_\_\_\_\_

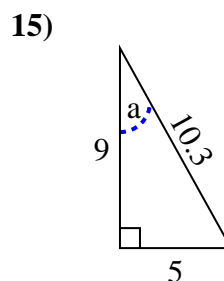
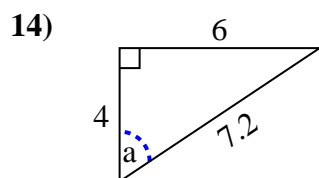
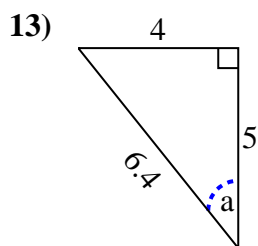
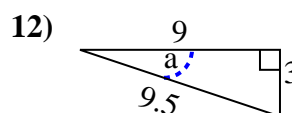
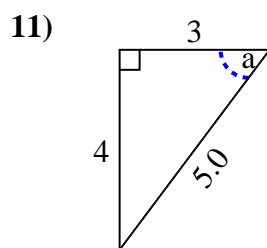
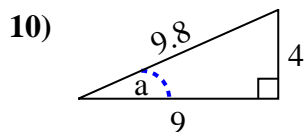
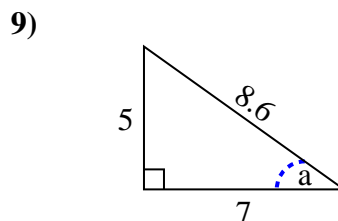
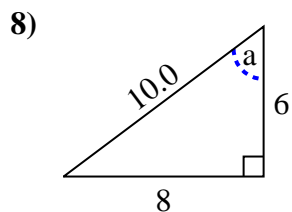
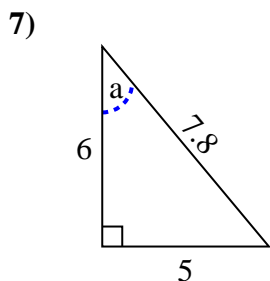
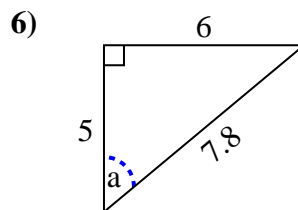
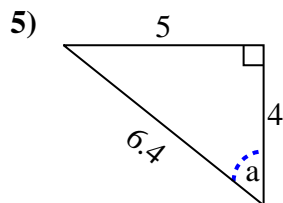
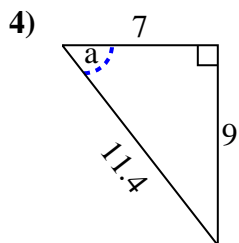
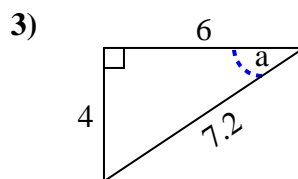
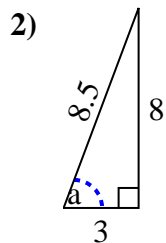
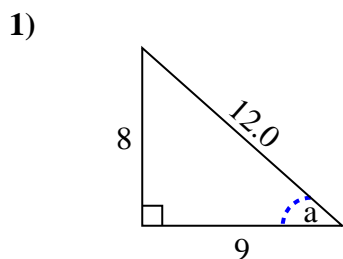
Identify the Opposite, Adjacent and Hypotenuse of Angle  $a$ .**Answers**1. 5, 9, 10.32. 9, 5, 10.33. 3, 7, 7.64. 8, 9, 12.05. 6, 4, 7.26. 7, 5, 8.67. 9, 5, 10.38. 9, 7, 11.49. 3, 6, 6.710. 3, 7, 7.611. 6, 9, 10.812. 4, 5, 6.413. 6, 7, 9.214. 7, 6, 9.215. 5, 3, 5.8



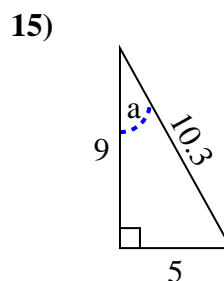
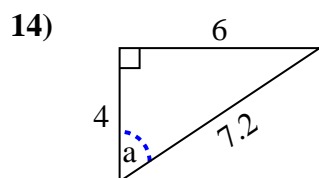
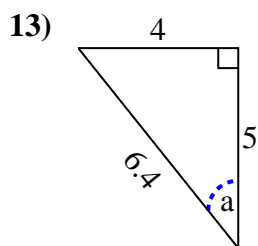
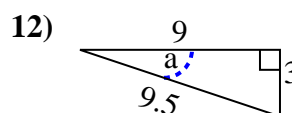
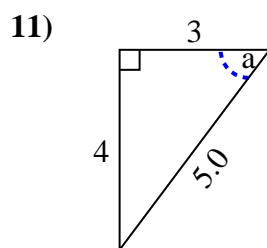
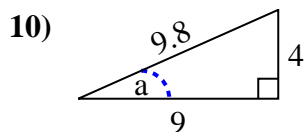
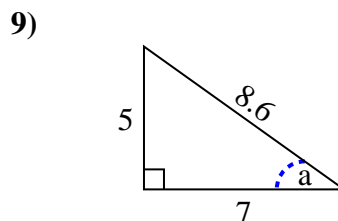
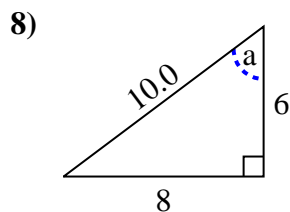
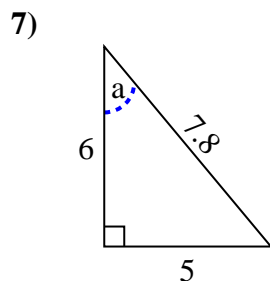
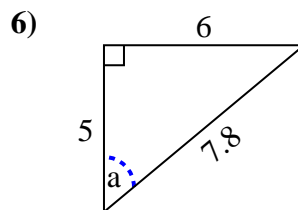
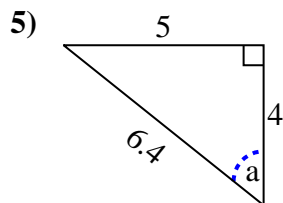
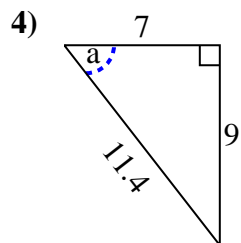
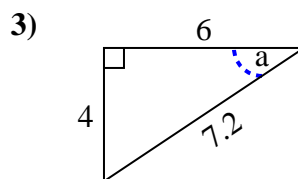
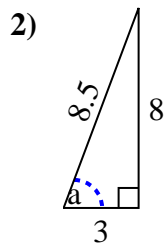
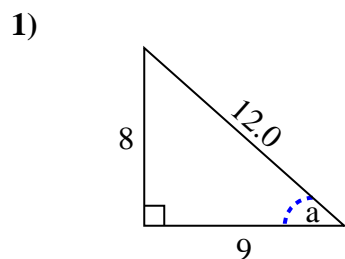


Identify the Opposite, Adjacent and Hypotenuse of Angle a.

Answers



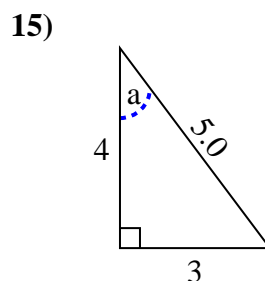
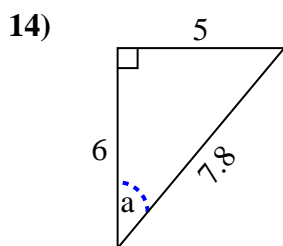
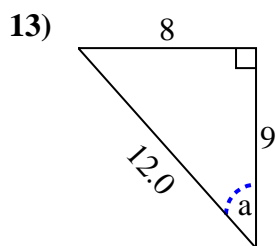
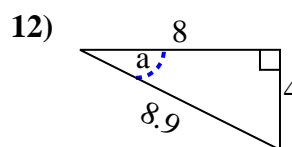
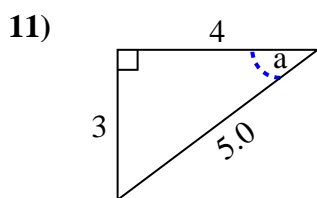
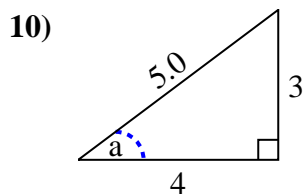
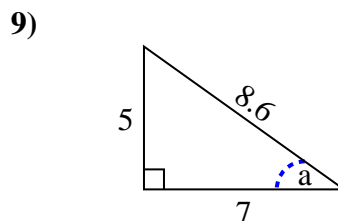
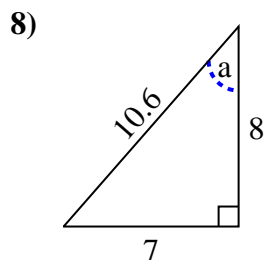
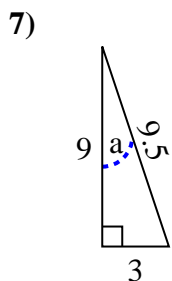
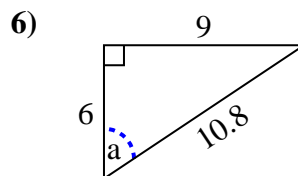
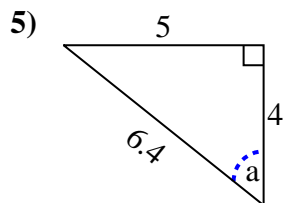
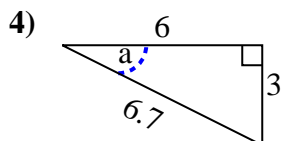
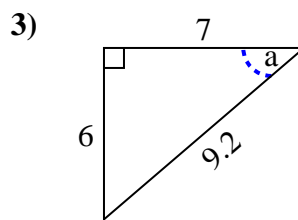
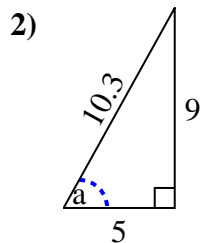
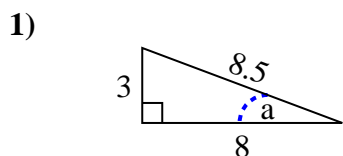
1. \_\_\_\_\_
2. \_\_\_\_\_
3. \_\_\_\_\_
4. \_\_\_\_\_
5. \_\_\_\_\_
6. \_\_\_\_\_
7. \_\_\_\_\_
8. \_\_\_\_\_
9. \_\_\_\_\_
10. \_\_\_\_\_
11. \_\_\_\_\_
12. \_\_\_\_\_
13. \_\_\_\_\_
14. \_\_\_\_\_
15. \_\_\_\_\_

Identify the Opposite, Adjacent and Hypotenuse of Angle  $a$ .Answers1. 8, 9, 12.02. 8, 3, 8.53. 4, 6, 7.24. 9, 7, 11.45. 5, 4, 6.46. 6, 5, 7.87. 5, 6, 7.88. 8, 6, 10.09. 5, 7, 8.610. 4, 9, 9.811. 4, 3, 5.012. 3, 9, 9.513. 4, 5, 6.414. 6, 4, 7.215. 5, 9, 10.3

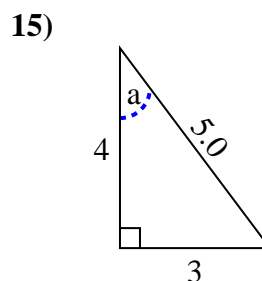
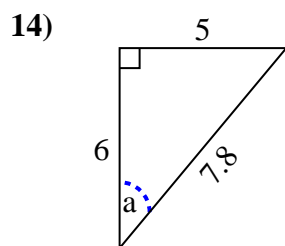
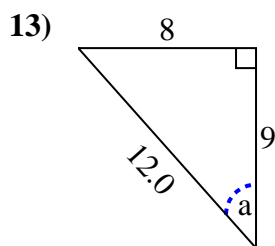
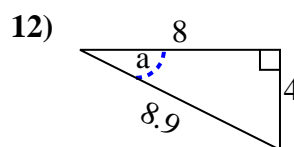
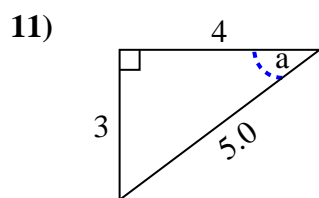
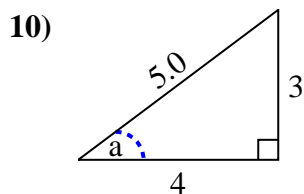
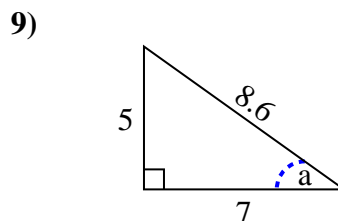
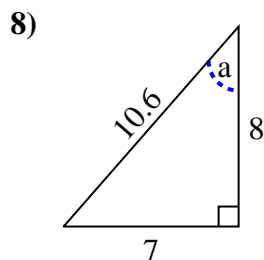
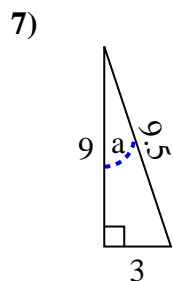
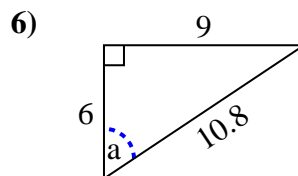
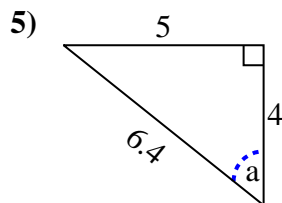
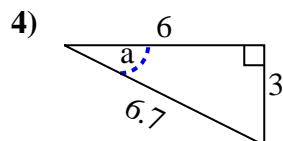
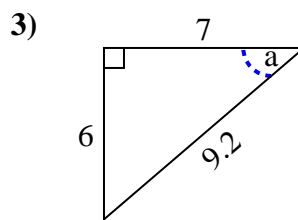
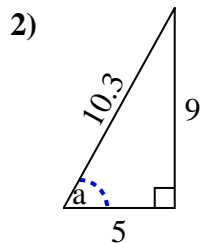
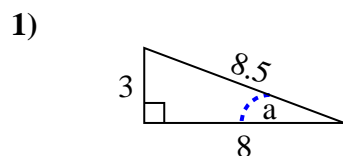


Identify the Opposite, Adjacent and Hypotenuse of Angle a.

Answers



1. \_\_\_\_\_
2. \_\_\_\_\_
3. \_\_\_\_\_
4. \_\_\_\_\_
5. \_\_\_\_\_
6. \_\_\_\_\_
7. \_\_\_\_\_
8. \_\_\_\_\_
9. \_\_\_\_\_
10. \_\_\_\_\_
11. \_\_\_\_\_
12. \_\_\_\_\_
13. \_\_\_\_\_
14. \_\_\_\_\_
15. \_\_\_\_\_

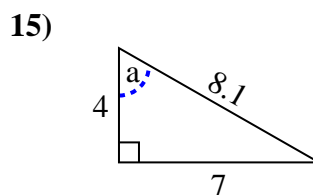
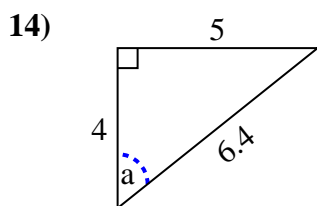
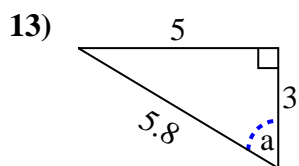
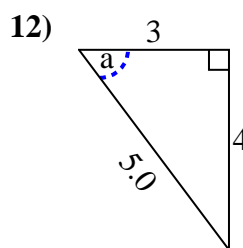
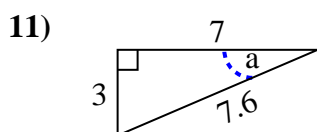
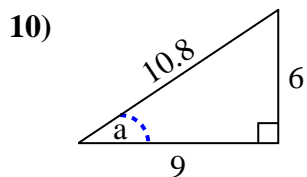
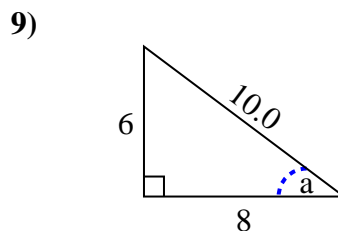
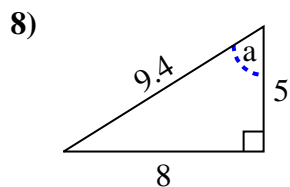
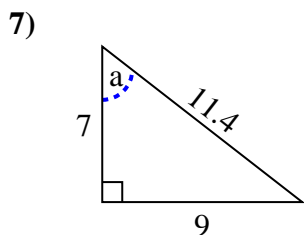
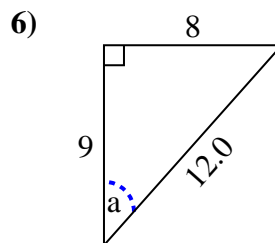
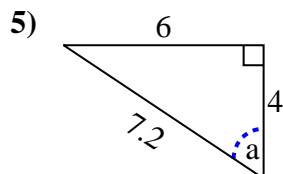
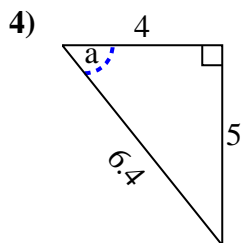
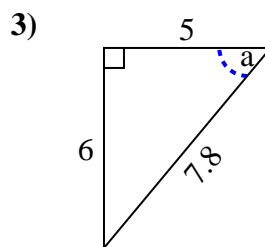
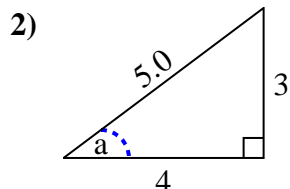
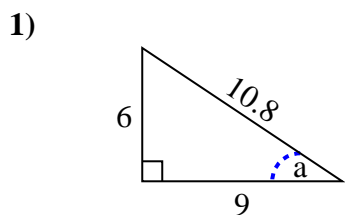
Identify the Opposite, Adjacent and Hypotenuse of Angle  $a$ .Answers

1. 3, 8, 8.5
2. 9, 5, 10.3
3. 6, 7, 9.2
4. 3, 6, 6.7
5. 5, 4, 6.4
6. 9, 6, 10.8
7. 3, 9, 9.5
8. 7, 8, 10.6
9. 5, 7, 8.6
10. 3, 4, 5.0
11. 3, 4, 5.0
12. 4, 8, 8.9
13. 8, 9, 12.0
14. 5, 6, 7.8
15. 3, 4, 5.0

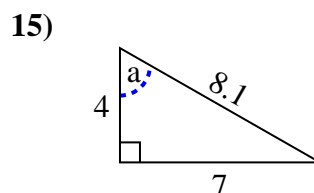
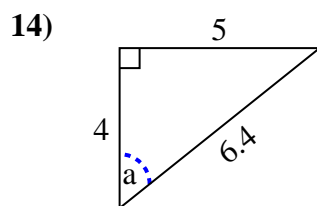
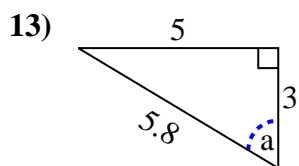
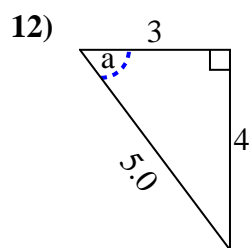
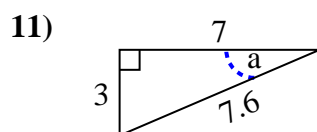
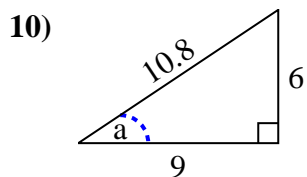
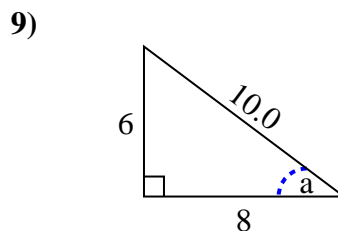
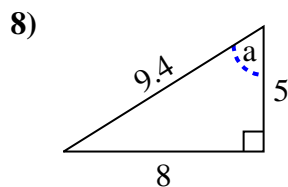
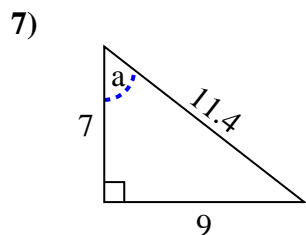
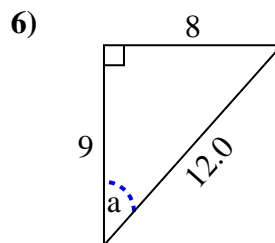
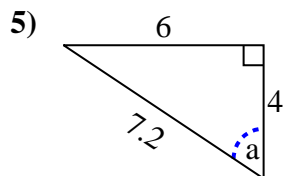
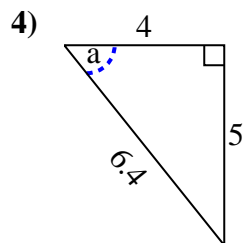
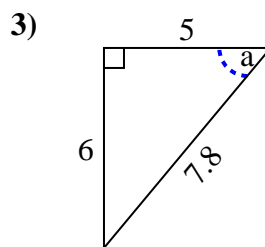
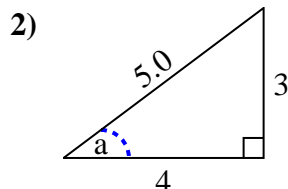
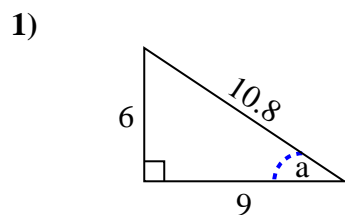


Identify the Opposite, Adjacent and Hypotenuse of Angle a.

Answers



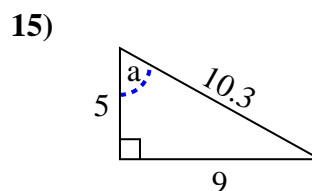
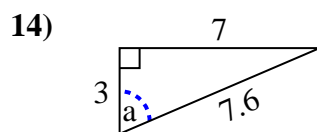
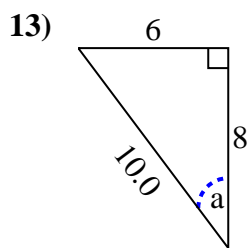
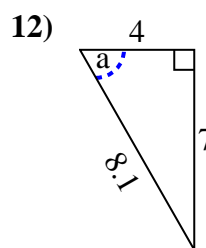
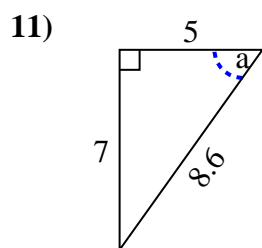
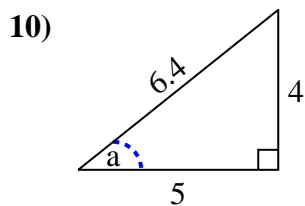
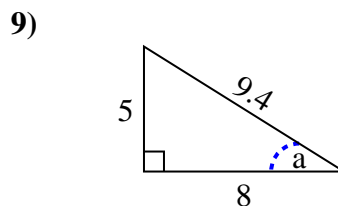
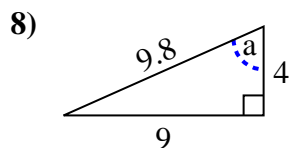
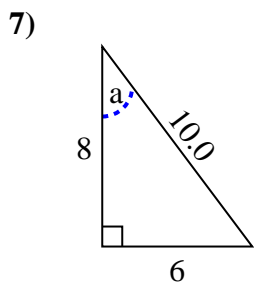
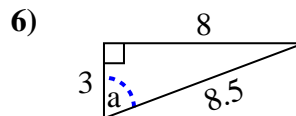
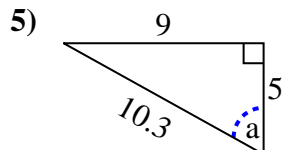
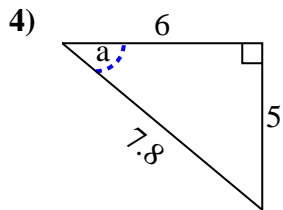
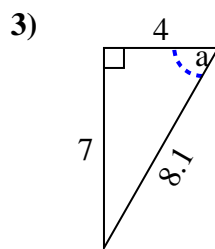
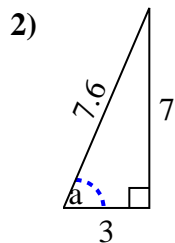
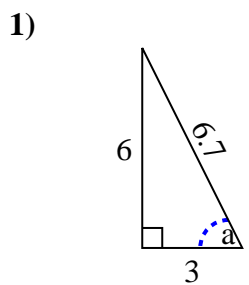
1. \_\_\_\_\_
2. \_\_\_\_\_
3. \_\_\_\_\_
4. \_\_\_\_\_
5. \_\_\_\_\_
6. \_\_\_\_\_
7. \_\_\_\_\_
8. \_\_\_\_\_
9. \_\_\_\_\_
10. \_\_\_\_\_
11. \_\_\_\_\_
12. \_\_\_\_\_
13. \_\_\_\_\_
14. \_\_\_\_\_
15. \_\_\_\_\_

Identify the Opposite, Adjacent and Hypotenuse of Angle  $a$ .**Answers**1. 6, 9, 10.82. 3, 4, 5.03. 6, 5, 7.84. 5, 4, 6.45. 6, 4, 7.26. 8, 9, 12.07. 9, 7, 11.48. 8, 5, 9.49. 6, 8, 10.010. 6, 9, 10.811. 3, 7, 7.612. 4, 3, 5.013. 5, 3, 5.814. 5, 4, 6.415. 7, 4, 8.1



Identify the Opposite, Adjacent and Hypotenuse of Angle a.

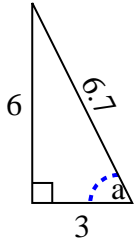
Answers



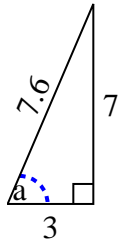
1. \_\_\_\_\_
2. \_\_\_\_\_
3. \_\_\_\_\_
4. \_\_\_\_\_
5. \_\_\_\_\_
6. \_\_\_\_\_
7. \_\_\_\_\_
8. \_\_\_\_\_
9. \_\_\_\_\_
10. \_\_\_\_\_
11. \_\_\_\_\_
12. \_\_\_\_\_
13. \_\_\_\_\_
14. \_\_\_\_\_
15. \_\_\_\_\_

Identify the Opposite, Adjacent and Hypotenuse of Angle  $a$ .

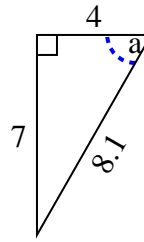
1)



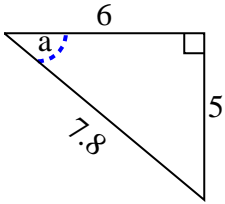
2)



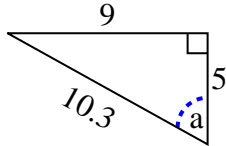
3)



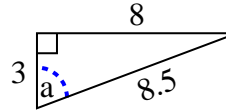
4)



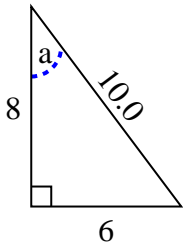
5)



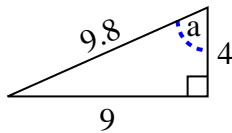
6)



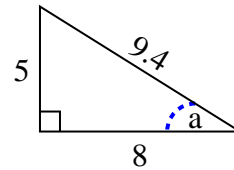
7)



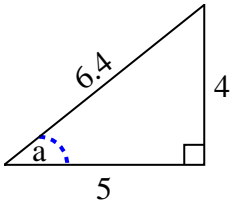
8)



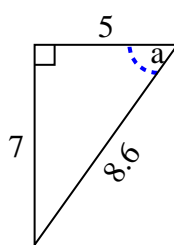
9)



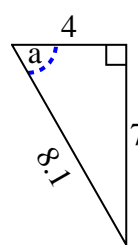
10)



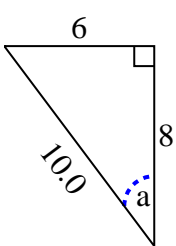
11)



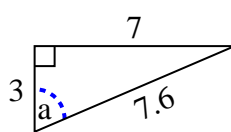
12)



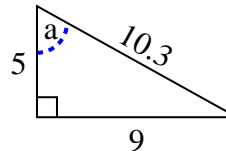
13)



14)



15)

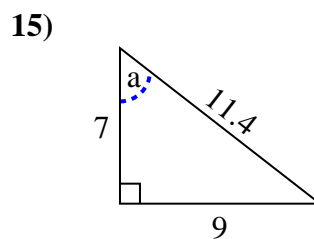
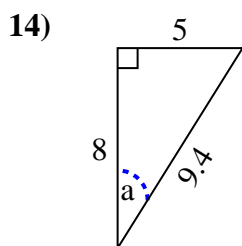
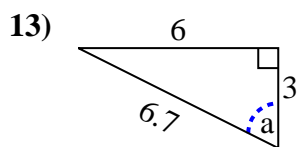
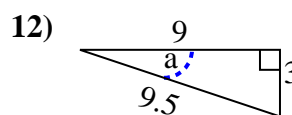
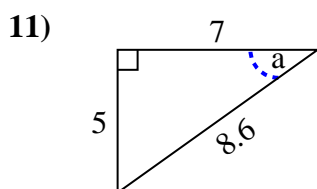
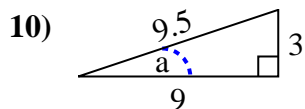
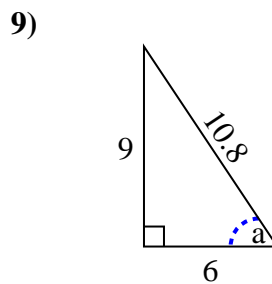
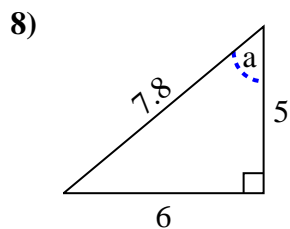
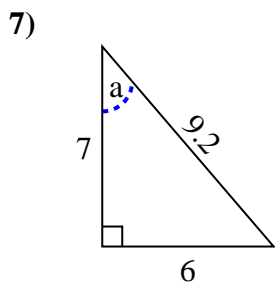
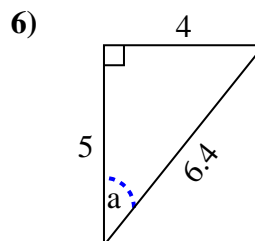
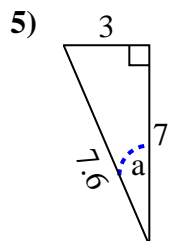
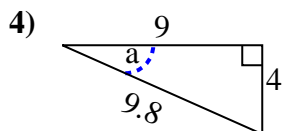
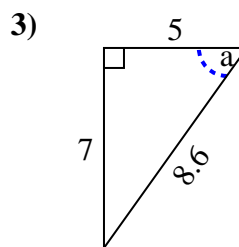
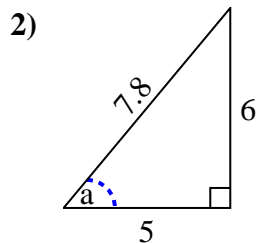
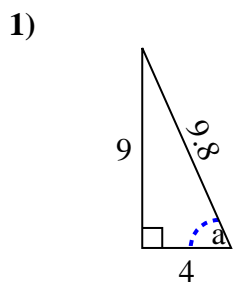
Answers1. 6, 3, 6.72. 7, 3, 7.63. 7, 4, 8.14. 5, 6, 7.85. 9, 5, 10.36. 8, 3, 8.57. 6, 8, 10.08. 9, 4, 9.89. 5, 8, 9.410. 4, 5, 6.411. 7, 5, 8.612. 7, 4, 8.113. 6, 8, 10.014. 7, 3, 7.615. 9, 5, 10.3



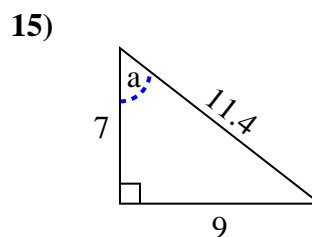
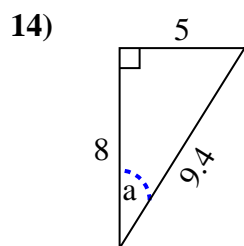
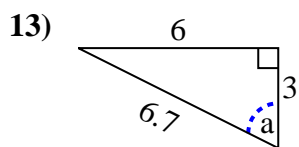
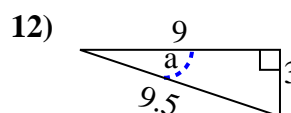
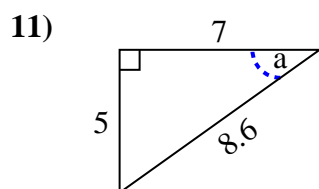
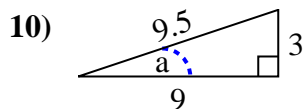
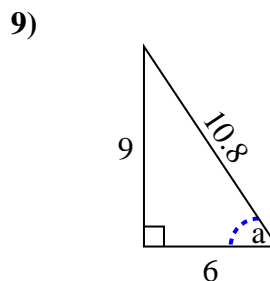
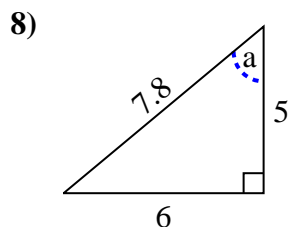
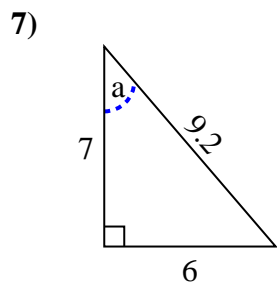
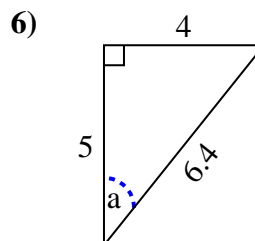
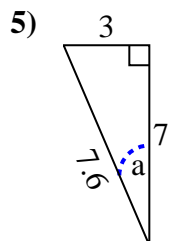
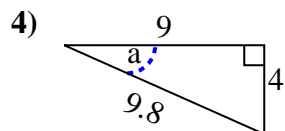
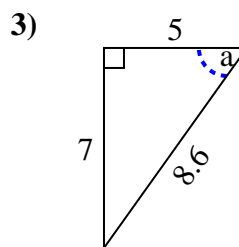
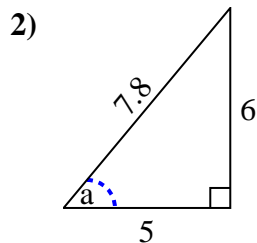
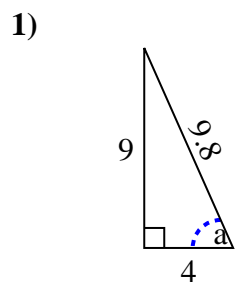


Identify the Opposite, Adjacent and Hypotenuse of Angle a.

Answers



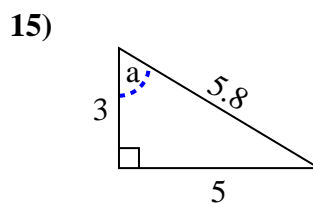
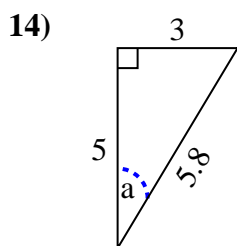
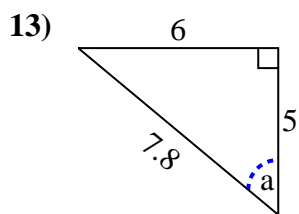
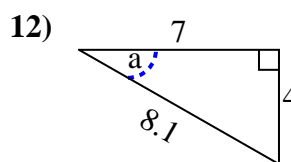
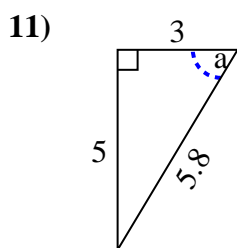
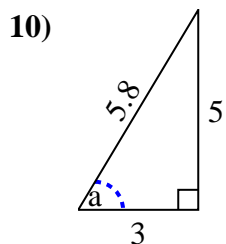
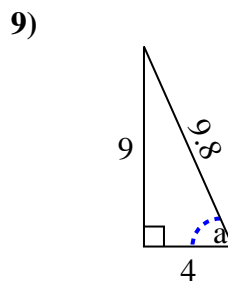
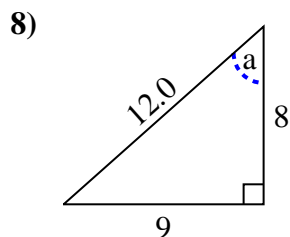
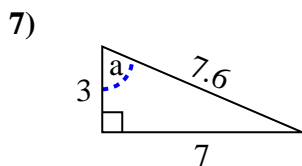
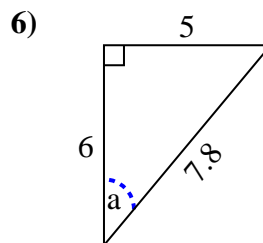
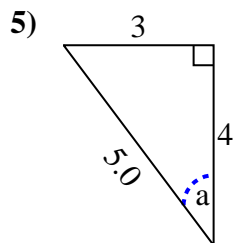
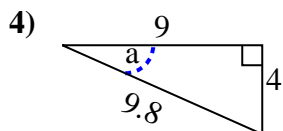
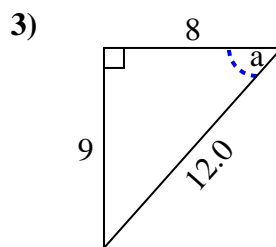
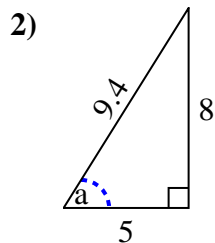
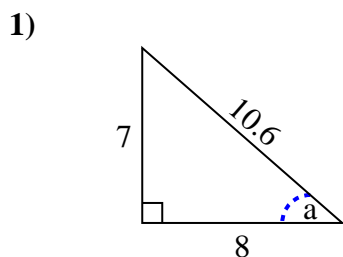
1. \_\_\_\_\_
2. \_\_\_\_\_
3. \_\_\_\_\_
4. \_\_\_\_\_
5. \_\_\_\_\_
6. \_\_\_\_\_
7. \_\_\_\_\_
8. \_\_\_\_\_
9. \_\_\_\_\_
10. \_\_\_\_\_
11. \_\_\_\_\_
12. \_\_\_\_\_
13. \_\_\_\_\_
14. \_\_\_\_\_
15. \_\_\_\_\_

Identify the Opposite, Adjacent and Hypotenuse of Angle  $a$ .Answers1. 9, 4, 9.82. 6, 5, 7.83. 7, 5, 8.64. 4, 9, 9.85. 3, 7, 7.66. 4, 5, 6.47. 6, 7, 9.28. 6, 5, 7.89. 9, 6, 10.810. 3, 9, 9.511. 5, 7, 8.612. 3, 9, 9.513. 6, 3, 6.714. 5, 8, 9.415. 9, 7, 11.4

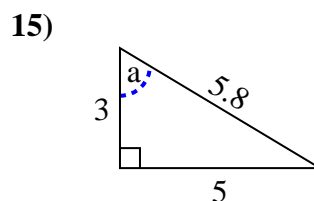
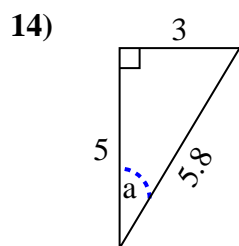
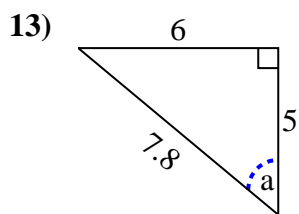
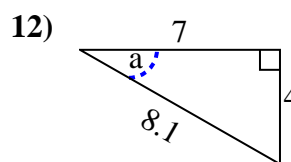
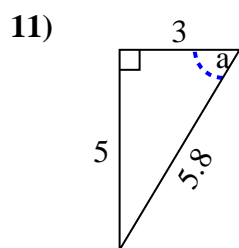
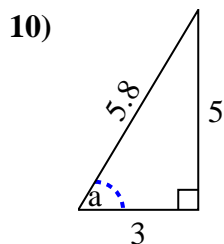
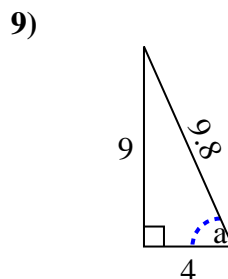
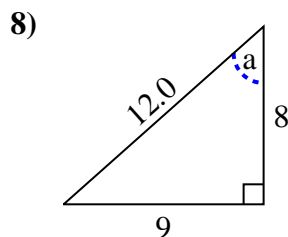
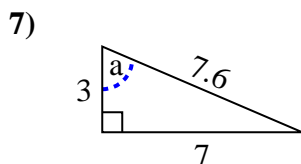
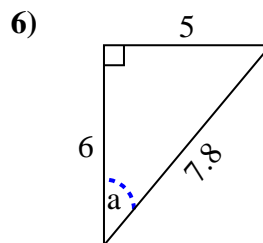
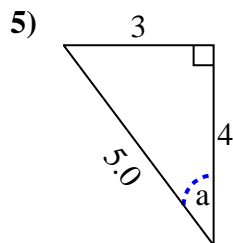
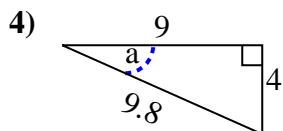
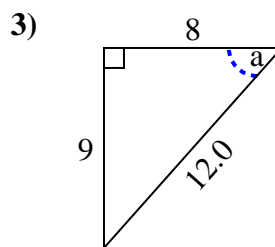
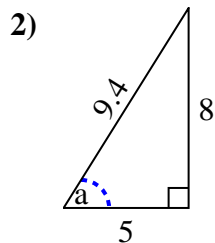
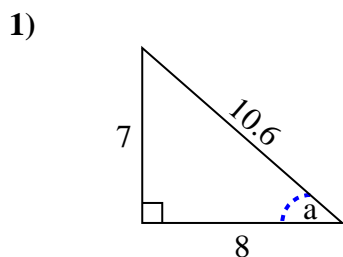


Identify the Opposite, Adjacent and Hypotenuse of Angle a.

Answers



1. \_\_\_\_\_
2. \_\_\_\_\_
3. \_\_\_\_\_
4. \_\_\_\_\_
5. \_\_\_\_\_
6. \_\_\_\_\_
7. \_\_\_\_\_
8. \_\_\_\_\_
9. \_\_\_\_\_
10. \_\_\_\_\_
11. \_\_\_\_\_
12. \_\_\_\_\_
13. \_\_\_\_\_
14. \_\_\_\_\_
15. \_\_\_\_\_

Identify the Opposite, Adjacent and Hypotenuse of Angle  $a$ .Answers1. 7, 8, 10.62. 8, 5, 9.43. 9, 8, 12.04. 4, 9, 9.85. 3, 4, 5.06. 5, 6, 7.87. 7, 3, 7.68. 9, 8, 12.09. 9, 4, 9.810. 5, 3, 5.811. 5, 3, 5.812. 4, 7, 8.113. 6, 5, 7.814. 3, 5, 5.815. 5, 3, 5.8