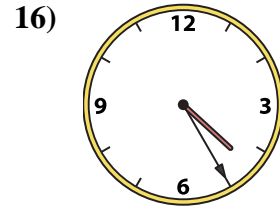
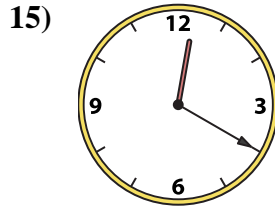
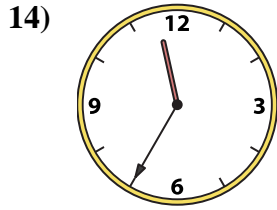
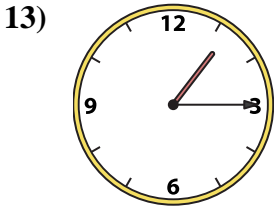

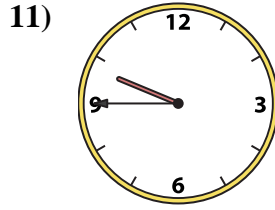
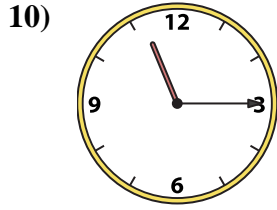
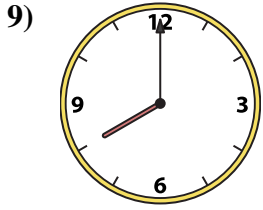
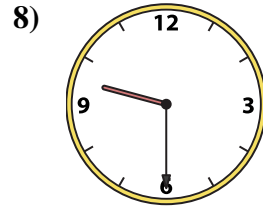
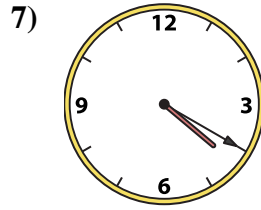
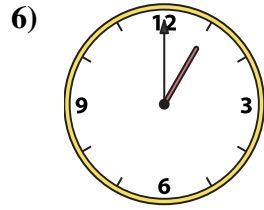
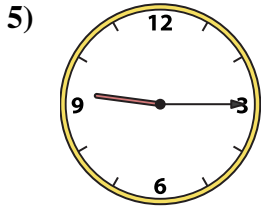
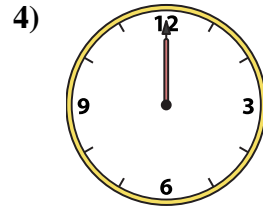
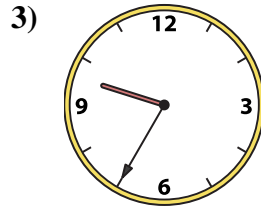
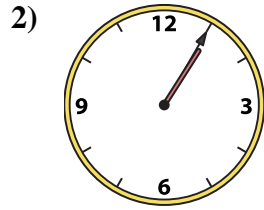





Match the analog clock to the digital clock.



A. 11:15

B. 7:10

C. 9:35

D. 4:20

E. 1:00

F. 12:55

G. 4:25

H. 9:15

I. 12:20

J. 11:35

K. 8:00

L. 1:15

M. 9:30

N. 12:00

O. 1:05

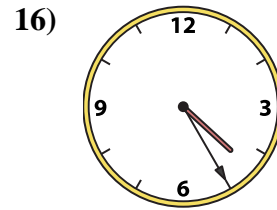
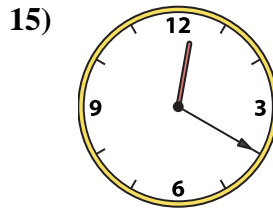
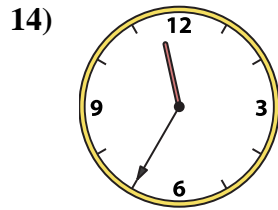
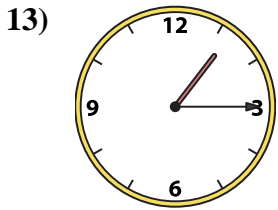
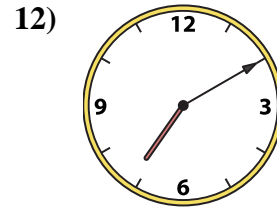
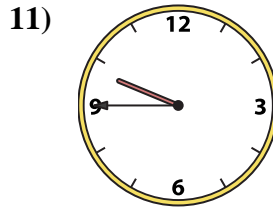
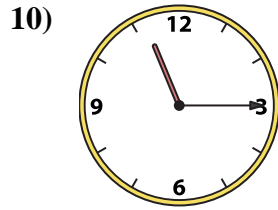
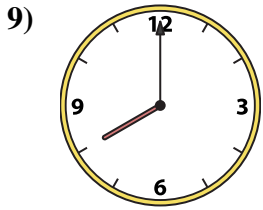
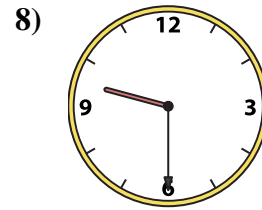
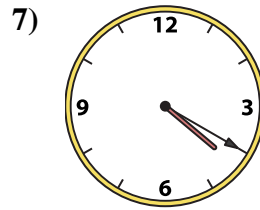
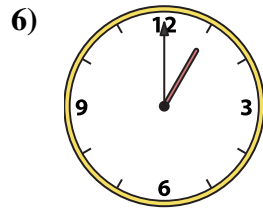
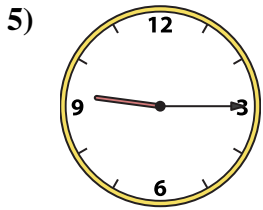
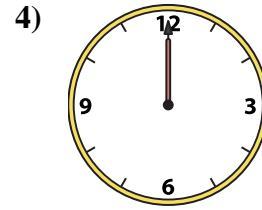
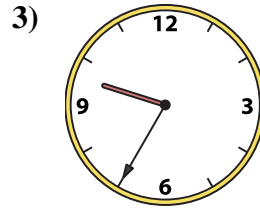
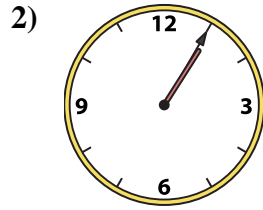

P. 9:45

Answers

1. _____
2. _____
3. _____
4. _____
5. _____
6. _____
7. _____
8. _____
9. _____
10. _____
11. _____
12. _____
13. _____
14. _____
15. _____
16. _____



Match the analog clock to the digital clock.



A. **11:15**

B. **7:10**

C. **9:35**

D. **4:20**

E. **1:00**

F. **12:55**

G. **4:25**

H. **9:15**

I. **12:20**

J. **11:35**

K. **8:00**

L. **1:15**

M. **9:30**

N. **12:00**

O. **1:05**

P. **9:45**

Answers

1. **F**

2. **O**

3. **C**

4. **N**

5. **H**

6. **E**

7. **D**

8. **M**

9. **K**

10. **A**

11. **P**

12. **B**

13. **L**

14. **J**

15. **I**

16. **G**