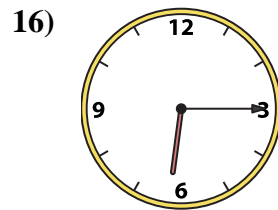
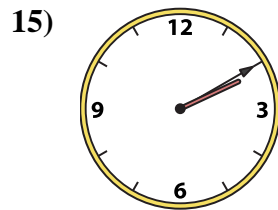
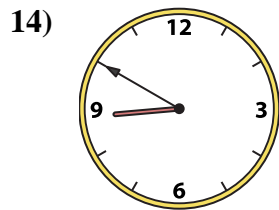
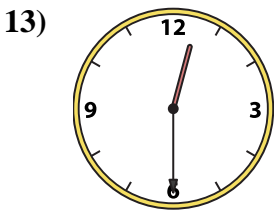
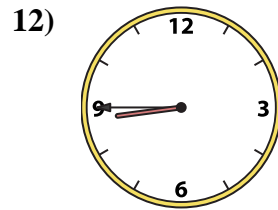
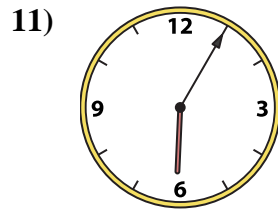
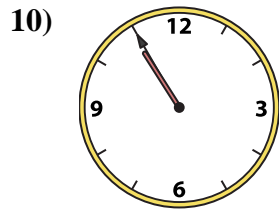
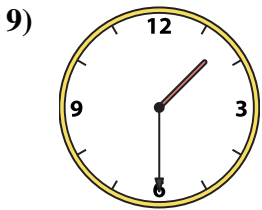
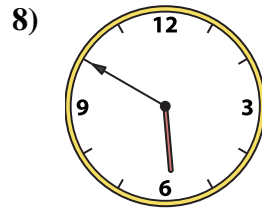
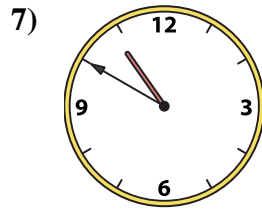
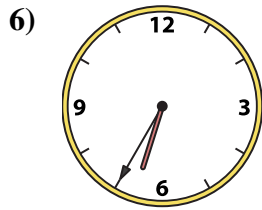
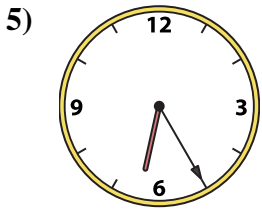
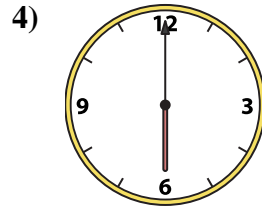
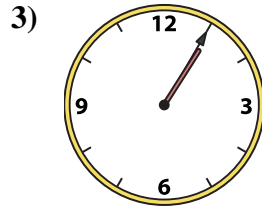
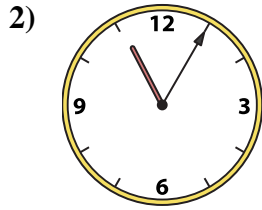
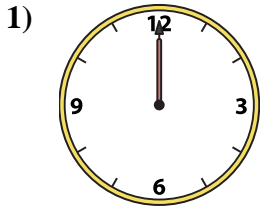




Match the analog clock to the digital clock.

Answers



1. _____
2. _____
3. _____
4. _____
5. _____
6. _____
7. _____
8. _____
9. _____
10. _____
11. _____
12. _____
13. _____
14. _____
15. _____
16. _____

A. 6:05

B. 1:30

C. 6:00

D. 6:35

E. 12:00

F. 2:10

G. 12:30

H. 10:50

I. 1:05

J. 8:45

K. 8:50

L. 5:50

M. 6:25

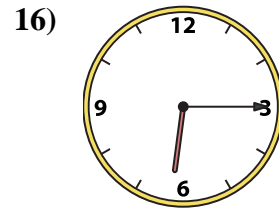
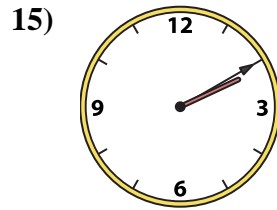
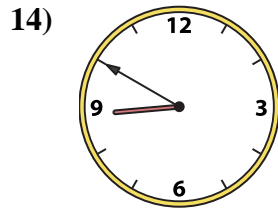
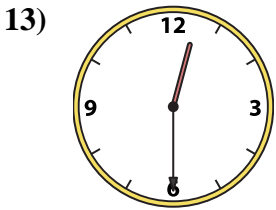
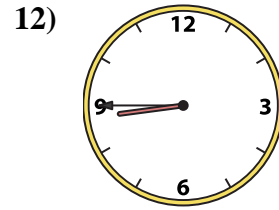
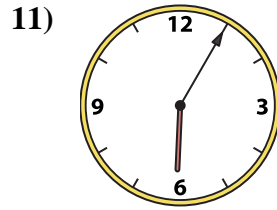
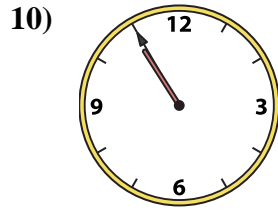
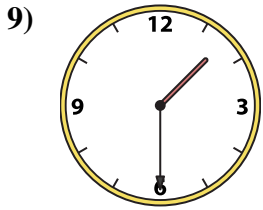
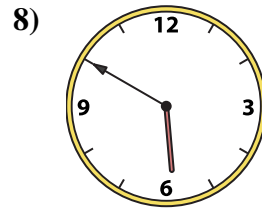
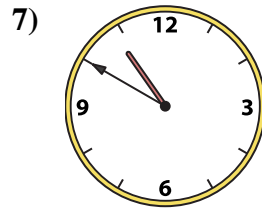
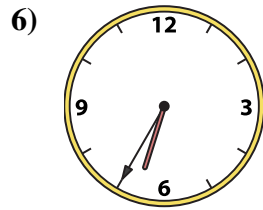
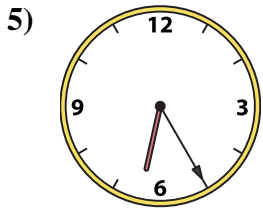
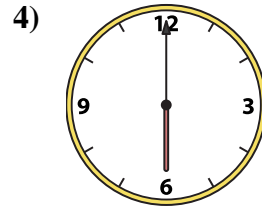
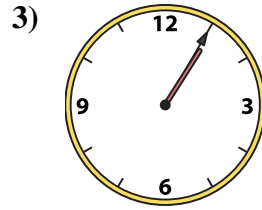
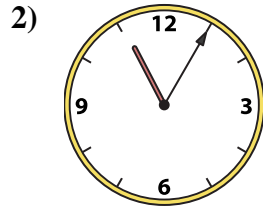
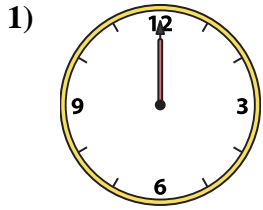
N. 10:55

O. 11:05

P. 6:15



Match the analog clock to the digital clock.



A. **6:05**

B. **1:30**

C. **6:00**

D. **6:35**

E. **12:00**

F. **2:10**

G. **12:30**

H. **10:50**

I. **1:05**

J. **8:45**

K. **8:50**

L. **5:50**

M. **6:25**

N. **10:55**

O. **11:05**

P. **6:15**

Answers

1. **E**

2. **O**

3. **I**

4. **C**

5. **M**

6. **D**

7. **H**

8. **L**

9. **B**

10. **N**

11. **A**

12. **J**

13. **G**

14. **K**

15. **F**

16. **P**