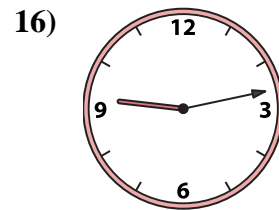
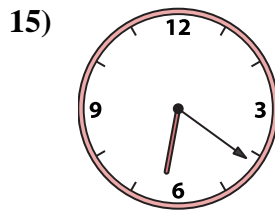
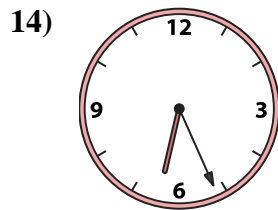
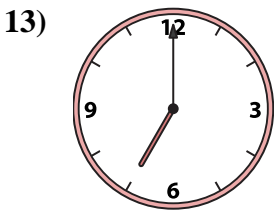
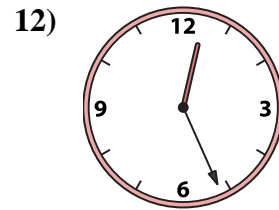
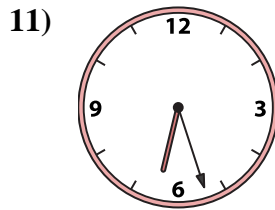
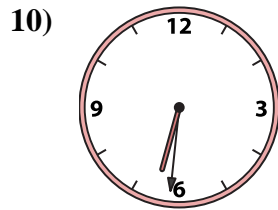

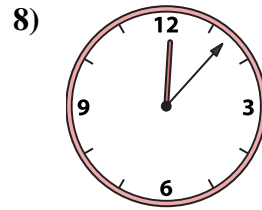
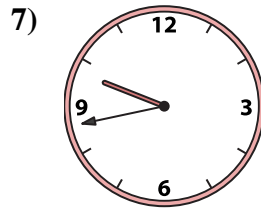
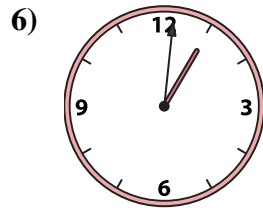

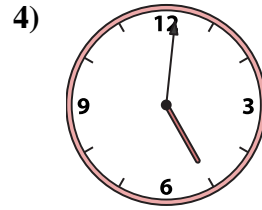
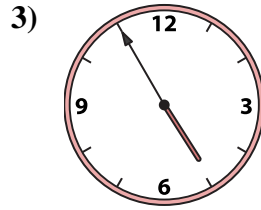
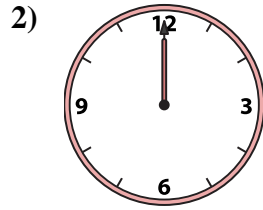
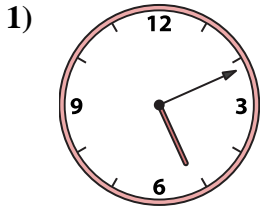




Match the analog clock to the digital clock.

**Answers**



A. 4:55

B. 6:27

C. 7:00

D. 6:21

E. 5:01

F. 12:26

G. 6:26

H. 12:00

I. 5:11

J. 9:43

K. 6:31

L. 1:01

M. 8:06

N. 9:13

O. 12:08

P. 12:07

1. \_\_\_\_\_

2. \_\_\_\_\_

3. \_\_\_\_\_

4. \_\_\_\_\_

5. \_\_\_\_\_

6. \_\_\_\_\_

7. \_\_\_\_\_

8. \_\_\_\_\_

9. \_\_\_\_\_

10. \_\_\_\_\_

11. \_\_\_\_\_

12. \_\_\_\_\_

13. \_\_\_\_\_

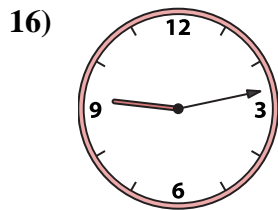
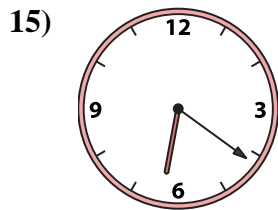
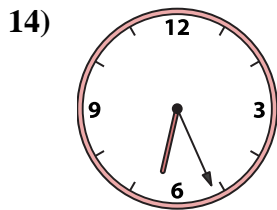
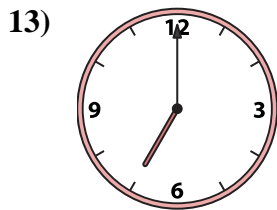
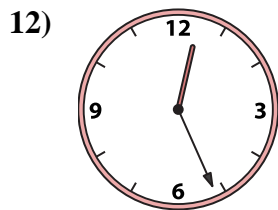
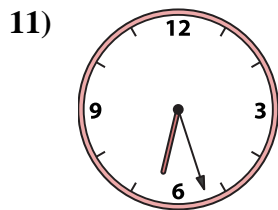
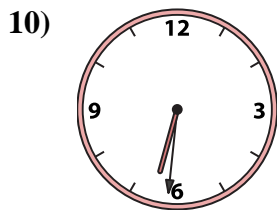


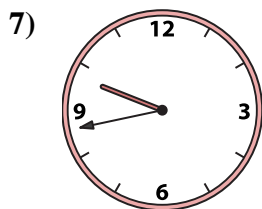


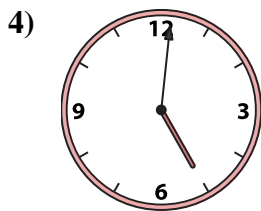
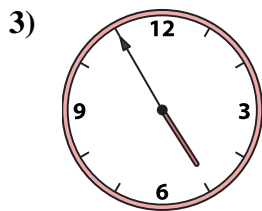
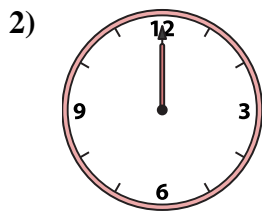
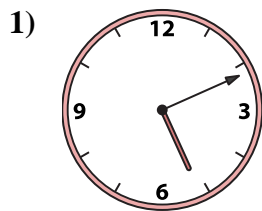
14. \_\_\_\_\_

15. \_\_\_\_\_

16. \_\_\_\_\_



Match the analog clock to the digital clock.



A. **4:55**

B. **6:27**

C. **7:00**

D. **6:21**

E. **5:01**

F. **12:26**

G. **6:26**

H. **12:00**

I. **5:11**

J. **9:43**

K. **6:31**

L. **1:01**

M. **8:06**

N. **9:13**

O. **12:08**

P. **12:07**

**Answers**

1. **I**

2. **H**

3. **A**

4. **E**

5. **M**

6. **L**

7. **J**

8. **P**

9. **O**

10. **K**

11. **B**

12. **F**

13. **C**

14. **G**

15. **D**

16. **N**