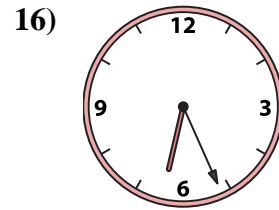
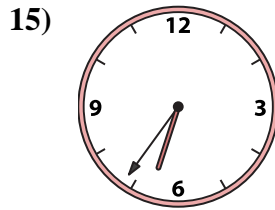
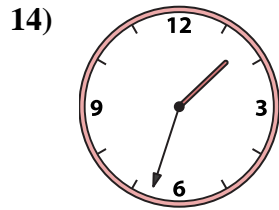
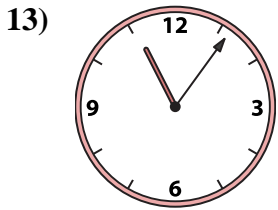
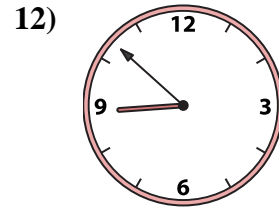
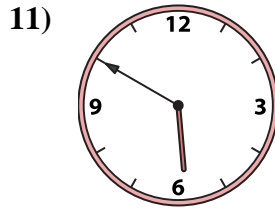
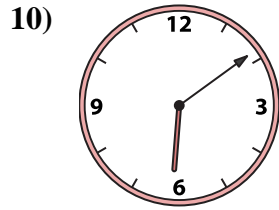

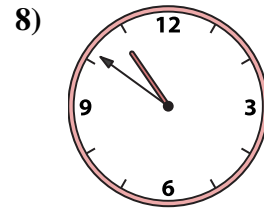
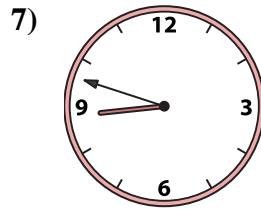
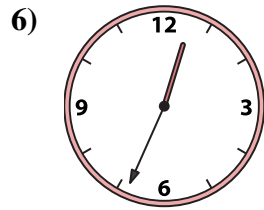
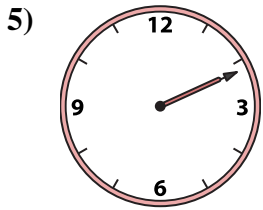
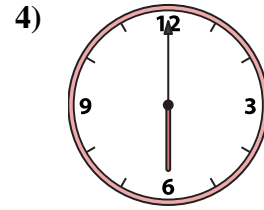
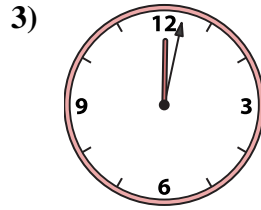
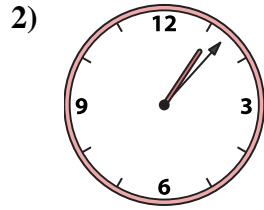
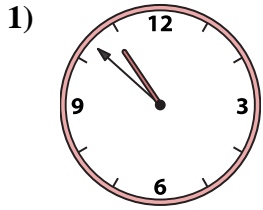




Match the analog clock to the digital clock.



A. 6:09

B. 1:33

C. 6:00

D. 6:36

E. 12:02

F. 2:11

G. 12:34

H. 10:51

I. 1:07

J. 8:48

K. 8:52

L. 5:50

M. 6:26

N. 10:57

O. 10:52

P. 11:06

Answers

1. \_\_\_\_\_

2. \_\_\_\_\_

3. \_\_\_\_\_

4. \_\_\_\_\_

5. \_\_\_\_\_

6. \_\_\_\_\_

7. \_\_\_\_\_

8. \_\_\_\_\_

9. \_\_\_\_\_

10. \_\_\_\_\_

11. \_\_\_\_\_

12. \_\_\_\_\_

13. \_\_\_\_\_

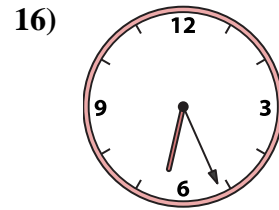
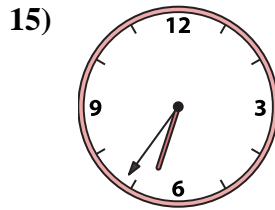
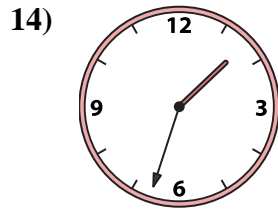
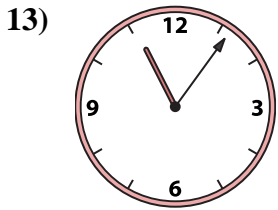
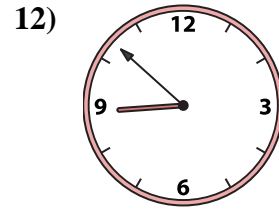
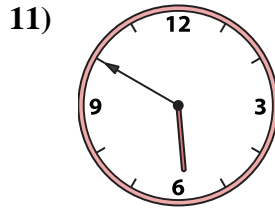
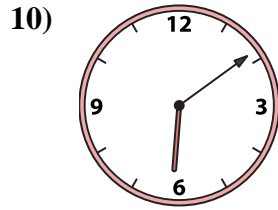

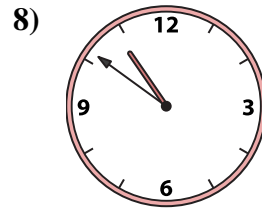
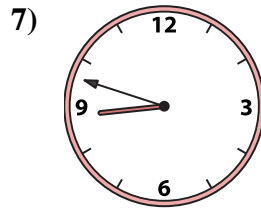
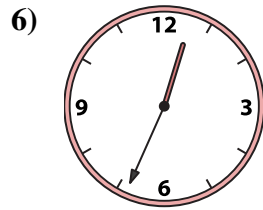
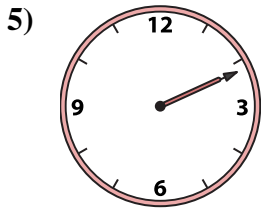
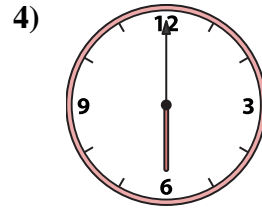
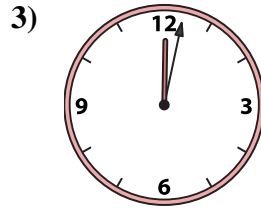
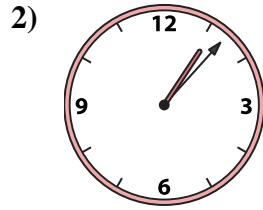
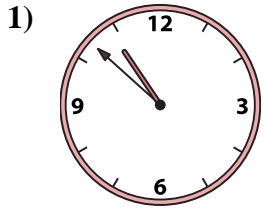
14. \_\_\_\_\_

15. \_\_\_\_\_

16. \_\_\_\_\_



Match the analog clock to the digital clock.



A. 6:09

B. 1:33

C. 6:00

D. 6:36

E. 12:02

F. 2:11

G. 12:34

H. 10:51

I. 1:07

J. 8:48

K. 8:52

L. 5:50

M. 6:26

N. 10:57

O. 10:52

P. 11:06

**Answers**

1. **O**

2. **I**

3. **E**

4. **C**

5. **F**

6. **G**

7. **J**

8. **H**

9. **N**

10. **A**

11. **L**

12. **K**

13. **P**

14. **B**

15. **D**

16. **M**