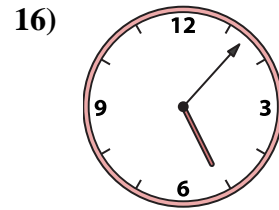
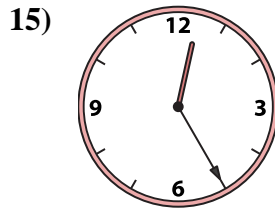
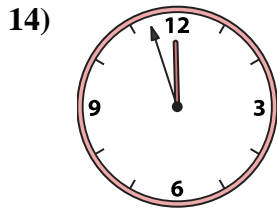
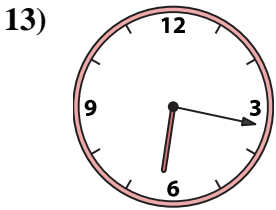
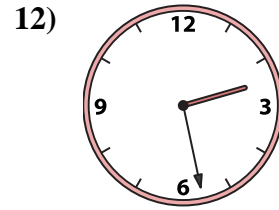
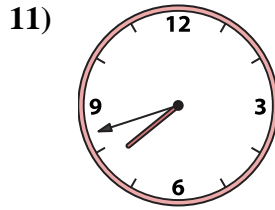
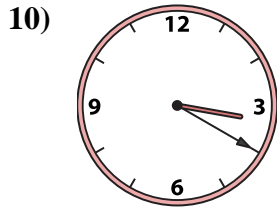
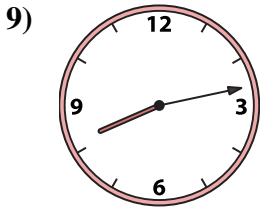
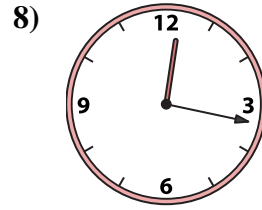
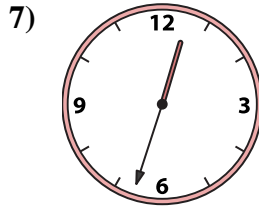
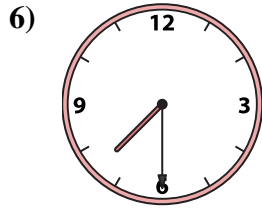
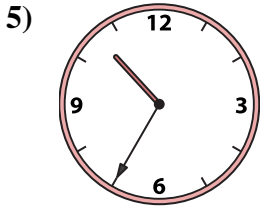
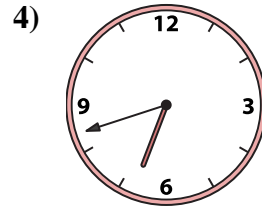
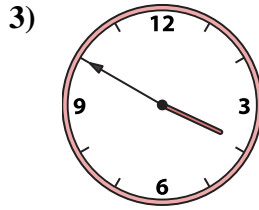
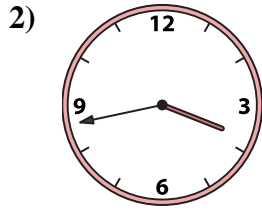
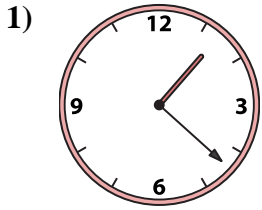




Match the analog clock to the digital clock.

**Answers**



1. \_\_\_\_\_
2. \_\_\_\_\_
3. \_\_\_\_\_
4. \_\_\_\_\_
5. \_\_\_\_\_
6. \_\_\_\_\_
7. \_\_\_\_\_
8. \_\_\_\_\_
9. \_\_\_\_\_
10. \_\_\_\_\_
11. \_\_\_\_\_
12. \_\_\_\_\_
13. \_\_\_\_\_
14. \_\_\_\_\_
15. \_\_\_\_\_
16. \_\_\_\_\_

A. 10:35

B. 2:28

C. 7:42

D. 12:33

E. 6:42

F. 1:22

G. 12:25

H. 6:17

I. 3:50

J. 3:20

K. 11:57

L. 5:07

M. 7:30

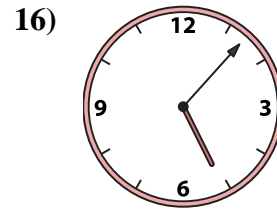
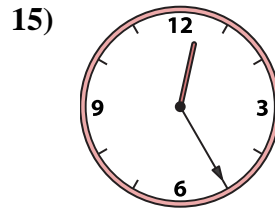
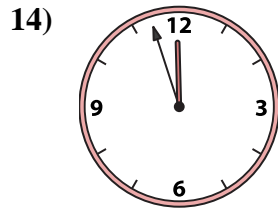
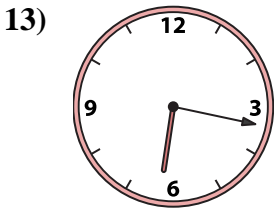
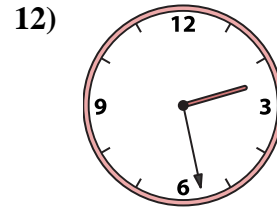
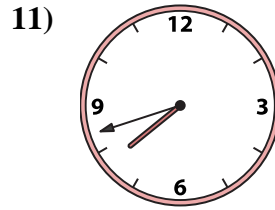
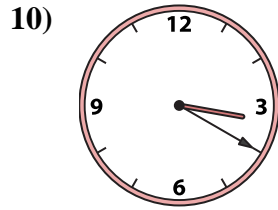
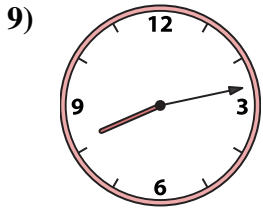
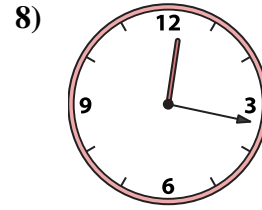

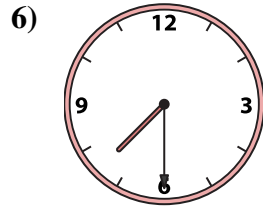
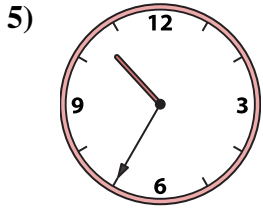
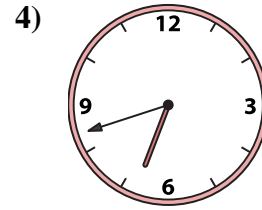
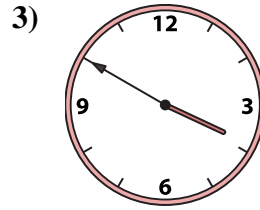
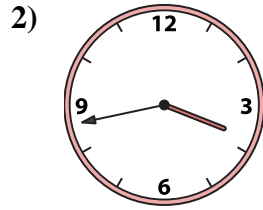
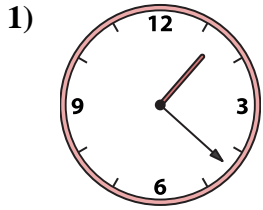
N. 3:43

O. 8:13

P. 12:17



Match the analog clock to the digital clock.



A. 10:35

B. 2:28

C. 7:42

D. 12:33

E. 6:42

F. 1:22

G. 12:25

H. 6:17

I. 3:50

J. 3:20

K. 11:57

L. 5:07

M. 7:30

N. 3:43

O. 8:13

P. 12:17

**Answers**

1. **F**

2. **N**

3. **I**

4. **E**

5. **A**

6. **M**

7. **D**

8. **P**

9. **O**

10. **J**

11. **C**

12. **B**

13. **H**

14. **K**

15. **G**

16. **L**