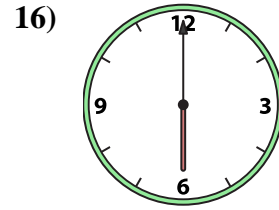
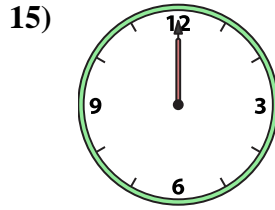
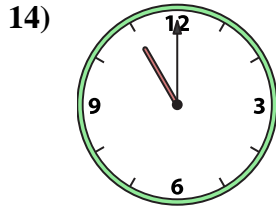
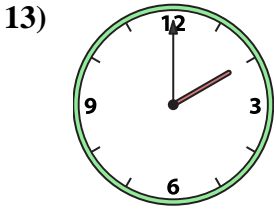
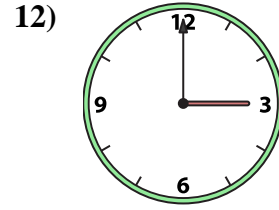
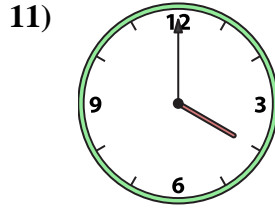
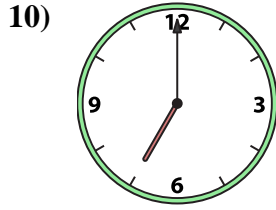
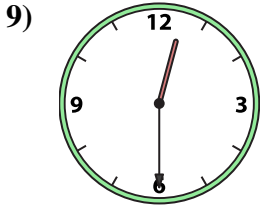
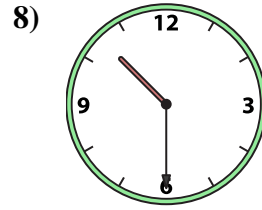
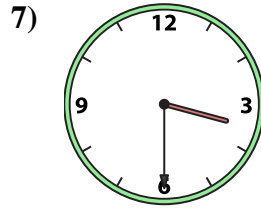
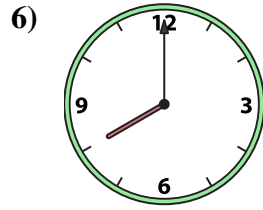
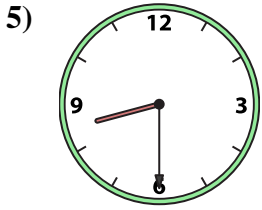
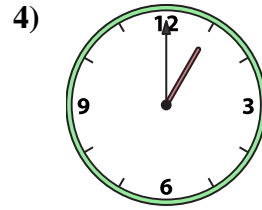
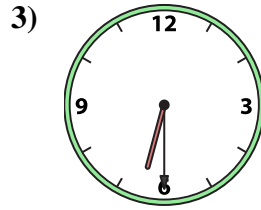
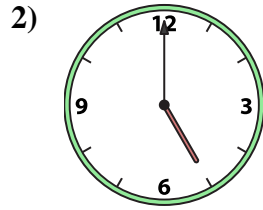
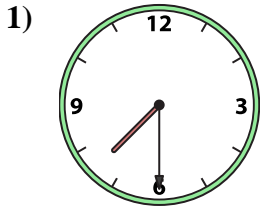




Match the analog clock to the digital clock.

Answers



A.

B.

C.

D.

E.

F.

G.

H.

I.

J.

K.

L.

M.

N.

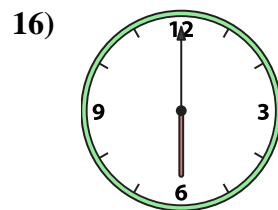
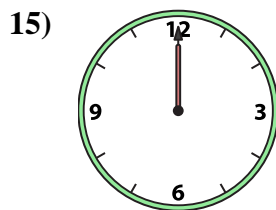
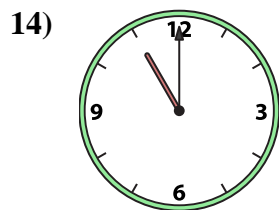

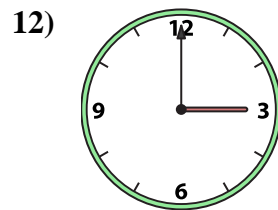
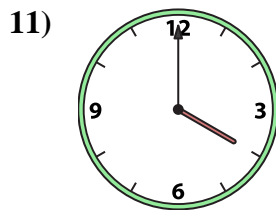
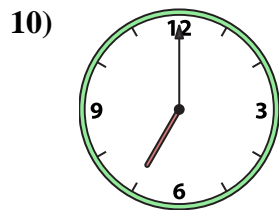
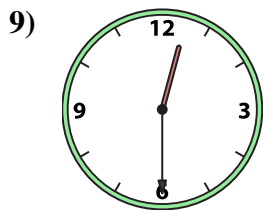
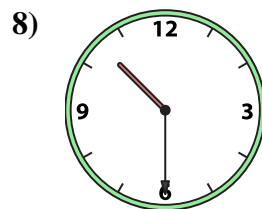
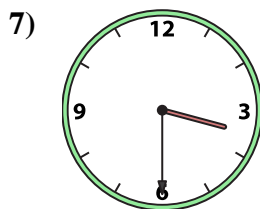

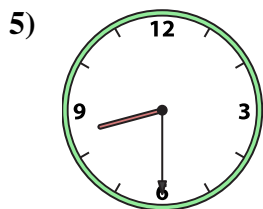
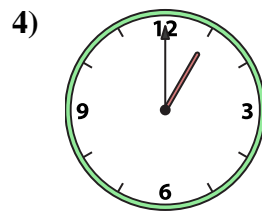
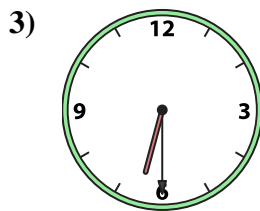
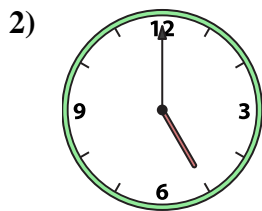
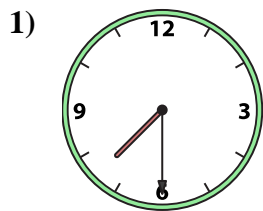
O.

P.

1. _____
2. _____
3. _____
4. _____
5. _____
6. _____
7. _____
8. _____
9. _____
10. _____
11. _____
12. _____
13. _____
14. _____
15. _____
16. _____



Match the analog clock to the digital clock.



A. **7:00**

B. **12:30**

C. **2:00**

D. **8:00**

E. **6:00**

F. **10:30**

G. **3:30**

H. **1:00**

I. **5:00**

J. **8:30**

K. **7:30**

L. **6:30**

M. **11:00**

N. **3:00**

O. **4:00**

P. **12:00**

Answers

1. **K**

2. **I**

3. **L**

4. **H**

5. **J**

6. **D**

7. **G**

8. **F**

9. **B**

10. **A**

11. **O**

12. **N**

13. **C**

14. **M**

15. **P**

16. **E**