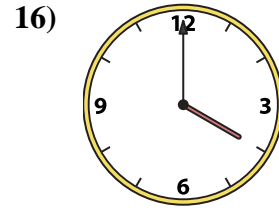
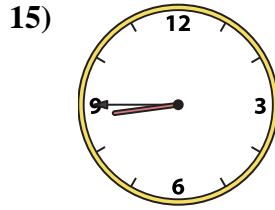
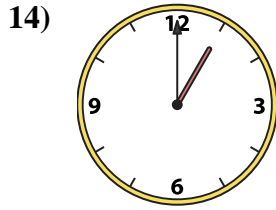
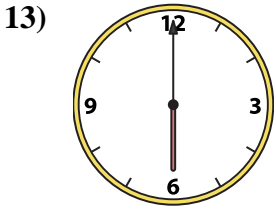
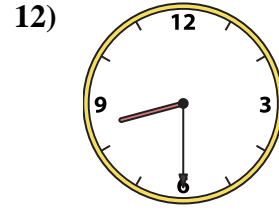
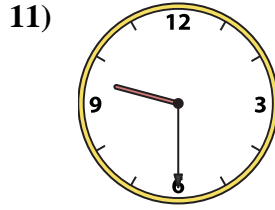
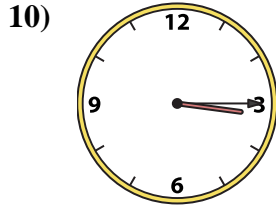
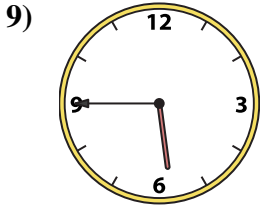
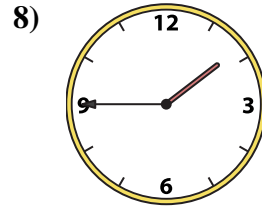
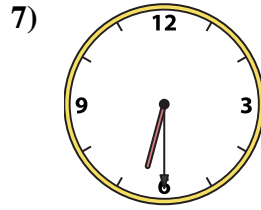
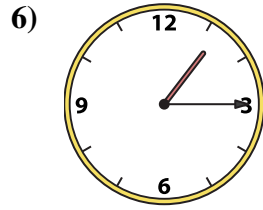
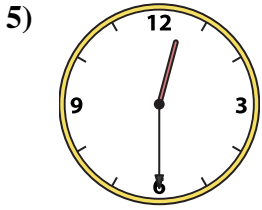
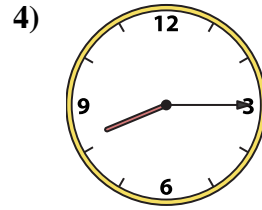
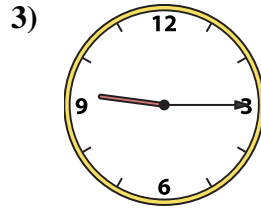
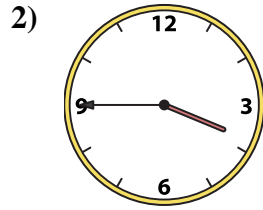
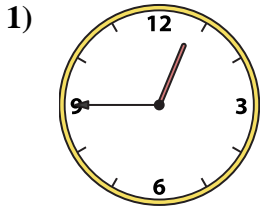




Match the analog clock to the digital clock.

**Answers**



A. 4:00

B. 6:00

C. 9:15

D. 12:45

E. 6:30

F. 3:45

G. 9:30

H. 8:30

I. 1:45

J. 8:45

K. 3:15

L. 1:15

M. 1:00

N. 12:30

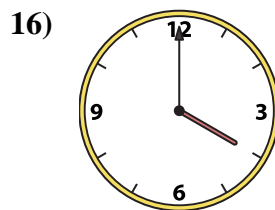
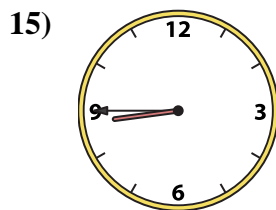
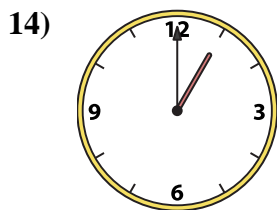
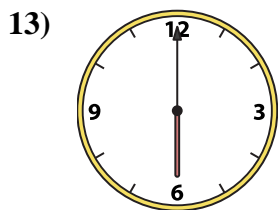
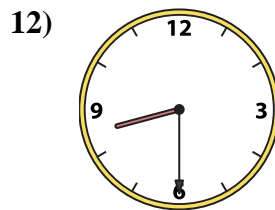
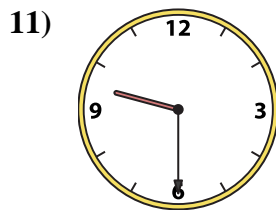
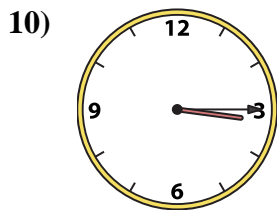
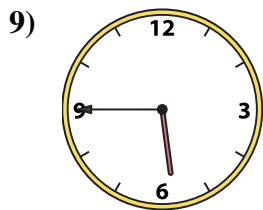
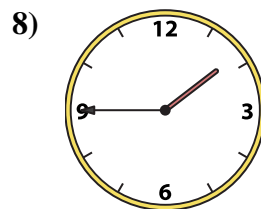
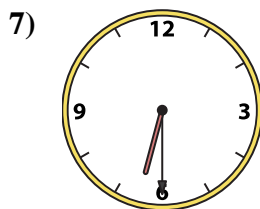
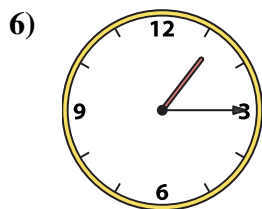
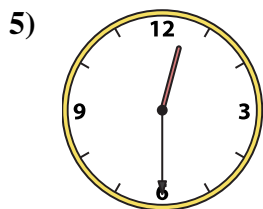
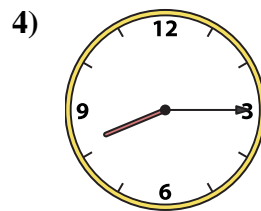
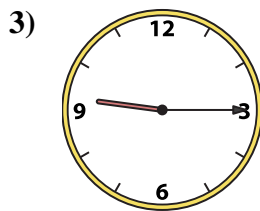
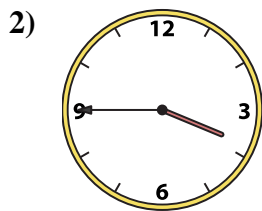
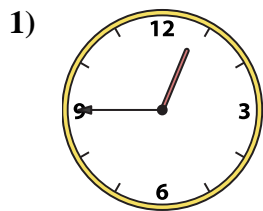
O. 8:15

P. 5:45

1. \_\_\_\_\_
2. \_\_\_\_\_
3. \_\_\_\_\_
4. \_\_\_\_\_
5. \_\_\_\_\_
6. \_\_\_\_\_
7. \_\_\_\_\_
8. \_\_\_\_\_
9. \_\_\_\_\_
10. \_\_\_\_\_
11. \_\_\_\_\_
12. \_\_\_\_\_
13. \_\_\_\_\_
14. \_\_\_\_\_
15. \_\_\_\_\_
16. \_\_\_\_\_



Match the analog clock to the digital clock.



A. 4:00

B. 6:00

C. 9:15

D. 12:45

E. 6:30

F. 3:45

G. 9:30

H. 8:30

I. 1:45

J. 8:45

K. 3:15

L. 1:15

M. 1:00

N. 12:30

O. 8:15

P. 5:45

**Answers**

1. **D**

2. **F**

3. **C**

4. **O**

5. **N**

6. **L**

7. **E**

8. **I**

9. **P**

10. **K**

11. **G**

12. **H**

13. **B**

14. **M**

15. **J**

16. **A**