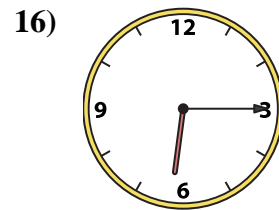
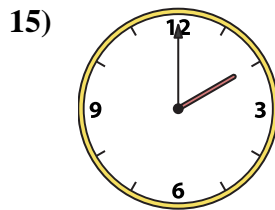
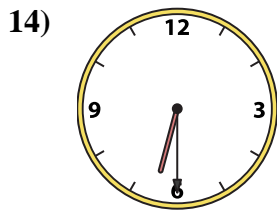
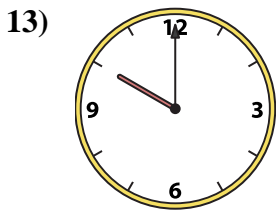
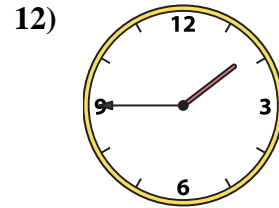
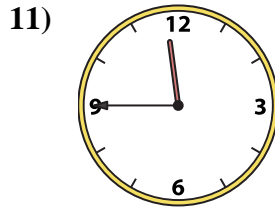
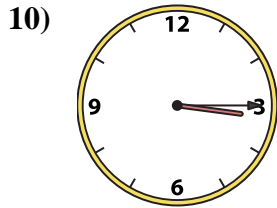
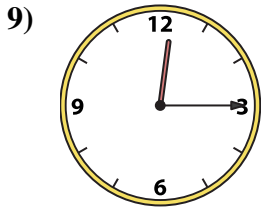
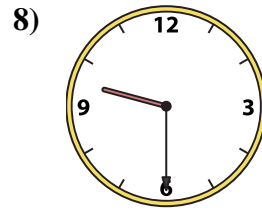
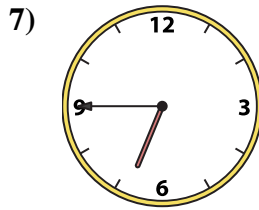
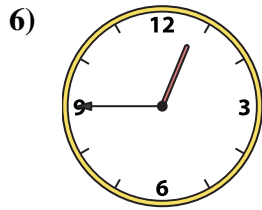
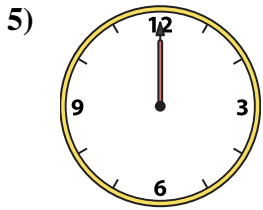
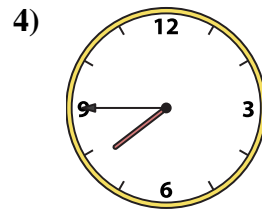
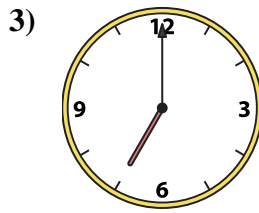
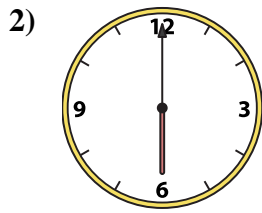
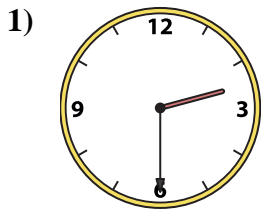




Match the analog clock to the digital clock.



A. 10:00

B. 2:30

C. 2:00

D. 3:15

E. 7:45

F. 7:00

G. 12:00

H. 12:15

I. 6:00

J. 11:45

K. 1:45

L. 9:30

M. 12:45

N. 6:30

O. 6:45

P. 6:15

Answers

1. _____

2. _____

3. _____

4. _____

5. _____

6. _____

7. _____

8. _____

9. _____

10. _____

11. _____

12. _____

13. _____

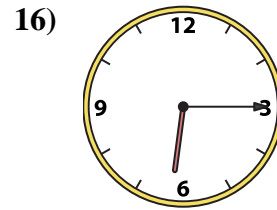
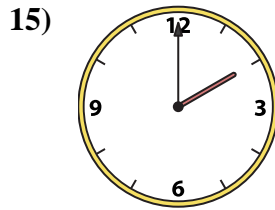
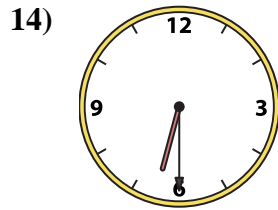
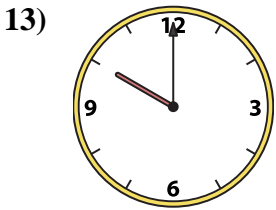
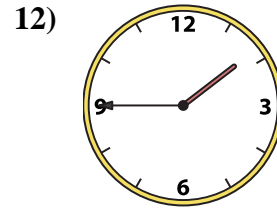
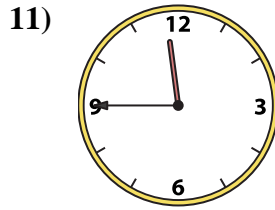
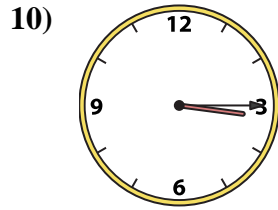
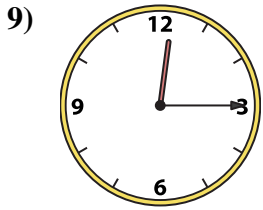
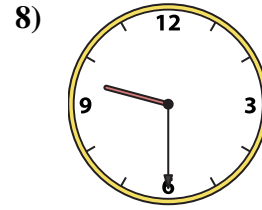
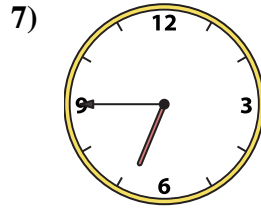
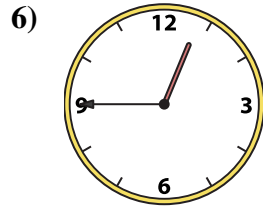
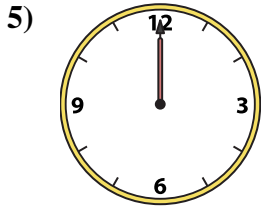
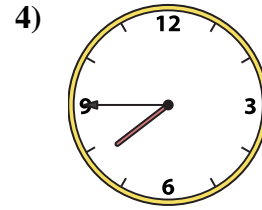
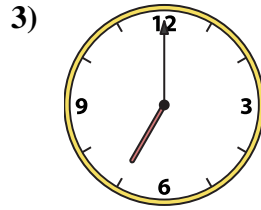
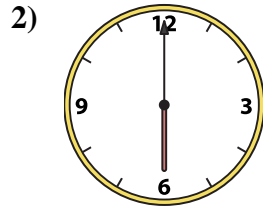
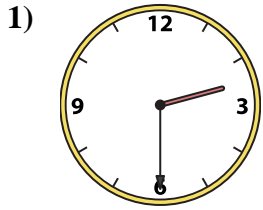
14. _____

15. _____

16. _____



Match the analog clock to the digital clock.



A. 10:00

B. 2:30

C. 2:00

D. 3:15

E. 7:45

F. 7:00

G. 12:00

H. 12:15

I. 6:00

J. 11:45

K. 1:45

L. 9:30

M. 12:45

N. 6:30

O. 6:45

P. 6:15

Answers

1. **B**

2. **I**

3. **F**

4. **E**

5. **G**

6. **M**

7. **O**

8. **L**

9. **H**

10. **D**

11. **J**

12. **K**

13. **A**

14. **N**

15. **C**

16. **P**