



Solve each problem.

Answers

1) Start: \_\_\_\_\_

Elapsed: 1 hr & 25 mins

End: 3:25

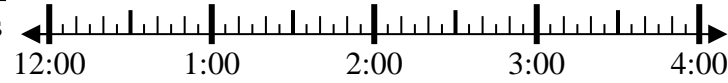


1. \_\_\_\_\_

2) Start: \_\_\_\_\_

Elapsed: 2 hrs & 35 mins

End: 2:50



2. \_\_\_\_\_

3) Start: \_\_\_\_\_

Elapsed: 1 hr & 15 mins

End: 12:40

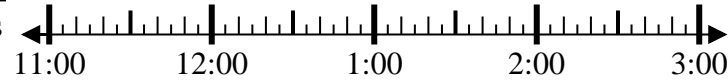


3. \_\_\_\_\_

4) Start: \_\_\_\_\_

Elapsed: 2 hrs & 20 mins

End: 1:55



4. \_\_\_\_\_

5) Start: \_\_\_\_\_

Elapsed: 1 hr & 20 mins

End: 6:30

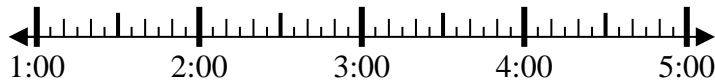


5. \_\_\_\_\_

6) Start: \_\_\_\_\_

Elapsed: 1 hr & 30 mins

End: 3:25

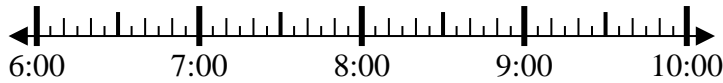


6. \_\_\_\_\_

7) Start: \_\_\_\_\_

Elapsed: 1 hr & 40 mins

End: 7:55

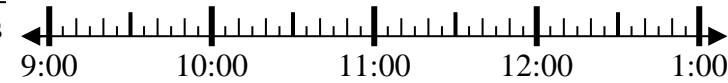


7. \_\_\_\_\_

8) Start: \_\_\_\_\_

Elapsed: 2 hrs & 30 mins

End: 11:35



8. \_\_\_\_\_

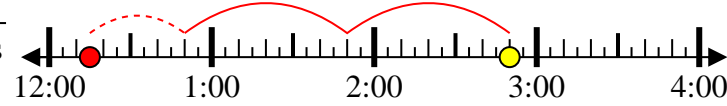


Solve each problem.

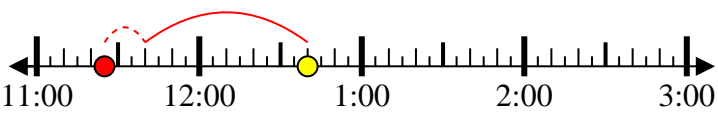
1) Start: 2:00  
 Elapsed: 1 hr & 25 mins  
 End: 3:25



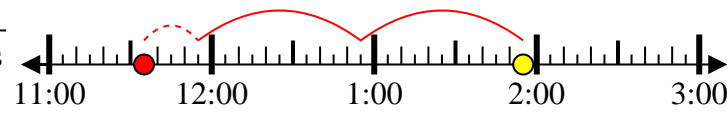
2) Start: 12:15  
 Elapsed: 2 hrs & 35 mins  
 End: 2:50



3) Start: 11:25  
 Elapsed: 1 hr & 15 mins  
 End: 12:40



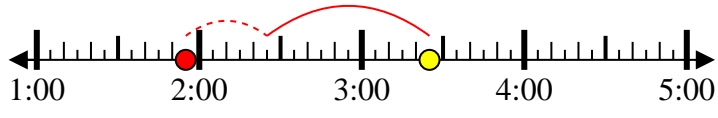
4) Start: 11:35  
 Elapsed: 2 hrs & 20 mins  
 End: 1:55



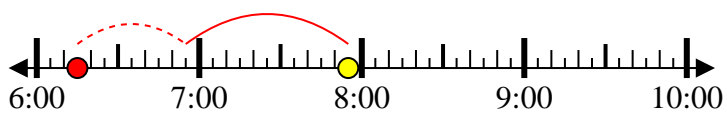
5) Start: 5:10  
 Elapsed: 1 hr & 20 mins  
 End: 6:30



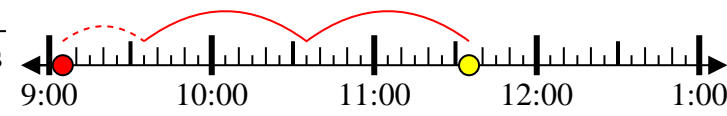
6) Start: 1:55  
 Elapsed: 1 hr & 30 mins  
 End: 3:25



7) Start: 6:15  
 Elapsed: 1 hr & 40 mins  
 End: 7:55



8) Start: 9:05  
 Elapsed: 2 hrs & 30 mins  
 End: 11:35



Answers

1. 2:00

2. 12:15

3. 11:25

4. 11:35

5. 5:10

6. 1:55

7. 6:15

8. 9:05