



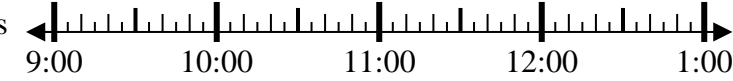
Solve each problem.

Answers

1) Start: _____

Elapsed: 2 hrs & 30 mins

End: 12:05

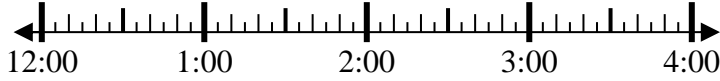


1. _____

2) Start: _____

Elapsed: 1 hr & 45 mins

End: 2:35

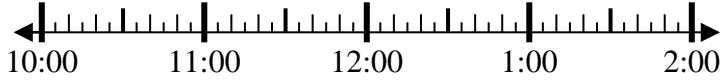


2. _____

3) Start: _____

Elapsed: 1 hr & 25 mins

End: 11:40

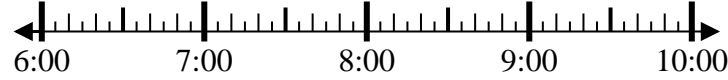


3. _____

4) Start: _____

Elapsed: 1 hr & 45 mins

End: 8:10

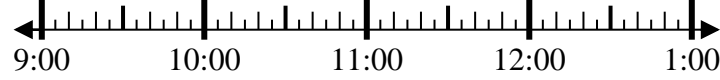


4. _____

5) Start: _____

Elapsed: 1 hr & 15 mins

End: 10:25

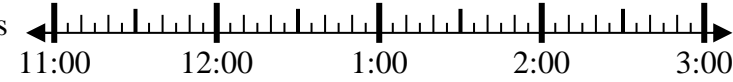


5. _____

6) Start: _____

Elapsed: 2 hrs & 15 mins

End: 2:00

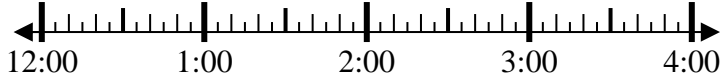


6. _____

7) Start: _____

Elapsed: 1 hr & 40 mins

End: 2:00

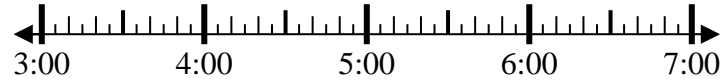


7. _____

8) Start: _____

Elapsed: 1 hr & 40 mins

End: 5:15

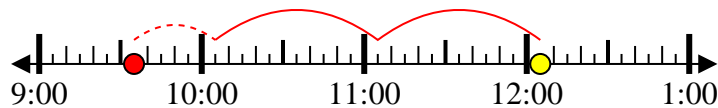


8. _____



Solve each problem.

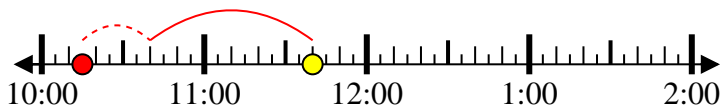
1) Start: 9:35
 Elapsed: 2 hrs & 30 mins
 End: 12:05



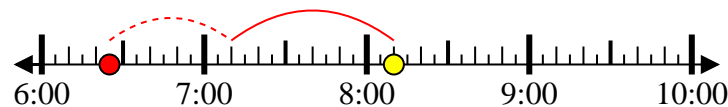
2) Start: 12:50
 Elapsed: 1 hr & 45 mins
 End: 2:35



3) Start: 10:15
 Elapsed: 1 hr & 25 mins
 End: 11:40



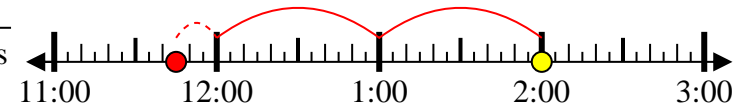
4) Start: 6:25
 Elapsed: 1 hr & 45 mins
 End: 8:10



5) Start: 9:10
 Elapsed: 1 hr & 15 mins
 End: 10:25



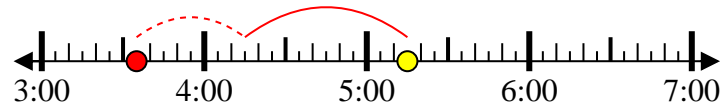
6) Start: 11:45
 Elapsed: 2 hrs & 15 mins
 End: 2:00



7) Start: 12:20
 Elapsed: 1 hr & 40 mins
 End: 2:00



8) Start: 3:35
 Elapsed: 1 hr & 40 mins
 End: 5:15



Answers

1. 9:35

2. 12:50

3. 10:15

4. 6:25

5. 9:10

6. 11:45

7. 12:20

8. 3:35