



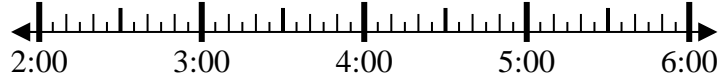
Solve each problem.

Answers

1) Start: _____

Elapsed: 2 hrs & 50 mins

End: 5:40

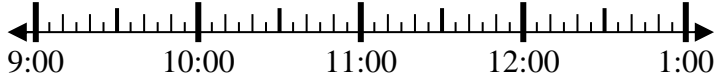


1. _____

2) Start: _____

Elapsed: 1 hr & 10 mins

End: 10:20

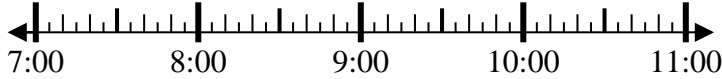


2. _____

3) Start: _____

Elapsed: 1 hr & 15 mins

End: 8:20

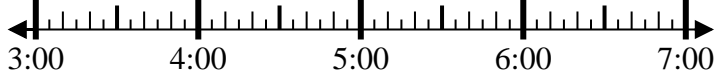


3. _____

4) Start: _____

Elapsed: 1 hr & 15 mins

End: 4:15



4. _____

5) Start: _____

Elapsed: 1 hr & 40 mins

End: 8:55

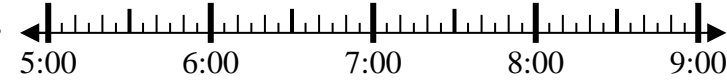


5. _____

6) Start: _____

Elapsed: 2 hrs & 15 mins

End: 7:15

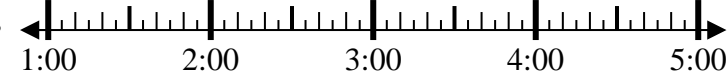


6. _____

7) Start: _____

Elapsed: 2 hrs & 45 mins

End: 3:45

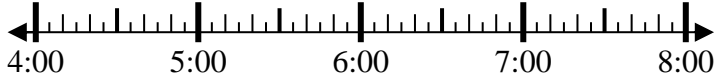


7. _____

8) Start: _____

Elapsed: 1 hr & 20 mins

End: 5:55

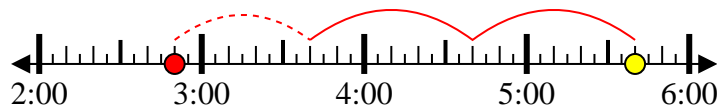


8. _____



Solve each problem.

1) Start: 2:50
 Elapsed: 2 hrs & 50 mins
 End: 5:40



2) Start: 9:10
 Elapsed: 1 hr & 10 mins
 End: 10:20



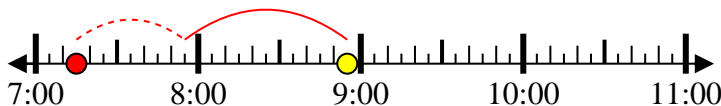
3) Start: 7:05
 Elapsed: 1 hr & 15 mins
 End: 8:20



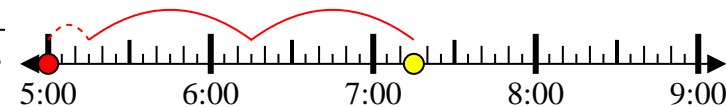
4) Start: 3:00
 Elapsed: 1 hr & 15 mins
 End: 4:15



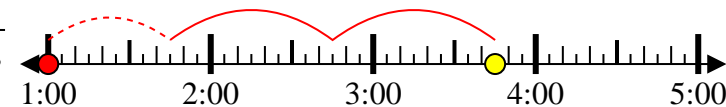
5) Start: 7:15
 Elapsed: 1 hr & 40 mins
 End: 8:55



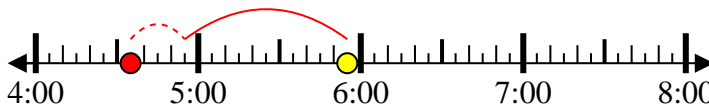
6) Start: 5:00
 Elapsed: 2 hrs & 15 mins
 End: 7:15



7) Start: 1:00
 Elapsed: 2 hrs & 45 mins
 End: 3:45



8) Start: 4:35
 Elapsed: 1 hr & 20 mins
 End: 5:55



Answers

1. 2:50

2. 9:10

3. 7:05

4. 3:00

5. 7:15

6. 5:00

7. 1:00

8. 4:35