



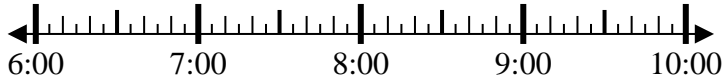
Solve each problem.

Answers

1) Start: _____

Elapsed: 1 hr & 10 mins

End: 7:55

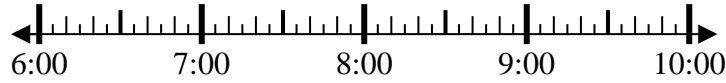


1. _____

2) Start: _____

Elapsed: 2 hrs & 40 mins

End: 9:05



2. _____

3) Start: _____

Elapsed: 1 hr & 50 mins

End: 3:00

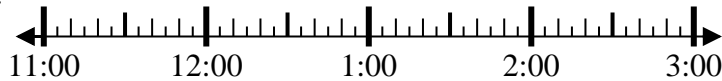


3. _____

4) Start: _____

Elapsed: 1 hr & 45 mins

End: 1:00

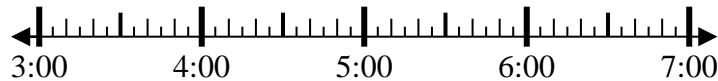


4. _____

5) Start: _____

Elapsed: 2 hrs & 10 mins

End: 5:35

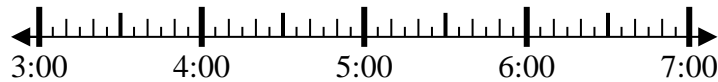


5. _____

6) Start: _____

Elapsed: 2 hrs & 35 mins

End: 5:55

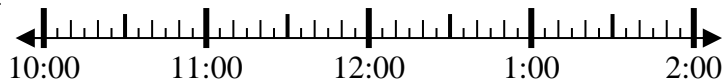


6. _____

7) Start: _____

Elapsed: 1 hr & 50 mins

End: 12:25

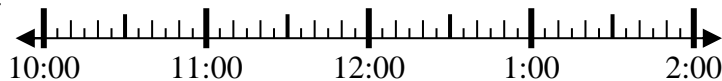


7. _____

8) Start: _____

Elapsed: 1 hr & 30 mins

End: 11:30

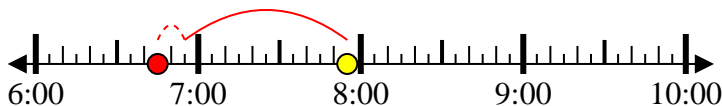


8. _____

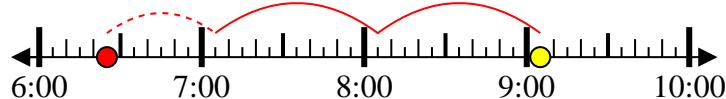


Solve each problem.

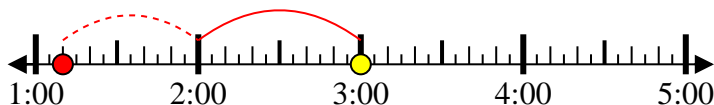
1) Start: 6:45
 Elapsed: 1 hr & 10 mins
 End: 7:55



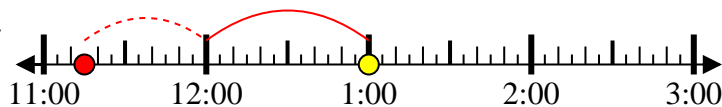
2) Start: 6:25
 Elapsed: 2 hrs & 40 mins
 End: 9:05



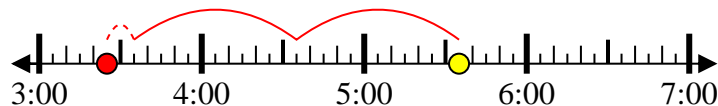
3) Start: 1:10
 Elapsed: 1 hr & 50 mins
 End: 3:00



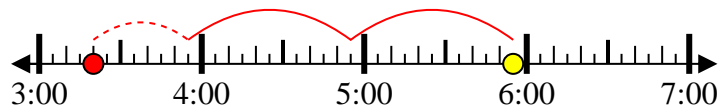
4) Start: 11:15
 Elapsed: 1 hr & 45 mins
 End: 1:00



5) Start: 3:25
 Elapsed: 2 hrs & 10 mins
 End: 5:35



6) Start: 3:20
 Elapsed: 2 hrs & 35 mins
 End: 5:55



7) Start: 10:35
 Elapsed: 1 hr & 50 mins
 End: 12:25



8) Start: 10:00
 Elapsed: 1 hr & 30 mins
 End: 11:30



Answers

1. 6:45

2. 6:25

3. 1:10

4. 11:15

5. 3:25

6. 3:20

7. 10:35

8. 10:00