



Solve each problem.

Answers

1) Start: \_\_\_\_\_

Elapsed: 1 hr & 40 mins

End: 3:55

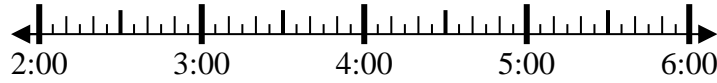


1. \_\_\_\_\_

2) Start: \_\_\_\_\_

Elapsed: 2 hrs & 45 mins

End: 4:55

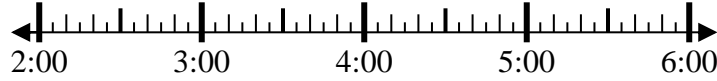


2. \_\_\_\_\_

3) Start: \_\_\_\_\_

Elapsed: 2 hrs & 10 mins

End: 4:55

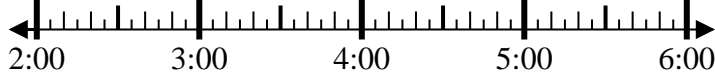


3. \_\_\_\_\_

4) Start: \_\_\_\_\_

Elapsed: 1 hr & 20 mins

End: 3:40

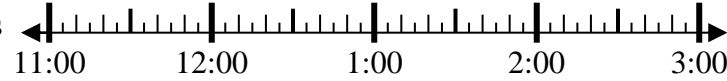


4. \_\_\_\_\_

5) Start: \_\_\_\_\_

Elapsed: 2 hrs & 25 mins

End: 1:30

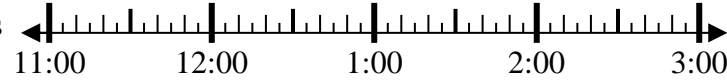


5. \_\_\_\_\_

6) Start: \_\_\_\_\_

Elapsed: 2 hrs & 20 mins

End: 1:25

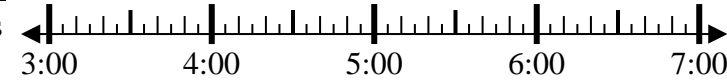


6. \_\_\_\_\_

7) Start: \_\_\_\_\_

Elapsed: 2 hrs & 20 mins

End: 6:05

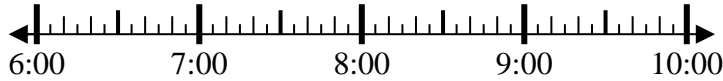


7. \_\_\_\_\_

8) Start: \_\_\_\_\_

Elapsed: 1 hr & 30 mins

End: 7:50

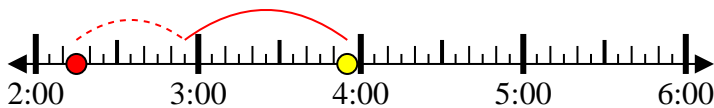


8. \_\_\_\_\_

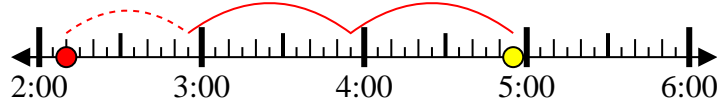


Solve each problem.

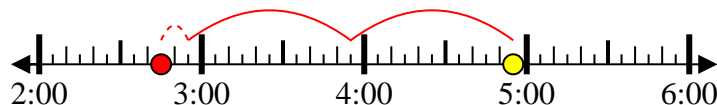
1) Start: 2:15  
 Elapsed: 1 hr & 40 mins  
 End: 3:55



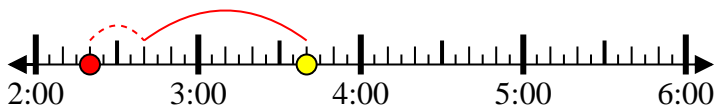
2) Start: 2:10  
 Elapsed: 2 hrs & 45 mins  
 End: 4:55



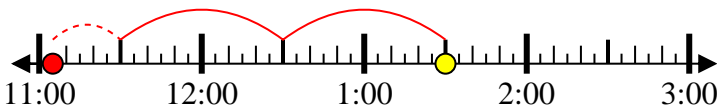
3) Start: 2:45  
 Elapsed: 2 hrs & 10 mins  
 End: 4:55



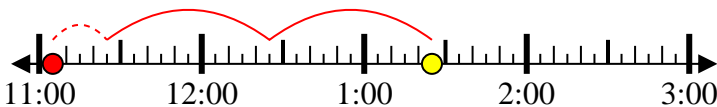
4) Start: 2:20  
 Elapsed: 1 hr & 20 mins  
 End: 3:40



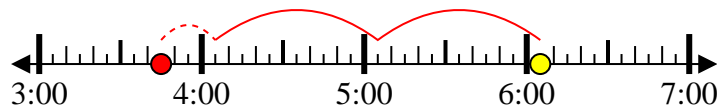
5) Start: 11:05  
 Elapsed: 2 hrs & 25 mins  
 End: 1:30



6) Start: 11:05  
 Elapsed: 2 hrs & 20 mins  
 End: 1:25



7) Start: 3:45  
 Elapsed: 2 hrs & 20 mins  
 End: 6:05



8) Start: 6:20  
 Elapsed: 1 hr & 30 mins  
 End: 7:50



Answers

1. 2:15

2. 2:10

3. 2:45

4. 2:20

5. 11:05

6. 11:05

7. 3:45

8. 6:20