



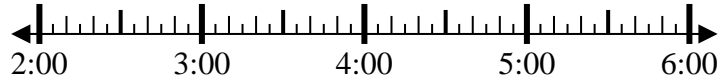
Solve each problem.

Answers

1) Start: 2:15

Elapsed: 1 hr & 40 mins

End: _____



1. _____

2) Start: 2:10

Elapsed: 2 hrs & 45 mins

End: _____



2. _____

3) Start: 2:45

Elapsed: 2 hrs & 10 mins

End: _____



3. _____

4) Start: 2:20

Elapsed: 1 hr & 20 mins

End: _____

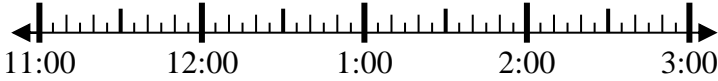


4. _____

5) Start: 11:05

Elapsed: 2 hrs & 25 mins

End: _____

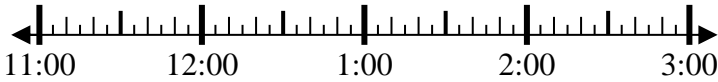


5. _____

6) Start: 11:05

Elapsed: 2 hrs & 20 mins

End: _____

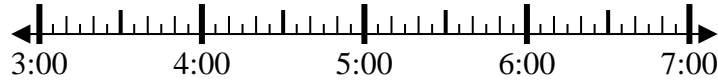


6. _____

7) Start: 3:45

Elapsed: 2 hrs & 20 mins

End: _____

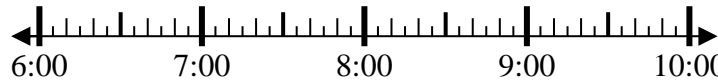


7. _____

8) Start: 6:20

Elapsed: 1 hr & 30 mins

End: _____



8. _____

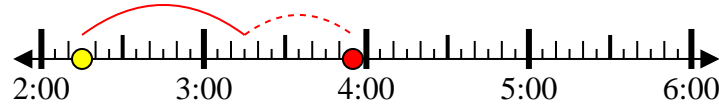


Solve each problem.

1) Start: 2:15

Elapsed: 1 hr & 40 mins

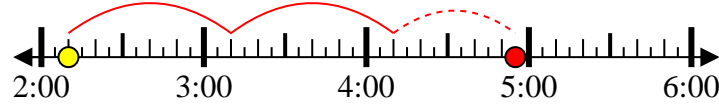
End: 3:55



2) Start: 2:10

Elapsed: 2 hrs & 45 mins

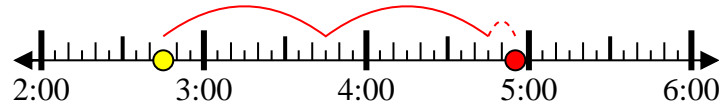
End: 4:55



3) Start: 2:45

Elapsed: 2 hrs & 10 mins

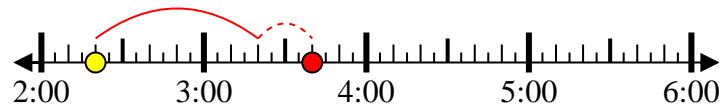
End: 4:55



4) Start: 2:20

Elapsed: 1 hr & 20 mins

End: 3:40



5) Start: 11:05

Elapsed: 2 hrs & 25 mins

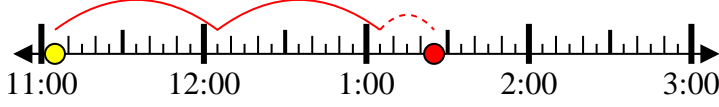
End: 1:30



6) Start: 11:05

Elapsed: 2 hrs & 20 mins

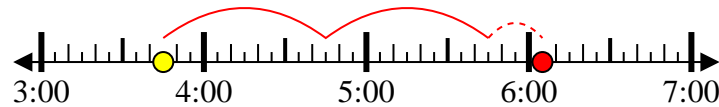
End: 1:25



7) Start: 3:45

Elapsed: 2 hrs & 20 mins

End: 6:05



8) Start: 6:20

Elapsed: 1 hr & 30 mins

End: 7:50



Answers

1. 3:55

2. 4:55

3. 4:55

4. 3:40

5. 1:30

6. 1:25

7. 6:05

8. 7:50



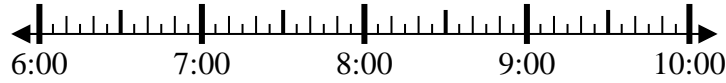
Solve each problem.

Answers

1) Start: 6:45

Elapsed: 1 hr & 10 mins

End: _____

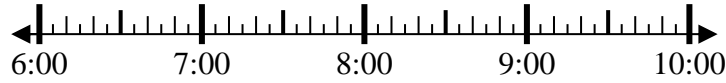


1. _____

2) Start: 6:25

Elapsed: 2 hrs & 40 mins

End: _____

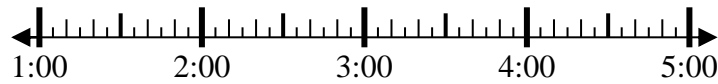


2. _____

3) Start: 1:10

Elapsed: 1 hr & 50 mins

End: _____



3. _____

4) Start: 11:15

Elapsed: 1 hr & 45 mins

End: _____

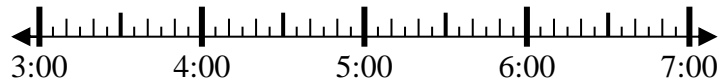


4. _____

5) Start: 3:25

Elapsed: 2 hrs & 10 mins

End: _____

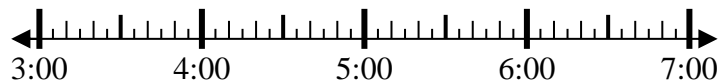


5. _____

6) Start: 3:20

Elapsed: 2 hrs & 35 mins

End: _____

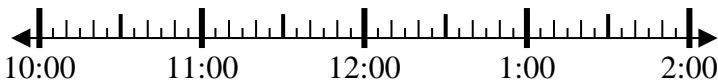


6. _____

7) Start: 10:35

Elapsed: 1 hr & 50 mins

End: _____

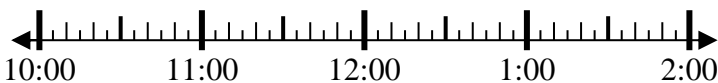


7. _____

8) Start: 10:00

Elapsed: 1 hr & 30 mins

End: _____



8. _____

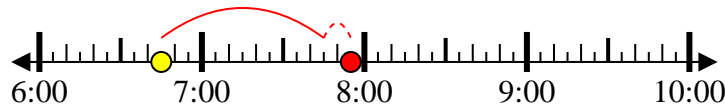


Solve each problem.

1) Start: 6:45

Elapsed: 1 hr & 10 mins

End: 7:55



2) Start: 6:25

Elapsed: 2 hrs & 40 mins

End: 9:05



3) Start: 1:10

Elapsed: 1 hr & 50 mins

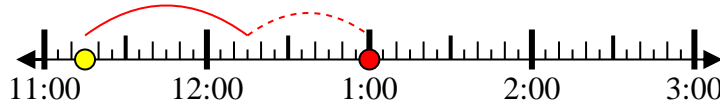
End: 3:00



4) Start: 11:15

Elapsed: 1 hr & 45 mins

End: 1:00



5) Start: 3:25

Elapsed: 2 hrs & 10 mins

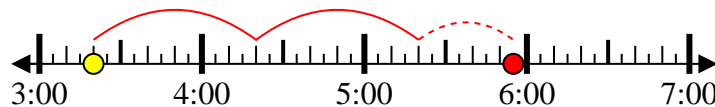
End: 5:35



6) Start: 3:20

Elapsed: 2 hrs & 35 mins

End: 5:55



7) Start: 10:35

Elapsed: 1 hr & 50 mins

End: 12:25



8) Start: 10:00

Elapsed: 1 hr & 30 mins

End: 11:30



Answers

1. 7:55

2. 9:05

3. 3:00

4. 1:00

5. 5:35

6. 5:55

7. 12:25

8. 11:30



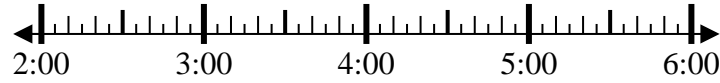
Solve each problem.

Answers

1) Start: 2:00

Elapsed: 1 hr & 45 mins

End: _____

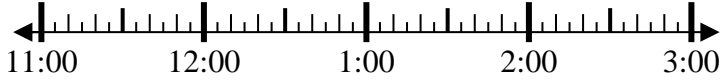


1. _____

2) Start: 11:35

Elapsed: 2 hrs & 45 mins

End: _____

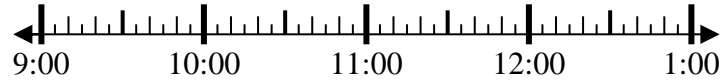


2. _____

3) Start: 9:00

Elapsed: 1 hr & 10 mins

End: _____

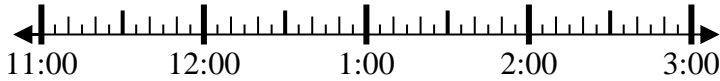


3. _____

4) Start: 11:45

Elapsed: 1 hr & 20 mins

End: _____

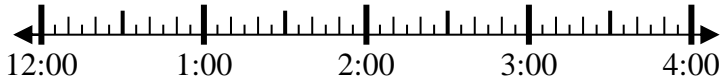


4. _____

5) Start: 12:20

Elapsed: 1 hr & 15 mins

End: _____

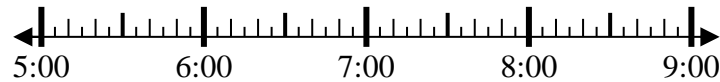


5. _____

6) Start: 5:25

Elapsed: 1 hr & 10 mins

End: _____

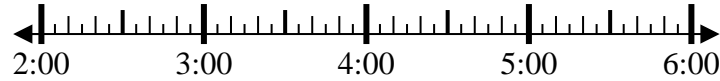


6. _____

7) Start: 2:35

Elapsed: 1 hr & 45 mins

End: _____

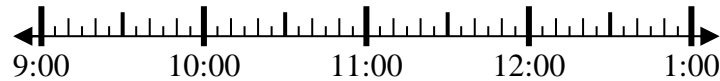


7. _____

8) Start: 9:35

Elapsed: 2 hrs & 45 mins

End: _____



8. _____



Solve each problem.

1) Start: 2:00

Elapsed: 1 hr & 45 mins

End: 3:45



2) Start: 11:35

Elapsed: 2 hrs & 45 mins

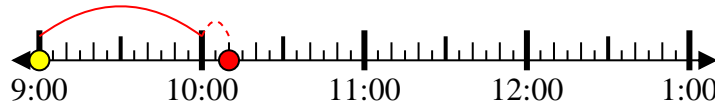
End: 2:20



3) Start: 9:00

Elapsed: 1 hr & 10 mins

End: 10:10



4) Start: 11:45

Elapsed: 1 hr & 20 mins

End: 1:05



5) Start: 12:20

Elapsed: 1 hr & 15 mins

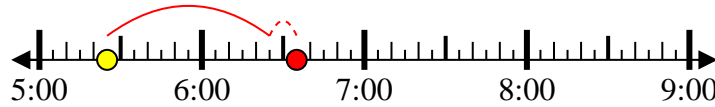
End: 1:35



6) Start: 5:25

Elapsed: 1 hr & 10 mins

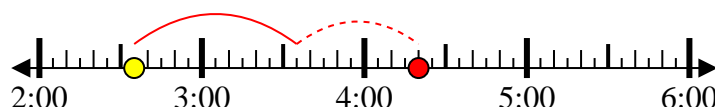
End: 6:35



7) Start: 2:35

Elapsed: 1 hr & 45 mins

End: 4:20



8) Start: 9:35

Elapsed: 2 hrs & 45 mins

End: 12:20



Answers

1. 3:45

2. 2:20

3. 10:10

4. 1:05

5. 1:35

6. 6:35

7. 4:20

8. 12:20



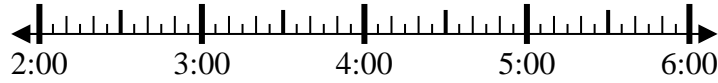
Solve each problem.

Answers

1) Start: 2:50

Elapsed: 2 hrs & 50 mins

End: _____

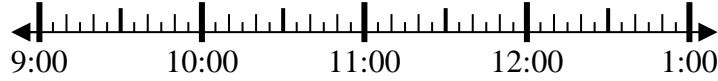


1. _____

2) Start: 9:10

Elapsed: 1 hr & 10 mins

End: _____



2. _____

3) Start: 7:05

Elapsed: 1 hr & 15 mins

End: _____

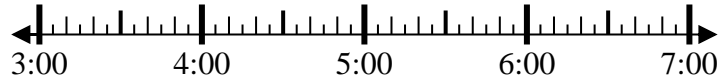


3. _____

4) Start: 3:00

Elapsed: 1 hr & 15 mins

End: _____



4. _____

5) Start: 7:15

Elapsed: 1 hr & 40 mins

End: _____

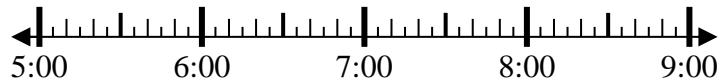


5. _____

6) Start: 5:00

Elapsed: 2 hrs & 15 mins

End: _____

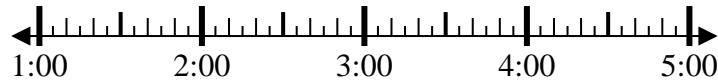


6. _____

7) Start: 1:00

Elapsed: 2 hrs & 45 mins

End: _____

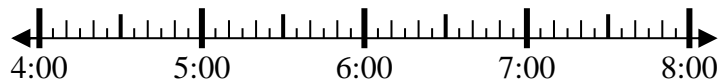


7. _____

8) Start: 4:35

Elapsed: 1 hr & 20 mins

End: _____



8. _____



Solve each problem.

1) Start: 2:50
 Elapsed: 2 hrs & 50 mins
 End: 5:40

2) Start: 9:10
 Elapsed: 1 hr & 10 mins
 End: 10:20

3) Start: 7:05
 Elapsed: 1 hr & 15 mins
 End: 8:20

4) Start: 3:00
 Elapsed: 1 hr & 15 mins
 End: 4:15

5) Start: 7:15
 Elapsed: 1 hr & 40 mins
 End: 8:55

6) Start: 5:00
 Elapsed: 2 hrs & 15 mins
 End: 7:15

7) Start: 1:00
 Elapsed: 2 hrs & 45 mins
 End: 3:45

8) Start: 4:35
 Elapsed: 1 hr & 20 mins
 End: 5:55

Answers

1. 5:40

2. 10:20

3. 8:20

4. 4:15

5. 8:55

6. 7:15

7. 3:45

8. 5:55



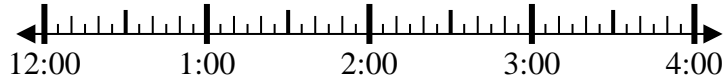
Solve each problem.

Answers

1) Start: 12:10

Elapsed: 1 hr & 25 mins

End: _____

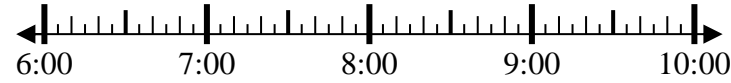


1. _____

2) Start: 6:40

Elapsed: 2 hrs & 10 mins

End: _____

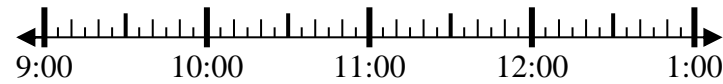


2. _____

3) Start: 9:05

Elapsed: 2 hrs & 50 mins

End: _____

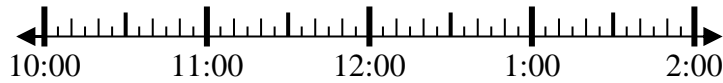


3. _____

4) Start: 10:45

Elapsed: 2 hrs & 40 mins

End: _____



4. _____

5) Start: 5:35

Elapsed: 1 hr & 30 mins

End: _____



5. _____

6) Start: 8:15

Elapsed: 2 hrs & 25 mins

End: _____

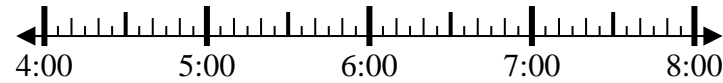


6. _____

7) Start: 4:10

Elapsed: 2 hrs & 55 mins

End: _____

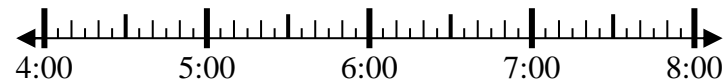


7. _____

8) Start: 4:00

Elapsed: 2 hrs & 20 mins

End: _____



8. _____



Solve each problem.

1) Start: 12:10

Elapsed: 1 hr & 25 mins

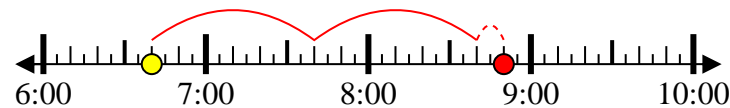
End: 1:35



2) Start: 6:40

Elapsed: 2 hrs & 10 mins

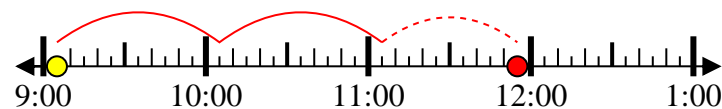
End: 8:50



3) Start: 9:05

Elapsed: 2 hrs & 50 mins

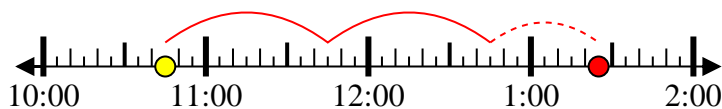
End: 11:55



4) Start: 10:45

Elapsed: 2 hrs & 40 mins

End: 1:25



5) Start: 5:35

Elapsed: 1 hr & 30 mins

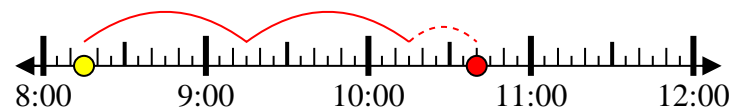
End: 7:05



6) Start: 8:15

Elapsed: 2 hrs & 25 mins

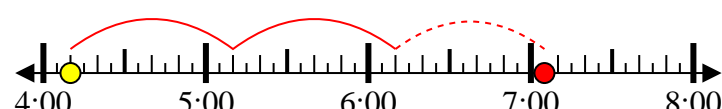
End: 10:40



7) Start: 4:10

Elapsed: 2 hrs & 55 mins

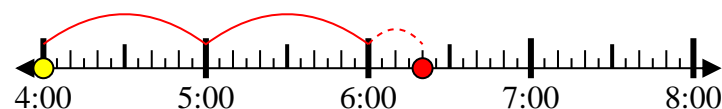
End: 7:05



8) Start: 4:00

Elapsed: 2 hrs & 20 mins

End: 6:20



Answers

1. 1:35

2. 8:50

3. 11:55

4. 1:25

5. 7:05

6. 10:40

7. 7:05

8. 6:20



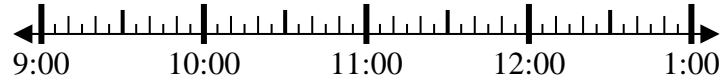
Solve each problem.

Answers

1) Start: 9:35

Elapsed: 2 hrs & 30 mins

End: _____

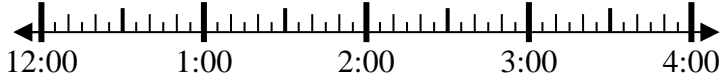


1. _____

2) Start: 12:50

Elapsed: 1 hr & 45 mins

End: _____

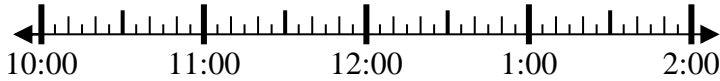


2. _____

3) Start: 10:15

Elapsed: 1 hr & 25 mins

End: _____



3. _____

4) Start: 6:25

Elapsed: 1 hr & 45 mins

End: _____

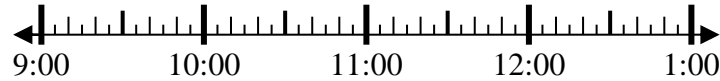


4. _____

5) Start: 9:10

Elapsed: 1 hr & 15 mins

End: _____

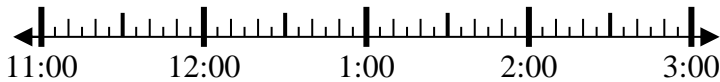


5. _____

6) Start: 11:45

Elapsed: 2 hrs & 15 mins

End: _____

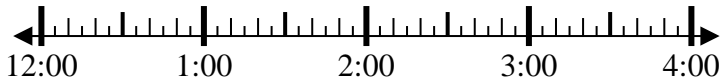


6. _____

7) Start: 12:20

Elapsed: 1 hr & 40 mins

End: _____

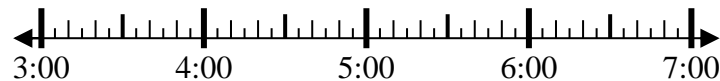


7. _____

8) Start: 3:35

Elapsed: 1 hr & 40 mins

End: _____



8. _____



Solve each problem.

1) Start: 9:35
 Elapsed: 2 hrs & 30 mins
 End: 12:05

2) Start: 12:50
 Elapsed: 1 hr & 45 mins
 End: 2:35

3) Start: 10:15
 Elapsed: 1 hr & 25 mins
 End: 11:40

4) Start: 6:25
 Elapsed: 1 hr & 45 mins
 End: 8:10

5) Start: 9:10
 Elapsed: 1 hr & 15 mins
 End: 10:25

6) Start: 11:45
 Elapsed: 2 hrs & 15 mins
 End: 2:00

7) Start: 12:20
 Elapsed: 1 hr & 40 mins
 End: 2:00

8) Start: 3:35
 Elapsed: 1 hr & 40 mins
 End: 5:15

Answers

1. 12:05

2. 2:35

3. 11:40

4. 8:10

5. 10:25

6. 2:00

7. 2:00

8. 5:15



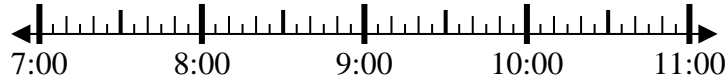
Solve each problem.

Answers

1) Start: 7:05

Elapsed: 2 hrs & 20 mins

End: _____

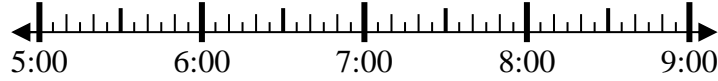


1. _____

2) Start: 5:25

Elapsed: 2 hrs & 20 mins

End: _____

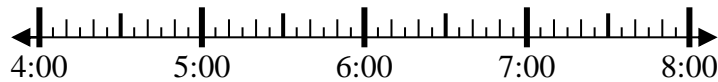


2. _____

3) Start: 4:15

Elapsed: 1 hr & 35 mins

End: _____



3. _____

4) Start: 12:05

Elapsed: 2 hrs & 40 mins

End: _____

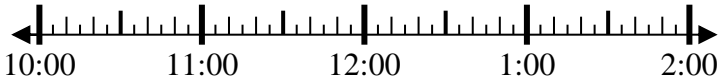


4. _____

5) Start: 10:05

Elapsed: 1 hr & 45 mins

End: _____

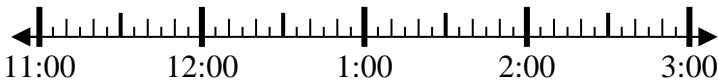


5. _____

6) Start: 11:45

Elapsed: 2 hrs & 15 mins

End: _____

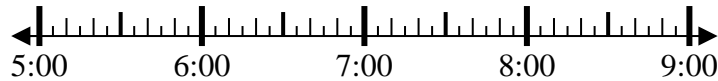


6. _____

7) Start: 5:25

Elapsed: 1 hr & 40 mins

End: _____

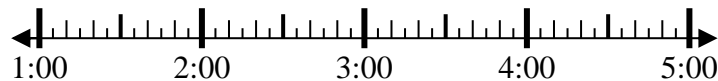


7. _____

8) Start: 1:25

Elapsed: 1 hr & 15 mins

End: _____



8. _____

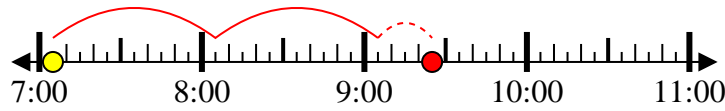


Solve each problem.

1) Start: 7:05

Elapsed: 2 hrs & 20 mins

End: 9:25



2) Start: 5:25

Elapsed: 2 hrs & 20 mins

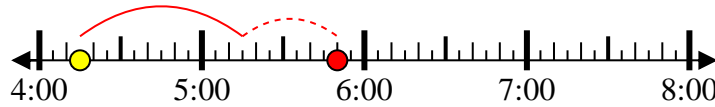
End: 7:45



3) Start: 4:15

Elapsed: 1 hr & 35 mins

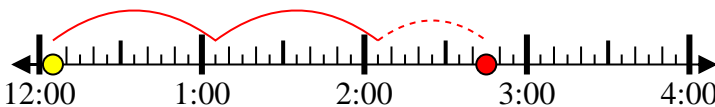
End: 5:50



4) Start: 12:05

Elapsed: 2 hrs & 40 mins

End: 2:45



5) Start: 10:05

Elapsed: 1 hr & 45 mins

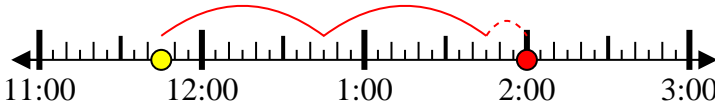
End: 11:50



6) Start: 11:45

Elapsed: 2 hrs & 15 mins

End: 2:00



7) Start: 5:25

Elapsed: 1 hr & 40 mins

End: 7:05



8) Start: 1:25

Elapsed: 1 hr & 15 mins

End: 2:40



Answers

1. 9:25

2. 7:45

3. 5:50

4. 2:45

5. 11:50

6. 2:00

7. 7:05

8. 2:40



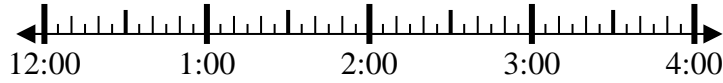
Solve each problem.

Answers

1) Start: 12:15

Elapsed: 1 hr & 35 mins

End: _____

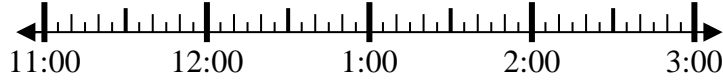


1. _____

2) Start: 11:30

Elapsed: 1 hr & 25 mins

End: _____

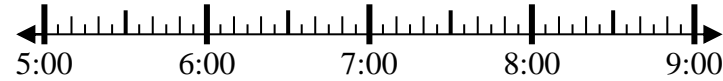


2. _____

3) Start: 5:10

Elapsed: 1 hr & 35 mins

End: _____



3. _____

4) Start: 11:00

Elapsed: 1 hr & 10 mins

End: _____



4. _____

5) Start: 12:30

Elapsed: 1 hr & 10 mins

End: _____



5. _____

6) Start: 12:40

Elapsed: 1 hr & 25 mins

End: _____

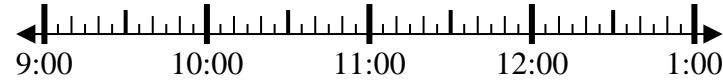


6. _____

7) Start: 9:40

Elapsed: 1 hr & 50 mins

End: _____



7. _____

8) Start: 1:35

Elapsed: 2 hrs & 45 mins

End: _____



8. _____



Solve each problem.

1) Start: 12:15

Elapsed: 1 hr & 35 mins

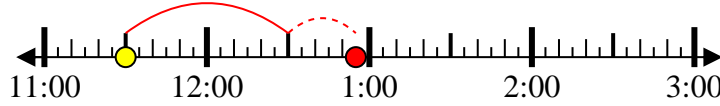
End: 1:50



2) Start: 11:30

Elapsed: 1 hr & 25 mins

End: 12:55



3) Start: 5:10

Elapsed: 1 hr & 35 mins

End: 6:45



4) Start: 11:00

Elapsed: 1 hr & 10 mins

End: 12:10



5) Start: 12:30

Elapsed: 1 hr & 10 mins

End: 1:40



6) Start: 12:40

Elapsed: 1 hr & 25 mins

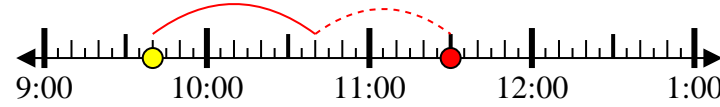
End: 2:05



7) Start: 9:40

Elapsed: 1 hr & 50 mins

End: 11:30



8) Start: 1:35

Elapsed: 2 hrs & 45 mins

End: 4:20



Answers

1. 1:50

2. 12:55

3. 6:45

4. 12:10

5. 1:40

6. 2:05

7. 11:30

8. 4:20



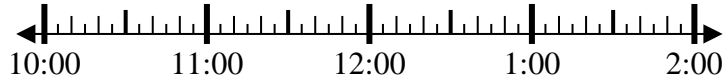
Solve each problem.

Answers

1) Start: 10:50

Elapsed: 2 hrs & 30 mins

End: _____

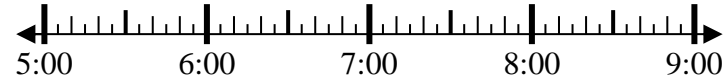


1. _____

2) Start: 5:10

Elapsed: 1 hr & 25 mins

End: _____

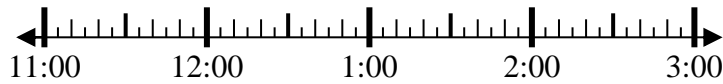


2. _____

3) Start: 11:40

Elapsed: 1 hr & 35 mins

End: _____



3. _____

4) Start: 4:20

Elapsed: 2 hrs & 15 mins

End: _____



4. _____

5) Start: 5:15

Elapsed: 2 hrs & 25 mins

End: _____

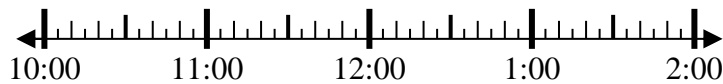


5. _____

6) Start: 10:20

Elapsed: 2 hrs & 35 mins

End: _____



6. _____

7) Start: 12:45

Elapsed: 2 hrs & 50 mins

End: _____

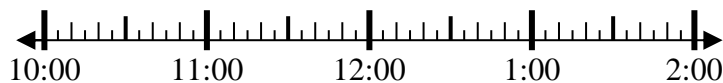


7. _____

8) Start: 10:40

Elapsed: 1 hr & 30 mins

End: _____



8. _____

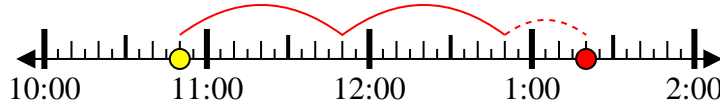


Solve each problem.

1) Start: 10:50

Elapsed: 2 hrs & 30 mins

End: 1:20



2) Start: 5:10

Elapsed: 1 hr & 25 mins

End: 6:35



3) Start: 11:40

Elapsed: 1 hr & 35 mins

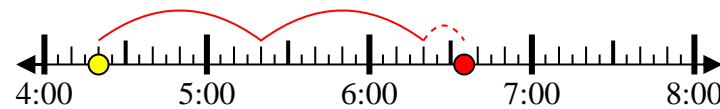
End: 1:15



4) Start: 4:20

Elapsed: 2 hrs & 15 mins

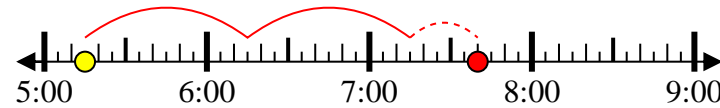
End: 6:35



5) Start: 5:15

Elapsed: 2 hrs & 25 mins

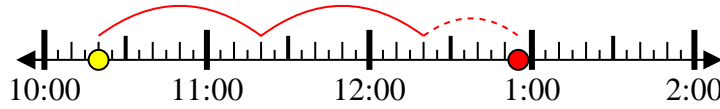
End: 7:40



6) Start: 10:20

Elapsed: 2 hrs & 35 mins

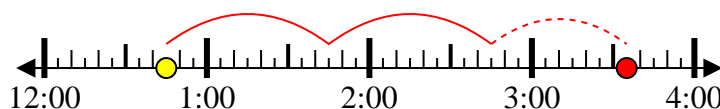
End: 12:55



7) Start: 12:45

Elapsed: 2 hrs & 50 mins

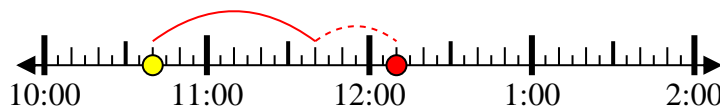
End: 3:35



8) Start: 10:40

Elapsed: 1 hr & 30 mins

End: 12:10



Answers

1. 1:20

2. 6:35

3. 1:15

4. 6:35

5. 7:40

6. 12:55

7. 3:35

8. 12:10



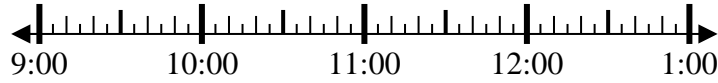
Solve each problem.

Answers

1) Start: 9:20

Elapsed: 1 hr & 25 mins

End: _____

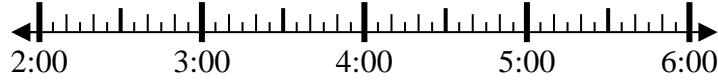


1. _____

2) Start: 2:00

Elapsed: 2 hrs & 55 mins

End: _____



2. _____

3) Start: 7:40

Elapsed: 2 hrs & 15 mins

End: _____



3. _____

4) Start: 7:15

Elapsed: 1 hr & 10 mins

End: _____

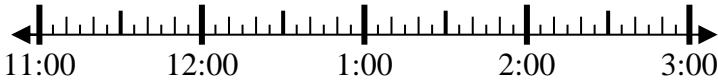


4. _____

5) Start: 11:15

Elapsed: 2 hrs & 25 mins

End: _____

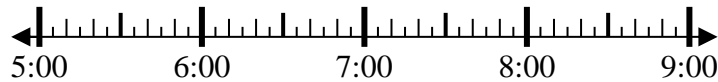


5. _____

6) Start: 5:30

Elapsed: 1 hr & 25 mins

End: _____

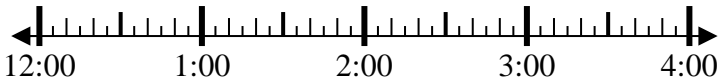


6. _____

7) Start: 12:00

Elapsed: 2 hrs & 40 mins

End: _____



7. _____

8) Start: 12:15

Elapsed: 1 hr & 20 mins

End: _____



8. _____



Solve each problem.

1) Start: 9:20

Elapsed: 1 hr & 25 mins

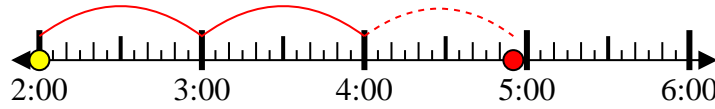
End: 10:45



2) Start: 2:00

Elapsed: 2 hrs & 55 mins

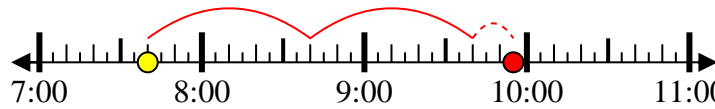
End: 4:55



3) Start: 7:40

Elapsed: 2 hrs & 15 mins

End: 9:55



4) Start: 7:15

Elapsed: 1 hr & 10 mins

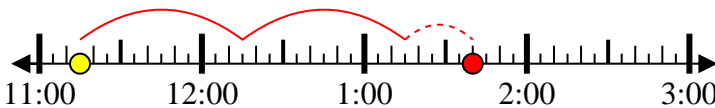
End: 8:25



5) Start: 11:15

Elapsed: 2 hrs & 25 mins

End: 1:40



6) Start: 5:30

Elapsed: 1 hr & 25 mins

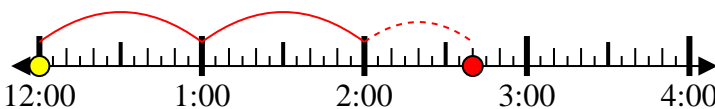
End: 6:55



7) Start: 12:00

Elapsed: 2 hrs & 40 mins

End: 2:40



8) Start: 12:15

Elapsed: 1 hr & 20 mins

End: 1:35



Answers

1. 10:45

2. 4:55

3. 9:55

4. 8:25

5. 1:40

6. 6:55

7. 2:40

8. 1:35