



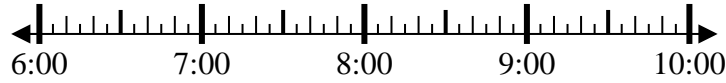
Solve each problem.

Answers

1) Start: 6:45

Elapsed: 1 hr & 10 mins

End: _____

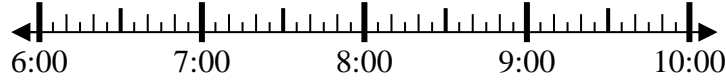


1. _____

2) Start: 6:25

Elapsed: 2 hrs & 40 mins

End: _____

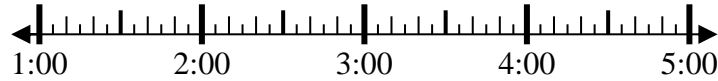


2. _____

3) Start: 1:10

Elapsed: 1 hr & 50 mins

End: _____

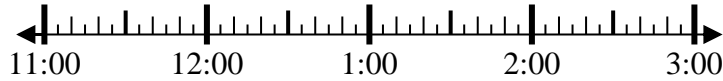


3. _____

4) Start: 11:15

Elapsed: 1 hr & 45 mins

End: _____

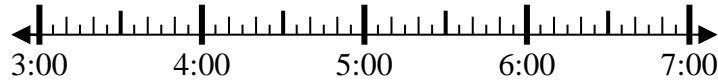


4. _____

5) Start: 3:25

Elapsed: 2 hrs & 10 mins

End: _____

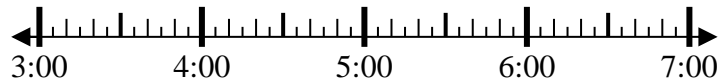


5. _____

6) Start: 3:20

Elapsed: 2 hrs & 35 mins

End: _____

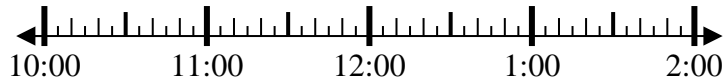


6. _____

7) Start: 10:35

Elapsed: 1 hr & 50 mins

End: _____



7. _____

8) Start: 10:00

Elapsed: 1 hr & 30 mins

End: _____



8. _____

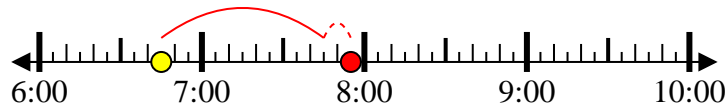


Solve each problem.

1) Start: 6:45

Elapsed: 1 hr & 10 mins

End: 7:55



2) Start: 6:25

Elapsed: 2 hrs & 40 mins

End: 9:05



3) Start: 1:10

Elapsed: 1 hr & 50 mins

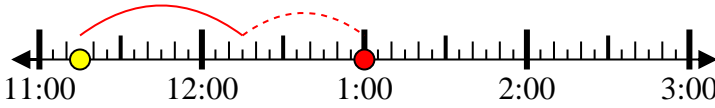
End: 3:00



4) Start: 11:15

Elapsed: 1 hr & 45 mins

End: 1:00



5) Start: 3:25

Elapsed: 2 hrs & 10 mins

End: 5:35



6) Start: 3:20

Elapsed: 2 hrs & 35 mins

End: 5:55



7) Start: 10:35

Elapsed: 1 hr & 50 mins

End: 12:25



8) Start: 10:00

Elapsed: 1 hr & 30 mins

End: 11:30



Answers

1. 7:55

2. 9:05

3. 3:00

4. 1:00

5. 5:35

6. 5:55

7. 12:25

8. 11:30