



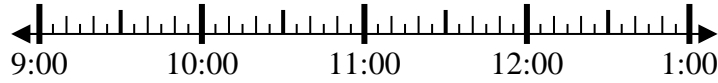
Solve each problem.

Answers

1) Start: 9:20

Elapsed: 1 hr & 25 mins

End: _____



1. _____

2) Start: 2:00

Elapsed: 2 hrs & 55 mins

End: _____



2. _____

3) Start: 7:40

Elapsed: 2 hrs & 15 mins

End: _____



3. _____

4) Start: 7:15

Elapsed: 1 hr & 10 mins

End: _____



4. _____

5) Start: 11:15

Elapsed: 2 hrs & 25 mins

End: _____

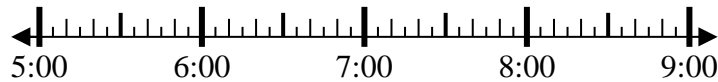


5. _____

6) Start: 5:30

Elapsed: 1 hr & 25 mins

End: _____

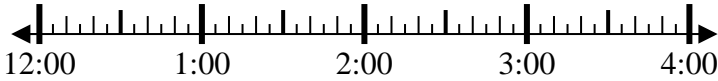


6. _____

7) Start: 12:00

Elapsed: 2 hrs & 40 mins

End: _____



7. _____

8) Start: 12:15

Elapsed: 1 hr & 20 mins

End: _____



8. _____



Solve each problem.

1) Start: 9:20

Elapsed: 1 hr & 25 mins

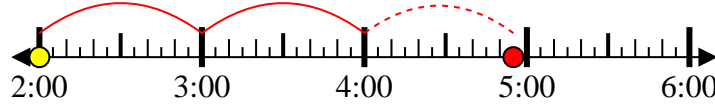
End: 10:45



2) Start: 2:00

Elapsed: 2 hrs & 55 mins

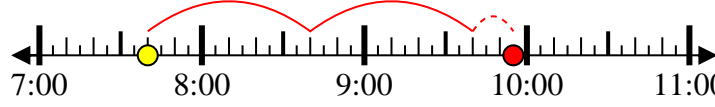
End: 4:55



3) Start: 7:40

Elapsed: 2 hrs & 15 mins

End: 9:55



4) Start: 7:15

Elapsed: 1 hr & 10 mins

End: 8:25



5) Start: 11:15

Elapsed: 2 hrs & 25 mins

End: 1:40



6) Start: 5:30

Elapsed: 1 hr & 25 mins

End: 6:55



7) Start: 12:00

Elapsed: 2 hrs & 40 mins

End: 2:40



8) Start: 12:15

Elapsed: 1 hr & 20 mins

End: 1:35



Answers

1. 10:45

2. 4:55

3. 9:55

4. 8:25

5. 1:40

6. 6:55

7. 2:40

8. 1:35