

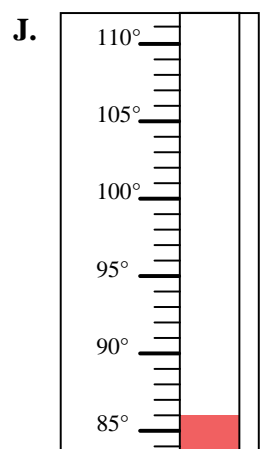
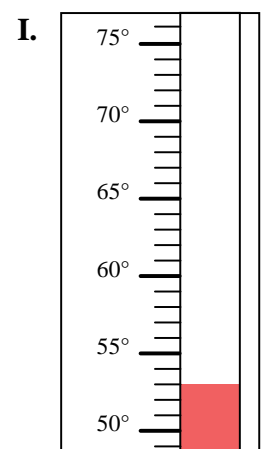
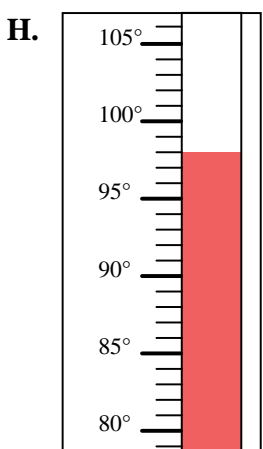
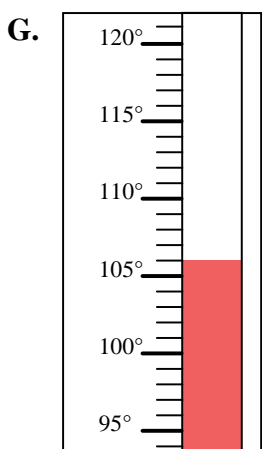
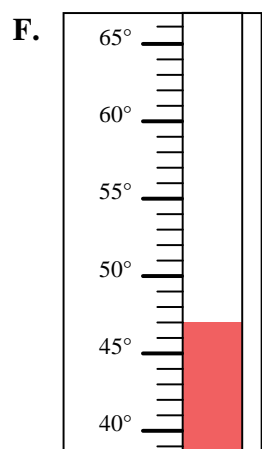
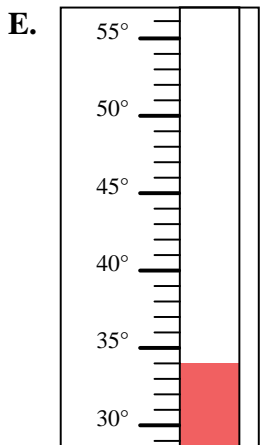
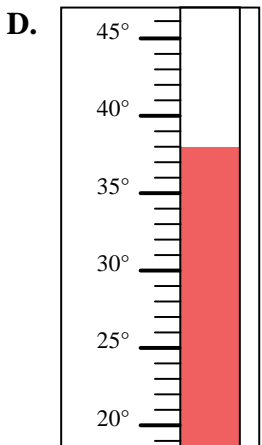
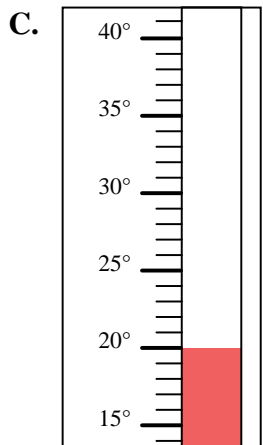
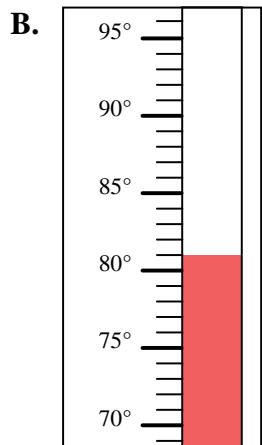
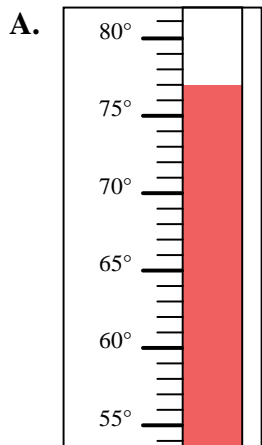


Determine which letter best answers each question.

**Answers**

- 1) Which thermometer best represents the temperature 53°?
- 2) Which thermometer best represents the temperature 98°?
- 3) Which thermometer best represents the temperature 77°?
- 4) Which thermometer best represents the temperature 106°?
- 5) Which thermometer best represents the temperature 47°?
- 6) Which thermometer best represents the temperature 86°?
- 7) Which thermometer best represents the temperature 34°?
- 8) Which thermometer best represents the temperature 81°?
- 9) Which thermometer best represents the temperature 20°?
- 10) Which thermometer best represents the temperature 38°?

1. \_\_\_\_\_
2. \_\_\_\_\_
3. \_\_\_\_\_
4. \_\_\_\_\_
5. \_\_\_\_\_
6. \_\_\_\_\_
7. \_\_\_\_\_
8. \_\_\_\_\_
9. \_\_\_\_\_
10. \_\_\_\_\_



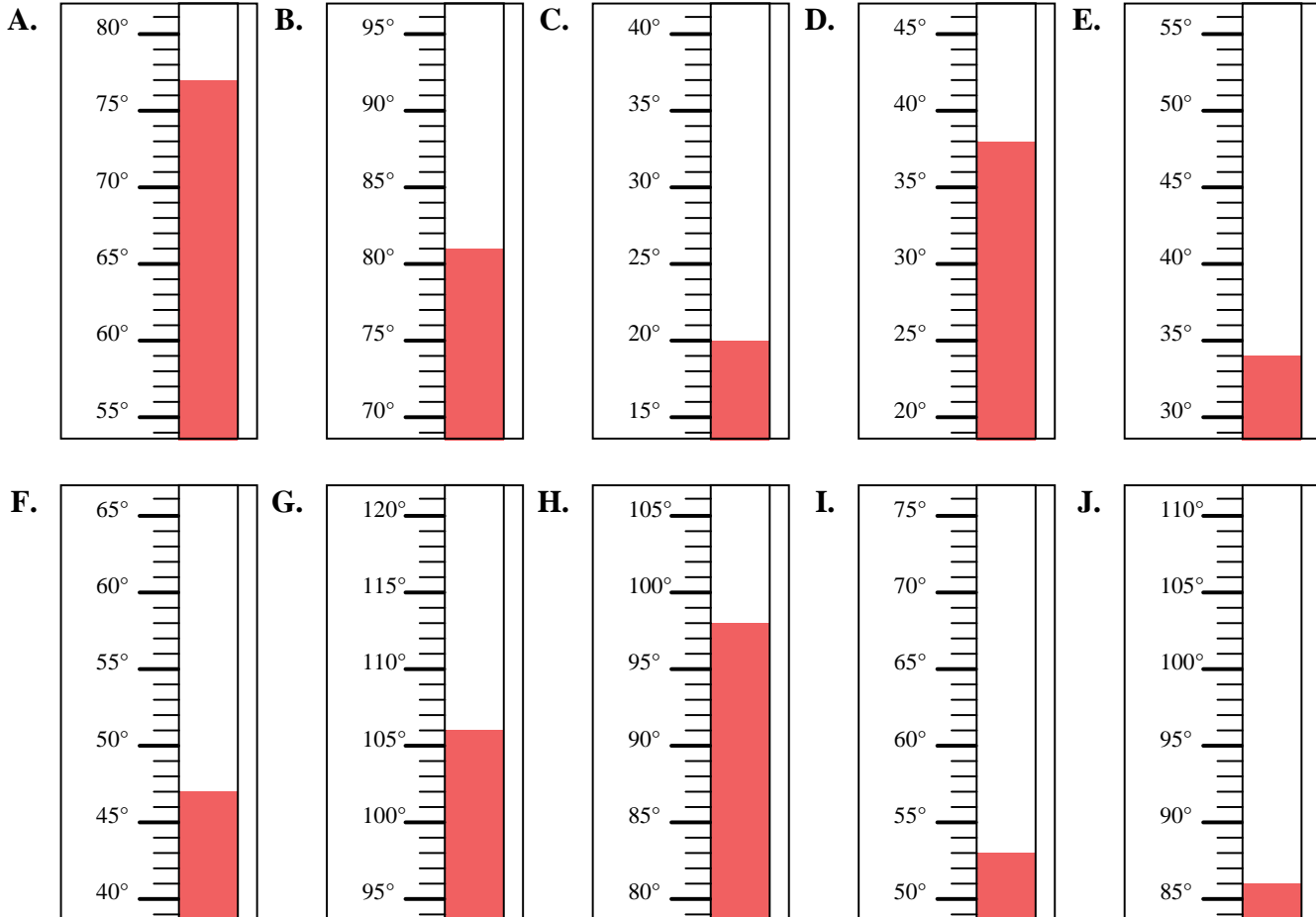


Determine which letter best answers each question.

**Answers**

- 1) Which thermometer best represents the temperature 53°?
- 2) Which thermometer best represents the temperature 98°?
- 3) Which thermometer best represents the temperature 77°?
- 4) Which thermometer best represents the temperature 106°?
- 5) Which thermometer best represents the temperature 47°?
- 6) Which thermometer best represents the temperature 86°?
- 7) Which thermometer best represents the temperature 34°?
- 8) Which thermometer best represents the temperature 81°?
- 9) Which thermometer best represents the temperature 20°?
- 10) Which thermometer best represents the temperature 38°?

1.     **I**
2.     **H**
3.     **A**
4.     **G**
5.     **F**
6.     **J**
7.     **E**
8.     **B**
9.     **C**
10.     **D**



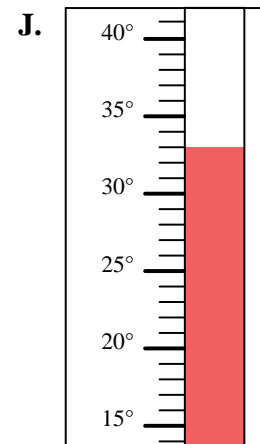
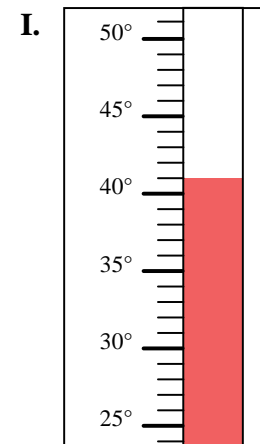
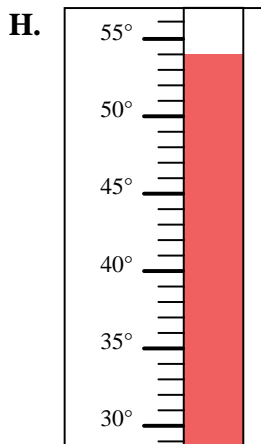
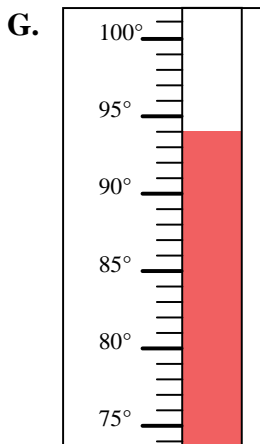
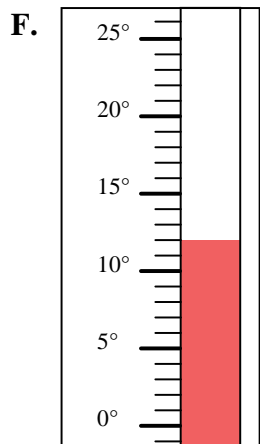
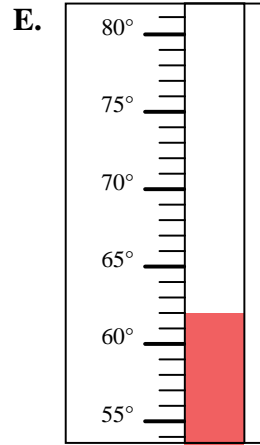
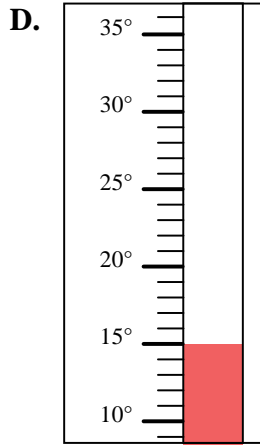
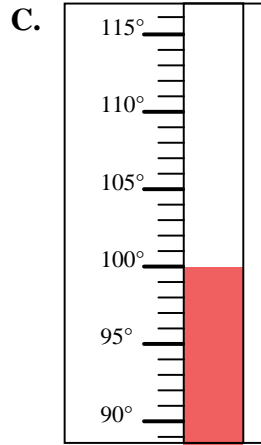
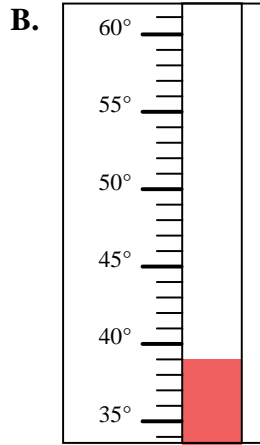
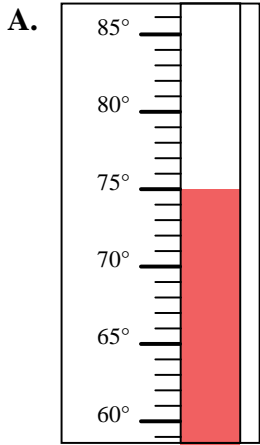


Determine which letter best answers each question.

**Answers**

- 1) Which thermometer best represents the temperature 39°?
- 2) Which thermometer best represents the temperature 12°?
- 3) Which thermometer best represents the temperature 75°?
- 4) Which thermometer best represents the temperature 100°?
- 5) Which thermometer best represents the temperature 33°?
- 6) Which thermometer best represents the temperature 15°?
- 7) Which thermometer best represents the temperature 94°?
- 8) Which thermometer best represents the temperature 54°?
- 9) Which thermometer best represents the temperature 62°?
- 10) Which thermometer best represents the temperature 41°?

1. \_\_\_\_\_
2. \_\_\_\_\_
3. \_\_\_\_\_
4. \_\_\_\_\_
5. \_\_\_\_\_
6. \_\_\_\_\_
7. \_\_\_\_\_
8. \_\_\_\_\_
9. \_\_\_\_\_
10. \_\_\_\_\_



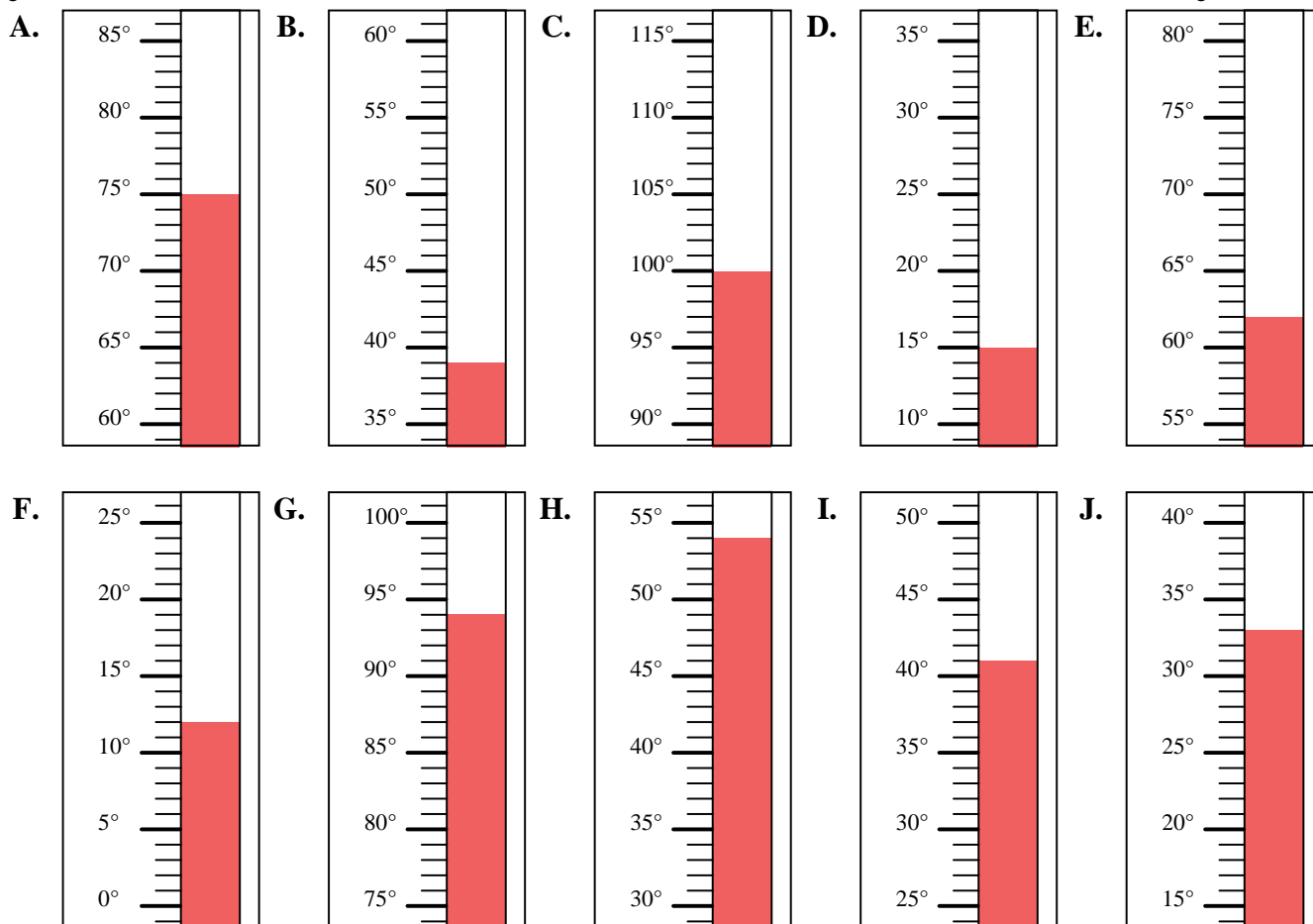


Determine which letter best answers each question.

**Answers**

- 1) Which thermometer best represents the temperature 39°?
- 2) Which thermometer best represents the temperature 12°?
- 3) Which thermometer best represents the temperature 75°?
- 4) Which thermometer best represents the temperature 100°?
- 5) Which thermometer best represents the temperature 33°?
- 6) Which thermometer best represents the temperature 15°?
- 7) Which thermometer best represents the temperature 94°?
- 8) Which thermometer best represents the temperature 54°?
- 9) Which thermometer best represents the temperature 62°?
- 10) Which thermometer best represents the temperature 41°?

1. **B**
2. **F**
3. **A**
4. **C**
5. **J**
6. **D**
7. **G**
8. **H**
9. **E**
10. **I**



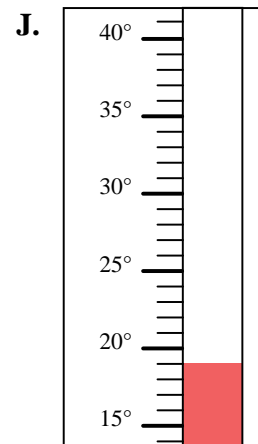
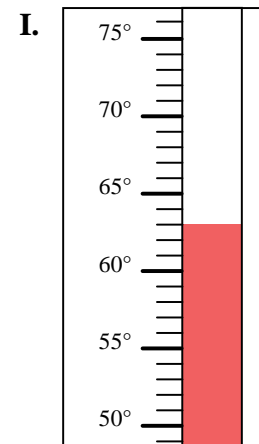
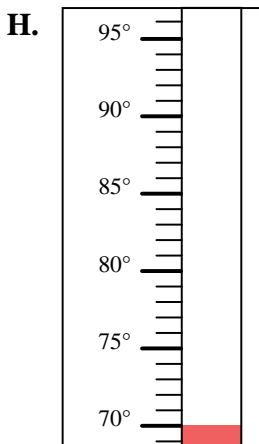
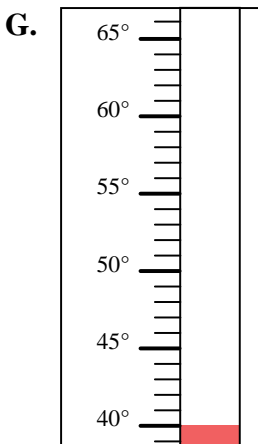
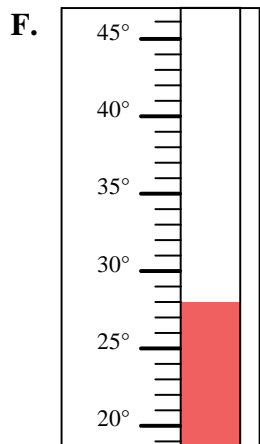
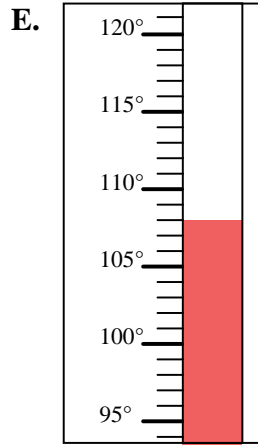
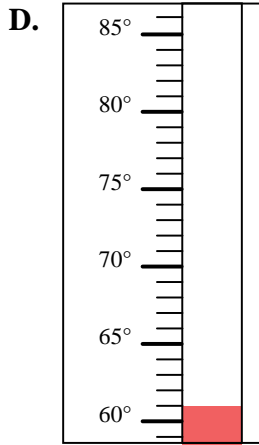
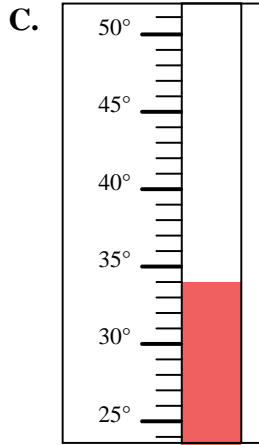
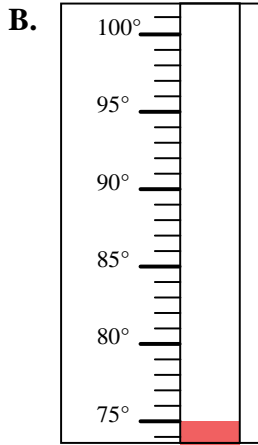
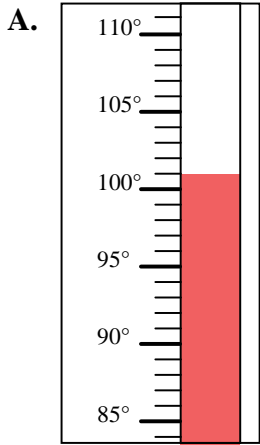


Determine which letter best answers each question.

**Answers**

- 1) Which thermometer best represents the temperature 101°?
- 2) Which thermometer best represents the temperature 34°?
- 3) Which thermometer best represents the temperature 63°?
- 4) Which thermometer best represents the temperature 108°?
- 5) Which thermometer best represents the temperature 61°?
- 6) Which thermometer best represents the temperature 75°?
- 7) Which thermometer best represents the temperature 40°?
- 8) Which thermometer best represents the temperature 28°?
- 9) Which thermometer best represents the temperature 70°?
- 10) Which thermometer best represents the temperature 19°?

1. \_\_\_\_\_
2. \_\_\_\_\_
3. \_\_\_\_\_
4. \_\_\_\_\_
5. \_\_\_\_\_
6. \_\_\_\_\_
7. \_\_\_\_\_
8. \_\_\_\_\_
9. \_\_\_\_\_
10. \_\_\_\_\_



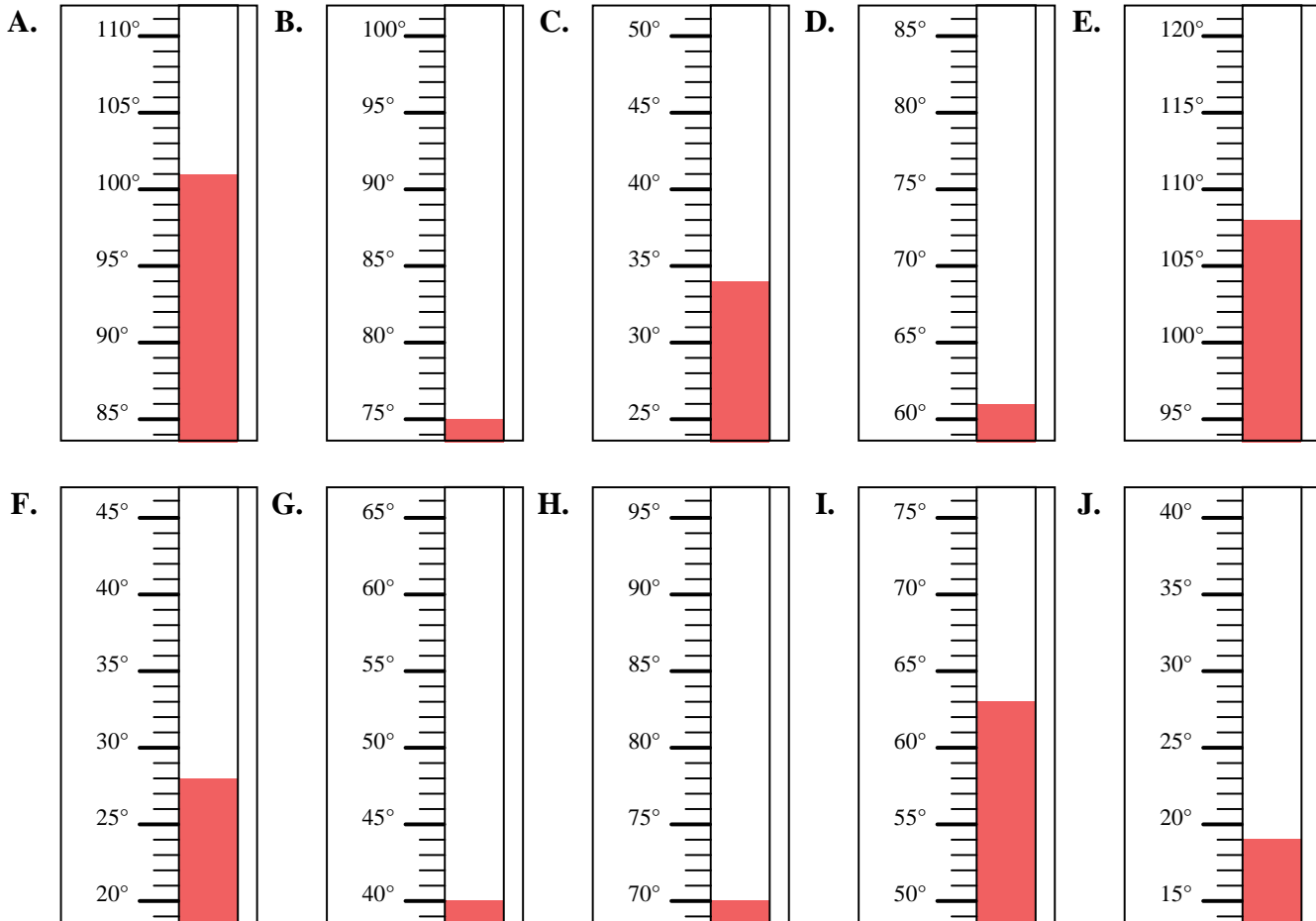


Determine which letter best answers each question.

- 1) Which thermometer best represents the temperature 101°?
- 2) Which thermometer best represents the temperature 34°?
- 3) Which thermometer best represents the temperature 63°?
- 4) Which thermometer best represents the temperature 108°?
- 5) Which thermometer best represents the temperature 61°?
- 6) Which thermometer best represents the temperature 75°?
- 7) Which thermometer best represents the temperature 40°?
- 8) Which thermometer best represents the temperature 28°?
- 9) Which thermometer best represents the temperature 70°?
- 10) Which thermometer best represents the temperature 19°?

**Answers**

1.     **A**
2.     **C**
3.     **I**
4.     **E**
5.     **D**
6.     **B**
7.     **G**
8.     **F**
9.     **H**
10.     **J**



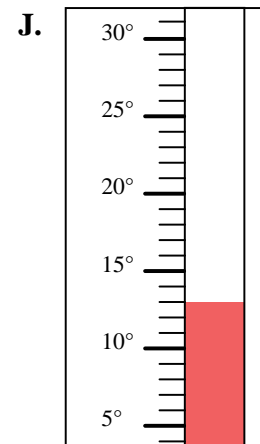
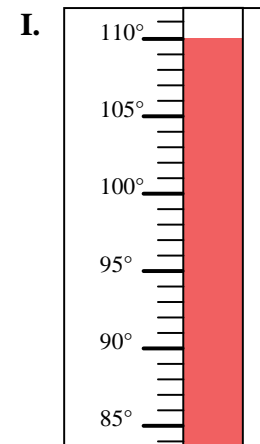
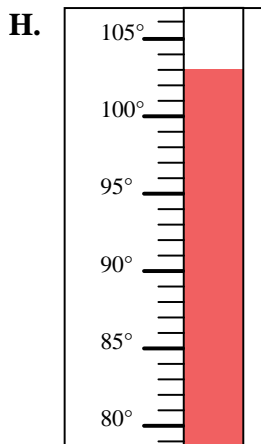
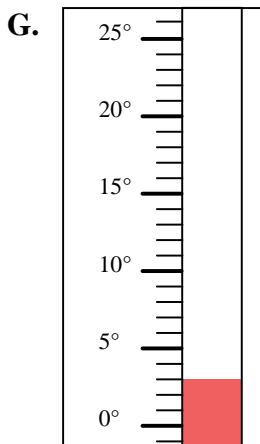
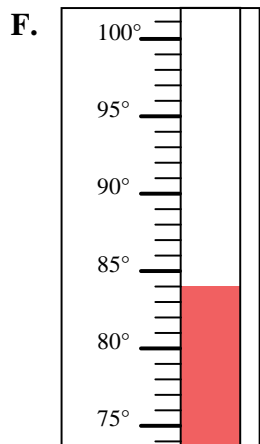
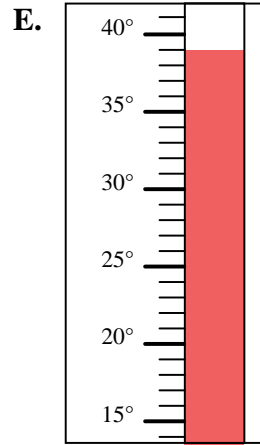
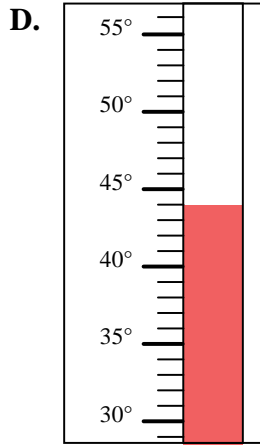
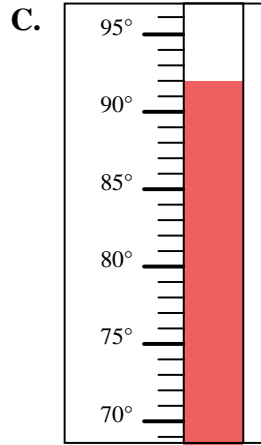
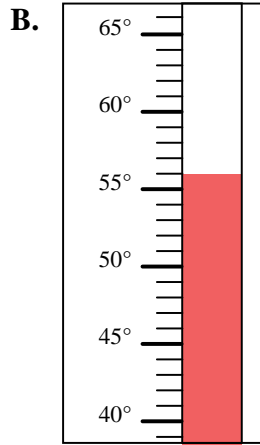
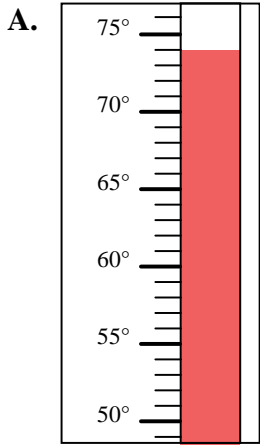


Determine which letter best answers each question.

**Answers**

- 1) Which thermometer best represents the temperature 92°?
- 2) Which thermometer best represents the temperature 84°?
- 3) Which thermometer best represents the temperature 56°?
- 4) Which thermometer best represents the temperature 110°?
- 5) Which thermometer best represents the temperature 13°?
- 6) Which thermometer best represents the temperature 39°?
- 7) Which thermometer best represents the temperature 3°?
- 8) Which thermometer best represents the temperature 44°?
- 9) Which thermometer best represents the temperature 74°?
- 10) Which thermometer best represents the temperature 103°?

1. \_\_\_\_\_
2. \_\_\_\_\_
3. \_\_\_\_\_
4. \_\_\_\_\_
5. \_\_\_\_\_
6. \_\_\_\_\_
7. \_\_\_\_\_
8. \_\_\_\_\_
9. \_\_\_\_\_
10. \_\_\_\_\_



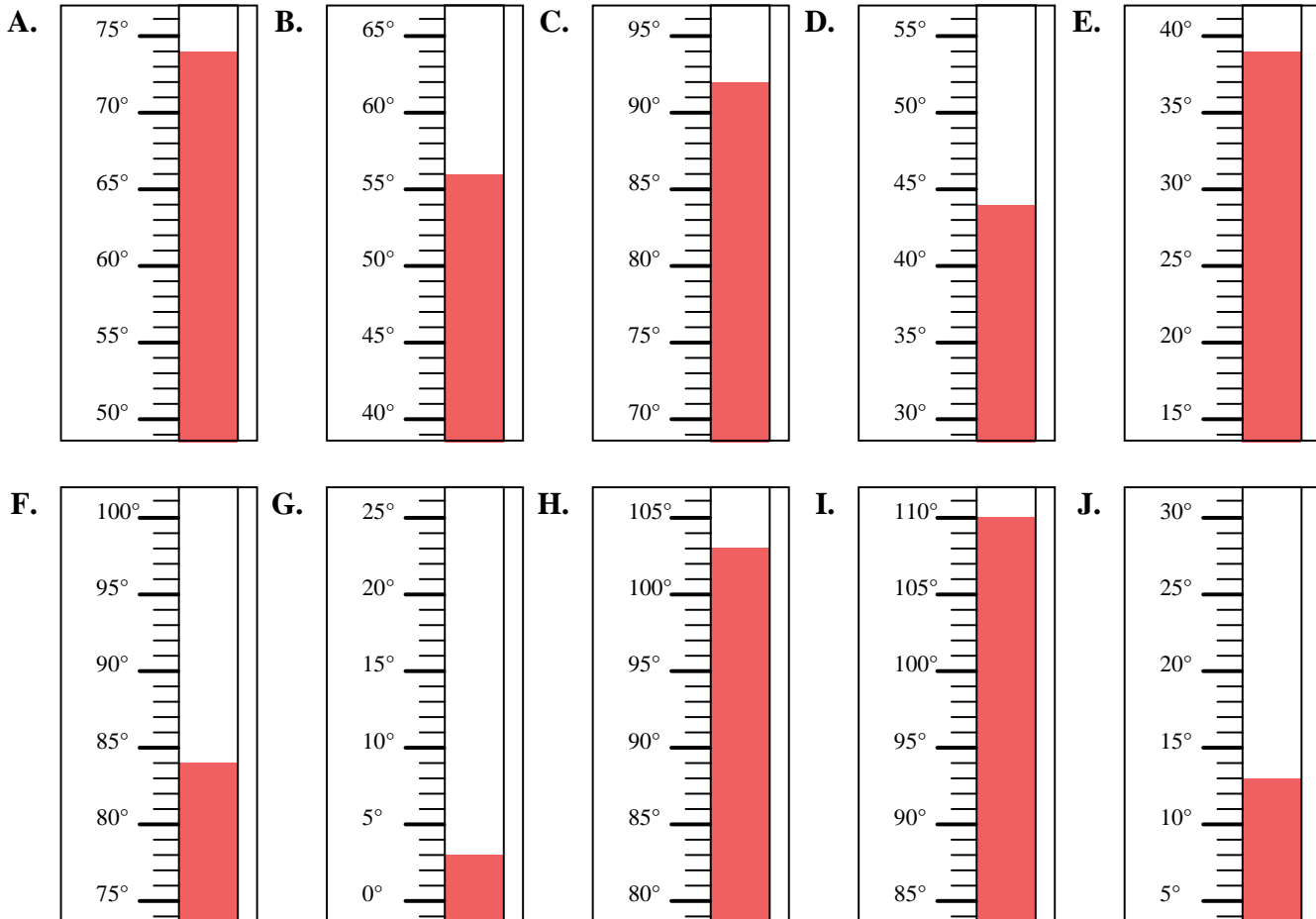


Determine which letter best answers each question.

- 1) Which thermometer best represents the temperature  $92^{\circ}$ ?
- 2) Which thermometer best represents the temperature  $84^{\circ}$ ?
- 3) Which thermometer best represents the temperature  $56^{\circ}$ ?
- 4) Which thermometer best represents the temperature  $110^{\circ}$ ?
- 5) Which thermometer best represents the temperature  $13^{\circ}$ ?
- 6) Which thermometer best represents the temperature  $39^{\circ}$ ?
- 7) Which thermometer best represents the temperature  $3^{\circ}$ ?
- 8) Which thermometer best represents the temperature  $44^{\circ}$ ?
- 9) Which thermometer best represents the temperature  $74^{\circ}$ ?
- 10) Which thermometer best represents the temperature  $103^{\circ}$ ?

**Answers**

1.     **C**
2.     **F**
3.     **B**
4.     **I**
5.     **J**
6.     **E**
7.     **G**
8.     **D**
9.     **A**
10.     **H**





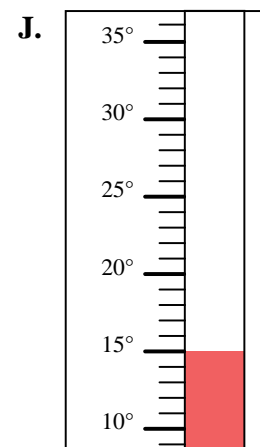
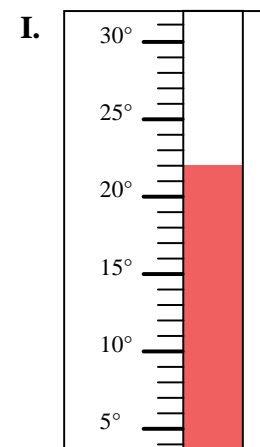
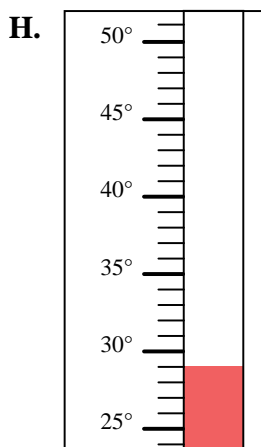
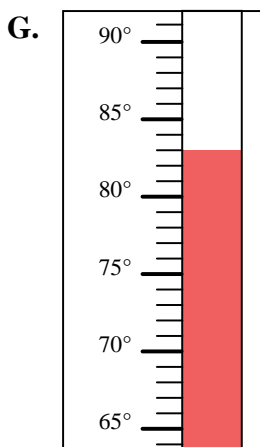
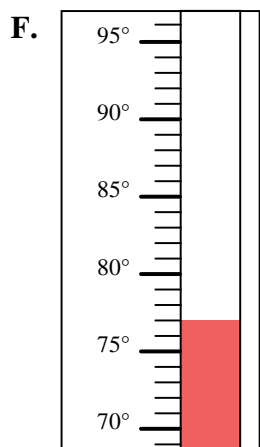
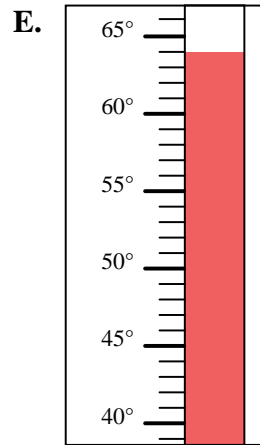
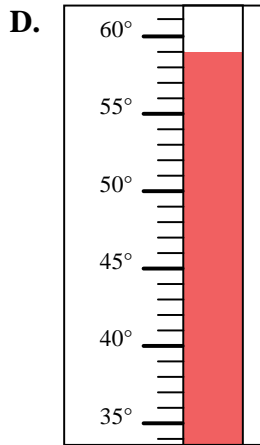
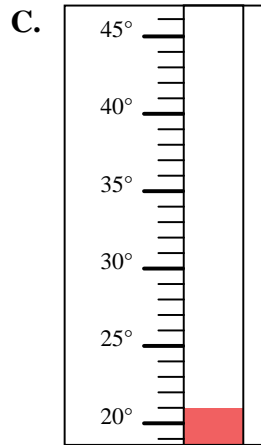
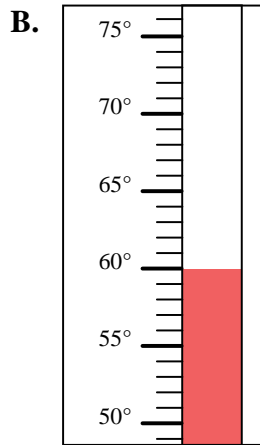
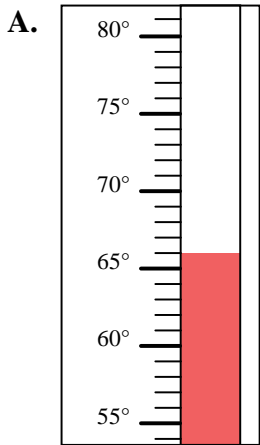


Determine which letter best answers each question.

**Answers**

- 1) Which thermometer best represents the temperature 22°?
- 2) Which thermometer best represents the temperature 66°?
- 3) Which thermometer best represents the temperature 15°?
- 4) Which thermometer best represents the temperature 83°?
- 5) Which thermometer best represents the temperature 21°?
- 6) Which thermometer best represents the temperature 59°?
- 7) Which thermometer best represents the temperature 60°?
- 8) Which thermometer best represents the temperature 77°?
- 9) Which thermometer best represents the temperature 64°?
- 10) Which thermometer best represents the temperature 29°?

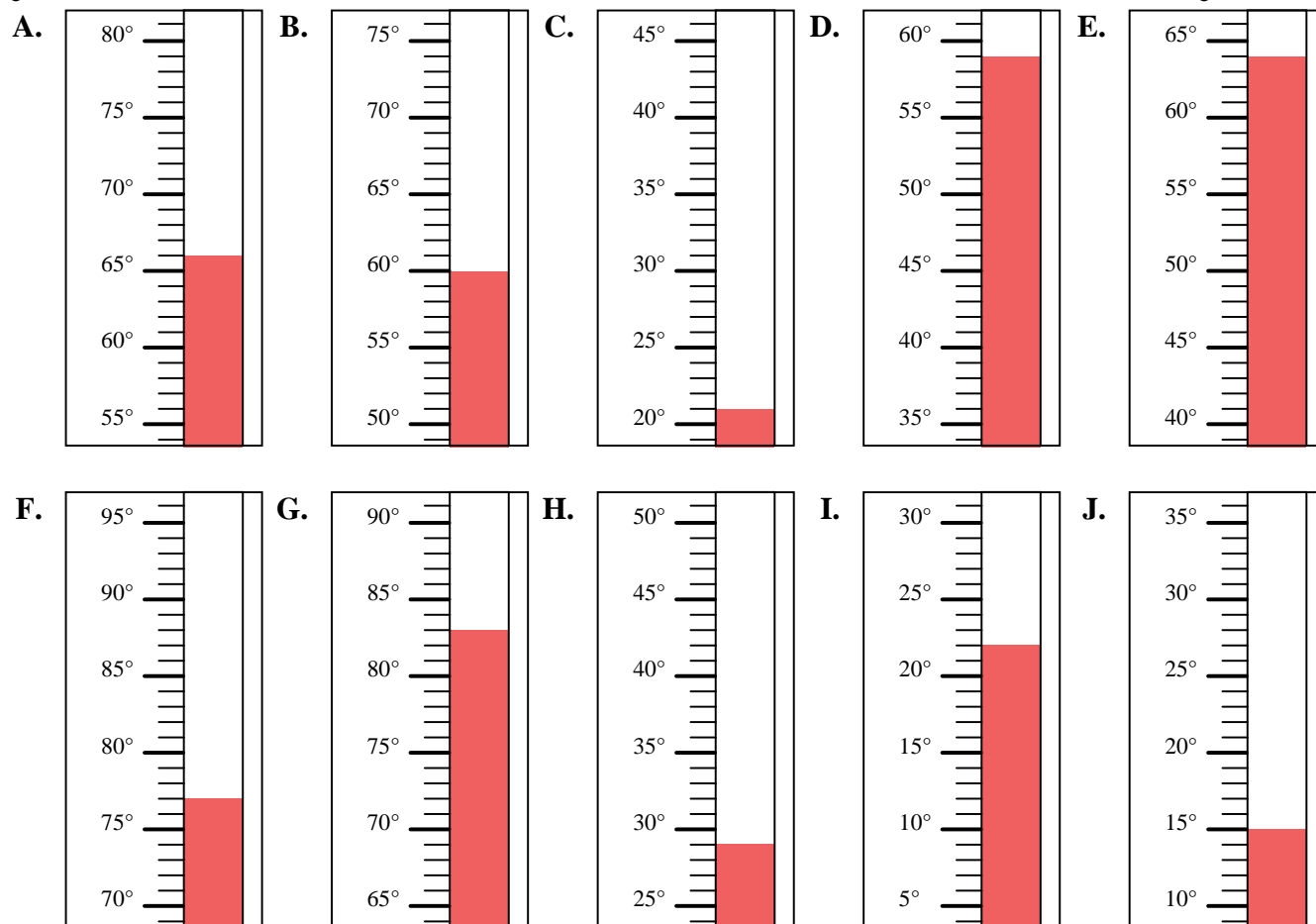
1. \_\_\_\_\_
2. \_\_\_\_\_
3. \_\_\_\_\_
4. \_\_\_\_\_
5. \_\_\_\_\_
6. \_\_\_\_\_
7. \_\_\_\_\_
8. \_\_\_\_\_
9. \_\_\_\_\_
10. \_\_\_\_\_





Determine which letter best answers each question.

- 1) Which thermometer best represents the temperature 22°?
- 2) Which thermometer best represents the temperature 66°?
- 3) Which thermometer best represents the temperature 15°?
- 4) Which thermometer best represents the temperature 83°?
- 5) Which thermometer best represents the temperature 21°?
- 6) Which thermometer best represents the temperature 59°?
- 7) Which thermometer best represents the temperature 60°?
- 8) Which thermometer best represents the temperature 77°?
- 9) Which thermometer best represents the temperature 64°?
- 10) Which thermometer best represents the temperature 29°?



**Answers**

1. **I**
2. **A**
3. **J**
4. **G**
5. **C**
6. **D**
7. **B**
8. **F**
9. **E**
10. **H**

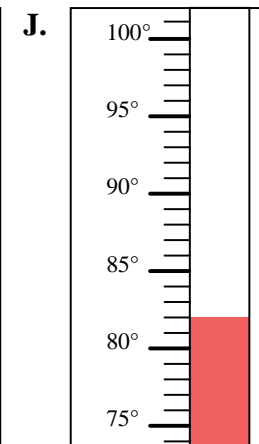
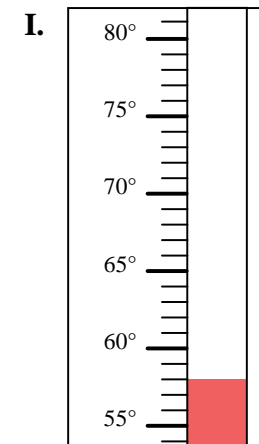
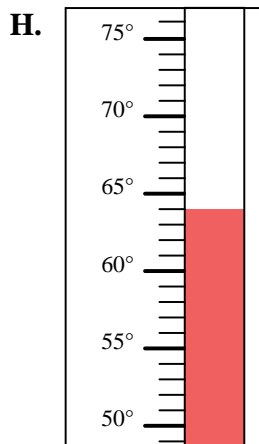
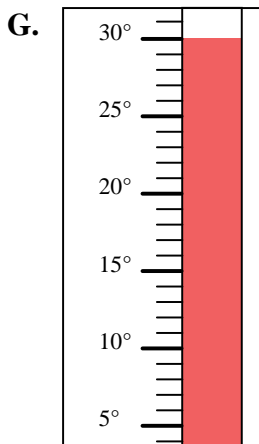
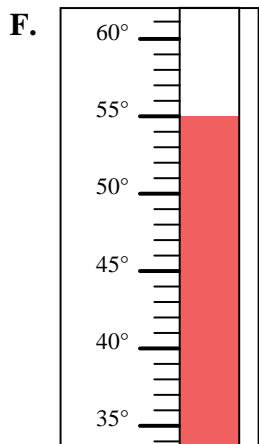
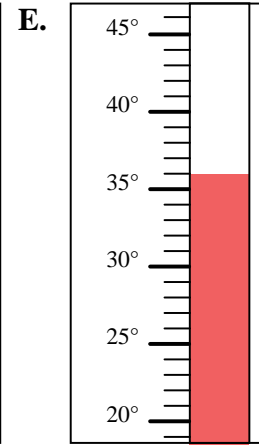
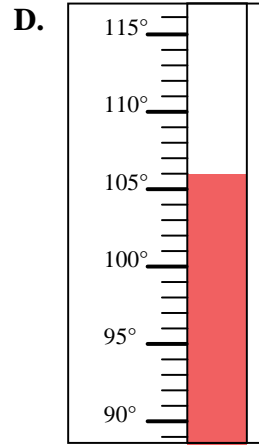
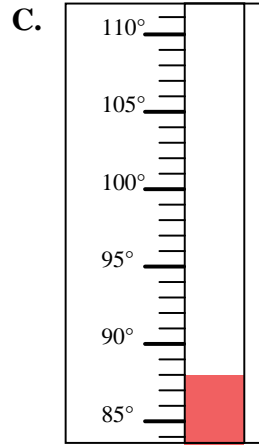
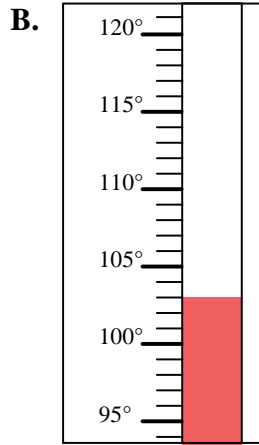
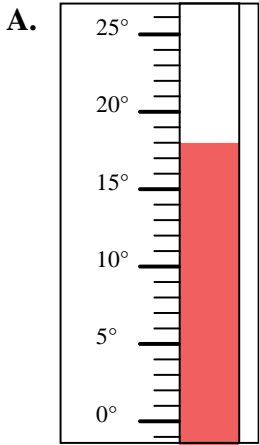


Determine which letter best answers each question.

**Answers**

- 1) Which thermometer best represents the temperature 82°?
- 2) Which thermometer best represents the temperature 64°?
- 3) Which thermometer best represents the temperature 58°?
- 4) Which thermometer best represents the temperature 106°?
- 5) Which thermometer best represents the temperature 88°?
- 6) Which thermometer best represents the temperature 36°?
- 7) Which thermometer best represents the temperature 18°?
- 8) Which thermometer best represents the temperature 30°?
- 9) Which thermometer best represents the temperature 55°?
- 10) Which thermometer best represents the temperature 103°?

1. \_\_\_\_\_
2. \_\_\_\_\_
3. \_\_\_\_\_
4. \_\_\_\_\_
5. \_\_\_\_\_
6. \_\_\_\_\_
7. \_\_\_\_\_
8. \_\_\_\_\_
9. \_\_\_\_\_
10. \_\_\_\_\_



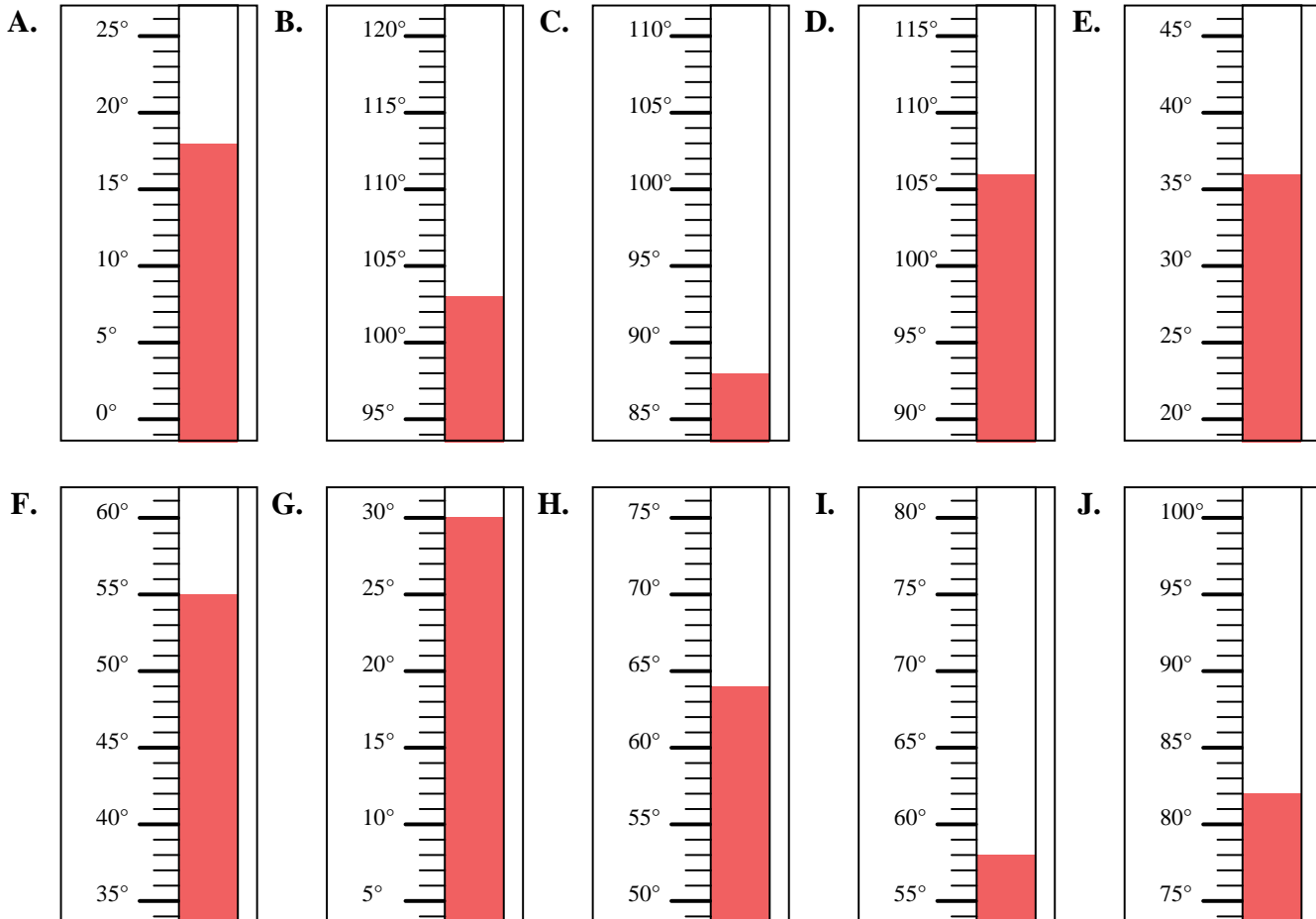


Determine which letter best answers each question.

**Answers**

- 1) Which thermometer best represents the temperature 82°?
- 2) Which thermometer best represents the temperature 64°?
- 3) Which thermometer best represents the temperature 58°?
- 4) Which thermometer best represents the temperature 106°?
- 5) Which thermometer best represents the temperature 88°?
- 6) Which thermometer best represents the temperature 36°?
- 7) Which thermometer best represents the temperature 18°?
- 8) Which thermometer best represents the temperature 30°?
- 9) Which thermometer best represents the temperature 55°?
- 10) Which thermometer best represents the temperature 103°?

1. **J**
2. **H**
3. **I**
4. **D**
5. **C**
6. **E**
7. **A**
8. **G**
9. **F**
10. **B**



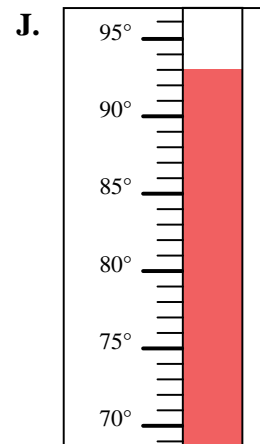
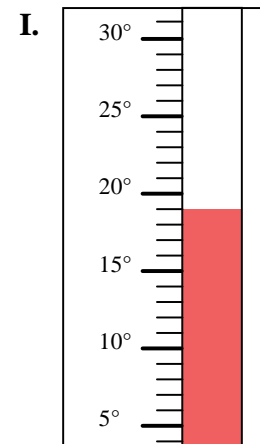
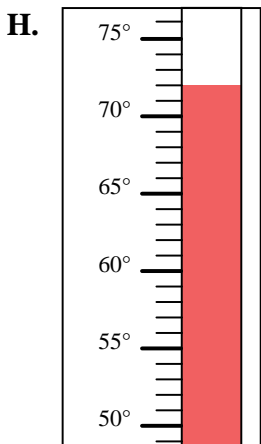
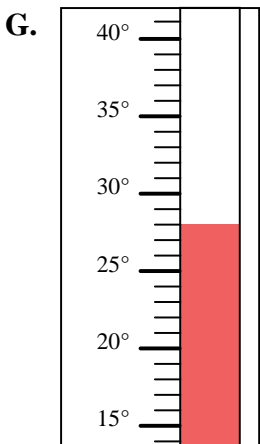
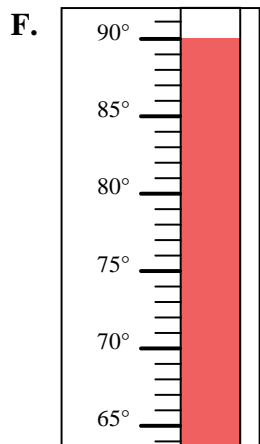
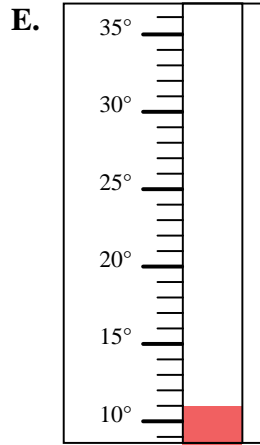
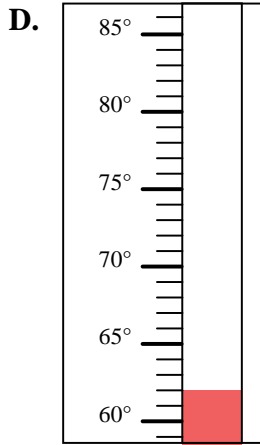
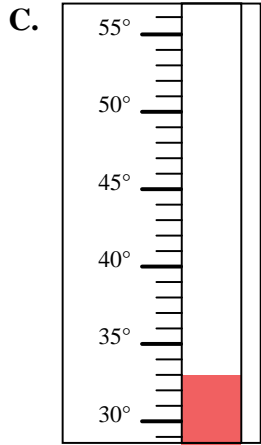
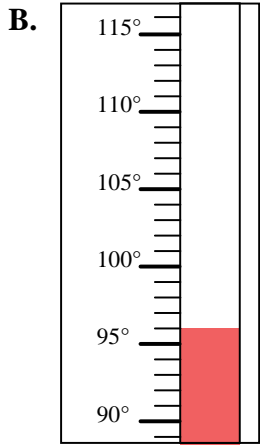
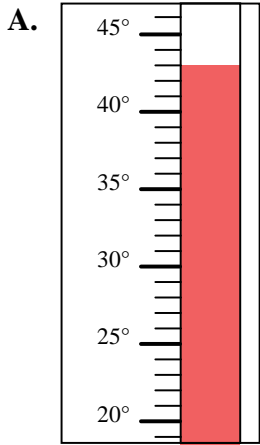


Determine which letter best answers each question.

**Answers**

- 1) Which thermometer best represents the temperature 62°?
- 2) Which thermometer best represents the temperature 43°?
- 3) Which thermometer best represents the temperature 72°?
- 4) Which thermometer best represents the temperature 33°?
- 5) Which thermometer best represents the temperature 11°?
- 6) Which thermometer best represents the temperature 93°?
- 7) Which thermometer best represents the temperature 96°?
- 8) Which thermometer best represents the temperature 19°?
- 9) Which thermometer best represents the temperature 28°?
- 10) Which thermometer best represents the temperature 90°?

1. \_\_\_\_\_
2. \_\_\_\_\_
3. \_\_\_\_\_
4. \_\_\_\_\_
5. \_\_\_\_\_
6. \_\_\_\_\_
7. \_\_\_\_\_
8. \_\_\_\_\_
9. \_\_\_\_\_
10. \_\_\_\_\_



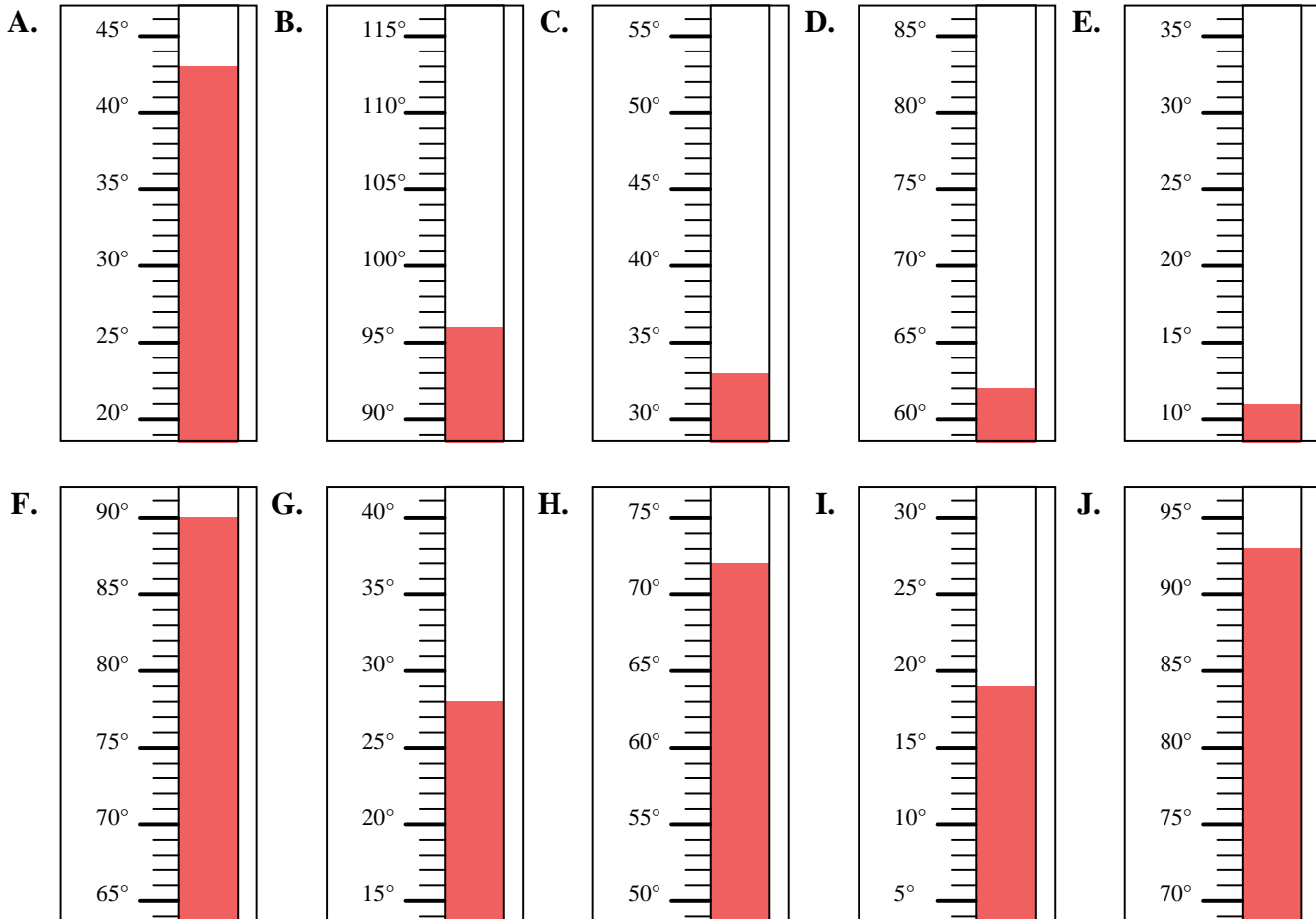


Determine which letter best answers each question.

**Answers**

- 1) Which thermometer best represents the temperature 62°?
- 2) Which thermometer best represents the temperature 43°?
- 3) Which thermometer best represents the temperature 72°?
- 4) Which thermometer best represents the temperature 33°?
- 5) Which thermometer best represents the temperature 11°?
- 6) Which thermometer best represents the temperature 93°?
- 7) Which thermometer best represents the temperature 96°?
- 8) Which thermometer best represents the temperature 19°?
- 9) Which thermometer best represents the temperature 28°?
- 10) Which thermometer best represents the temperature 90°?

1.     **D**
2.     **A**
3.     **H**
4.     **C**
5.     **E**
6.     **J**
7.     **B**
8.     **I**
9.     **G**
10.     **F**



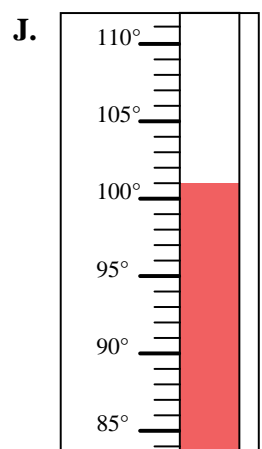
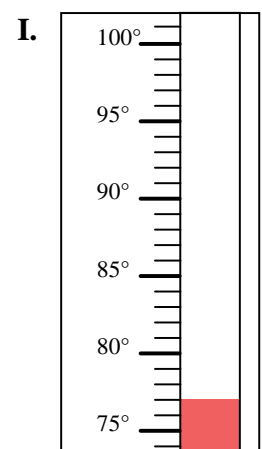
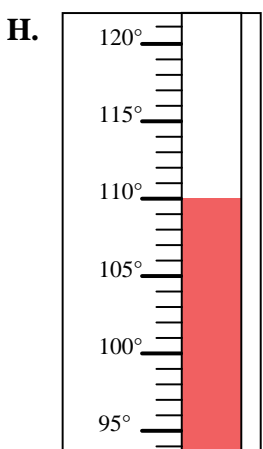
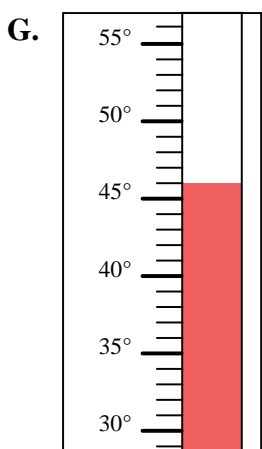
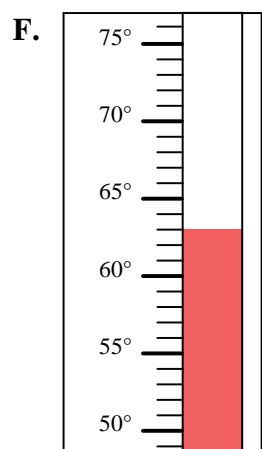
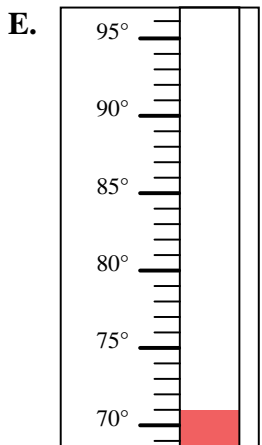
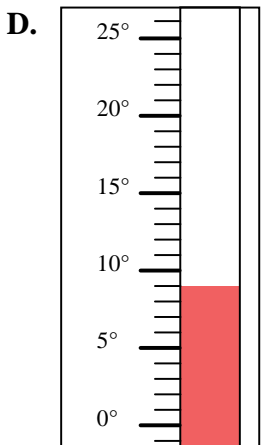
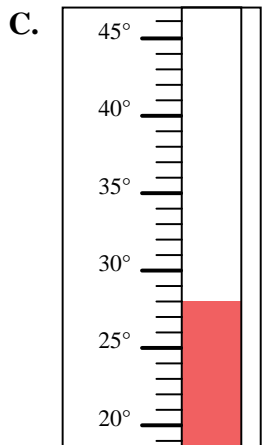
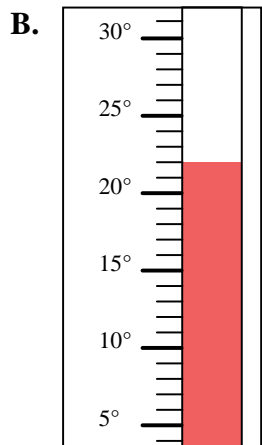
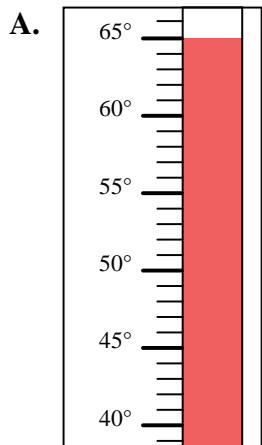


Determine which letter best answers each question.

**Answers**

- 1) Which thermometer best represents the temperature 63°?
- 2) Which thermometer best represents the temperature 46°?
- 3) Which thermometer best represents the temperature 65°?
- 4) Which thermometer best represents the temperature 110°?
- 5) Which thermometer best represents the temperature 77°?
- 6) Which thermometer best represents the temperature 22°?
- 7) Which thermometer best represents the temperature 71°?
- 8) Which thermometer best represents the temperature 28°?
- 9) Which thermometer best represents the temperature 9°?
- 10) Which thermometer best represents the temperature 101°?

1. \_\_\_\_\_
2. \_\_\_\_\_
3. \_\_\_\_\_
4. \_\_\_\_\_
5. \_\_\_\_\_
6. \_\_\_\_\_
7. \_\_\_\_\_
8. \_\_\_\_\_
9. \_\_\_\_\_
10. \_\_\_\_\_



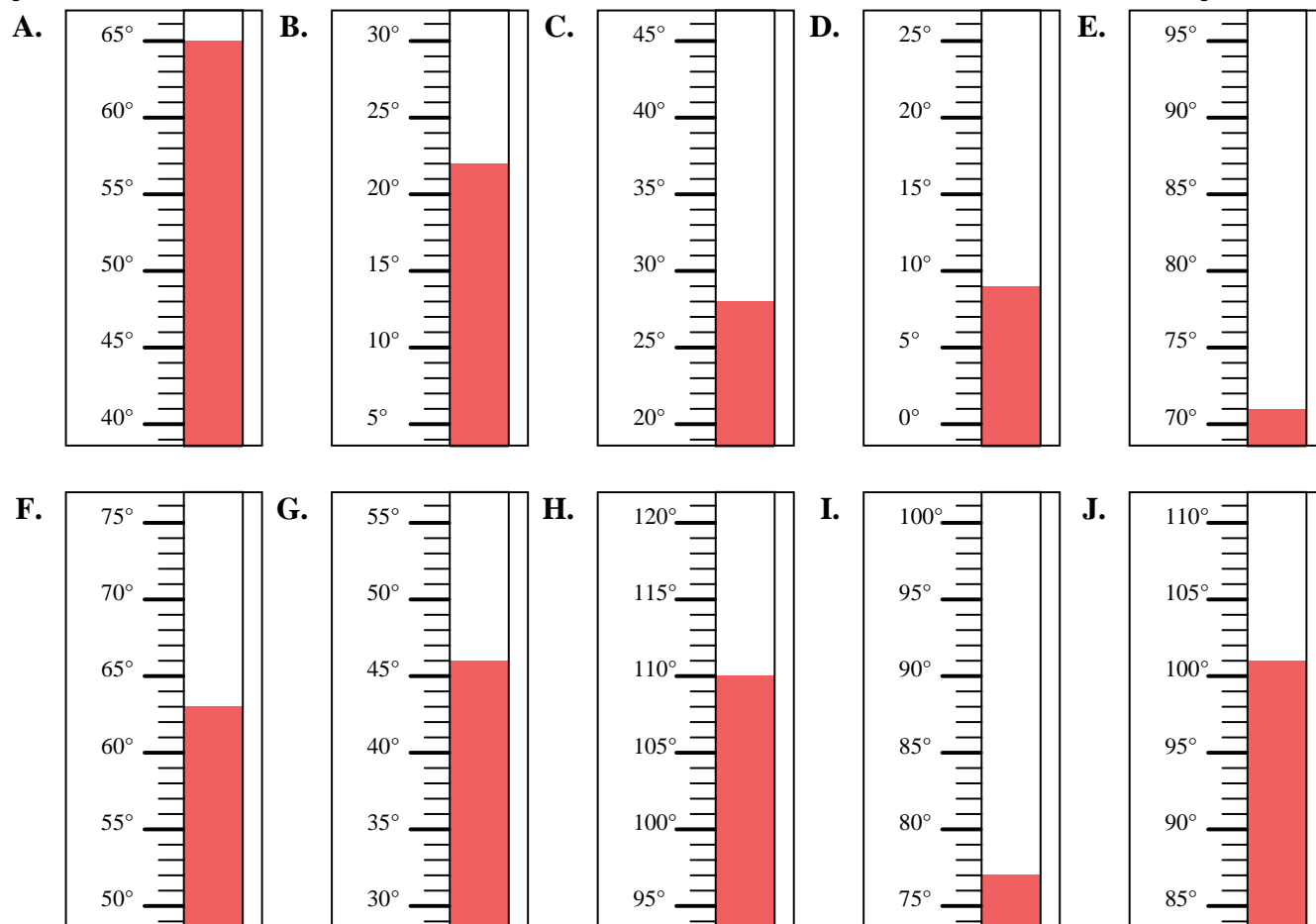


Determine which letter best answers each question.

**Answers**

- 1) Which thermometer best represents the temperature 63°?
- 2) Which thermometer best represents the temperature 46°?
- 3) Which thermometer best represents the temperature 65°?
- 4) Which thermometer best represents the temperature 110°?
- 5) Which thermometer best represents the temperature 77°?
- 6) Which thermometer best represents the temperature 22°?
- 7) Which thermometer best represents the temperature 71°?
- 8) Which thermometer best represents the temperature 28°?
- 9) Which thermometer best represents the temperature 9°?
- 10) Which thermometer best represents the temperature 101°?

1.     **F**
2.     **G**
3.     **A**
4.     **H**
5.     **I**
6.     **B**
7.     **E**
8.     **C**
9.     **D**
10.     **J**





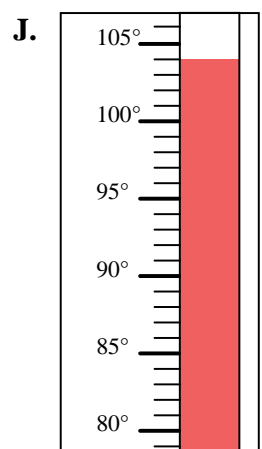
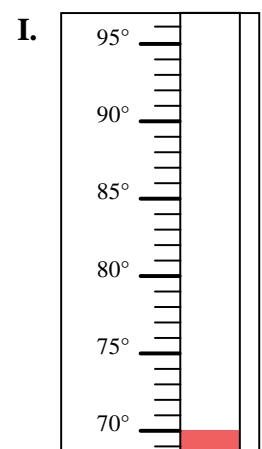
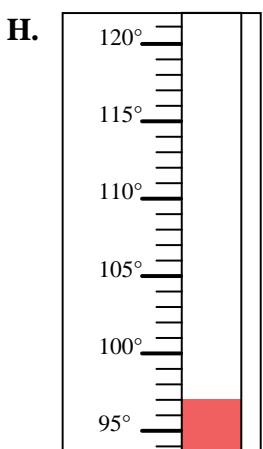
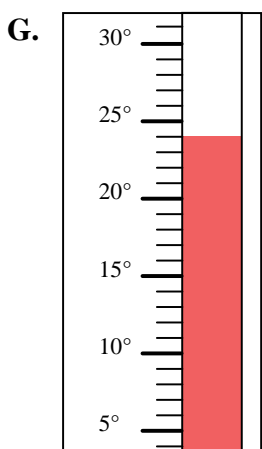
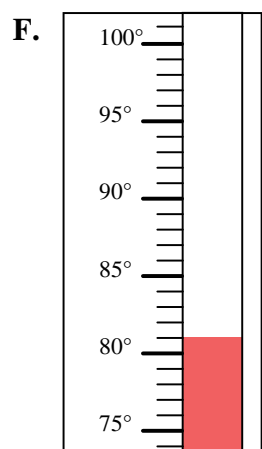
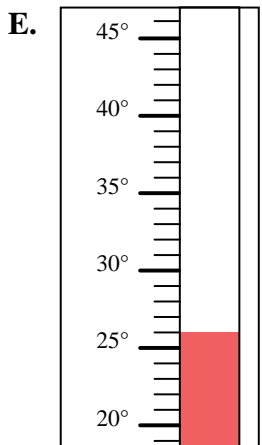
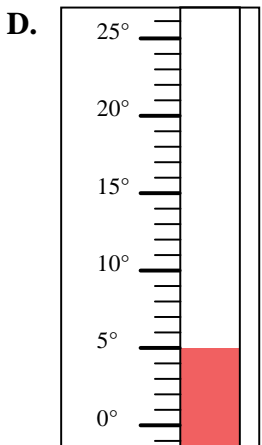
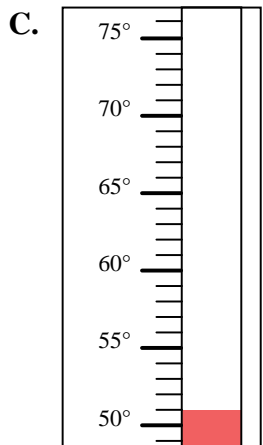
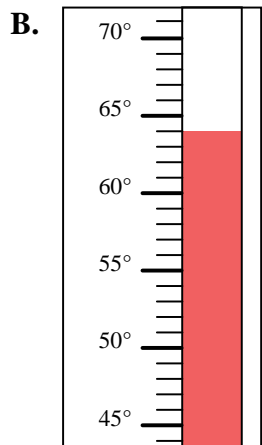
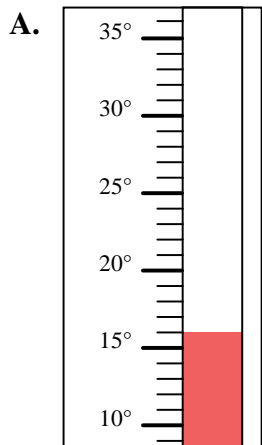


Determine which letter best answers each question.

**Answers**

- 1) Which thermometer best represents the temperature 70°?
- 2) Which thermometer best represents the temperature 51°?
- 3) Which thermometer best represents the temperature 64°?
- 4) Which thermometer best represents the temperature 26°?
- 5) Which thermometer best represents the temperature 104°?
- 6) Which thermometer best represents the temperature 97°?
- 7) Which thermometer best represents the temperature 5°?
- 8) Which thermometer best represents the temperature 81°?
- 9) Which thermometer best represents the temperature 16°?
- 10) Which thermometer best represents the temperature 24°?

1. \_\_\_\_\_
2. \_\_\_\_\_
3. \_\_\_\_\_
4. \_\_\_\_\_
5. \_\_\_\_\_
6. \_\_\_\_\_
7. \_\_\_\_\_
8. \_\_\_\_\_
9. \_\_\_\_\_
10. \_\_\_\_\_



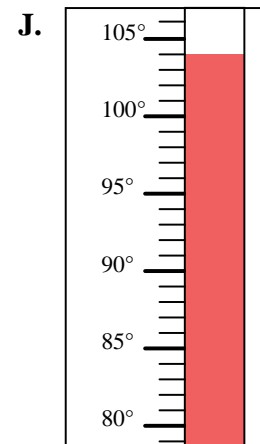
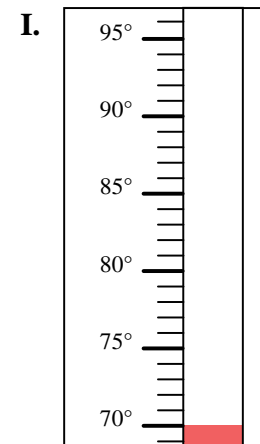
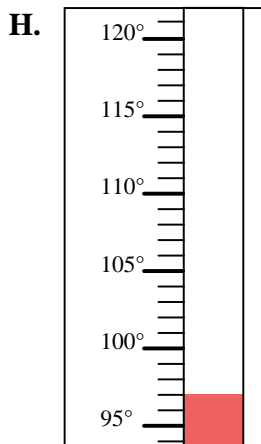
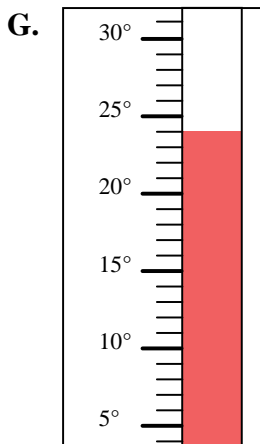
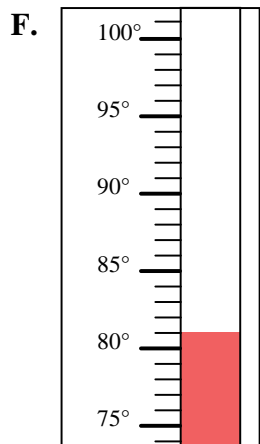
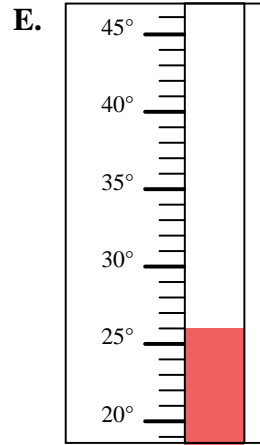
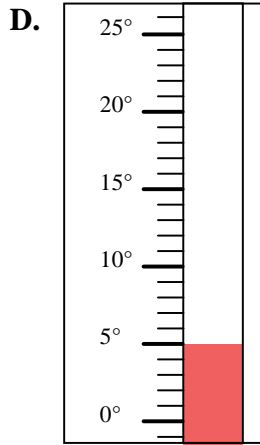
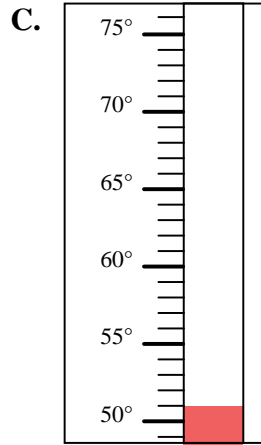
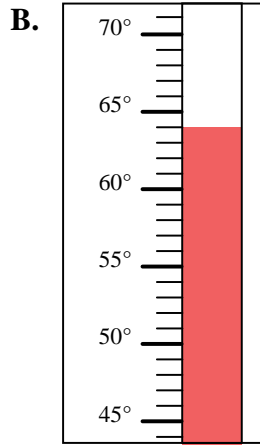
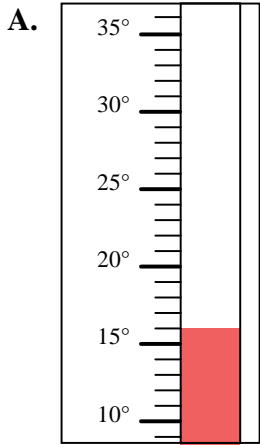


Determine which letter best answers each question.

- 1) Which thermometer best represents the temperature 70°?
- 2) Which thermometer best represents the temperature 51°?
- 3) Which thermometer best represents the temperature 64°?
- 4) Which thermometer best represents the temperature 26°?
- 5) Which thermometer best represents the temperature 104°?
- 6) Which thermometer best represents the temperature 97°?
- 7) Which thermometer best represents the temperature 5°?
- 8) Which thermometer best represents the temperature 81°?
- 9) Which thermometer best represents the temperature 16°?
- 10) Which thermometer best represents the temperature 24°?

**Answers**

1.     **I**
2.     **C**
3.     **B**
4.     **E**
5.     **J**
6.     **H**
7.     **D**
8.     **F**
9.     **A**
10.     **G**



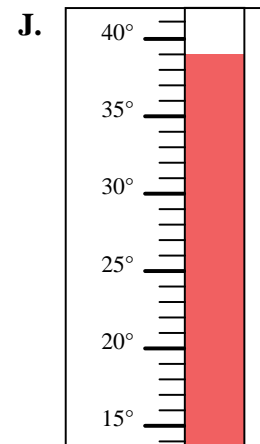
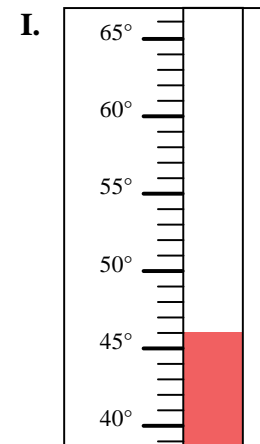
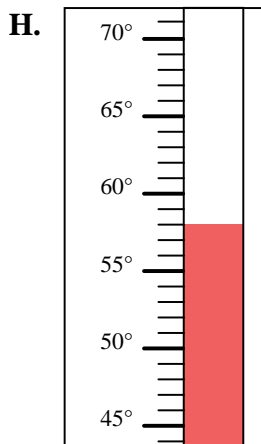
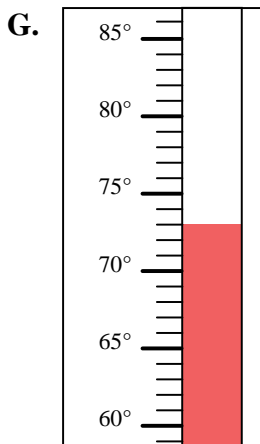
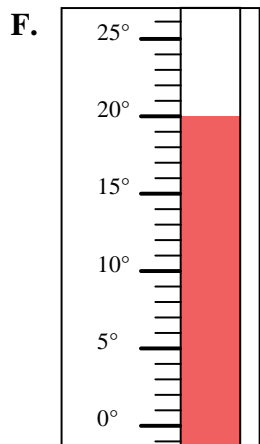
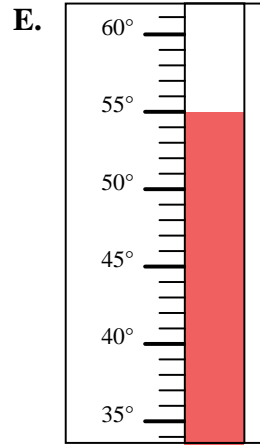
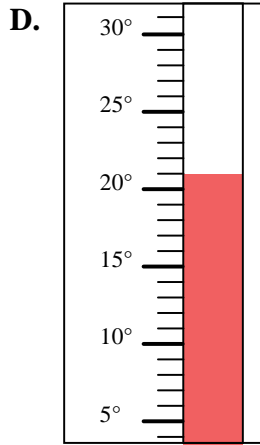
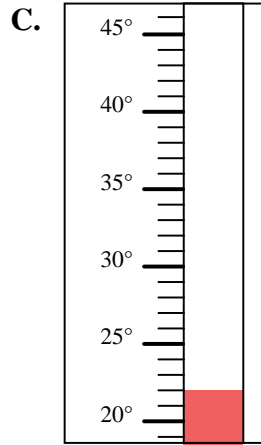
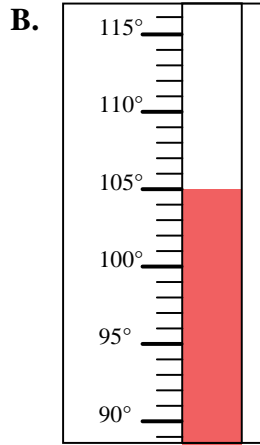
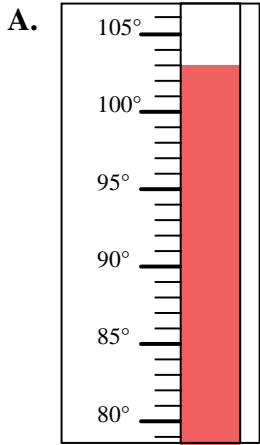


Determine which letter best answers each question.

**Answers**

- 1) Which thermometer best represents the temperature 103°?
- 2) Which thermometer best represents the temperature 73°?
- 3) Which thermometer best represents the temperature 22°?
- 4) Which thermometer best represents the temperature 21°?
- 5) Which thermometer best represents the temperature 46°?
- 6) Which thermometer best represents the temperature 20°?
- 7) Which thermometer best represents the temperature 39°?
- 8) Which thermometer best represents the temperature 55°?
- 9) Which thermometer best represents the temperature 105°?
- 10) Which thermometer best represents the temperature 58°?

1. \_\_\_\_\_
2. \_\_\_\_\_
3. \_\_\_\_\_
4. \_\_\_\_\_
5. \_\_\_\_\_
6. \_\_\_\_\_
7. \_\_\_\_\_
8. \_\_\_\_\_
9. \_\_\_\_\_
10. \_\_\_\_\_





Determine which letter best answers each question.

- 1) Which thermometer best represents the temperature 103°?
- 2) Which thermometer best represents the temperature 73°?
- 3) Which thermometer best represents the temperature 22°?
- 4) Which thermometer best represents the temperature 21°?
- 5) Which thermometer best represents the temperature 46°?
- 6) Which thermometer best represents the temperature 20°?
- 7) Which thermometer best represents the temperature 39°?
- 8) Which thermometer best represents the temperature 55°?
- 9) Which thermometer best represents the temperature 105°?
- 10) Which thermometer best represents the temperature 58°?

**Answers**

1.     **A**
2.     **G**
3.     **C**
4.     **D**
5.     **I**
6.     **F**
7.     **J**
8.     **E**
9.     **B**
10.     **H**

