

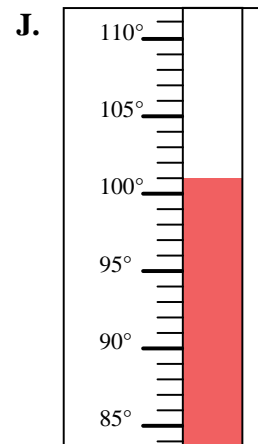
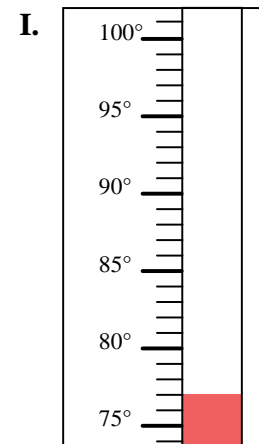
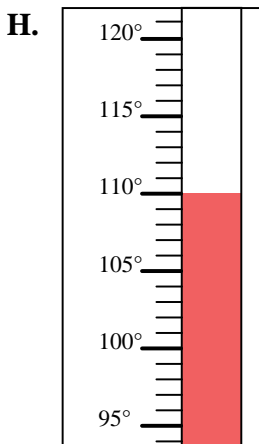
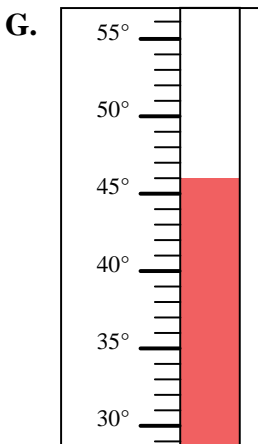
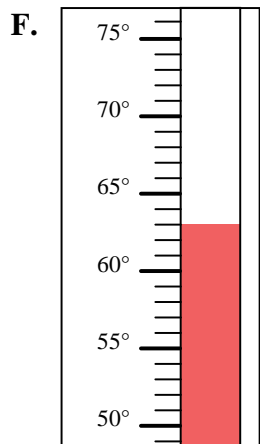
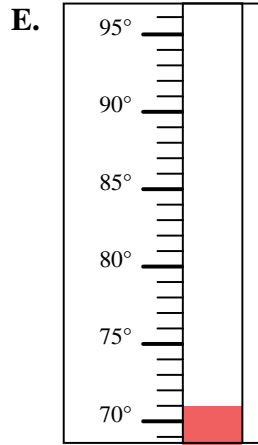
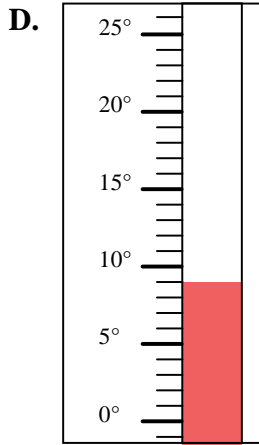
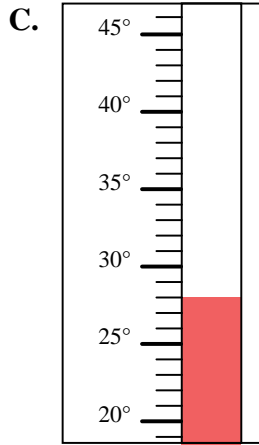
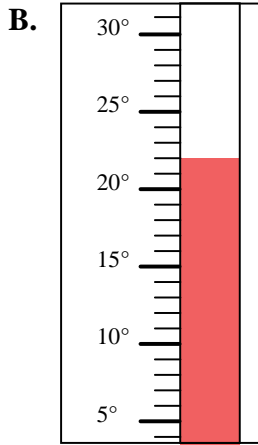
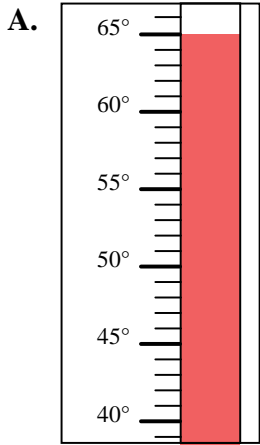


Determine which letter best answers each question.

**Answers**

- 1) Which thermometer best represents the temperature 63°?
- 2) Which thermometer best represents the temperature 46°?
- 3) Which thermometer best represents the temperature 65°?
- 4) Which thermometer best represents the temperature 110°?
- 5) Which thermometer best represents the temperature 77°?
- 6) Which thermometer best represents the temperature 22°?
- 7) Which thermometer best represents the temperature 71°?
- 8) Which thermometer best represents the temperature 28°?
- 9) Which thermometer best represents the temperature 9°?
- 10) Which thermometer best represents the temperature 101°?

1. \_\_\_\_\_
2. \_\_\_\_\_
3. \_\_\_\_\_
4. \_\_\_\_\_
5. \_\_\_\_\_
6. \_\_\_\_\_
7. \_\_\_\_\_
8. \_\_\_\_\_
9. \_\_\_\_\_
10. \_\_\_\_\_





Determine which letter best answers each question.

- 1) Which thermometer best represents the temperature  $63^{\circ}$ ?
- 2) Which thermometer best represents the temperature  $46^{\circ}$ ?
- 3) Which thermometer best represents the temperature  $65^{\circ}$ ?
- 4) Which thermometer best represents the temperature  $110^{\circ}$ ?
- 5) Which thermometer best represents the temperature  $77^{\circ}$ ?
- 6) Which thermometer best represents the temperature  $22^{\circ}$ ?
- 7) Which thermometer best represents the temperature  $71^{\circ}$ ?
- 8) Which thermometer best represents the temperature  $28^{\circ}$ ?
- 9) Which thermometer best represents the temperature  $9^{\circ}$ ?
- 10) Which thermometer best represents the temperature  $101^{\circ}$ ?

**Answers**

1.     **F**
2.     **G**
3.     **A**
4.     **H**
5.     **I**
6.     **B**
7.     **E**
8.     **C**
9.     **D**
10.     **J**

