



Use the chart to answer each question.

Team	Points Scored
Alpha	
Beta	
Gamma	
Delta	
Epsilon	
Zeta	
Kappa	








Answers

1. _____
2. _____
3. _____
4. _____
5. _____
6. _____
7. _____
8. _____
9. _____
10. _____

- 1) Which team scored the fewest points?
- 2) Which team scored the greatest number of points?
- 3) How many points did Gamma score?
- 4) How many teams had more than 30 points?
- 5) How many teams had less than 11 points?
- 6) Which team had more points? Kappa or Zeta?
- 7) Which had fewer points? Delta or Gamma?
- 8) How many more points did Beta score than Delta?
- 9) Which team scored exactly 22 points?
- 10) How many fewer points did Kappa score than Zeta scored?



Use the chart to answer each question.

Team	Points Scored
Alpha	 15
Beta	 43
Gamma	 46
Delta	 41
Epsilon	 22
Zeta	 28
Kappa	 20

- 1) Which team scored the fewest points?
- 2) Which team scored the greatest number of points?
- 3) How many points did Gamma score?
- 4) How many teams had more than 30 points?
- 5) How many teams had less than 11 points?
- 6) Which team had more points? Kappa or Zeta?
- 7) Which had fewer points? Delta or Gamma?
- 8) How many more points did Beta score than Delta?
- 9) Which team scored exactly 22 points?
- 10) How many fewer points did Kappa score than Zeta scored?

Answers

1. Alpha
2. Gamma
3. 46
4. 3
5. 0
6. Zeta
7. Delta
8. 2
9. Epsilon
10. 8