



Determine the value of each set of tally marks.

Answers

1) 

1. _____

2) 


2. _____

3) 

3. _____

4) 

4. _____

5) 

5. _____

6) 

6. _____

7) 

7. _____

8) 

8. _____

9) 

9. _____

10) 


10. _____

11) 

11. _____

12) 

12. _____

13) 

13. _____

14) 

14. _____

15) 

15. _____

16) 

16. _____

17) 

17. _____



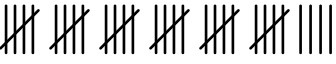


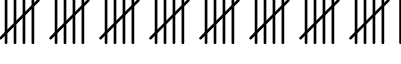

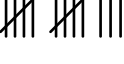

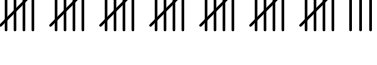

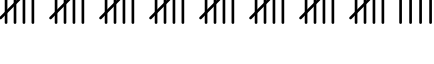
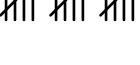
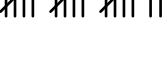
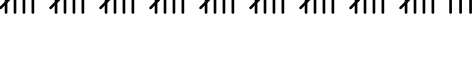



18) 

18. _____



Determine the value of each set of tally marks.

Answers

- | | |
|---|---------------|
| 1)  | 1. <u>19</u> |
| 2)  | 2. <u>31</u> |
| 3)  | 3. <u>34</u> |
| 4)  | 4. <u>36</u> |
| 5)  | 5. <u>16</u> |
| 6)  | 6. <u>41</u> |
| 7)  | 7. <u>20</u> |
| 8)  | 8. <u>13</u> |
| 9)  | 9. <u>7</u> |
| 10)  | 10. <u>38</u> |
| 11)  | 11. <u>50</u> |
| 12)  | 12. <u>44</u> |
| 13)  | 13. <u>15</u> |
| 14)  | 14. <u>17</u> |
| 15)  | 15. <u>48</u> |
| 16)  | 16. <u>28</u> |
| 17)  | 17. <u>27</u> |
| 18)  | 18. <u>42</u> |