



Use the visual model to solve each problem.

Answers


1) There are 4 triangles below.



If you were to take away 2, how many would be left?

$4 - 2 = ?$

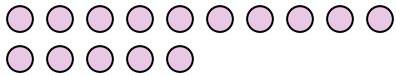
2) There are 20 pentagons below.



If you were to take away 16, how many would be left?

$20 - 16 = ?$

3) There are 15 circles below.



If you were to take away 4, how many would be left?

$15 - 4 = ?$


4) There are 2 squares below.



If you were to take away 1, how many would be left?

$2 - 1 = ?$

5) There are 19 circles below.



If you were to take away 7, how many would be left?

$19 - 7 = ?$

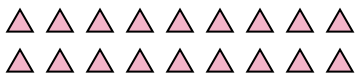
6) There are 3 hexagons below.



If you were to take away 2, how many would be left?

$3 - 2 = ?$

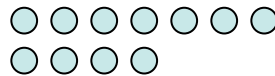
7) There are 18 triangles below.



If you were to take away 15, how many would be left?

$18 - 15 = ?$


8) There are 11 circles below.



If you were to take away 1, how many would be left?

$11 - 1 = ?$


9) There are 17 circles below.



If you were to take away 14, how many would be left?

$17 - 14 = ?$

10) There are 8 circles below.



If you were to take away 5, how many would be left?

$8 - 5 = ?$

1. _____
2. _____
3. _____
4. _____
5. _____
6. _____
7. _____
8. _____
9. _____
10. _____



Use the visual model to solve each problem.


1) There are 4 triangles below.



If you were to take away 2, how many would be left?

$4 - 2 = ?$

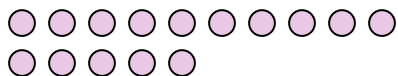
2) There are 20 pentagons below.



If you were to take away 16, how many would be left?

$20 - 16 = ?$

3) There are 15 circles below.



If you were to take away 4, how many would be left?

$15 - 4 = ?$


4) There are 2 squares below.



If you were to take away 1, how many would be left?

$2 - 1 = ?$

5) There are 19 circles below.



If you were to take away 7, how many would be left?

$19 - 7 = ?$

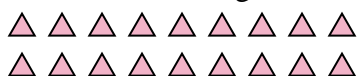
6) There are 3 hexagons below.



If you were to take away 2, how many would be left?

$3 - 2 = ?$

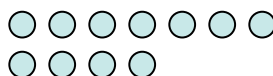
7) There are 18 triangles below.



If you were to take away 15, how many would be left?

$18 - 15 = ?$

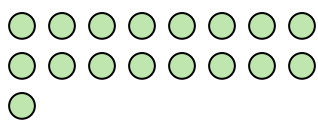
8) There are 11 circles below.



If you were to take away 1, how many would be left?

$11 - 1 = ?$


9) There are 17 circles below.



If you were to take away 14, how many would be left?

$17 - 14 = ?$

10) There are 8 circles below.



If you were to take away 5, how many would be left?

$8 - 5 = ?$

Answers

1. 2

2. 4

3. 11

4. 1

5. 12

6. 1

7. 3

8. 10

9. 3

10. 3