



Use the visual model to solve each problem.

Answers

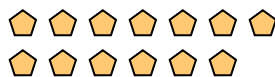
1) There are 6 circles below.



If you were to take away 4, how many would be left?

$6 - 4 = ?$

2) There are 13 pentagons below.



If you were to take away 10, how many would be left?

$13 - 10 = ?$

3) There are 3 hexagons below.



If you were to take away 1, how many would be left?

$3 - 1 = ?$

4) There are 7 circles below.



If you were to take away 1, how many would be left?

$7 - 1 = ?$

5) There are 3 squares below.



If you were to take away 2, how many would be left?

$3 - 2 = ?$

6) There are 9 rectangles below.



If you were to take away 6, how many would be left?

$9 - 6 = ?$

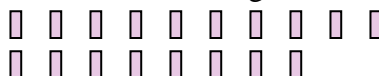
7) There are 12 stars below.



If you were to take away 9, how many would be left?

$12 - 9 = ?$


8) There are 18 rectangles below.



If you were to take away 3, how many would be left?

$18 - 3 = ?$

9) There are 16 triangles below.



If you were to take away 4, how many would be left?

$16 - 4 = ?$

10) There are 15 squares below.



If you were to take away 6, how many would be left?

$15 - 6 = ?$

1. _____
2. _____
3. _____
4. _____
5. _____
6. _____
7. _____
8. _____
9. _____
10. _____



Use the visual model to solve each problem.

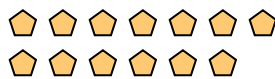
1) There are 6 circles below.



If you were to take away 4, how many would be left?

6 - 4 = ?

2) There are 13 pentagons below.



If you were to take away 10, how many would be left?

13 - 10 = ?

3) There are 3 hexagons below.



If you were to take away 1, how many would be left?

3 - 1 = ?

4) There are 7 circles below.



If you were to take away 1, how many would be left?

7 - 1 = ?

5) There are 3 squares below.



If you were to take away 2, how many would be left?

3 - 2 = ?

6) There are 9 rectangles below.



If you were to take away 6, how many would be left?

9 - 6 = ?

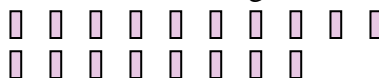
7) There are 12 stars below.



If you were to take away 9, how many would be left?

12 - 9 = ?

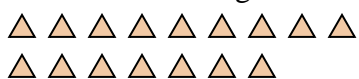
8) There are 18 rectangles below.



If you were to take away 3, how many would be left?

18 - 3 = ?

9) There are 16 triangles below.



If you were to take away 4, how many would be left?

16 - 4 = ?

10) There are 15 squares below.



If you were to take away 6, how many would be left?

15 - 6 = ?

Answers

1. 2

2. 3

3. 2

4. 6

5. 1

6. 3

7. 3

8. 15

9. 12

10. 9