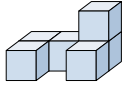








Solve each problem.

**Answers**

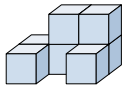
1) If you were looking at the 3d shape from the right side what would you see?

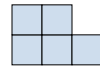





- A.  B.  C.  D. 

1. \_\_\_\_\_

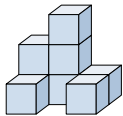
2) If you were looking at the 3d shape from the right side what would you see?







- A.  B.  C.  D. 

2. \_\_\_\_\_

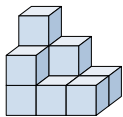
3) If you were looking at the 3d shape from the back what would you see?







- A.  B.  C.  D. 

3. \_\_\_\_\_

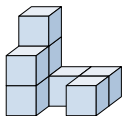
4) If you were looking at the 3d shape from above what would you see?

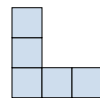





- A.  B.  C.  D. 

4. \_\_\_\_\_

5) If you were looking at the 3d shape from the right side what would you see?



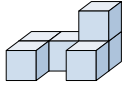
- A.  B.  C.  D. 





5. \_\_\_\_\_



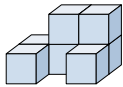
Solve each problem.

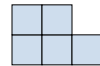



1) If you were looking at the 3d shape from the right side what would you see?



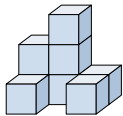
- A.  B.  C.  D. 





2) If you were looking at the 3d shape from the right side what would you see?



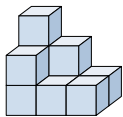
- A.  B.  C.  D. 





3) If you were looking at the 3d shape from the back what would you see?



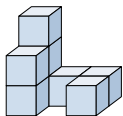
- A.  B.  C.  D. 

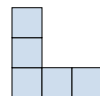



4) If you were looking at the 3d shape from above what would you see?



- A.  B.  C.  D. 

5) If you were looking at the 3d shape from the right side what would you see?



- A.  B.  C.  D. 

**Answers**

1. **A**

2. **C**

3. **D**

4. **B**

5. **B**