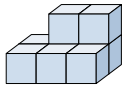




Solve each problem.

Answers

1) If you were looking at the 3d shape from the left side what would you see?

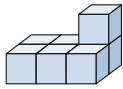


- A. B. C. D.



1. _____

2) If you were looking at the 3d shape from the right side what would you see?

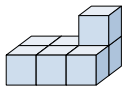


- A. B. C. D.



2. _____

3) If you were looking at the 3d shape from the back what would you see?

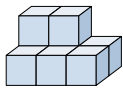


- A. B. C. D.



3. _____

4) If you were looking at the 3d shape from above what would you see?

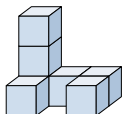


- A. B. C. D.



4. _____

5) If you were looking at the 3d shape from above what would you see?



- A. B. C. D.

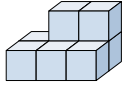






5. _____



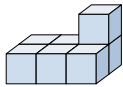
Solve each problem.





1) If you were looking at the 3d shape from the left side what would you see?



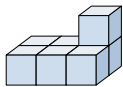
- A. 
- B. 
- C. 
- D. 





2) If you were looking at the 3d shape from the right side what would you see?



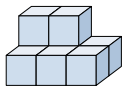
- A. 
- B. 
- C. 
- D. 





3) If you were looking at the 3d shape from the back what would you see?



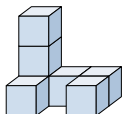
- A. 
- B. 
- C. 
- D. 





4) If you were looking at the 3d shape from above what would you see?



- A. 
- B. 
- C. 
- D. 

5) If you were looking at the 3d shape from above what would you see?



- A. 
- B. 
- C. 
- D. 

Answers

- 1. **A**
- 2. **D**
- 3. **D**
- 4. **B**
- 5. **D**