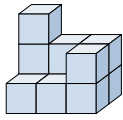








Solve each problem.

Answers

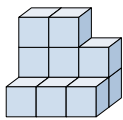
1) If you were looking at the 3d shape from the right side what would you see?


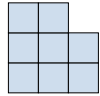




- A.  B.  C.  D. 

1. _____

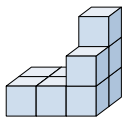
2) If you were looking at the 3d shape from the left side what would you see?


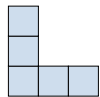




- A.  B.  C.  D. 

2. _____

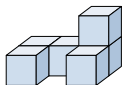
3) If you were looking at the 3d shape from above what would you see?


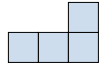




- A.  B.  C.  D. 

3. _____

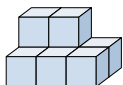
4) If you were looking at the 3d shape from the left side what would you see?







- A.  B.  C.  D. 

4. _____

5) If you were looking at the 3d shape from the right side what would you see?



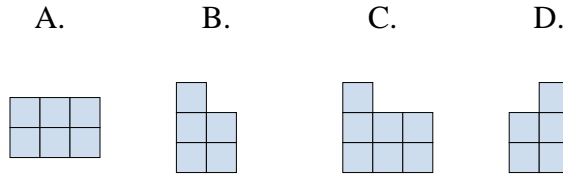
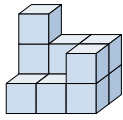
- A.  B.  C.  D. 

5. _____

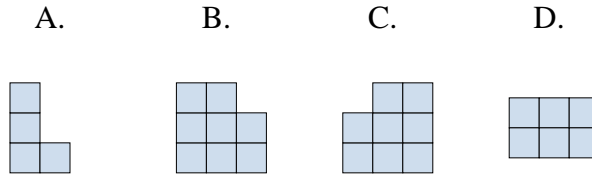
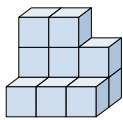


Solve each problem.

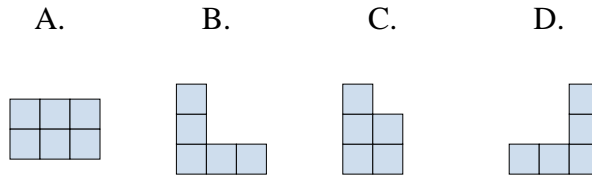
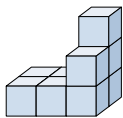
1) If you were looking at the 3d shape from the right side what would you see?



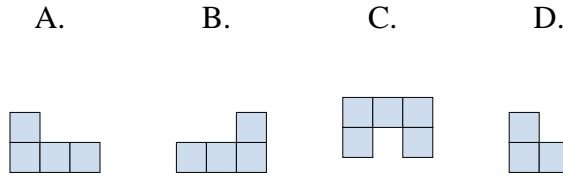
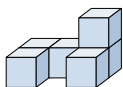
2) If you were looking at the 3d shape from the left side what would you see?



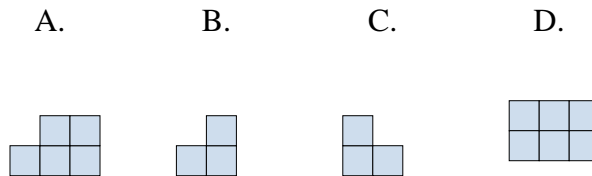
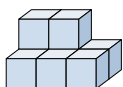
3) If you were looking at the 3d shape from above what would you see?



4) If you were looking at the 3d shape from the left side what would you see?



5) If you were looking at the 3d shape from the right side what would you see?



Answers

- 1. **D**
- 2. **A**
- 3. **A**
- 4. **D**
- 5. **B**