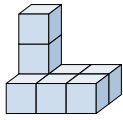








Solve each problem.

Answers

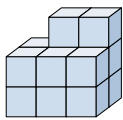
1) If you were looking at the 3d shape from the right side what would you see?







- A.  B.  C.  D. 

1. _____

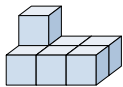
2) If you were looking at the 3d shape from the back what would you see?







- A.  B.  C.  D. 

2. _____

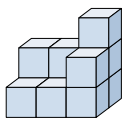
3) If you were looking at the 3d shape from the right side what would you see?

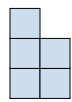

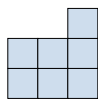
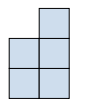


- A.  B.  C.  D. 

3. _____

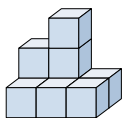
4) If you were looking at the 3d shape from above what would you see?







- A.  B.  C.  D. 

4. _____

5) If you were looking at the 3d shape from the back what would you see?



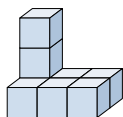
- A.  B.  C.  D. 

5. _____



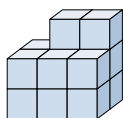
Solve each problem.

1) If you were looking at the 3d shape from the right side what would you see?



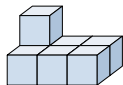
- A.
- B.
- C.
- D.

2) If you were looking at the 3d shape from the back what would you see?



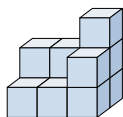
- A.
- B.
- C.
- D.

3) If you were looking at the 3d shape from the right side what would you see?



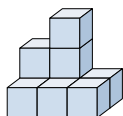
- A.
- B.
- C.
- D.

4) If you were looking at the 3d shape from above what would you see?



- A.
- B.
- C.
- D.

5) If you were looking at the 3d shape from the back what would you see?



- A.
- B.
- C.
- D.

Answers

1. **C**

2. **C**

3. **A**

4. **B**

5. **B**